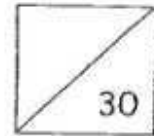


Rosyth School
P1 Mathematics
Topical Test 2 (2008)



Name: _____ ()

Date: 9 April 08

Class: P1. _____

Duration : 40 minutes


Parent's Signature: _____

Answer all the questions. (2 marks each)

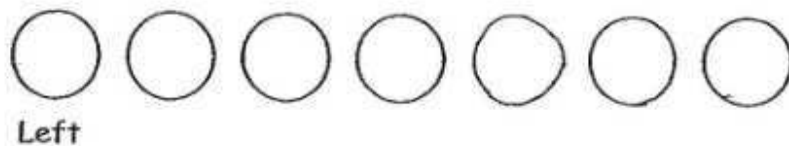
1. Colour the 7th teddy bear from the left.



2. Cross out the fifth penguin from the right.




3. Colour the circle which is 3rd from the right but fifth from the left.



4. Tommy is standing in a row with other children.
He is 4th from the left.
He is 7th from the right.
How many children are there in the row?

There are children in the row.

5. Count the number of apples and write its number in the box.



6. comes before 18.

7. Arrange the numbers in order, from the greatest to the smallest.

16

9

19

20

6


greatest

smallest

8. Fill in the missing numbers.

14 , , 10 , 8 , , 4

9. How many circles are there in this picture?

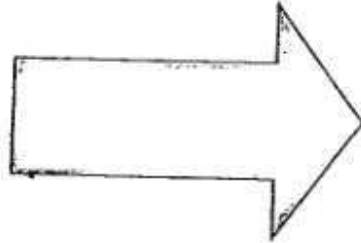


There are circles in this picture.

10. Complete the pattern.



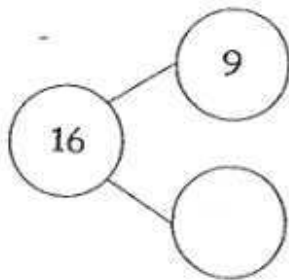
11. What are the two shapes that made up this figure?



Circle the correct names of the two shapes.

triangle square circle rectangle

12. Complete the number bond.



13. is 10 more than 5.

14. $\xrightarrow{-7}$ $\xrightarrow{+3}$

15. Lily has 9 stickers.
She wins 6 stickers in a game.
Her brother gives her 2 more stickers.
How many stickers does Lily have altogether?



Lily has stickers altogether.

-----THE END-----

Have you checked your work?





ANSWER SHEET

EXAM PAPER 2008

SCHOOL : ROSYTH PRIMARY SCHOOL
SUBJECT : PRIMARY 1 MATHEMATICS

- TERM : SA 1

1) $\triangle\triangle\triangle\triangle\triangle\triangle\blacktriangle\triangle\triangle$ 2) $\diamond\diamond\diamond\times\diamond\diamond\diamond\diamond$ 3) $\circ\circ\circ\circ\circ\bullet\circ\circ$

4) There are 10 children in the row 5) 13 6) 17

7) 20, 19, 16, 9, 6 8) 12, 6 9) 6 circles 10) \triangle

11) triangle, rectangle 12) 7 13) 6 14) 13, 16

15) $9+6+2=17$

Lily has 17 stickers altogether.