



**CHIJ Primary (Toa Payoh)**  
**Semestral Assessment 2 (2009)**  
**Mathematics**

Name: \_\_\_\_\_ (     )

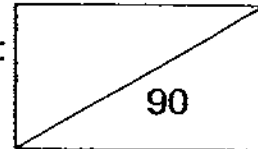
Date: \_\_\_\_\_

Class: Primary 1 \_\_\_\_\_

Time: 1 h 30 mins

Parent's Signature: \_\_\_\_\_

Marks:



**Section A**  
**Multiple Choice Questions (18 x 2m)**

Choose the correct answer and write 1, 2, 3 or 4 in the brackets provided.

1. Look at the pictures below. Which group has the smallest number?

<b>A</b>	
<b>B</b>	
<b>C</b>	
<b>D</b>	

(1) A  
(3) C

(2) B  
(4) D

(     )



2. \_\_\_\_\_ + 6 = 13

(1) 5

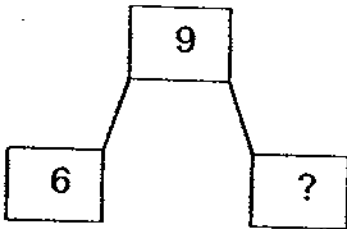
(3) 7

(2) 6

(4) 8

( )

3.



The missing number in the box is \_\_\_\_\_

(1) 9

(3) 3

(2) 2

(4) 15

( )

4. 10 - \_\_\_\_\_ = 4

(1) 6

(3) 14

(2) 7

(4) 4

( )

5. I have 3 pears. I have 4 more apples than pears. How many fruits do I have altogether?

(1) 11

(3) 7

(2) 10

(4) 4

( )

6. Mandy bakes 20 tarts. She gives away some of them and has 11 left. How many tarts does she give away?

(1) 9

(3) 11

(2) 10

(4) 31

( )



7. Look at the numbers below.

3 , 5 , 8 , ? , 17

The missing number is \_\_\_\_\_.

(1) 10

(2) 11

(3) 12

(4) 13

( )

8.



dog



rabbit



crocodile



bird



fish

The rabbit is \_\_\_\_\_ from the right.

(1) first



(2) second

(3) third

(4) fourth

( )

9.



There are 12 muffins. Put them equally into 3 bowls.

There are \_\_\_\_\_ muffins in each bowl.

(1) 6

(2) 12

(3) 3

(4) 4

( )



10. What is one more than fifty – nine?

(1) 61

(2) 60

(3) 59

(4) 58

( )

11. 4 groups of 3 is the same as \_\_\_\_\_.

(1)  $3 \times 3 \times 3 \times 3$

(2)  $4 \times 3$

(3)  $3 + 4$

(4)  $4 \times 4$

( )

12. \_\_\_\_\_ is between 78 and 80.

(1) 76

(2) 77

(3) 79

(4) 81

( )

13. 4 tens 2 ones + 2 tens 2 ones = \_\_\_\_\_

(1) 22

(2) 42

(3) 60

(4) 64

( )

14.  $63 + 17 =$  \_\_\_\_\_ tens

(1) 8

(2) 40

(3) 80

(4) 4

( )

15. Benny has 82 stickers. Sally has 16 fewer stickers than Benny. Sally has \_\_\_\_\_ stickers.

(1) 64

(2) 66

(3) 70

(4) 98

( )



16. Amy is thinking of a two – digit number.  
The digit in the tens place is 2 less than 4.  
The digit in the ones place is 5 more than the digit in the tens place.  
What is the two – digit number that Amy is thinking of?

(1) 27  
(3) 43

(2) 29  
(4) 45

( )

17.



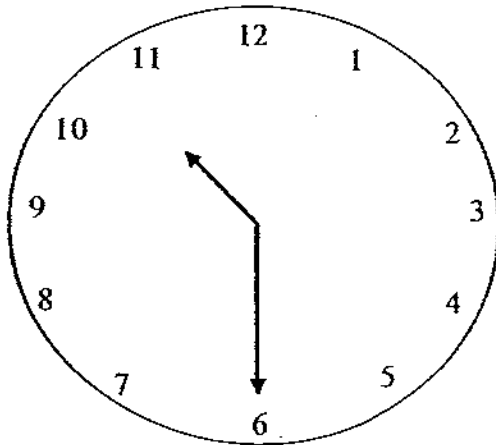
How much money is in the set of coins?

(1) 35¢  
(3) 55¢

(2) 45¢  
(4) 65¢

( )

18.



The time is \_\_\_\_\_.

(1) 6 o'clock  
(3) 10 o'clock

(2) half past 6  
(4) half past 10


( )



**Section B**

**Fill in the blanks with the correct answers. (21 x 2m)**


19. Look at the pattern below.



The missing shape is



Look and study the picture below and answer Questions 20 and 21.




 stands for 1 unit.

20. Ribbon B is \_\_\_\_\_ units more than Ribbon C.

21. The total length of the 3 ribbons is \_\_\_\_\_ units.



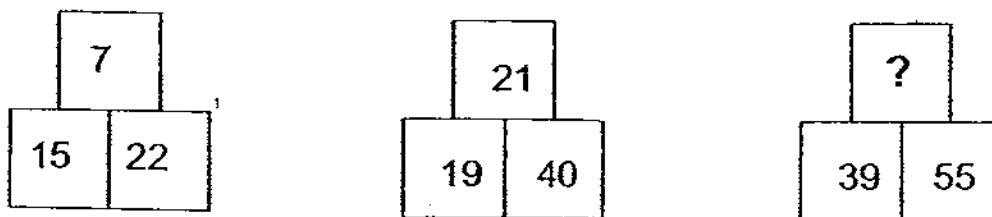
The graph below shows the number of books read by 4 children.  
Study it carefully and answer Questions 22 and 23.



22. Ethan read \_\_\_\_\_ more books than Mike.

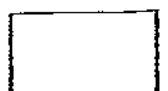
23. The 4 children read \_\_\_\_\_ books altogether.

24.



The missing number is \_\_\_\_\_.

25.  $100 - 46 =$  \_\_\_\_\_




26. David, Anne, Tom and Cathy are classmates. Tom is taller than David. Anne is shorter than David. Cathy is shorter than Tom but taller than David. Who is the shortest?

---

The shortest person is \_\_\_\_\_.

27. **Circle** the fifth flower from the left and **colour** the last flower from the right.



28. Mr and Mrs Sim have 4 children. When their children grew up and got married, they had 2 children each. How many people are there in the family altogether?

There are \_\_\_\_\_ people in the family altogether.

29. How many cherries are there on the cakes altogether?

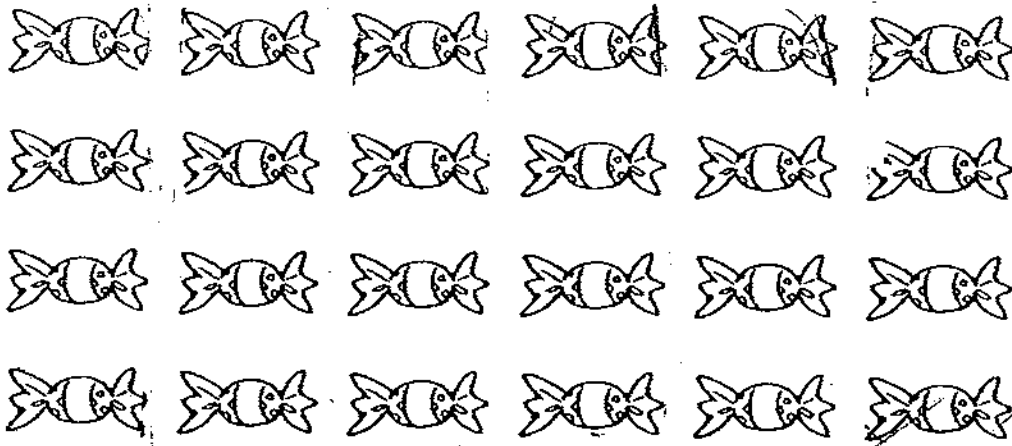


Write the addition sentence:






30. 6 children share 24 sweets equally. How many sweets does each child get?

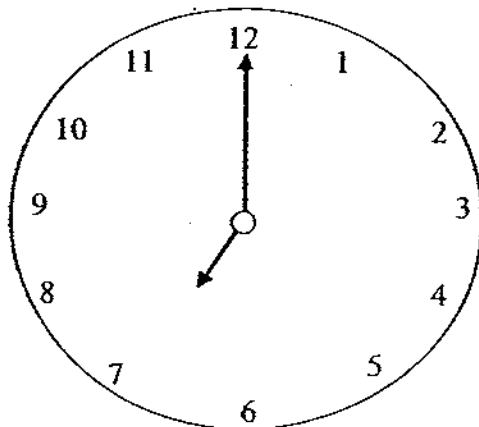


Each child gets \_\_\_\_\_ sweets.

31. Mike puts 12 balls into 3 boxes equally. Draw and show clearly how many balls are there in each box.



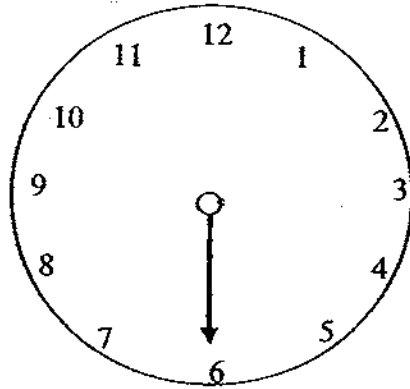
32. Study the clock below and answer the question.



The time is \_\_\_\_\_.



33. The time is half past 3. Draw the missing hand on the clock below.


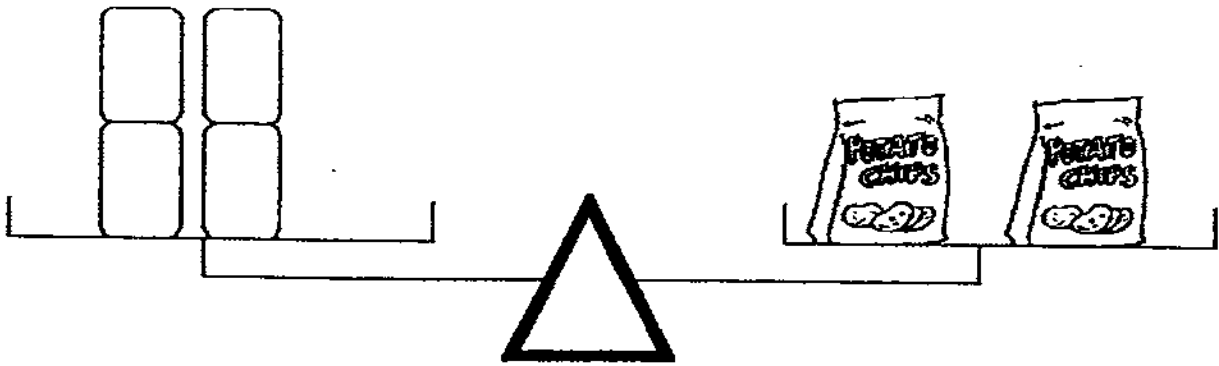


34. What is the largest 2 – digit number that has 3 as one of its digit?

The number is \_\_\_\_\_.




Look at the pictures below and answer Questions 35 and 36.



Each  stands for 1 unit.

35. The mass of the doll is \_\_\_\_\_ units.

36. The total mass of a pack of potato chips and the doll is \_\_\_\_\_ units.



37. Arrange the numbers below from the **greatest** to the **smallest**.

45

67


63

98

59

\_\_\_\_\_



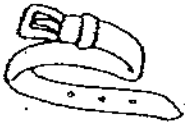

38. How many locks are there altogether?



Write a multiplication sentence :

$$\square \times \square = \square$$

Look at the pictures below and answer Question 39.

			
clock	doll	belt	pen
\$14	\$16	\$5	\$4

39. Sally wants to spend exactly \$20. Which 2 items should she buy?

She should buy a \_\_\_\_\_ and a \_\_\_\_\_



**Section C (4 x 3m)**

**Solve these problem sums. Show your working.**

40. Jane has \$50. She buys a dress for \$23. How much money does she have left?

\_\_\_\_\_

She has \$ \_\_\_\_\_ left.

Working

41. Mrs Tan made 92 cupcakes for tea. She invited 47 adults and 26 children. Everyone except Mrs Tan ate a cupcake.

a) How many people did Mrs Tan invite for tea?

\_\_\_\_\_

Mrs Tan invited \_\_\_\_\_ people for tea.

b) How many cupcakes were left after tea?

\_\_\_\_\_

There were \_\_\_\_\_ cupcakes left after tea.

Working



42. A bird has 2 legs. How many legs do 6 birds have?

Working

\_\_\_\_\_

6 birds have \_\_\_\_\_ legs altogether.


43. There were 100 pupils in the library. 28 of them went back to class. Another 15 pupils came to the library. How many pupils were there in the library?

Working


\_\_\_\_\_  
\_\_\_\_\_

There were \_\_\_\_\_ pupils in the library.

-----End of Paper-----  
*Striving for Accuracy'*



Setter: Mrs Angelique Goh  
Vetter: Ms Cindy Oo




# ANSWER SHEET

**EXAM PAPER 2009**

**SCHOOL : CHIJ PRIMARY**  
**SUBJECT : PRIMARY 1 MATHEMATICS**

**TERM : SA2**



Q1	Q2	Q3	Q4	Q5	Q6	Q7	Q8	Q9	Q10	Q11	Q12	Q13	Q14	Q15	Q16	Q17
B	3	3	1	2	1	3	4	4	2	2	3	4	1	2	1	3

Q18	Q19	Q20	Q21	Q22	Q23	Q24	Q25
4	<input type="checkbox"/>	2	12	4	29	16	54

26) Anne    27) ~~88888888~~    28) 14    29)  $6+6+6+6=24$     30) 4

31) 4 balls in each box    32) 7 o'clock    33)     34) 93

35) 6    36) 8    37) 98, 67, 63, 59, 45

38)  $7 \times 2 = 14$     39) pen, doll

40)  $\$50 - \$23 = \$27$   
She has \$27 left.

41) a)  $47 + 26 = 73$   
Mrs Tan invited 73 people for tea.  
b)  $92 - 73 = 19$   
There were 19 cupcakes left after tea.

42)  $6 \times 2 = 12$   
6 birds have 12 legs altogether.

43)  $(100 - 28) + 15 = 87$   
There were 87 pupils in the library.