

Methodist Girls' School (Primary)

2006 Semestral Assessment 1

Primary 1

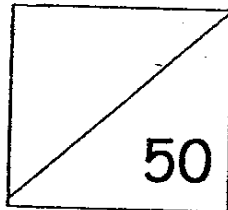
Mathematics

Name : \_\_\_\_\_ ( )

Class : \_\_\_\_\_

Date : \_\_\_\_\_

Marks :



Parent's Signature : \_\_\_\_\_

**Section A**

**Mental Sums ( 6 x ½ marks )**

1. \_\_\_\_\_

2. \_\_\_\_\_

3. \_\_\_\_\_

4. \_\_\_\_\_

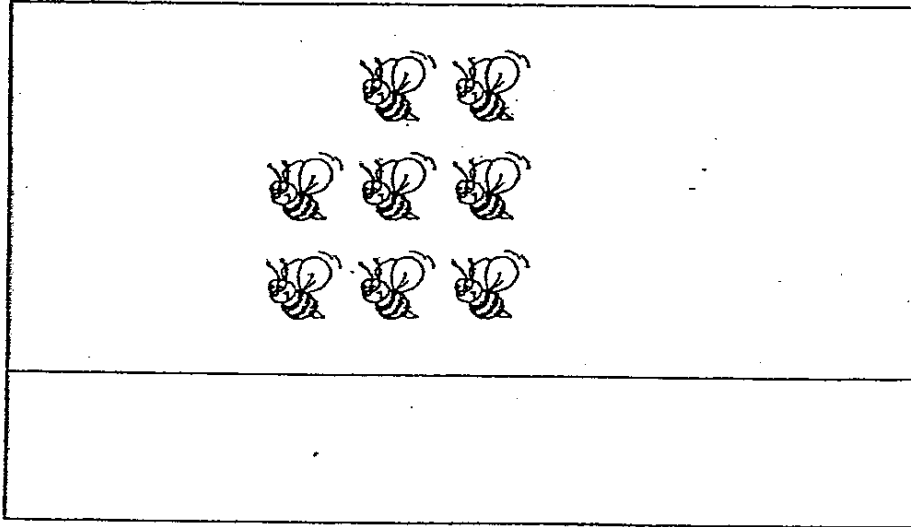
5. \_\_\_\_\_

6. \_\_\_\_\_

**Section B ( 32 X 1 mark )**


Count and write the numbers in words in the boxes below .

7.



A rectangular box containing 8 bees arranged in three rows: two in the top row, three in the middle row, and three in the bottom row. Below the box is a horizontal line, and below that is a larger empty rectangular box for writing the answer.

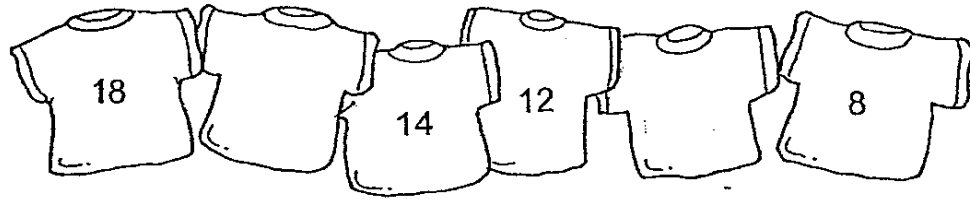
8.



A rectangular box containing 15 cupcakes arranged in two groups. The left group has 10 cupcakes in three rows (4, 4, 2). The right group has 5 cupcakes in three rows (2, 1, 2). Below the box is a horizontal line, and below that is a larger empty rectangular box for writing the answer.


Fill in the missing numbers.

9.




Look at the pictures and fill in the missing numbers.

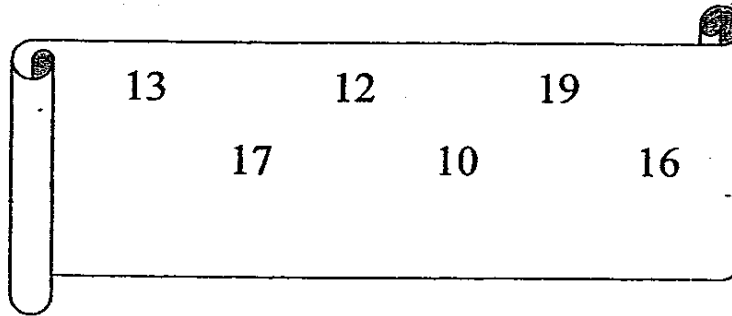
10.



11.



For questions 12 and 13, look at the following numbers and fill in the boxes with the correct answers.




12. 17 is smaller than





13.

is greater than 12 but smaller than 16.

14. Colour the two numbers that make 20.



Use the numbers below to write 2 number sentences.



15.

$$\square + \square = \square$$

16.

$$\square - \square = \square$$

Match.

17.

$$8 + 9$$

$$15 - 4$$

18.

$$3 + 8$$

$$20 - 3$$

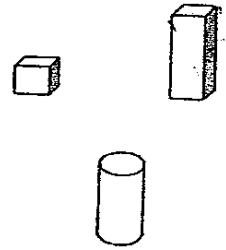
19.

$$2 + 8$$

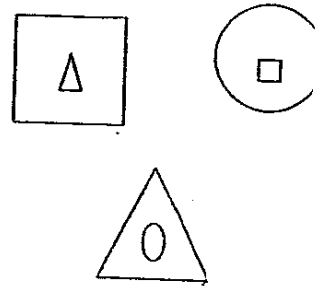
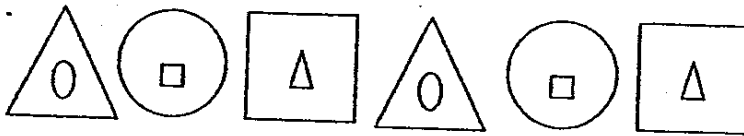
$$19 - 9$$

Circle the shape that comes next.

20.




21.



22. 1 more than 9 is

23. 16 is 1 less than

Look at the picture and fill in the boxes below.



24. There are  circles .

25. There are  squares.

26. There are  more triangles than rectangles.



Look at the pictures below.



Left

Right


27. Colour the 3<sup>rd</sup> crab from the right.

28. Cross out the 4<sup>th</sup> crab from the left.

29. Colour the 6<sup>th</sup> letter.

HAMBURGERS


10<sup>th</sup>



30. The snail is in the  position.

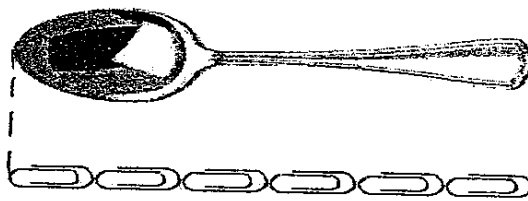
31. The  is in the 2<sup>nd</sup> position.


Look at the picture and fill in the boxes with the correct answers.



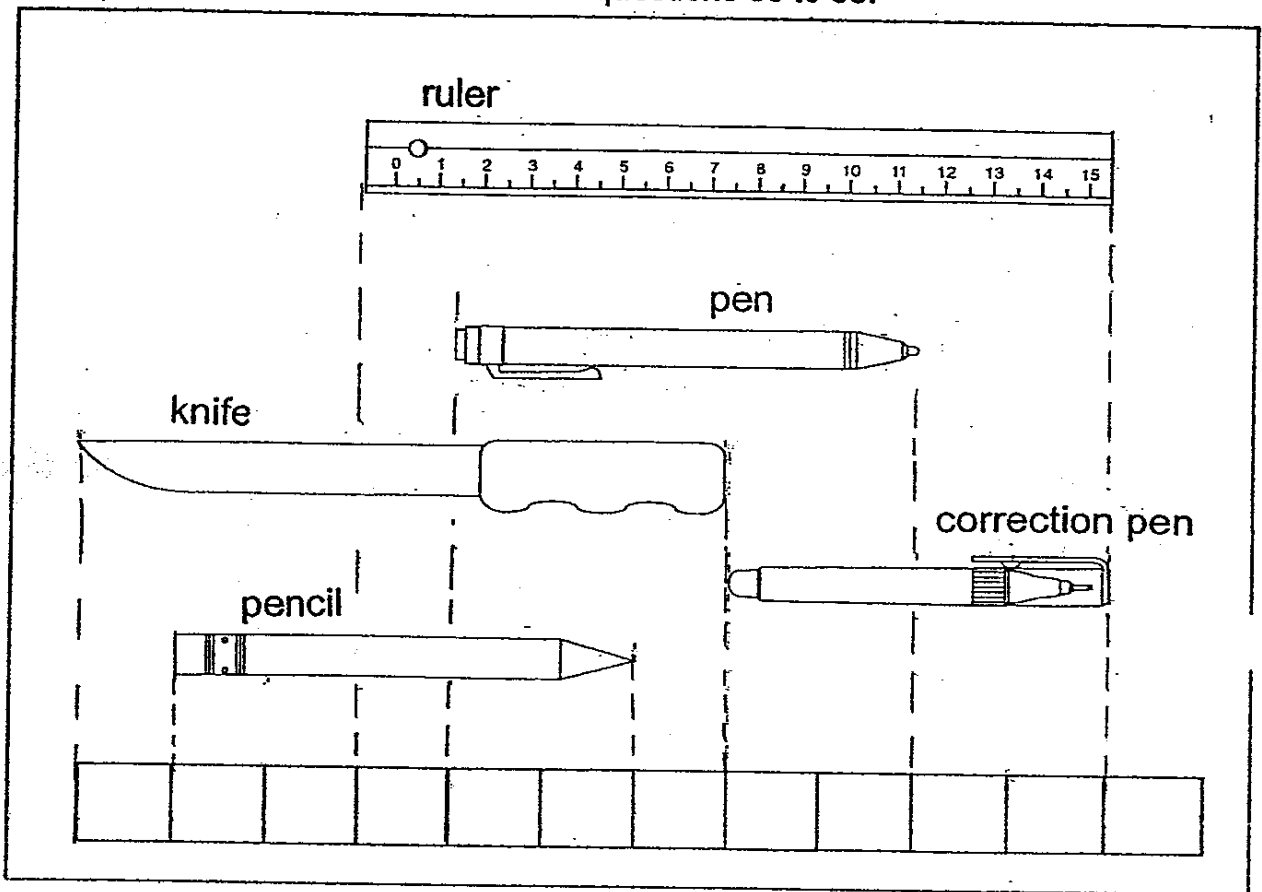
32. The giraffe is   $\triangle$  tall.

33. The tree is taller than the giraffe by   $\triangle$ .



34. The spoon is   long.

Look at the picture below and answer questions 35 to 38.



1  stands for 1 unit

35. The pencil is  units long.
36. The pen is shorter than the ruler by  units.
37. The knife is  units longer than the correction pen.
38. The  is as long as the


**Section C (5 x 3 marks)**

**Do the sums carefully. Show your working clearly.**

39. Mother bakes 11 cakes in the morning.

She bakes 7 cakes in the afternoon.

How many cakes does Mother bake altogether?



$$\square \bigcirc \square = \square$$

Mother bakes \_\_\_\_\_ cakes altogether.

40. Pamela has 13 books.

She gives 6 books away.

How many books has she left?

$$\square \bigcirc \square = \square$$

Pamela has \_\_\_\_\_ books left.

12

41. Raju uses 17 shapes to make a picture.  
 His picture has 9 shapes more than Ali's.  
 How many shapes does Ali use for his picture?

$$\square \bigcirc \square = \square$$

Ali uses \_\_\_\_\_ shapes for his picture.

42. Jennifer buys 8 stamps at the Philatelic Museum.  
 She buys 7 stamps fewer than Susan.  
 How many stamps does Susan buy?



8 stamps



?

$$\square \bigcirc \square = \square$$

Susan buys \_\_\_\_\_ stamps.

43. Kelly has 9 stickers.

She buys 2 more stickers.

Mother gives her 5 more.

How many stickers does Kelly have in the end?

$$\square \bigcirc \square \bigcirc \square = \square$$

Kelly has \_\_\_\_\_ stickers in the end.

# Answer Sheets

## Methodist Girls' Pri 1 SA1 / 2006 Mathematics

### Mental Sums

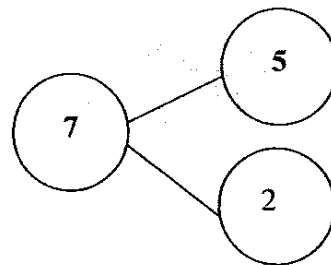
1. twelve 2. 17 3. 10 4. 12 5. 13 6. 8

7. 8

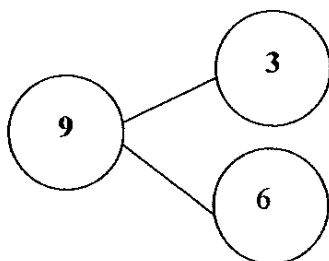
8. 15

9. 18, 16, 14, 12, 10, 8

10.




11.



12. 17 is smaller than 19

13. 13 is greater than 12 but smaller than 16

14.

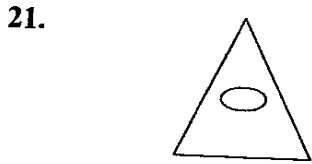

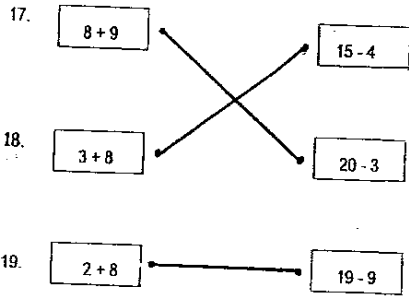


$$6 + 14 = 20$$

15.  $9 - 4 = 13$

16.  $13 - 9 = 4$





22.  $1 + 9 = 10$

23.  $17 - 1 = 16$

24. Circles = 8

25. Squares = 2

26. Triangles = 8 Rectangles = 5  
 $8 - 5 = 3$



30. Snail = 5<sup>th</sup> position

31. The elephant is in the 2<sup>nd</sup> position.

32. Giraffee = 10  $\Delta$

33. Tree = 12 Giraffee = 10  
 $12 - 10 = 2\Delta$

34. The spoon is 6  $\ominus$

35. Pencil = 5  $\square$

36. Pen = 5 Ruler = 8  
 $8 - 5 = 3\square$

37. Knife = 7 Correction pen = 4  
 $7 - 4 = 3\square$

38. The pencil is as long as the pen

=  
16a.

39.  $11 + 7 = 18$  cakes  
Mother bakes 18 cakes altogether.
40.  $13 - 6 = 7$  books  
Pamela has 7 books left.
41.  $17 - 9 = 8$   
Ali uses 8 shapes for his picture.
42.  $8 + 7 = 15$  stamps  
Susan buys 15 stamps.
43.  $9 + 2 + 5 = 16$   
Kelly has 15 stickers in the end.