

Methodist Girls' School (Primary)
2007 Mid Year Examination
Primary 1
Mathematics

Name: _____ ()

Class: 1. _____

Date: 8 May 2007

Marks: _____/100

Parent's Signature: _____




Section A (6 x 1 m)

Count and write the number of objects in each box.




1)



2)



3)




Count the number of objects.

Then write the number in words in the box.

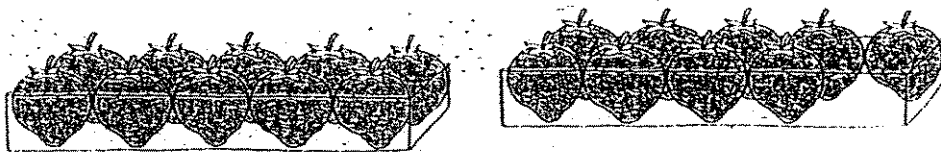
4)



5)



6)



Section B (38 X 2 m)

Study the number patterns and fill in the missing numbers.

7) 4, 3, 2, , .

8) , , 17, 18, 19.

9) 6, 8, , , 14.

Fill in the boxes with the correct answers.


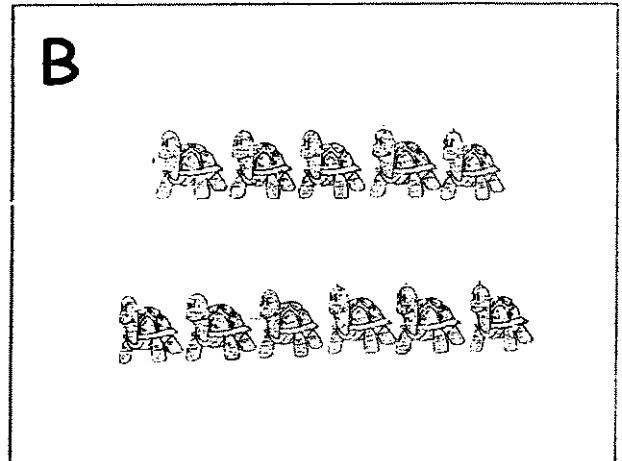

10) 13 is ten ones

11) more than 5 is 7.

12) less than 20 is 19.

13) and make 9.

Compare the following sets of animals.
Then fill in the blanks (Questions 14 to 16).



14) Set and Set have the same number of animals.

15) There are more turtles than camels.

16) There are fewer monkeys than elephants.

Use the numbers below for Questions 17 to 20.

20	7	12
13	2	

17) The smallest number is .

18) The greatest number is .

19) is greater than 7 but less than 13.

20) and make 20.

Draw lines to match the same answers
(Questions 21 to 24).

10 less than 20 ●

● 14 - 10

3 more than 13 ●

● 5 + 5



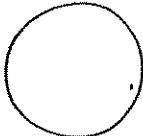




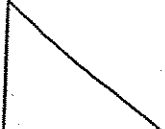



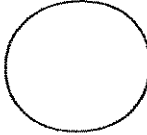



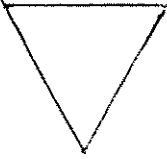
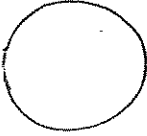


5 less than 9 ●

● 20 - 2


8 more than 10 ●

● 10 + 6

Colour the shape that matches each object.
Questions 25 to 28.

25) 	   
26) 	  
27) 	   
28) 	   

How many of each shape make up the picture below?
Write the answers in the boxes (Questions 29 to 32).



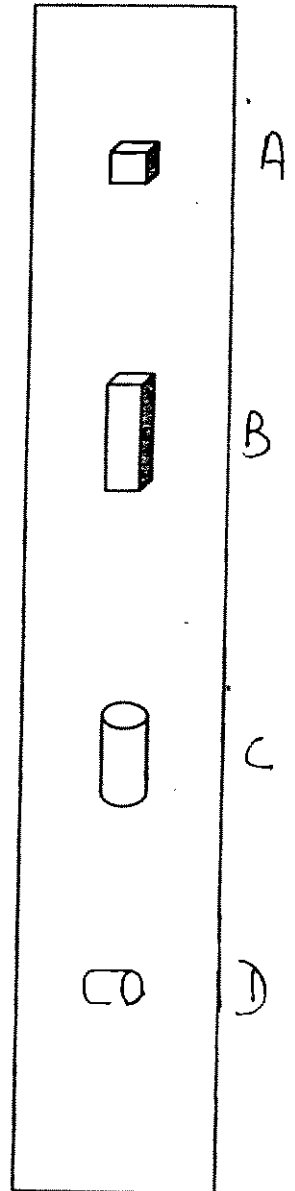
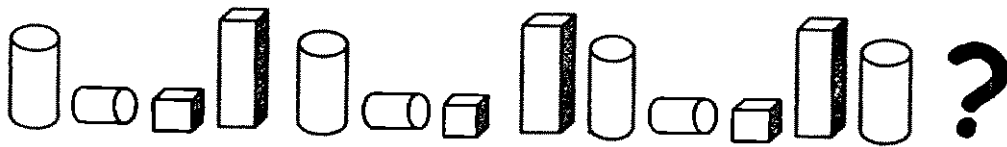
29) There are squares.


30) There are triangles.

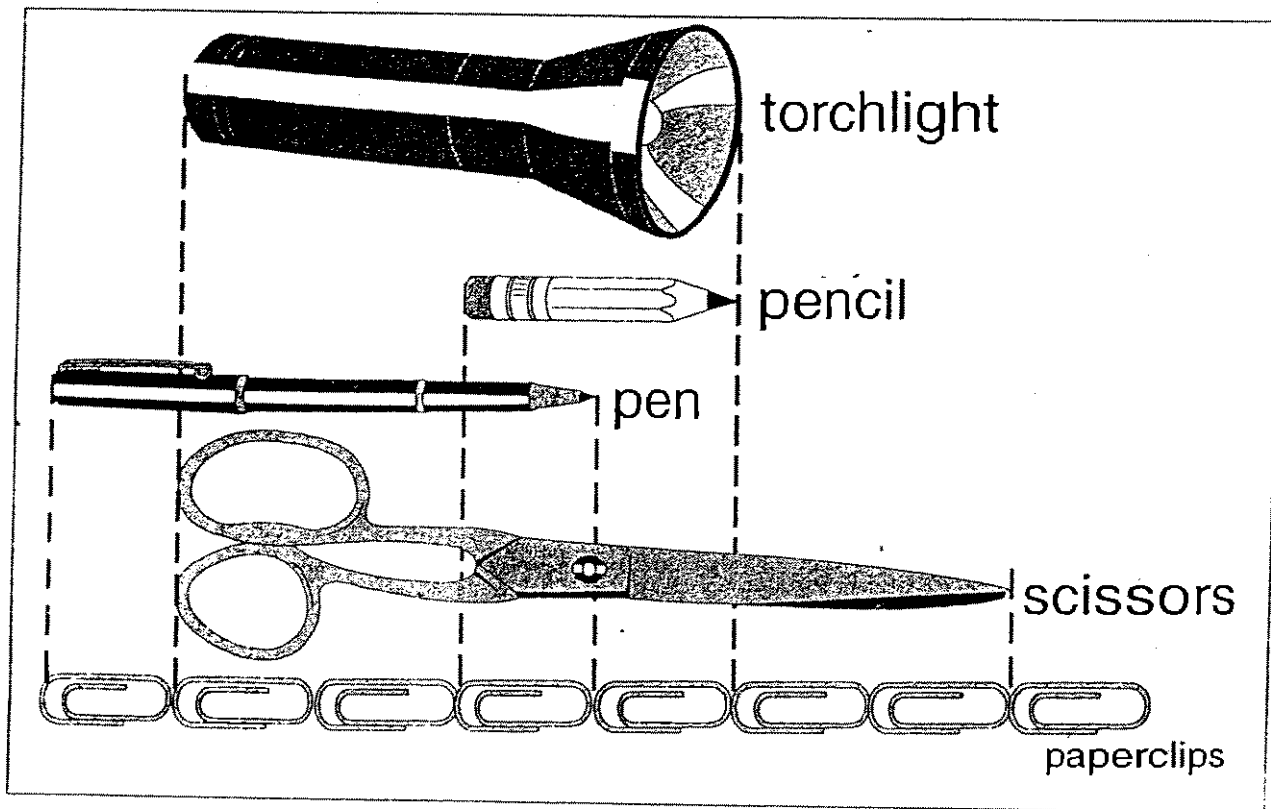
31) There are circles.

32) There are rectangles.

33) Study the pattern. What comes next?
Circle the correct shape from the box.



Study the figure below. Use  as 1 unit.
Then fill in each blank with the correct answer.
(Questions 34 to 37)




34) The pair of scissors is  long.

35) The pen is longer than the

36) The torchlight is shorter than the .

37) The is as long as the .

Some children are standing in a queue.
Study the picture and answer the following questions.




38) Circle the first child in the queue.

39) How many children are standing behind Mary?


40) In what position is Mary?

41) If you join the queue now, what position will you be in?


42) Colour the third umbrella from the right.



43) Circle the child on the highest floor.




44) Draw a taller tree.



Section C (6 × 3 m)

Do the story sums.

- 45) 5 ducks are swimming.
3 ducks are on land.
How many ducks are there altogether?

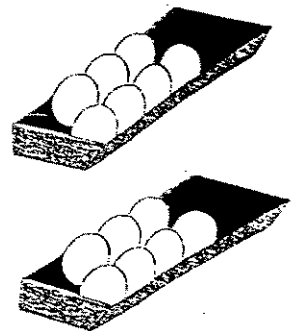


$$\square \quad \bigcirc \quad \square = \square$$

There are _____ ducks altogether.

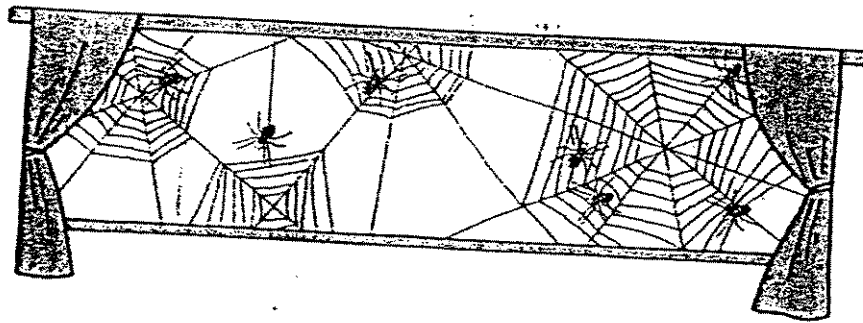
-
- 46) There are 14 eggs.
Mother uses 9 eggs to bake a cake.
How many eggs are left?

$$\square \quad \bigcirc \quad \square = \square$$



There are _____ eggs left.


- 47) 7 spiders are on 4 webs.
How many more spiders than webs are there?



$$\square \quad \bigcirc \quad \square = \square$$

There are _____ more spiders than webs.

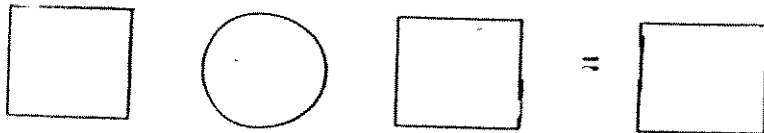
-
- 48) There are 14 flowers.
3 of them are black.
How many are white?



$$\square \quad \bigcirc \quad \square = \square$$

There are _____ white flowers.

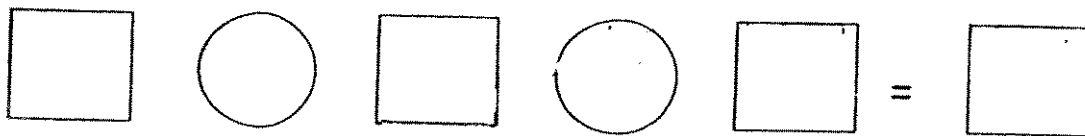
- 49) Father used 6 stamps and had 8 stamps left.
How many stamps did he have at first?



A visual equation consisting of a square, a circle, a square, an equals sign, and a square.

Father had _____ stamps at first.


-
- 50) There are 4 boys, 5 girls and 6 adults in the bus.
How many people are in the bus altogether?



A visual equation consisting of a square, a circle, a square, a circle, a square, an equals sign, and a square.

There are _____ people in the bus altogether.

- The End -



ANSWER SHEET

M G S PRIMARY SCHOOL - PRIMARY 1 MATHEMATICS 2007
SEMESTRAL ASSESSMENT (1)

1. 6 21) to 24)

2. 14

3. 17

4. eight

5. thirteen

6. nineteen

7. 1, 0

8. 15, 16

9. 10, 12

10. 1, 3

11. 2

12. 13

13. A, C

14. 4

15. 2

16. 2

17. 20

18. 12

19. 13, 7

25)



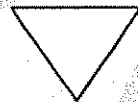
26)



27)



28)



29) 4

30) 4

31) 8

32) 3

33) D

34) 6

35) pencil

36) Scissors

37) pen, torchlight

38) 1st

39) 3

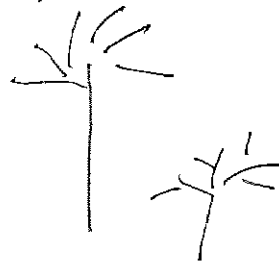
40) 9th

41) 9th

42) § § § § § × § §

43) 5 floor

44)



$$45) 5+3=8$$

There are 8 ducks altogether.

$$46) 14-9=5$$

There are 5 eggs left.

$$47) 7-4=3$$

There are 3 more spiders than webs.

$$48) 14-3=11$$

There are 11 white flowers.

$$49) 6+8=14$$

Father had 14 stamps at first.

$$50) 4+5+6=15$$

There are 15 people in the bus altogether.