



CHIJ OUR LADY QUEEN OF PEACE

**SEMESTRAL ASSESSMENT 2
2007**

**PRIMARY 1
MATHEMATICS**

/100

Name : _____ ()

Class : Primary 1 _____

Date: _____

Total number of Questions : 45

Total time : 1h 15min


Parent's Signature : _____

<p>DO NOT OPEN THIS BOOKLET UNTIL YOU ARE TOLD TO DO SO. FOLLOW ALL INSTRUCTIONS CAREFULLY. ANSWER ALL QUESTIONS.</p>

PART 1 : (10 X 2 marks)

For questions 1 to 10, choose the correct answer and write its number (1, 2, 3 or 4) in the bracket provided.

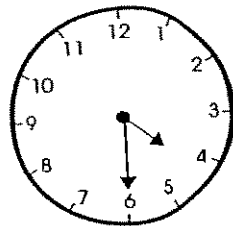
1. This picture shows _____.



- (1) 3 threes
- (2) 2 groups of 3
- (3) $2 + 2 + 2 + 2$
- (4) 3×2

()

2. What time does the clock below show?

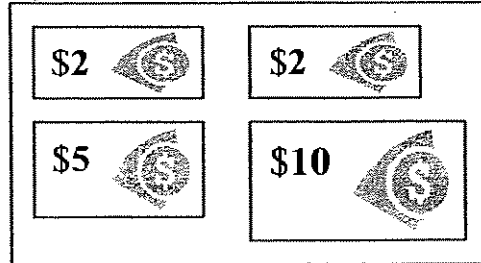


- (1) 4 o'clock
- (2) 5 o'clock
- (3) half past 4
- (4) half past 5

()

3. Lyn has the amount of money shown below. She will not be able to buy the _____.

Lyn's money



School bag \$20



Book \$19



Calculator \$18



Purse \$7

- (1) school bag
- (2) book
- (3) calculator
- (4) purse

()

4. There are 2 thumbs on each pair of hands. How many thumbs do 8 children have altogether?

- (1) 32
- (2) 16
- (3) 8
- (4) 4

()

5. Jenny bought a sweet and a balloon. How much did she spend altogether?



65¢



35¢

- (1) \$1
- (2) 95¢
- (3) 90¢
- (4) \$100

()

6. Add 7 to 6. The answer is 1 ten _____ ones.

- (1) 13
- (2) 6
- (3) 3
- (4) 17

()

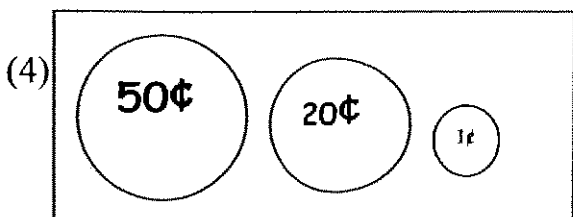
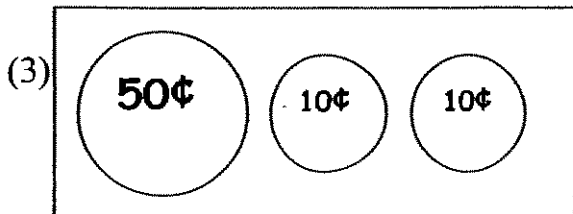
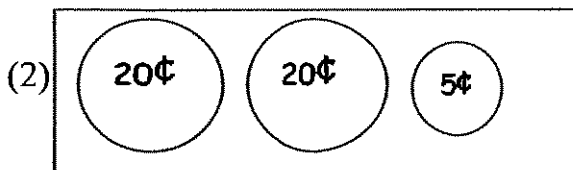
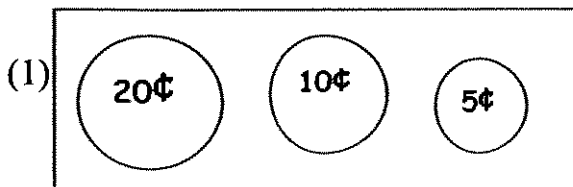
7. There are 12 brushes. There are 2 girls and 1 boy.
Share them equally among the children.
How many brushes does each child get?



- (1) 15
- (2) 12
- (3) 6
- (4) 4

()

8. Which set of coins has the largest value?



()


9. The sum of two numbers is 14. If one of the numbers is 6, what is the other number?

- (1) 7
- (2) 8
- (3) 10
- (4) 20


()

10. Look at the pictures below. Which of the following shows the correct order of Tim's activities?


(a)




(b)



(c)



(d)



- (1) c, a, d, b
- (2) c, d, a, b
- (3) c, a, b, d
- (4) c, b, a, d

()

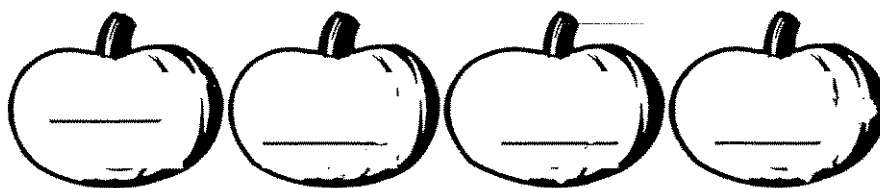
Write your answers on the blanks provided.

11. What is $18 - 4$? Write your answer in words.

12. $3 + 10 = 19 - \boxed{?}$


13. Arrange these numbers in order. Begin with the **largest** number.

20 7 15 10

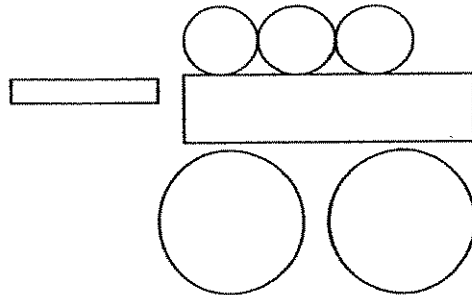


largest

14. Colour 4 stars. How many are **not coloured**?



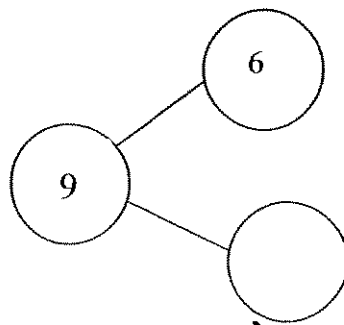
15. Look at the picture below.



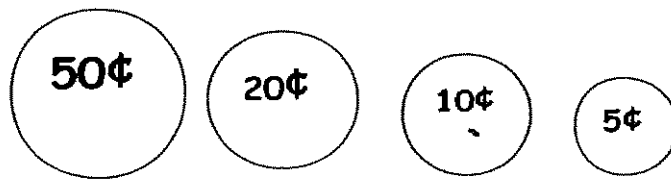
Name the two shapes that are used.

_____ and _____

16. Complete the number bond.

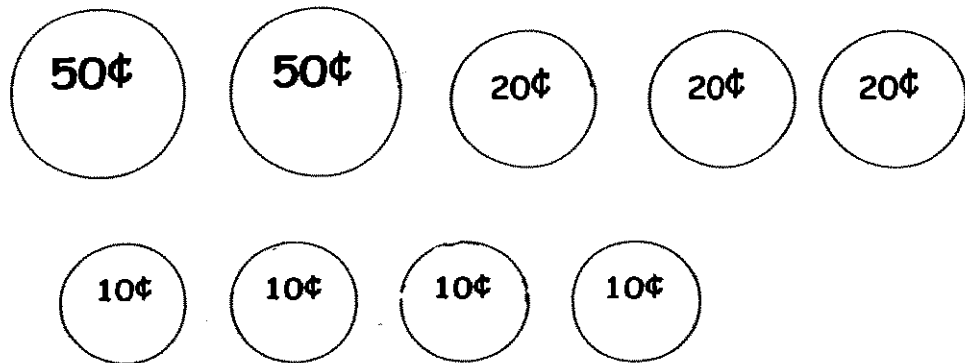


17. Find the total value of the coins below.




_____¢

18. Ring 5 coins to make up \$1.



19. Look at the pattern below. Find the values of A and B.

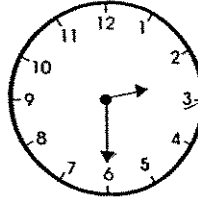


A _____

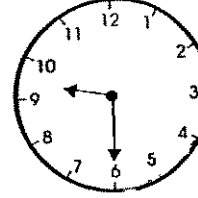
B _____

20. Match the clock to the correct time.

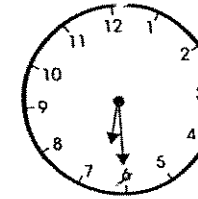
9.30



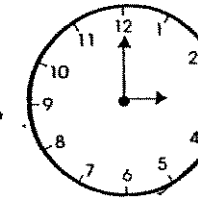
Half past 2



3.00



Half past 6

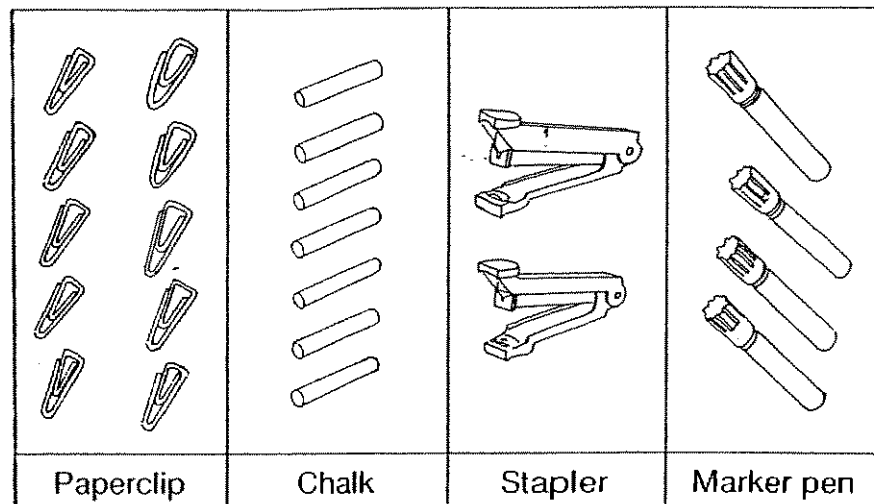


21. Circle the 2nd apple from the right and cross the sixth apple from the left.



Study the graph below carefully and answer questions 22-24.

Things Kim has in her stationery box.

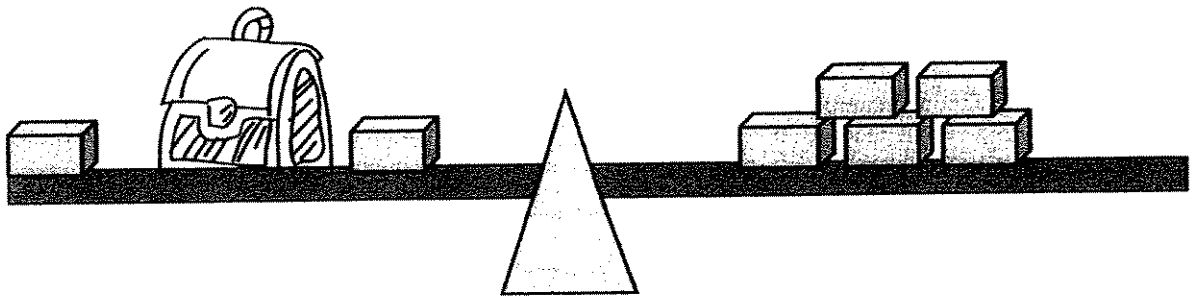
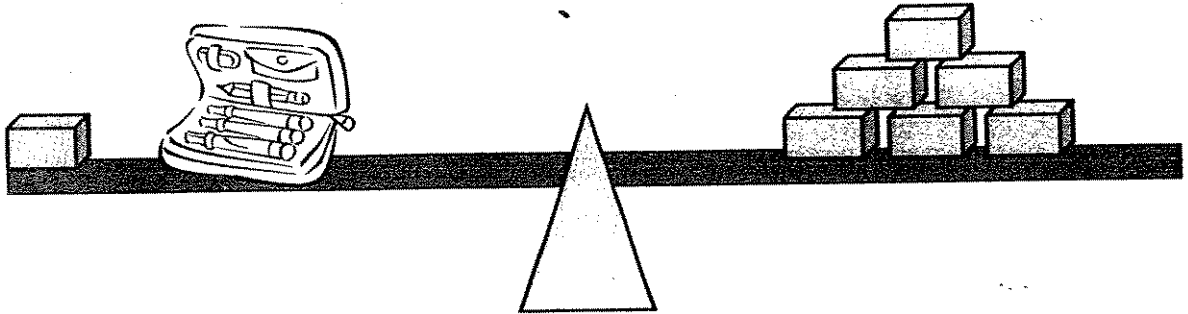


22. How many fewer staplers than pieces of chalk are there in the box?




23. What is the total number of marker pens and paperclips?

24. How many more paperclips than pieces of chalk are there in the box?

25. Study the two balances below. Which is heavier, the pencil case or the handbag?



26. Jane has 4 books, Lily has 5 books and Gina has 9 books. If Jane's mother asks the three girls to share their books equally, how many books will each girl get?


Jane	
Lily	
Gina	

_____ books

27. There are 20 children in a class. Their PE teacher asks them to get into groups of 5. How many groups will there be?



28. Look at the picture. Write 1 addition and 1 subtraction sentence.



a) + =

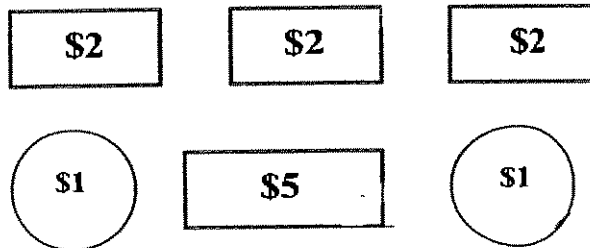
b) - =

29. $14 + 59 = 98 - \boxed{?}$


30. What is 6 more than 75?

31. What is the number that comes just before 8 tens?


32. Juliet spends \$10 on a bag. Circle the correct amount.

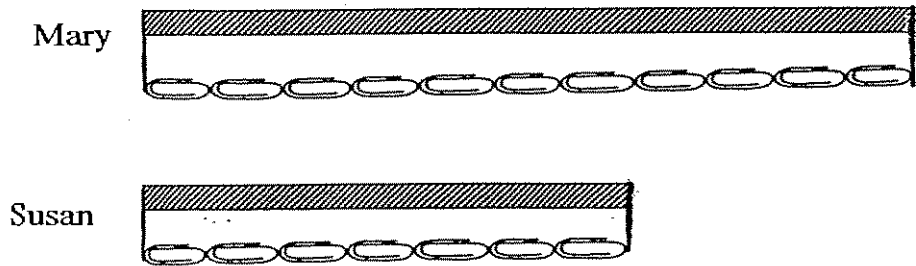


33. Study the picture.




$$15 = \boxed{\text{?}} \times 3$$

34. Study the picture. What is the total length of Mary and Susan's  ?




_____ 

35. Put the flowers below into 2 equal groups. How many flowers will there be in each group?



36. Mr Tan has 3 shirts and 3 pairs of shorts. How many different ways can he wear his clothes?



_____ ways

37. $4 + 4 + 4 + 4 + 4 + 4 = \boxed{?} \times 4$

38. What is 3 sixes + 2 tens?


39. 10 tens =

40. What is 40 less than 67?

Story Sums: (5 X 4 marks)

Work out these word problems.

41. There are 4 squares. There are 6 hearts in each square. How many hearts are there altogether?



$$\square \times \square = \square$$

There are _____ hearts altogether.

42. Mrs Chew baked 90 cookies. She gave 48 cookies to her neighbour. How many cookies did she have left?

$$\square \ominus \square = \square$$

She had _____ cookies left.

43. Sally has 65 bookmarks. She has 19 bookmarks more than Jolene.
How many bookmarks does Jolene have?

$$\square \ominus \square = \square$$

Jolene has _____ bookmarks.

44. Wendy has 8 dolls. Rina has 7 more dolls than Wendy.
How many dolls does Rina have?

$$\square \oplus \square = \square$$

Rina has _____ dolls.

45. June has \$29. She wants to buy the teddy bear shown below. How much more money does she need?



\$42

$$\square \bigcirc \square = \square$$

She needs \$_____.



ANSWER SHEET

CHIJ PRIMARY SCHOOL - PRIMARY 1 MATHEMATICS 2007
SEMESTRAL ASSESSMENT (2)

1. 4

2. 3

3. 1

4. 2

5. 1

6. 3

7. 4

8. 4

9. 2

10. 1

11. fourteen

12. 6

13. 20, 15, 10, 7

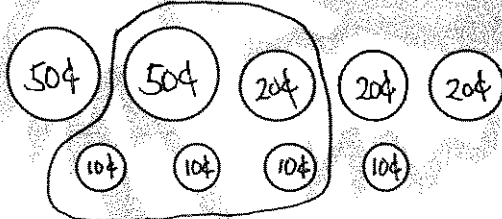
14. 6 stars

15. rectangles and circles

16. 3

17. 85¢

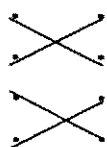
18.



19. A: 26

B: 32

20.



21. ☆☆☆☆☆XO☆

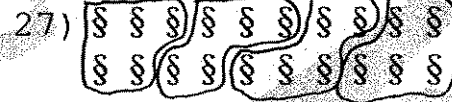
22) 5

23) 14

24) 3

25) pencil case

26) 6 books



Ans: 4

28) a) $13 + 19 = 32$

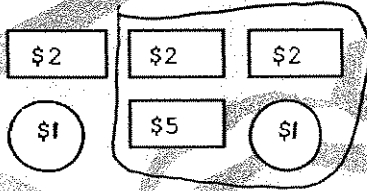
b) $32 - 19 = 13$

29) 25

30) 81

31) 79

32)



33) 5

34) 18

35)



$$14 \div 2 = 7$$

$$41) 4 \times 6 = 24$$

There are 24 hearts altogether

36) 9 ways

37) 6

38) 38

39) 100

40) 27

$$42) 90 - 48 = 42$$

She had 42 cookies left.

$$43) 65 - 19 = 46$$

Jolene has 46 bookmarks.

$$44) 8 + 7 = 15$$

Rina has 15 dolls.

$$45) 42 - 29 = 13$$

She needs \$13