

Anglo Chinese School (Primary)

P1 Mathematics 2013

Review Test 2

Topics Addition & Subtraction within 100 with renaming
& Shapes

Name _____ () Date _____

Class P1 ()

Section A Multiple-Choice Questions (10 marks)

Choose the correct answer for each question and write its number in the brackets provided

1 7 more than 34 is _____

(1) 31

(2) 33

(3) 41

(4) 44

()

2 _____ is 5 less than 42

(1) 92


(2) 47

(3) 43

(4) 37

()

3 Look at the picture below



There are _____ triangles in the picture above

- (1) 1
- (2) 2
- (3) 3
- (4) 4

()

4 $16 + 15$ _____

- (1) 1
- (2) 11
- (3) 21
- (4) 31

()

5 $9 + 86 = \underline{\hspace{2cm}}$

(1) 8 tens 6 ones

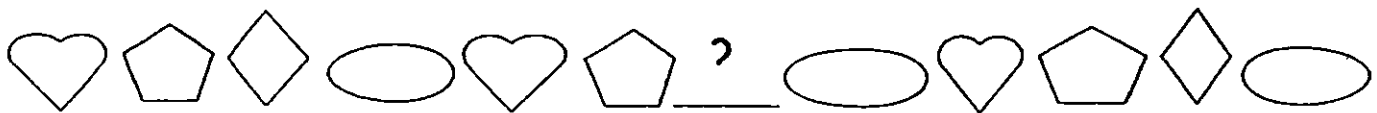
(2) 8 tens 9 ones

(3) 9 tens 0 ones

(4) 9 tens 5 ones

()


6 Study the pattern below



Which shape comes next?

(1) 

(2) 

(3) 

(4) 

()

7 Subtract 5 from 31 The answer is _____

(1) 26

(2) 34

(3) 36

(4) 81

()

8 93 is the same as 8 tens and _____ ones

(1) 13

(2) 10

(3) 3

(4) 9

()

9 64 is _____ more than 34

(1) 98

(2) 90

(3) 34

(4) 30

()

10 Add 16 to 78 The answer is _____

(1) 52

(2) 62

(3) 84

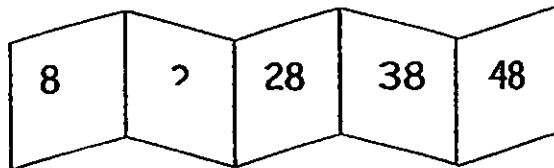
(4) 94

()

Section B Short Answer Questions (14 marks)

Fill in the blanks with the correct answers

11 Look at the number pattern below (2m)



The missing number is _____

12 Cross out the shape with the greatest value (2m)

4 tens - 15 ones

17 + 13


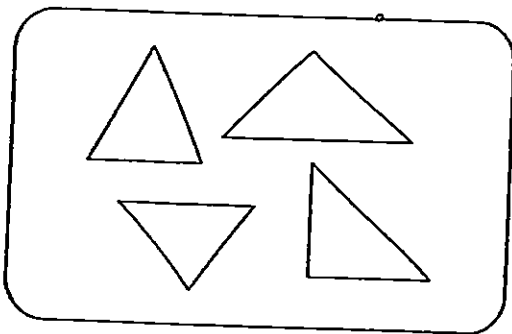
27

8 less than 22

13 Look at the shapes below

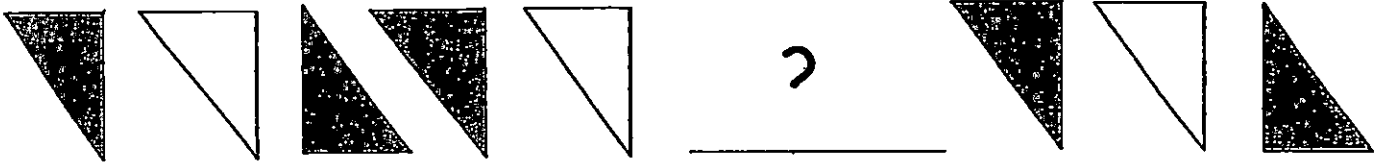
Fill in the blanks with the words from the brackets

(colour shape size) (2m)

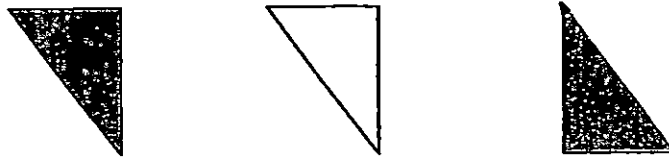


The shapes above are sorted by _____ and


14 Look at the patterns below



What pattern comes next? Circle the pattern (2m)



15 Look at the pictures below



a) There are _____ rectangles (1m)

b) There are _____ circles (1m)

16

$$\begin{array}{r} 77 \\ + 5 \\ \hline \hline \end{array} \quad (1m)$$

17

$$\begin{array}{r} 31 \\ + 59 \\ \hline \hline \end{array} \quad (1m)$$

18

$$\begin{array}{r} 90 \\ - 4 \\ \hline \hline \end{array} \quad (1m)$$

19

$$\begin{array}{r} 82 \\ - 35 \\ \hline \hline \end{array} \quad (1m)$$

Section C Word Problems (16 marks)

Do the following story sums Write your answers on the lines given

Show your workings clearly in the space provided

working

20 Bala 62 cards

He has 18 more cards than John

How many cards does John have? (2m)

John has _____ cards

21 Mrs Tan has 50 magnets

35 of them are big and the rest are small

How many small magnets does Mrs Tan have? (2m)

Mrs Tan has _____ small magnets

22 Jill had some sweets

She gave away 28 sweets to Kerth and had 45 sweets left

How many sweets did she have at first? (2m)

She had _____ sweets at first

23 In a test Gina scored 83 marks and David scored 59 marks

How many more marks did Gina score than David? (2m)

Gina got _____ more marks than David

working

24 Tina baked 53 cookies

Alice baked 15 cookies fewer than Tina.

a) How many cookies did Alice bake? (2m)

Alice baked _____ cookies

b) How many cookies did the 2 girls bake in all? (2m)

They baked _____ cookies in all

working

25 Tom and Ben has 97 marbles

a) If Tom has 25 marbles how many marbles does Ben have? (2m)

Ben has _____ marbles

b) How many fewer marbles does Tom have than Ben? (2m)

Tom has _____ fewer marbles than Ben

END OF TEST



EXAM PAPER

SCHOOL ANGLO – CHINESE SCHOOL (PRIMARY)

SUBJECT PRIMARY 1 MATHEMATICS

TERM TEST 2 (REVIEW TEST 2)

Q1	Q2	Q3	Q4	Q5	Q6	Q7	Q8	Q9	Q10
3	4	3	4	4	3	1	1	4	4

Section B

Q11) 18

Q12) 4 tens – 15 ones

Q13) colour and shape

Q14)



Q15) a) 3 rectangles

b) 6 circles

Q16) 82

Q17) 90

Q18) 86

Q19) 47

Section C

Q20) $62 - 18 = 44$ cards

Q21) $50 - 35 = 15$ small magnets

Q22) $28 + 45 = 73$ sweets at first

Q23) $83 - 59 = 24$ more marks

Q24) a) $53 - 15 = 38$ cookies
b) $53 + 38 = 91$ cookies in all

Q25) a) $97 - 25 = 72$ marbles
b) $72 - 25 = 47$ fewer marbles