

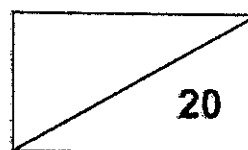
**CATHOLIC HIGH SCHOOL
MATHEMATICS
PRIMARY ONE
AMODES : CHECKPOINT 4**

NAME : _____

DATE : _____

CLASS : _____

PARENT'S SIGNATURE : _____



Section A

Questions 1 to 10 carry 1 mark each. For each question, four options are given. One of them is the correct answer. Make your choice 1, 2, 3 or 4 and write your choice in the bracket provided. All diagrams are not drawn to scale.

(10 marks)

1. What number comes just after 79?

(1) 70

(2) 78

(3) 80

(4) 97

()

2. Which of the following numbers is the smallest?

(1) Eighty-eight

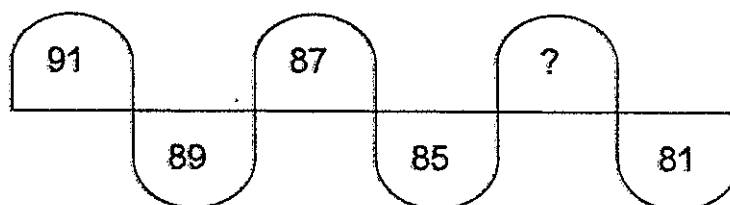
(2) Eighty-one

(3) Forty-nine

(4) Forty-six

()

3. What is the missing number in the number pattern below?



- (1) 80
(2) 82
(3) 83
(4) 84

()

-
4. Which of the following numbers is greater than 50 but smaller than 53?

- (1) 54
(2) 52
(3) 50
(4) 49

()

5. $37 + 12 =$

- (1) 25
(2) 45
(3) 49
(4) 58

()

6. Subtract 10 from 82.

(1) 72

(2) 83

(3) 92

(4) 100

()

7. 5 tens - 3 ones =

(1) 20

(2) 2

(3) 47

(4) 53

()

8. $64 =$ tens 14 ones

(1) 7

(2) 6

(3) 3

(4) 5

()

9. Which of the following has the same answer as 100?

(1) $10 + 10$

(2) $45 + 55$

(3) $36 + 63$

(4) $82 + 16$

()

10. Tom has 29 toys.
Ben has 6 more toys than Tom.

Which of the following statements below is true?

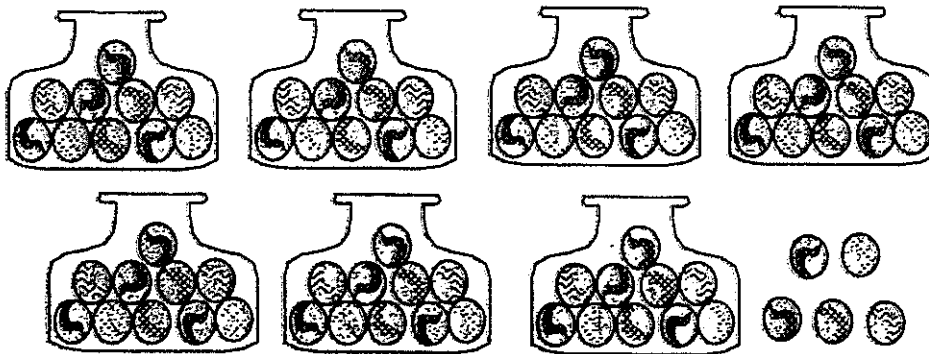
- (1) Tom has more toys than Ben.
(2) Tom has fewer toys than Ben.
(3) Ben has fewer toys than Tom.
(4) Tom and Ben have the same number of toys. ()

Section B

Questions 11 to 15 carry 2 marks each. Show your working clearly and write your answers in the spaces provided. For questions which require units, give your answers in the units stated. All diagrams are not drawn to scale. (10 marks)

Do not write
in this space

11. Count the number of balls. How many balls are there altogether?



- a) Write the number of balls in numerals.

Ans: _____

- b) Write the number of balls in words.

Ans: _____



14. There are 25 pupils in Classroom A.
There are 6 more pupils in Classroom B.
How many pupils are there in Classroom B?

Do not write
in this space

$$\square \ominus \square = \square$$

There are _____ pupils in Classroom B.

15. Cathy has 38 erasers.
Dolly has 19 fewer erasers than Cathy.
How many erasers does Dolly have?

$$\square \ominus \square = \square$$

Dolly has _____ erasers.

END OF PAPER