

**NANYANG PRIMARY SCHOOL  
MATHEMATICS  
PRIMARY TWO  
2017 COMBINED TOPICAL TEST 2  
PRACTICE PAPER 1**

Name: \_\_\_\_\_ (    )                      Marks:            / 30

Class: Primary 2 (    )                      Parent's Signature: \_\_\_\_\_

Date: \_\_\_\_\_

Duration: 45 minutes

**Section A**

Questions 1 to 8 carry 1 mark each.

For each question, four options are given.

One of them is the correct answer.

Choose the correct answer and write its number (1, 2, 3 or 4) in the brackets ( ) provided. (Total: 8 marks)

1. Find the value of 5 fours.

(1) 20  
(3) 5

(2) 9  
(4) 4

(    )

2. Lihua invited 7 friends to her party.  
She gave each friend 4 balloons.  
How many balloons did she give away altogether?

(1) 7  
(3) 24

(2) 11  
(4) 28

(    )

3. Mrs Lam baked 24 cupcakes.  
She gave the cupcakes equally to her 3 neighbours.  
How many cupcakes did each neighbour receive?

(1) 7  
(3) 21

(2) 8  
(4) 27

(    )

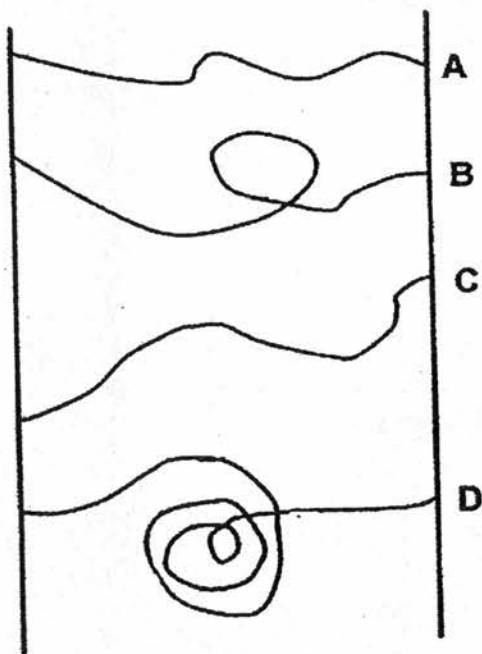
4. Ahmad packed 28 cupcakes into boxes.  
He packed 4 cupcakes into one box.  
How many boxes of cupcakes did he pack?

- |     |    |     |    |     |
|-----|----|-----|----|-----|
| (1) | 7  | (2) | 8  | ( ) |
| (3) | 24 | (4) | 28 | ( ) |

5. The length of the whiteboard is about \_\_\_\_\_.

- |     |        |     |         |     |
|-----|--------|-----|---------|-----|
| (1) | 3 cm   | (2) | 30 cm   | ( ) |
| (3) | 300 cm | (4) | 3000 cm | ( ) |

6. Compare the lines carefully.



Which of the line above is the longest?

- |     |   |     |   |     |
|-----|---|-----|---|-----|
| (1) | A | (2) | B | ( ) |
| (3) | C | (4) | D | ( ) |

7. Harry bought 3 pizzas.  
Each pizza was cut into 9 equal slices.  
How many slices of pizza were there altogether?

(1) 27  
(3) 3

(2) 24  
(4) 6

( )

8. Natalie and Amelia planted some roses.  
Amelia's rose is 95 cm tall.  
Natalie's rose is 27 cm shorter than Amelia's rose.  
What is the height of Natalie's rose?

(1) 68 cm  
(3) 112 cm

(2) 72 cm  
(4) 122 cm

( )


**Section B**

Questions 9 to 13 carry 2 marks each.

Show your working clearly in the space provided for each question and write your answer in the blank provided.

(Total: 10 marks)

9. Using all the soccer balls in the picture below, form 2 number equations.



$$\square \times \square = \square$$

$$\square \div \square = \square$$

10. Joseph has 211 cm of string.  
Daniel has a string that is 49 cm longer than Joseph's string.  
How long is Daniel's string?

Ans: \_\_\_\_\_ cm

11. Use a pencil and a ruler to draw the following lines.

(a) Line AB with a length of 11 cm

(b) Line CD with a length 2 cm shorter than Line AB

12. The table below shows the number of visitors to an art exhibition.

Day	Number of visitors
Monday	97
Tuesday	208
Wednesday	122
Thursday	79
Friday	201

There were a total of 298 visitors on two days.  
Which were the two days?

Ans: \_\_\_\_\_ and \_\_\_\_\_

13. A baker baked 23 cupcakes.  
He sells the cupcakes in 2 different boxes.  
The big box contains 4 cupcakes.  
The small box contains 3 cupcakes.  
He sold 7 boxes of cupcakes altogether.  
How many small boxes were sold?



Small box



Big box

Ans: \_\_\_\_\_

**Section C**

Questions 14 to 16 carry 4 marks each.

Do these word problems carefully.

Show all your number equations and working clearly in the space provided for each question.

(Total: 12 marks)

14. Devi saved \$3 every day for a week.

(a) How much money did she save in 1 week?

She saved \$ \_\_\_\_\_ in 1 week.

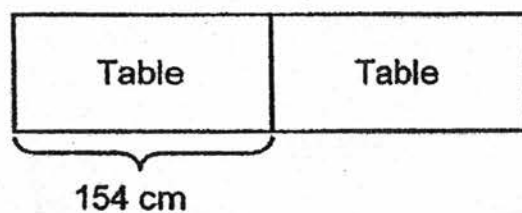
(b) How much will she save in 4 weeks if she saves \$8 each week?

She will save \$ \_\_\_\_\_ in 4 weeks.

15. The length of a table is 154 cm.  
The length of a tablecloth is 77 cm longer than the length of the table.
- (a) What is the length of the tablecloth?

The length of the table cloth is \_\_\_\_\_ cm

- (b) 2 such tables are put side by side, one next to another.  
What is the total length of the 2 tables?



The total length of the 2 tables is \_\_\_\_\_ cm.



16. Ahmad wants to buy 40 balloons.  
Each packet has 4 balloons.
- (a) How many packets of balloons does Ahmad need to buy?

Ahmad must buy \_\_\_\_\_ packets of balloons.

- (b) Each packet of balloon costs \$3.  
How much will 9 such packets cost?

They will cost \$ \_\_\_\_\_.

☺ End of Paper ☺  
Please Check Carefully



EXAM PAPER 2017(P2)

SCHOOL : NANYANG

SUBJECT : MATHEMATICS

TERM : CA1

Q1	Q2	Q3	Q4	Q5	Q6	Q7	Q8
1	4	2	1	3	4	1	1

9)  $4 \times 5 = 20$

$20 \div 4 = 5$

10) 260 cm

11)a) A 

b) C 

12) Friday and Monday

13) 5

14)a) 1 week = 7 days

Save =  $7 \times 3 = 21$

She saved \$21 in 1 week.

b) 1 week  $\rightarrow$  \$8

$4 \times 8 = \$32$

She will save \$32 in 4 weeks.

15)a) table = 154 cm

tablecloth =  $154 \text{ cm} + 77 \text{ cm} = 231 \text{ cm}$

The length of the table cloth is 231cm

**15)b)2 tables = 2 x 154cm = 308cm**

**The total length of the 2 tables is 308cm**

**16)a)buy = 40 ÷ 4 = 10**

**Ahmad must buy 10 packets of balloons.**

**b)9 packet = 9 x 3 = 27**

**They will cost \$27.**