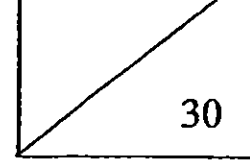


Date: \_\_\_\_\_



Anglo-Chinese School (Primary)



P2 Mathematics 2015

Test 2

Length / Mass / Multiplication & Division / Multiplication Tables of 2, 5 & 10

Name: \_\_\_\_\_ ( )

Duration: 50 minutes

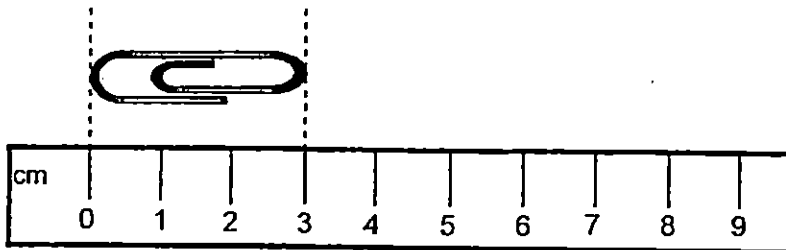
Class: P2 \_\_\_\_\_

Date: \_\_\_\_\_

**Section A: Multiple Choice Questions (5 x 2 marks)**

Choose the correct answer and write its number (1, 2, 3 or 4) in the bracket.

1. Look at the picture below.




The length of the paper clip is \_\_\_\_\_ cm.

- (1) 1
- (2) 2
- (3) 3
- (4) 4

( )

2. The mass of the pineapple is \_\_\_\_\_ g.



- (1) 50
- (2) 100
- (3) 150
- (4) 250

( )

3. 5 groups of 3 is the same as \_\_\_\_\_.

- (1)  $3 + 3 + 3 + 3 + 3$
- (2)  $3 \times 3 \times 3 \times 3 \times 3$
- (3)  $5 + 5 + 5 + 5 + 5$
- (4)  $5 \times 5 \times 5 \times 5 \times 5$

( )

4.  $36 \div 4 =$  \_\_\_\_\_.

- (1) 8
- (2) 9
- (3) 32
- (4) 40

( )

5.  $\text{😊} \times \text{😊} = 100$   
The value of  $\text{😊}$  is \_\_\_\_\_.

(1) 10

(2) 20

(3) 50

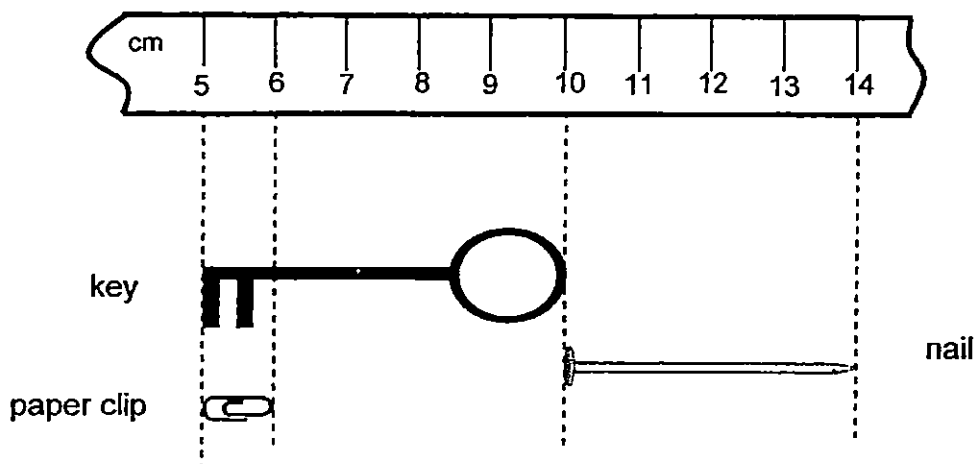
(4) 100

( )

**Section B: Short-Answer Questions (10 x 1 mark)**

**Write the answer in the space provided. Show all workings clearly.**

Look at the pictures below carefully to answer questions 6 to 8.

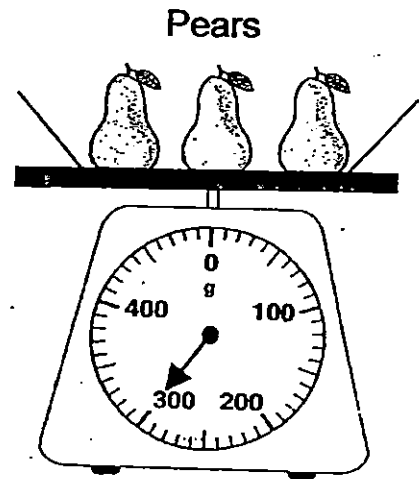
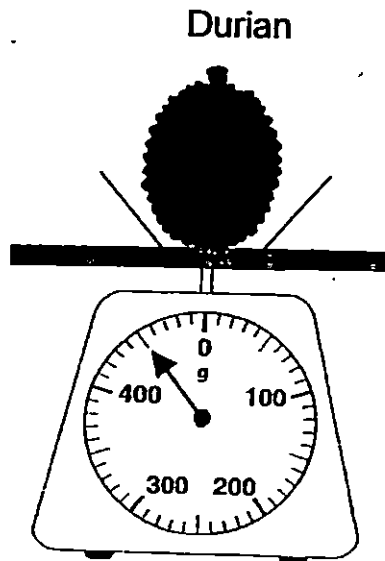


6. The key is \_\_\_\_\_ cm.

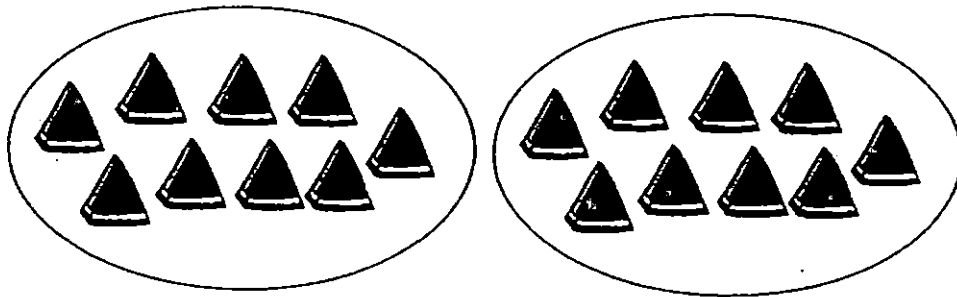
7. The shortest item is the \_\_\_\_\_

8. The nail is \_\_\_\_\_ cm longer than the paper clip.

Look at the pictures below and answer questions 9 to 11.




9. The mass of the durian is \_\_\_\_\_ g.
10. The mass of the three pears is \_\_\_\_\_ g.
11. The durian is heavier than the three pears by \_\_\_\_\_ g.
12. Write a multiplication equation on the grouping below.




$$\square \circ \square = \square$$

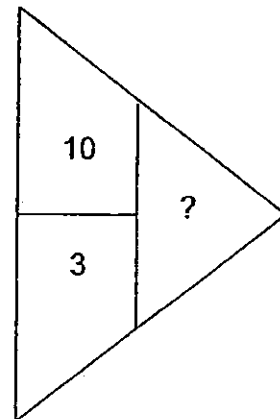
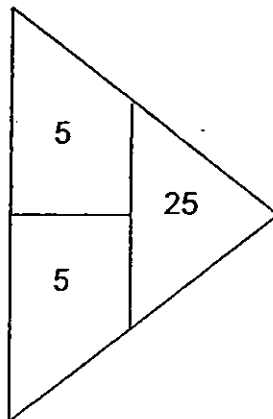
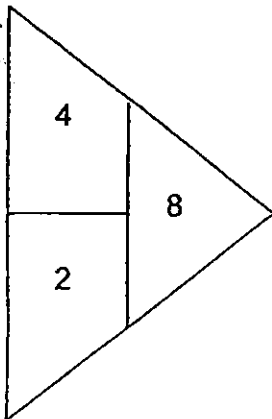
13. Circle the stars to show groups of 6.



14. Look at the dinosaurs below. Circle the dinosaur which gives the smallest answer.



15. What is the missing number?



The missing number is \_\_\_\_\_

**Section C: Problem Sums (10 marks)**

**Answer each question in the space provided.**

**Your workings must be clearly shown.**

Workings

16. Matthew is 134 cm tall. His sister is 25 cm taller than him. How tall is his sister? (2m)

---

His sister is \_\_\_\_\_ cm tall.

17. Leon weighs 70 kg. He is 12 kg heavier than Sarah. How heavy is Sarah? (2m)

---

Sarah is \_\_\_\_\_ kg.

18. A truck has 6 wheels.

How many wheels do 3 trucks have? (2m)

---

3 trucks have \_\_\_\_\_ wheels.

19. Mother has 20 ribbons. She gives an equal number of ribbons to her 2 daughters. How many ribbons does each daughter get? (2m)

---

Each daughter gets \_\_\_\_\_ ribbons.

20. Sally buys 12 mushrooms. She packs them equally into bags of 4. How many bags are there? (2m)

---

There are \_\_\_\_\_ bags.

END OF TEST



**EXAM PAPER 2015**

**LEVEL : PRIMARY 2**

**SCHOOL : ANGLO-CHINESE SCHOOL (PRIMARY)**

**SUBJECT : MATHEMATICS**

**TERM : TEST 2**

Q1	Q2	Q3	Q4	Q5
3	3	1	2	1

Q6. 5cm

Q7. paper clip

Q8. 3cm

Q9. 450g

Q10. 300g

Q11. 150g

Q12.  $9 \times 2 = 18$

Q13. 4 groups of 6

Q14.  $15 \div 3$

Q15. 30

Q16. His sister is 159cm tall.  $\rightarrow 134\text{cm} + 25\text{cm} = 159\text{cm}$

Q17. Sarah is 58kg.  $\rightarrow 70\text{kg} - 12\text{kg} = 58\text{kg}$

Q18. 3 trucks have 18 wheels.  $\rightarrow 3 \times 6 = 18$

Q19. Each daughter gets 10 ribbons.  $\rightarrow 20 \div 2 = 10$

Q20. There are 3 bags.  $\rightarrow 12 \div 4 = 3$