

TAO NAN SCHOOL
PRIMARY 2 END-OF-YEAR MATHEMATICS EXAMINATION 2007

Name: _____ () Date: 26 October 2007

Class: Primary 2 _____ Time: 1.30 p.m. - 3.00 p.m.

Parent's Signature: _____ Marks: _____ / 70

Section A (20 x 1 mark)

Choose the correct answer and write its number in the brackets.

1. The value of 2 hundreds, 4 tens and 5 ones is _____.

(1) 209

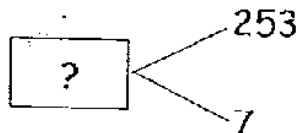
(2) 290

(3) 245

(4) 254

()

2. What is the missing number?



(1) 247

(2) 246

(3) 259

(4) 260

()

3. Subtract 253 from 300.

(1) 47

(2) 57

(3) 153

(4) 147

()

4. $4 \div \underline{\quad} = 1$

(1) 1

(2) 2

(3) 3

(4) 4

()

5. Lily can pack all the 15 sweets into _____.

(1) 3 groups of 4

(2) 4 groups of 3

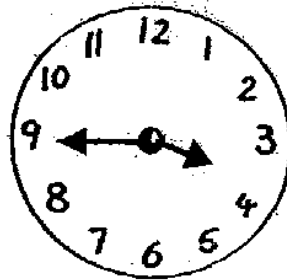
(3) 5 groups of 3

(4) 5 groups of 5

()

6. The time shown on the clock is _____.

- (1) 3.45
- (2) 4.45
- (3) 9.15
- (4) 9.20



()


7. 590¢ is the same as _____.

- (1) \$0.59
- (2) \$5.90
- (3) \$59.00
- (4) \$590.00

()

8. What fraction of the figure is shaded?

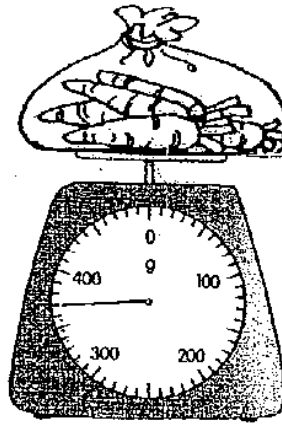
- (1) $\frac{5}{7}$
- (2) $\frac{5}{12}$
- (3) $\frac{7}{12}$
- (4) $\frac{9}{12}$



()

9. What is the mass of the bag of carrots ?

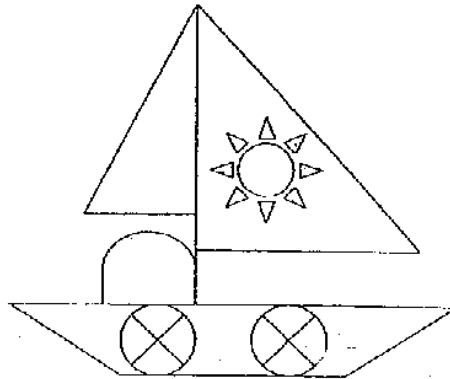
- (1) 350 g
- (2) 360 g
- (3) 370 g
- (4) 380 g



()

10. There are _____ triangles in the figure.

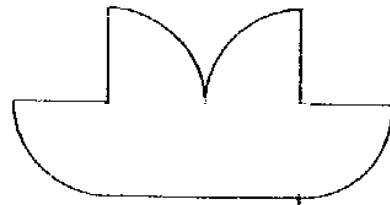
- (1) 9
- (2) 10
- (3) 18
- (4) 20



()

11. The figure is made up of _____.

- (1) 4 semi-circles and 1 square
- (2) 4 quarter circles and 1 square
- (3) 4 semi-circles and 1 rectangle
- (4) 4 quarter circles and 1 rectangle



()

12. In the numeral '930', the digit 9 has a value of _____ tens.




- (1) 9
- (2) 90
- (3) 900
- (4) 9000


()

13. 288 is _____ hundreds less than 788.

- (1) 5
- (2) 50
- (3) 500
- (4) 900

()

14.  +  +  = 60

 = ?

- (1) 10
- (2) 20
- (3) 30
- (4) 40

()

15. Joan shares 12 stickers with her 3 friends. How many stickers does each of them get ?

(1) 36

(2) 48

(3) 3

(4) 4

()

16. $623 = 6 \text{ hundreds} + 1 \text{ ten} + \underline{\hspace{2cm}}$ ones

(1) 23

(2) 13

(3) 3

(4) 4

()


17. Which is the next shape ?




(1)




(2)



(3)



(4)



()

18. Jill ate $\frac{5}{7}$ of a pizza. What fraction of the pizza is left?

(1) $\frac{1}{5}$

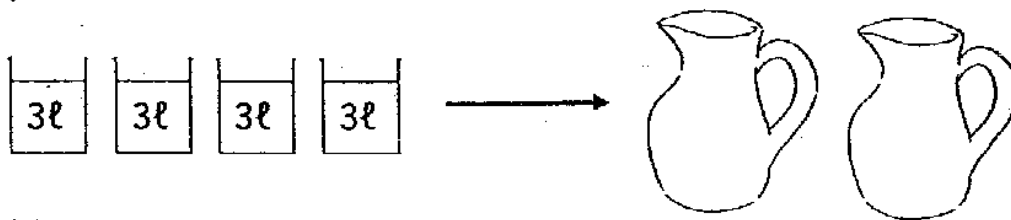
(2) $\frac{2}{5}$

(3) $\frac{3}{7}$

(4) $\frac{2}{7}$

()

19. Mary poured 4 glasses of water equally into 2 jugs.
Each jug contains _____ ℓ of water.



(1) 8

(2) 6

(3) 3

(4) 12

()

20. 15 twenty-cent coins have the same value as _____ fifty-cent coins.

(1) 7

(2) 6

(3) 3

(4) 5

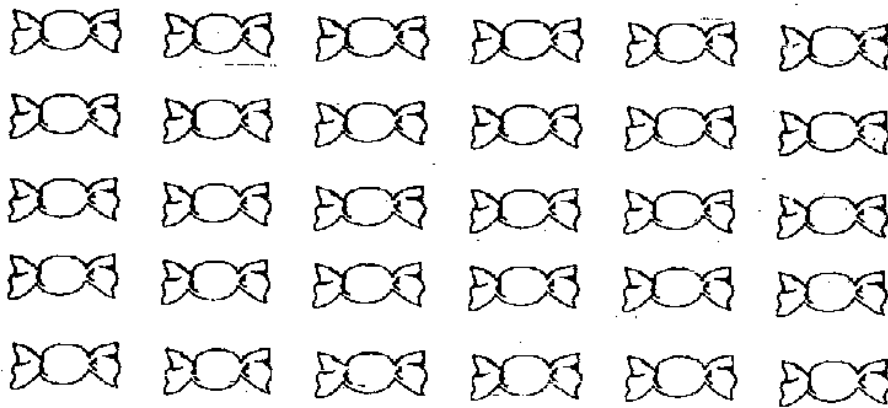
()

Section B (15 x 2 marks)

Fill in the blanks with the correct answer.

21. Write 894 in words.

22. Ring the sweets to show 5 equal groups.

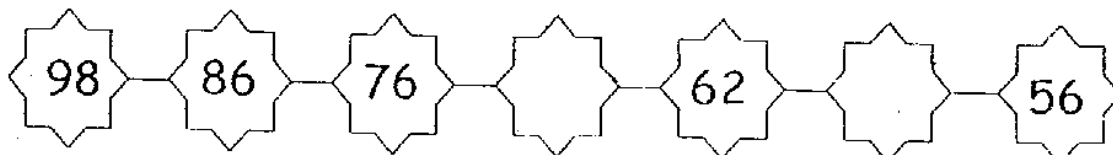


23. I think of a number.

When I subtract 6 from the number, the answer is 13.

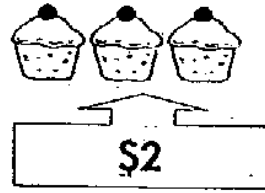
The number is _____.

24. Complete the number pattern.



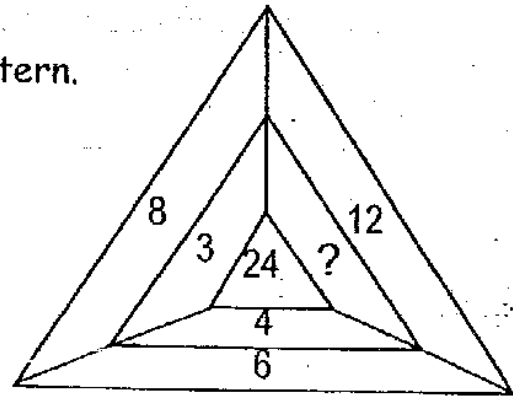
25. At the bakery, cupcakes were sold at 3 for \$2.
Alice bought some cupcakes for \$6.

She bought _____ cupcakes.

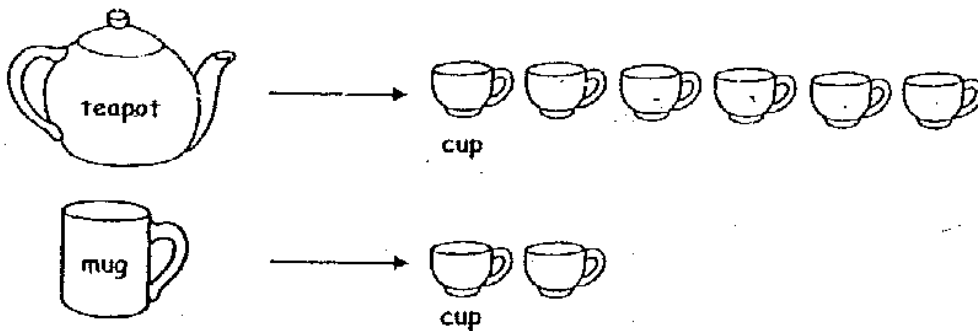


26. The numbers in the diagram form a pattern.

The missing number is _____.



27.

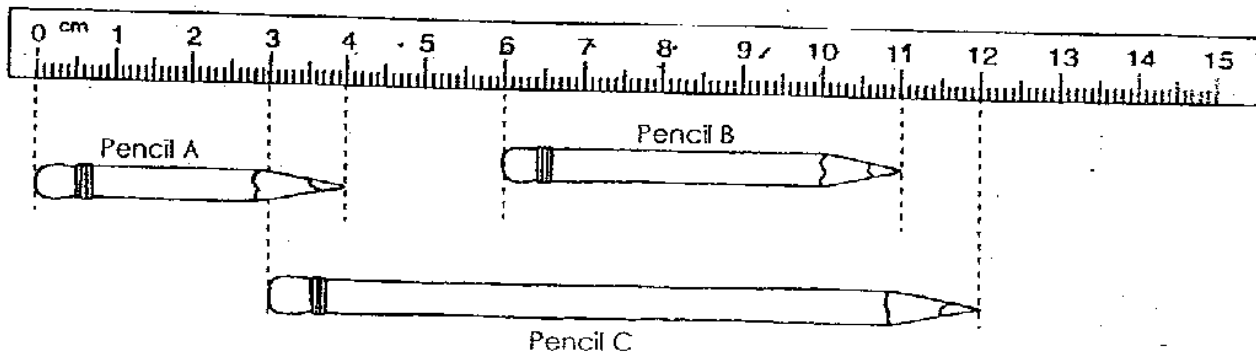


A teapot can fill 6 cups. The same teapot can fill _____ mugs.

28. Fill in a digit to make the working correct.

$$\begin{array}{r} 439 \\ - 1\boxed{}5 \\ \hline 244 \end{array}$$






Use the following picture to answer Q29 and Q30.



29. Pencil A is _____ cm.

30. Pencil B is _____ cm shorter than pencil C.

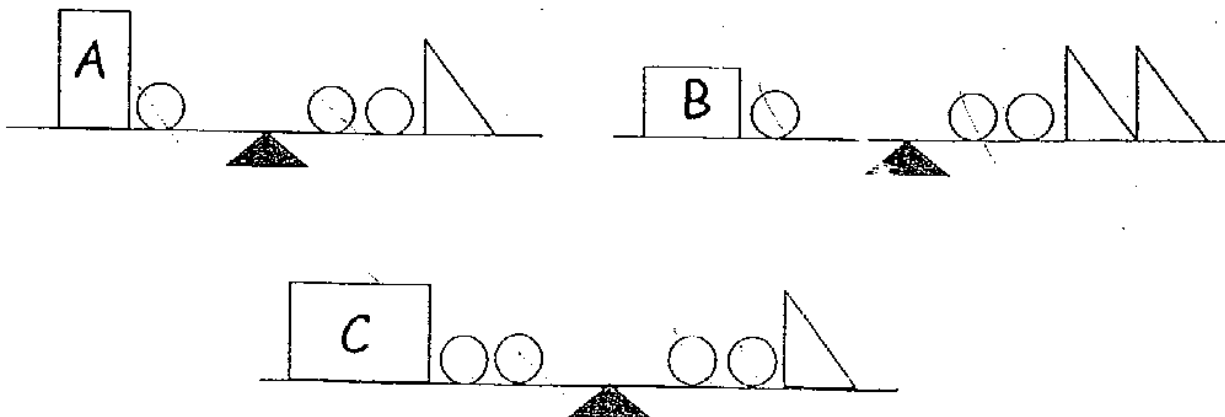
The picture graph shows the number of books that the children had read. Use the information provided to answer Q 31 and Q32.

Alice	
Sam	
Muthu	
Ravi	
Each  stands for 10 books	

31. The total number of books read by Muthu and Alice is _____.

32. Ravi read _____ books more than Sam.

33. Look at the diagrams below.
Which box is the heaviest? Box _____



34. Arrange the fractions in order from the greatest to the smallest

$$\frac{4}{7}$$

$$\frac{6}{7}$$

$$\frac{1}{7}$$

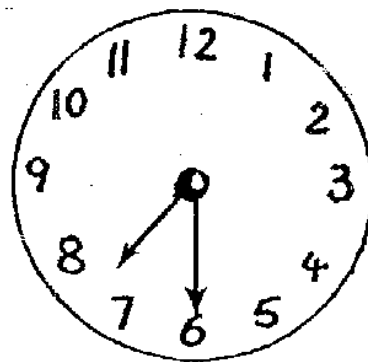
_____ , _____ , _____
greatest

35. A television programme ended at 7.30 p.m. It lasted 45 mins.

The programme started at _____ p.m.

?

45 min



Section C (5 x 4 marks)

Do the following sums. Show your working and answer statement clearly.

36. A bottle contains 2ℓ of orange juice. Jane buys 8 such bottles. How much orange juice does she have now ?

She has _____ ℓ of orange juice.

37. A farmer sold 132 eggs on Tuesday. He sold 65 more eggs on Tuesday than on Wednesday. How many eggs did he sell on Wednesday ?

He sold _____ eggs on Wednesday.

38. Jerry spent 50¢ on a ruler and 80¢ on a notebook.
He had \$1.50 with him at first. How much money had he left?

He had \$_____ left.

39. Johan is 4 kg heavier than Melvin.
Their total mass is 44 kg.
What is Melvin's mass?

Melvin's mass is _____ kg.

40. There are 5 cars and some motorcycles in a car park.
There are 30 wheels altogether.
How many motorcycles are there ?


There are _____ motorcycles.

-----End of Paper-----

ANSWER SHEET

TAO NAN PRIMARY SCHOOL - PRIMARY 2 MATHEMATICS 2007
SEMESTRAL ASSESSMENT (2)

- | | |
|-----------------------------------|------------------------------|
| 1. 3 | 23) 19 |
| 2. 4 | 24) 68.58 |
| 3. 1 | 25) 9 |
| 4. 4 | 26) 2 |
| 5. 3 | 27) 3 |
| 6. 1 | 28) 9 |
| 7. 2 | 29) 4 |
| 8. 2 | 30) 4 |
| 9. 3 | 31) 70 |
| 10. 2 | 32) 40 |
| 11. 4 | 33) B |
| 12. 2 | 34) $6/7, 4/7, 1/7$ |
| 13. 1 | 35) 6.45 |
| 14. 2 | 36) $8 \times 2 = 16$ |
| 15. 3 | She has 16L of orange juice. |
| 16. 2 | |
| 17. 2 | |
| 18. 4 | |
| 19. 2 | |
| 20. 2 | |
| 21. Eight hundred and ninety-four | |
| 22. | |



37) $132 - 65 = 67$

He sold 67 eggs on Wednesday.

38) $80 + 50 = 130$

$150 - 130 = 20$

He had \$0.20 left.

39) $44 - 4 = 40$

$40 \div 2 = 20$

Melvin's mass is 20kg.

40) $5 \times 4 = 20$

$30 - 20 = 10$

$10 \div 2 = 5$

There are 5 motorcycles.