



Temasek Primary School

Primary Two

*No part of this paper may be reproduced for commercial purposes
without the prior written permission of Temasek Primary School.*

MATHEMATICS

Name : _____ ()

Class : Primary 2 _____

Date : _____

Parent's Signature: _____

Total Time : 1 h 30 min

Instructions to Candidates:

1. Write your name, class and register number in the spaces provided clearly.
2. Do not turn over this page until you are told to do so.
3. Follow all instructions carefully.
4. Answer all questions.
5. Write your answers in this booklet.

Paper	Marks	Scores
Section A	15	
Section B	20	
Section C	15	
Total	50	

Section A: 15 marks

Questions 1 to 15 carry 1 mark each.

Write the number of the correct answer in the brackets provided.

1. Find the sum of 699 and 71.

(1) 628

(2) 660

(3) 670

(4) 770

()

2. $620 - 168 =$ _____

(1) 552

(2) 548

(3) 462

(4) 452

()

3. 4×8 is the same as _____.

(1) $4 + 4 + 4 + 4$

(2) $4 \times 4 \times 4 \times 4$

(3) $8 + 8 + 8 + 8$

(4) $8 \times 8 \times 8 \times 8$

()

4. Which one of the following number sentences is wrong?



(1) $4 + 3 = 12$

(2) $4 \times 3 = 12$

(3) $12 \div 4 = 3$

(4) $12 \div 3 = 4$

()

5. Jerry has one 50¢ coin and two 20¢ coins.

He uses the money to buy the item below.

How much change will he get?



Ruler 80¢

(1) 10¢

(2) 40¢

(3) 70¢

(4) 90¢

()

6. $\frac{3}{6} + \frac{1}{6} =$ _____

(1) $\frac{2}{6}$

(2) $\frac{4}{6}$

(3) $\frac{7}{9}$

(4) $\frac{4}{12}$

()

7. The time shown on the clock below is _____.



(1) 2.50

(2) 10.02

(3) 10.10

(4) 10.20

()

8. 5 hundreds 12 tens is the same as _____.

(1) 17



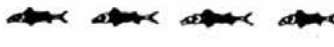

(2) 62

(3) 512

(4) 620

()

Study the graph below and answer Question 9.

Name	Number of fish caught
Ali	
Peter	
Raju	
Sam	

9. Peter and Ali caught _____ more fish than Sam and Raju.

(1) 1

(2) 2

(3) 10

(4) 12

()

10. What number does ★ stand for?

$$\begin{array}{r}
 6 \ 8 \ \star \\
 - \ \star \ 9 \ 4 \\
 \hline
 2 \ 8 \ 9
 \end{array}$$

(1) 5

(2) 2

(3) 3

(4) 4

()

11. $35 \div 5 = \underline{\hspace{2cm}} + 5$

(1) 1

(2) 2

(3) 7

(4) 30

()

12. Lina bought two of the items below.

She spent \$9.50 altogether. What did she buy?

 mug: \$3.25	 socks: \$2.35
 purse: \$5.90	 notebook: \$3.50
 blouse: \$7.15	 teddy bear: \$5.75

(1) Mug and purse

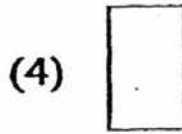
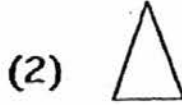

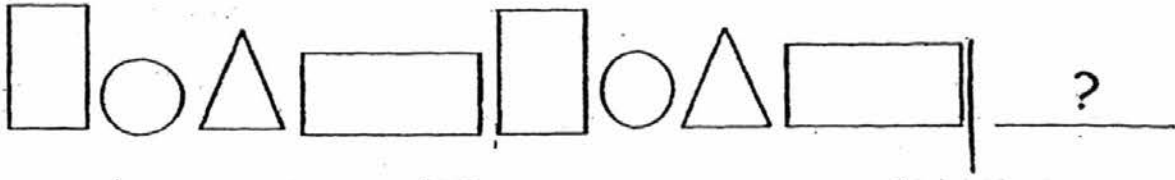
(2) Mug and teddy bear

(3) Notebook and purse

(4) Blouse and socks

()

15. Study the pattern below. Which shape comes next?



()

Section B: 20 marks

Questions 16 to 25 carry 1 mark each.

Questions 26 to 30 carry 2 marks each.

For questions 26 to 30, you have to show your working clearly as method marks are given.

Fill in each box with the correct answer.


16. Write 1 000 in words.

Answer:

17. Add 1 ten and 5 ones to 787.

Answer:

18. Susan pastes 2 stars on a box.



How many such boxes are needed for all the stars below to be pasted?

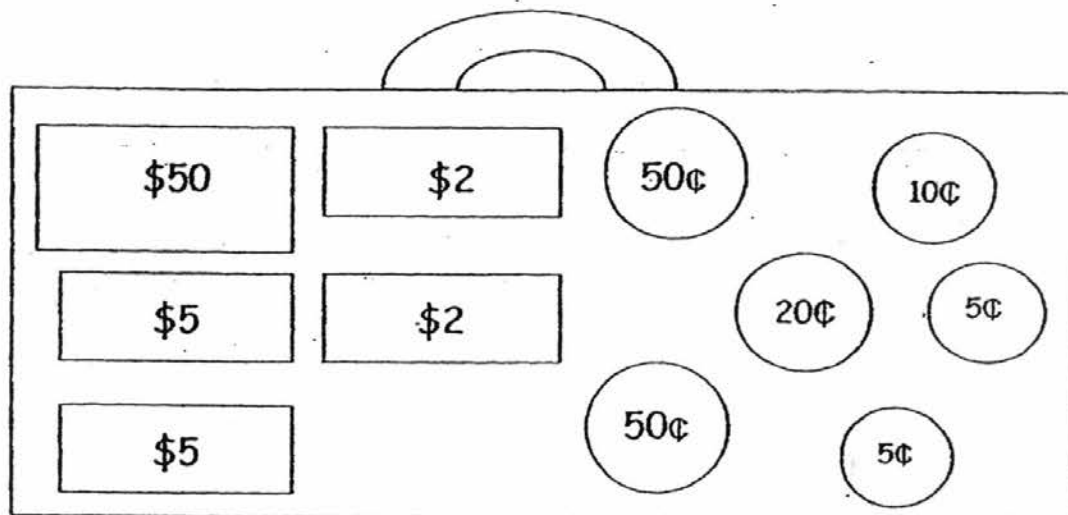


Answer:

-
19. Mary had 18 marker pens. She tied them equally into 2 bundles.
How many marker pens were there in each bundle?

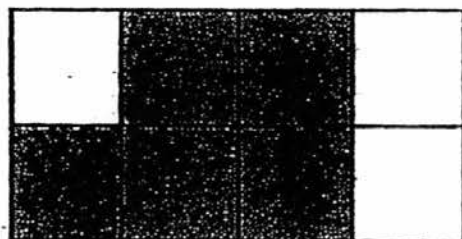
Answer:

20. What is the total amount of money in the purse below?



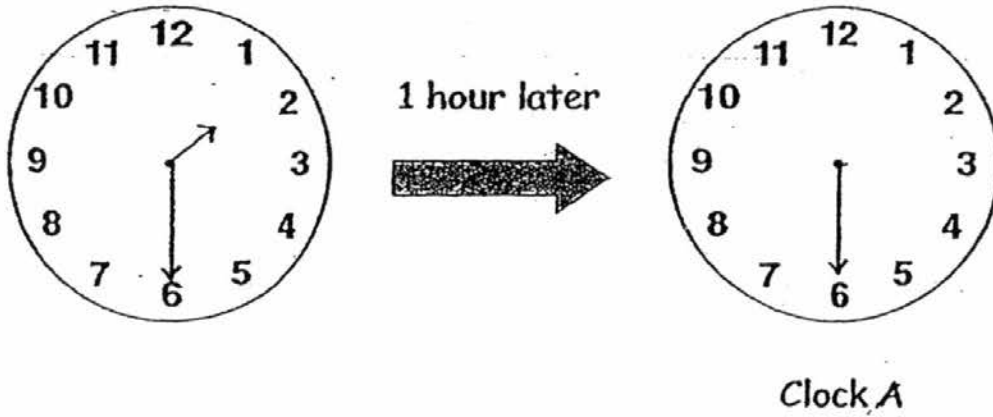
Answer: \$

21. What fraction of the figure below is not shaded?

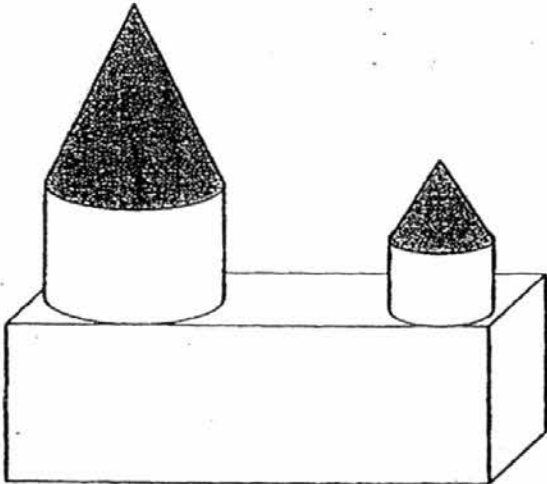


Answer:

22. On the face of Clock A shown below, draw in the hour hand to complete the time.




23. Study the figure below.



It is made up of a cuboid, cylinders and

Look at the graph below and answer Question 24.

Gingerbread cookies each child bought



24. How many cookies did Alice, Darren and Emma buy altogether?

Answer:

25. Draw the shape that comes next in the pattern on the blank provided.



26. How many tens are there in 100?

Answer:

27. There are 6 boys and 4 girls.

Each of them has 3 exercise books.

How many exercise books do they have altogether?

Answer:

28. Arrange these fractions from the greatest to the smallest.

$$\frac{1}{5} \quad , \quad \frac{1}{3} \quad , \quad \frac{1}{8}$$

_____ , _____ , _____
greatest

29. Muthu had some marbles.

He gave 23 marbles to Rosie and 45 marbles to Peter. If Muthu had 58 marbles left, how many marbles did he have at first?

Answer:

30. There are 4 cows and some hens in a farm.

The animals have 24 legs altogether.

If each cow has 4 legs, how many legs do the hens have altogether?

Answer:

Section C: 15 marks

Questions 31 to 35 carry 3 marks each.

Show all your working clearly as method marks are given.

31. There were 402 pupils and teachers in the hall.

If there were 13 teachers, how many pupils were there?

32. Doreen, Lisa, Fandi and Tomy have 6 storybooks each.

How many storybooks do they have in all?

33. A salesman can sell 3 cars and 2 vans in a month.

a) How many vehicles can he sell in a month?

b) How many vehicles can he sell in 5 months?

34. Mrs Lin made 268 cupcakes on Saturday.

She made 305 more cupcakes on Sunday than on Saturday.

How many cupcakes did she make on both days?

35. Box A and Box B have 487 beads.

Box A and Box C have 561 beads.

If Box C has 218 beads, how many beads are there in Box B?

--- End of Paper ---

Level: Primary 2

School: Temasek Primary School

Subject: Mathematics SA2

1.	2.	3.	4.	5.	6.	7.	8.	9.	10.
4	4	3	1	1	2	3	4	2	3

11.	12.	13.	14.	15.
2	4	3	3	4

16. one thousand

17. 802

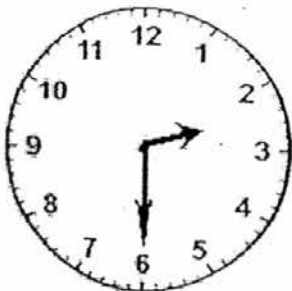
18. 5

19. 9

20. 65.40

21. $\frac{3}{8}$

22.



23. cones

24. 12

25.



26. 10

27. 30

28. $\frac{1}{3}$, $\frac{1}{5}$, $\frac{1}{8}$

29. 126

2

30. 8

31. $402 - 13 = 389$

32. $4 \times 6 = 24$

33. a) $3 + 2 = 5$

b) $5 \times 5 = 25$

34. $268 + 305 = 573$

$268 + 573 = 841$

35. $561 - 218 = 343$

$487 - 343 = 144$

www.testpaper.biz

3

END.