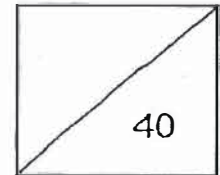


CHIJ ST NICHOLAS GIRLS' SCHOOL
 PRIMARY 2
 TERM 4 REVISION PAPER 4
 MATHEMATICS
 2019



Duration: 50 minutes

Name: _____ ()

Date: 23 October 2019

Class: Primary 2 _____

Parent's Signature: _____

	Topics assessed	Level 4 All the time	Level 3 Most of the time	Level 2 Some of the time	Level 1 Seldom or Not at all
1	<u>Whole Numbers</u> - Able to know the place value of the digits in a given number. - Able to subtract 2-digit number from a 3-digit number with regrouping. - Able to solve 2-step word problems involving addition and subtraction. - Able to multiply and divide within the multiplication tables of 2, 3, 4, 5 and 10. - Able to solve 1-step word problems involving multiplication and division within the multiplication tables of 2, 3, 4, 5 and 10.				
2	<u>Fractions</u> - Able to see fractions as part of a whole. - Able to add like fractions within one whole with denominators of given fractions not exceeding 12. - Able to subtract like fractions within one whole with denominators of given fractions not exceeding 12. - Able to compare and order unit or like fractions with denominator of given fractions not exceeding 12.				

4. Sally has 10 pencils. She packs the pencils equally into 2 bags. How many pencils are there in each bag?

(1) 5

(2) 8

(3) 12

(4) 20

()

5. What is the time shown below?



(1) 1.05

(2) 1.25

(3) 5.01

(4) 5.05

()

Workings

6. How much more water must be added into the jug to make 5 ℓ?



- (1) 1 ℓ
- (2) 5 ℓ
- (3) 3 ℓ
- (4) 7 ℓ

()

Workings

Section B (24 marks)

Questions 7 to 10 carry 1 mark each.

Questions 11 to 20 carry 2 marks each

Write your answers in the blanks provided.

Show all mathematical equations and workings clearly in the space provided.

7. Fill in the blank with a.m. or p.m.

Workings

Devi wakes up at 6.15 _____ every morning.

Answer: _____


8. Ailin's piano lesson started at 11.30 a.m.
Her lesson ended 1 hour later.
At what time did her lesson end?

Answer: _____

The picture graph below shows the number of books that four children read in a week. Use it to answer questions 9 and 10.

Workings

Number of Books Read



9. Which 2 children read 22 books altogether?

Answer: _____ and _____

10. How many more books must Ivy read so that she reads the same number of books as Leela?

Answer: _____

11. Fill in the missing numbers.

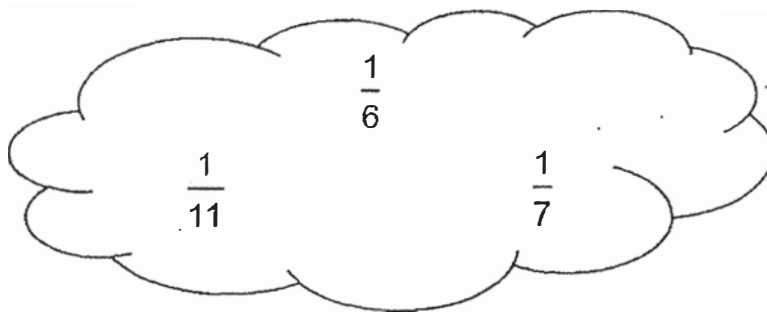
(a) $4 \times \underline{\hspace{2cm}} = 32$

Answer:

(b) $27 \div 3 = \underline{\hspace{2cm}}$.

Answer:

12. Arrange the fractions in order.
Begin with the greatest.



Answer: , ,
 greatest

13. Fill in the blanks.

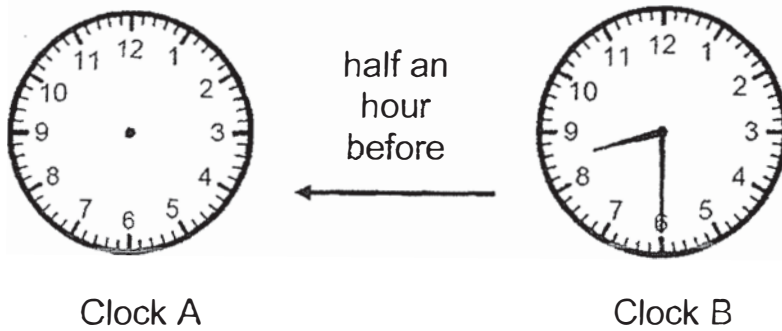
(a) $\frac{4}{9} + \frac{3}{9} = \boxed{?}$

Answer: _____

(b) $1 - \frac{2}{11} = \boxed{?}$

Answer: _____

14. (a) Draw the hands on Clock A.



(b) 15 minutes after 10 o' clock is _____

15. Look at the television programmes listed below.

Channel 9 Programme List	
Time	Name of Programme
11.30 a.m.	Tsunami Man
12.00 p.m.	Wild India
1.00 p.m.	Sinking Town
1.30 p.m.	Bootcamp
2.00 p.m.	Extreme Track

Which programme is 1 hour long?

Answer: _____

16. Look at the containers below.

Fill in the blanks.



A



B




C

Container _____ has more water than Container _____
but less water than Container _____.

The picture graph below shows the favourite sports of a class of children. Use it to answer questions 17 and 18.

Workings

Favourite sports



17. 3 more children like swimming than _____.

Answer: _____

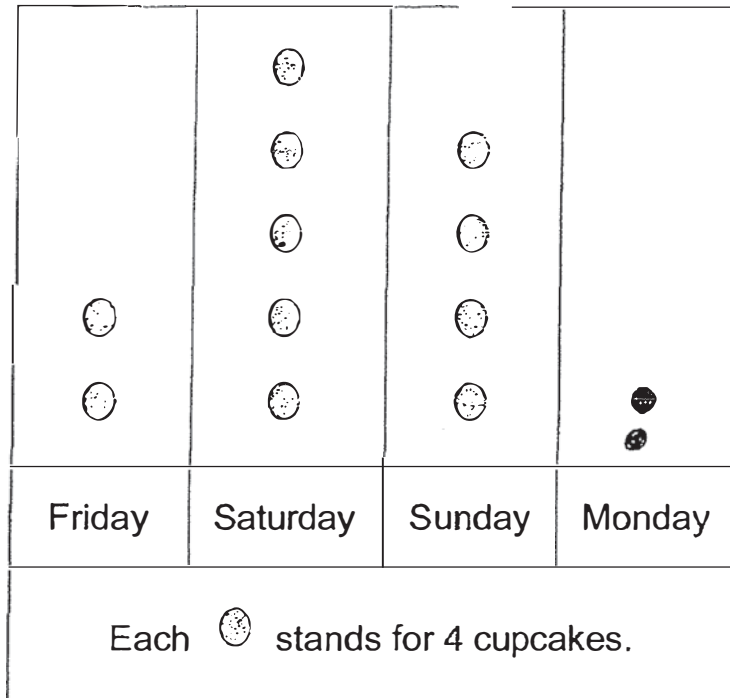
18. How many children are there in the class?


Answer: _____

The picture graph below shows the number of cupcakes that June baked from Friday to Monday. Use it to answer questions 19 and 20.

Workings

Number of Cupcakes Baked



19. June baked 8 cupcakes on Monday. How many  must be drawn on the picture graph above to show the correct number of cupcakes June baked on Monday?

Answer: _____

20. How many fewer cakes did she bake on Friday than on Sunday?

Answer:

Section C (10 marks)

Question 21 and 22 carry 3 marks each.

Question 23 carries 4 marks.

Write your answers in the blanks provided.

Show all number equations and workings clearly in the space provided.

21. Kate had 450 stickers.

She had 95 stickers more than Tina.

How many stickers did they have altogether?

Workings

Answer: _____

22. Sean and Julie bought 64 £ of paint.
Sean bought 37 £ of paint.
How much less paint did Julie buy than Sean?

Workings

Answer: _____

23. Mei Mei had 9 dresses.
She sewed 10 buttons on each dress.

(a) How many buttons did she sew on all the 9 dresses?

Answer: _____

(b) She bought another 60 buttons. How many more dresses could she sew on if she used all the 60 buttons ?

Answer: _____

END OF PAPER

ANSWER KEY

YEAR : 2019

LEVEL : PRIMARY 2

SCHOOL : CHM ST NICOLAS GIRL'S SCHOOL

SUBJECT : MATHEMATICS

TERM : TERM 4

SECTION A

Q1	3	Q2	2	Q3	2
Q4	1	Q5	4	Q6	3

SECTION B

Q7 a.m.

Q8 12.30p.m.

Q9 Jia Jia and Leela

Q10 6

Q11 (a) 8

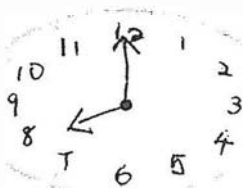
(b) 9

Q12 $\frac{1}{6}, \frac{1}{7}, \frac{1}{11}$

Q13 (a) $\frac{7}{9}$

(b) $\frac{9}{11}$

Q14 (a)



(b) 10.15

Q15 Wild India

Q16 Container B has more water than Container C but less than Container A.

Q17 Badminton

Q18 30

Q19 2

Q20 8

Q21 805

Q22 10ℓ

Q23 (a)90

(b)6

2
3/10

