

**TAO NAN SCHOOL**

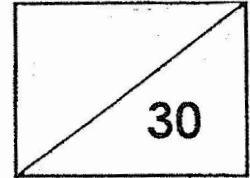
**HOLISTIC ASSESSMENT MATHEMATICS REVIEW (2) 2019**

Name: \_\_\_\_\_ ( )

Class : P 2 ( )

Duration : 45 minutes

Date: 19 August 2019



Parent's signature: \_\_\_\_\_

**Section A (24 x 1 mark)**

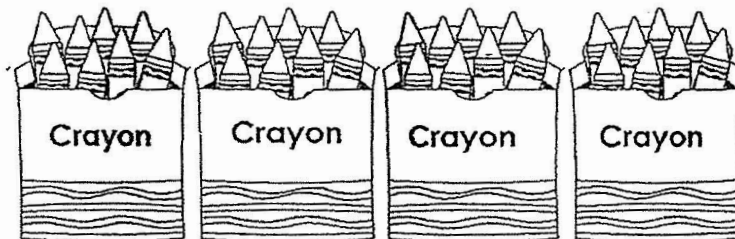
Read the questions carefully.

Write the correct answers in the boxes provided.

1.  $3 \times 0 =$

2. 5 groups of 4 =

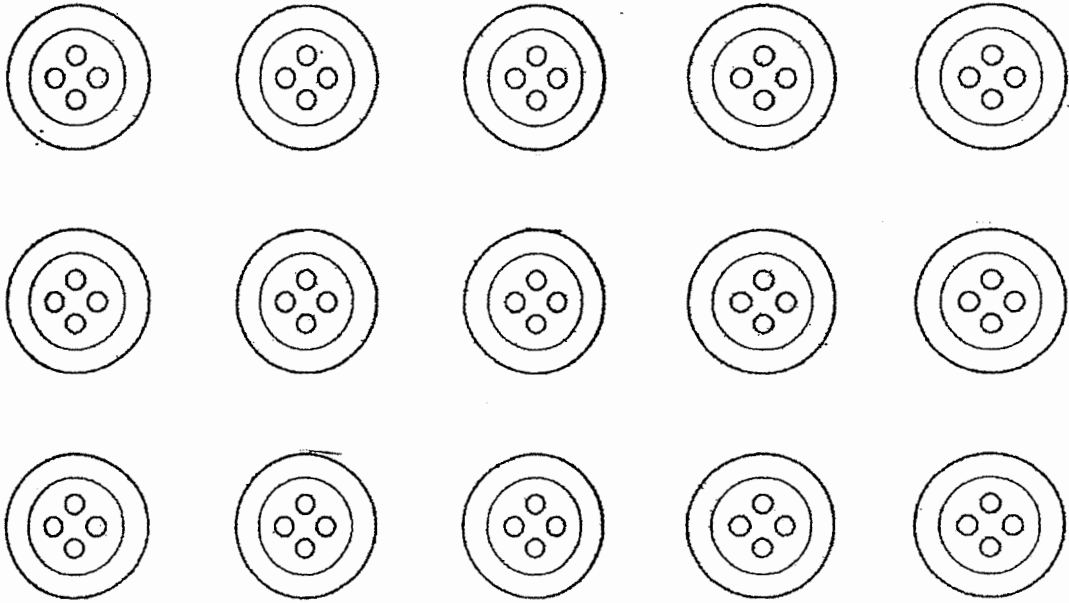
3. There are 8 crayons in each box. How many crayons are there in 4 boxes? Complete the equation.



$\times$   =




4. Divide 15 buttons into 3 groups. How many buttons are there in each group? Complete the equation.




$$\square \div \square = \square$$

5. Jenny puts 16 flowers into vases. There are 4 flowers in each vase. How many vases are there?




There are  vases.

6. 4 children shared 12 strawberries equally among themselves.  
How many strawberries did each child get?



Each child got  strawberries.

7.



Ahmad has 9 baskets of apples. Each basket contains 3 apples.  
How many apples does he have altogether?

Ahmad has  apples together.

8. Jacky has 6 cupcakes. He shares them with two of his friends. How many cupcakes does each of them get?

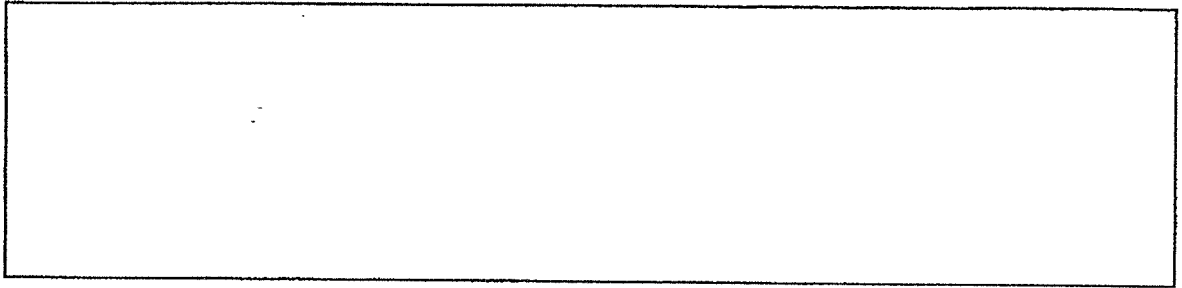


Each of them gets  cupcakes.

9. Use your ruler to measure the line below:

It is  cm long.

10. Draw Line AB with a length of 5 cm in the box below.

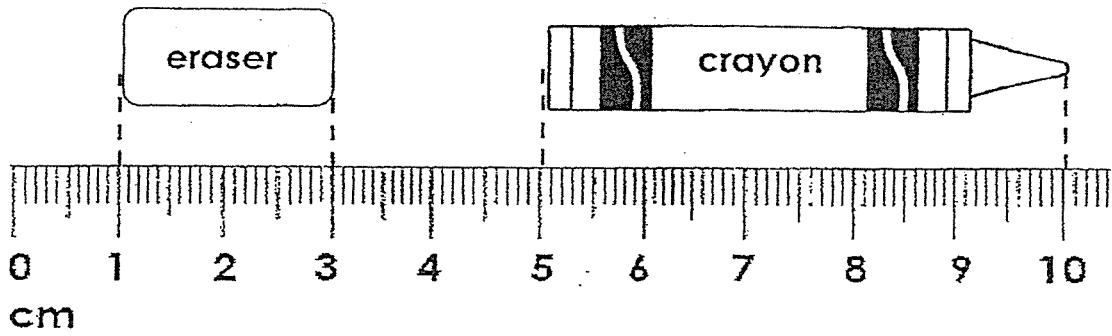


11. Edward is 157 cm tall.  
Ramli is 8 cm taller than Edward.  
How tall is Ramli?

Ramli is  cm tall.

12. Fill in the box with cm or m.


My story book is about 20  long.



13. The crayon is  cm longer than the eraser.

14. Fill in the box with g or kg.

A male tiger has a mass of about 300 .



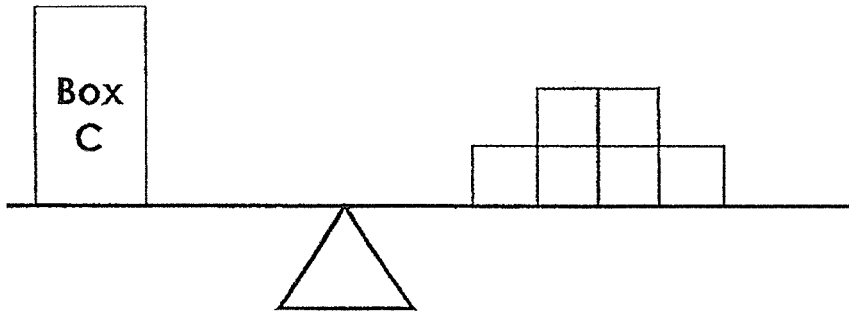
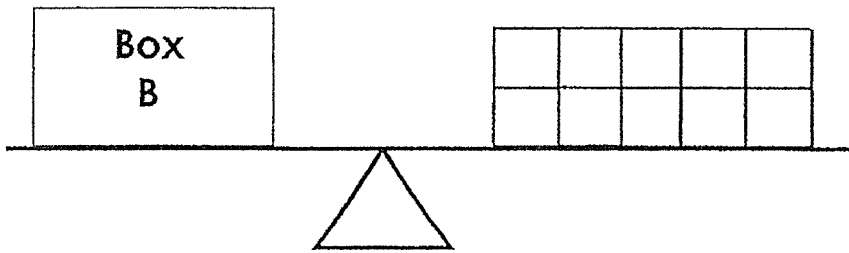
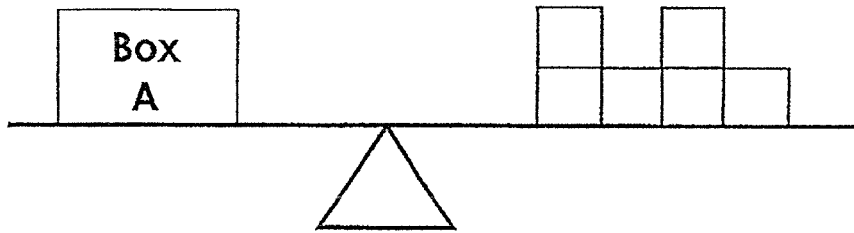
Arrange the **fruits** in order of their mass. Begin with the heaviest.

, , ,

Heaviest

Study the following picture carefully. Use the words in the box to answer questions 16 and 17.

as heavy as      heavier than      lighter than

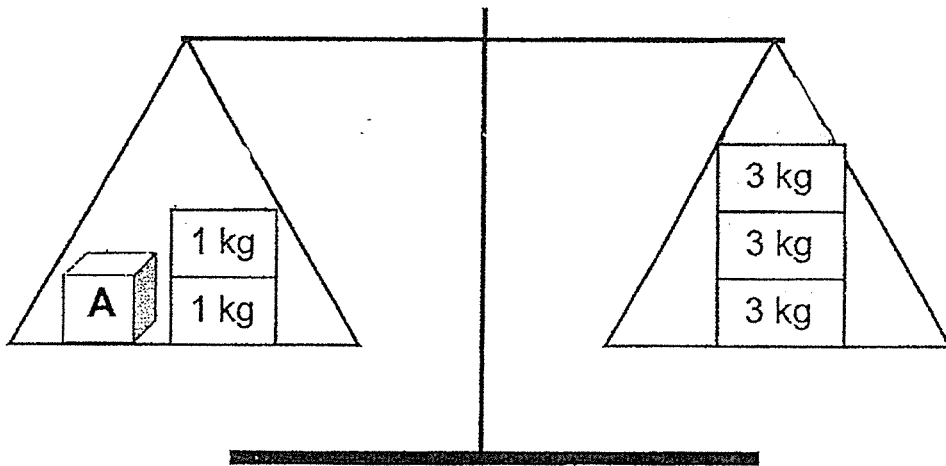


16. Box C is  Box A.

17. Box A is  Box B.

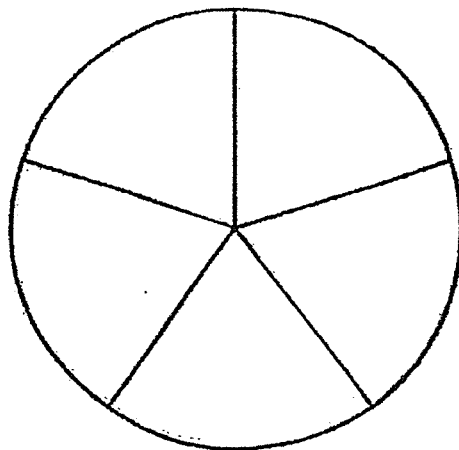


18. What is the mass of Box A?

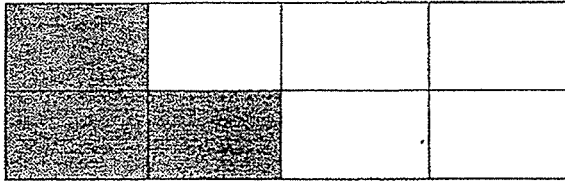


The mass of Box A is  kg.

19. Shade  $\frac{2}{5}$  of the figure.



20. What fraction of the figure is shaded?



Answer:

21.  $\frac{3}{7}$  and  make 1 whole.

22. Arrange the fractions from the greatest to the smallest.

$\frac{1}{3}$  ,  $\frac{1}{10}$  ,  $\frac{1}{2}$  ,  $\frac{1}{7}$

,  ,  ,

**Greatest**

23.  $\frac{12}{12} - \frac{5}{12} = \boxed{\phantom{00}}$

24.  $\frac{2}{11} + \frac{6}{11} = \boxed{\phantom{00}}$

**Section B (3 x 2 marks)**

Read the questions carefully.

Write your answers in the spaces provided.

25. There are 65 balls in the PE room.

25 of them are yellow and the rest are blue.

How many more blue balls than yellow balls are there?

$$\square \bigcirc \square = \square$$

There are \_\_\_\_\_ blue balls in the PE room.

$$\square \bigcirc \square = \square$$

There are \_\_\_\_\_ more blue balls than yellow balls.

26. Lena baked 39 apple pies and 55 chicken pies.  
She sold 77 pies in total that day.  
How many pies were not sold?

$$\square \bigcirc \square = \square$$

Lena baked \_\_\_\_\_ pies altogether.

$$\square \bigcirc \square = \square$$

\_\_\_\_\_ pies were not sold.

27. A toy car has a mass of 680 g.  
A doll is 150 g lighter than the toy car.  
The doll is 450 g lighter than a toy truck.  
Find the mass of the toy truck.



The mass of the doll is \_\_\_\_\_ g.



The mass of the toy truck is \_\_\_\_\_ g.

----- **End of Paper** -----

TAO NAN SCHOOL

HOLISTIC ASSESSMENT MATHEMATICS REVIEW (3) 2019

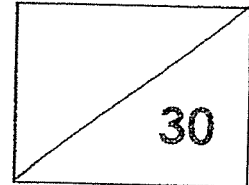
Name: \_\_\_\_\_ (     )

Class : Pr 2 (     )

Duration : 1 hour

Date: 21 October 2019

Parent's signature : \_\_\_\_\_



**Section A (20 x 1 mark)**

Read the questions carefully.

Write the correct answers in the boxes provided.


1. Count the set of money below. Write the amount in the box.

50  
SPECIMEN  
10  
SPECIMEN  
10  
SPECIMEN  
10  
SPECIMEN

1 DOLLAR  
1 DOLLAR  
1 DOLLAR  
50 CENTS  
20 CENTS  
10 CENTS  
10 CENTS  
10 CENTS

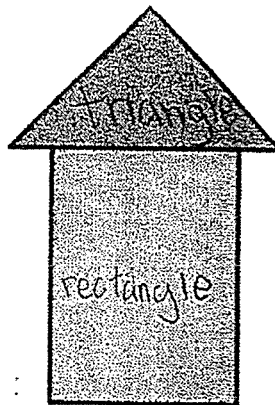
\$

2.



The time shown on the clock is

3. Study the figure below.




It is made up of a

and

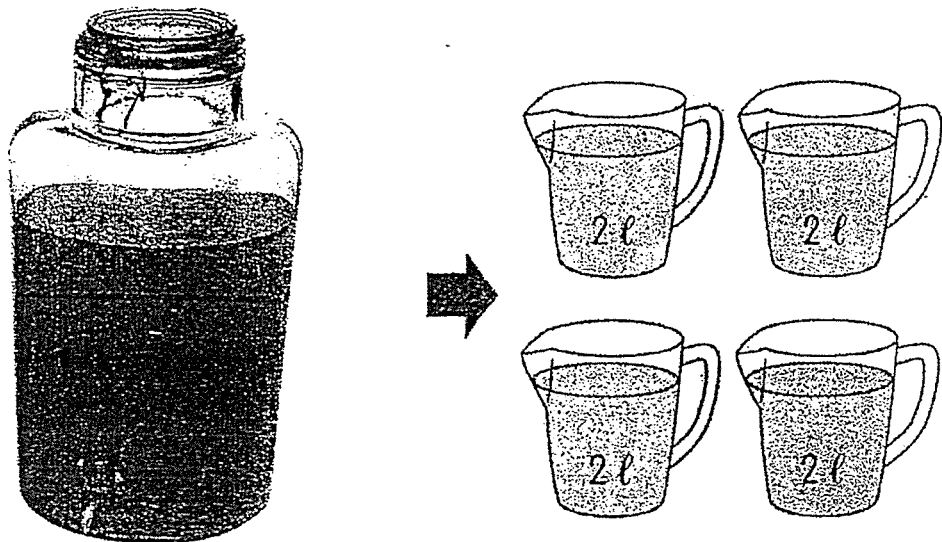
a



4. Look at the shapes of the objects in the box below.  
Put a cross ( X ) through the **odd** one out.




5.




Mrs Lim made  l of juice for the party.

6. \$4.50 is the same as  cents.

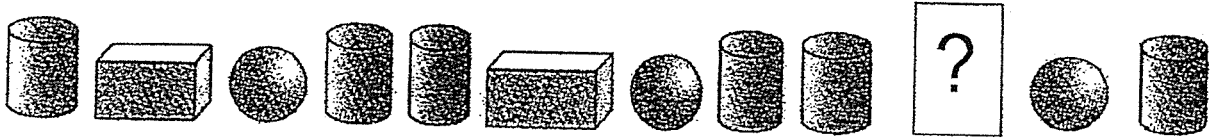
7. Draw the missing **minute hand** on the clock face below to show the time 12.10.



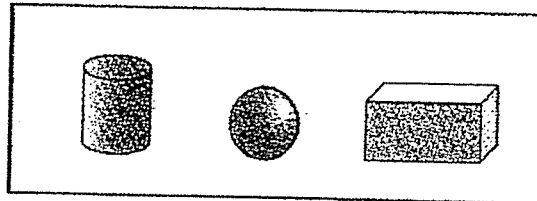
8. Copy the given figure onto the dot grid on the right.



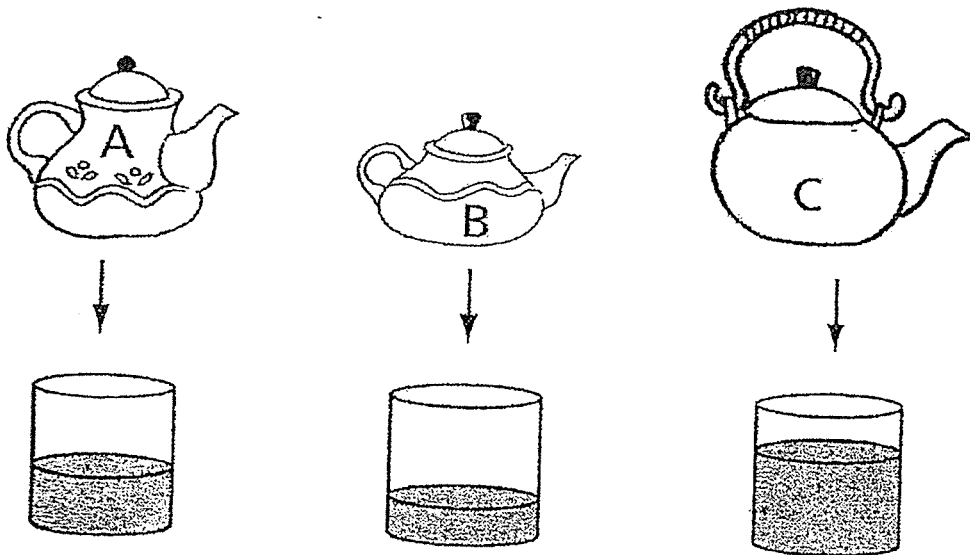
9. Circle the missing shape in the box to complete the pattern




The missing shape is



10. Compare the volume of tea in Teapots A, B and C.




Arrange them from the greatest volume of tea to the smallest.



greatest

11. John was at the library at 5:00 p.m.


He spent **half an hour** there.



John left the library at





p.m.

12. Compare the amounts of money in Bags A and B.

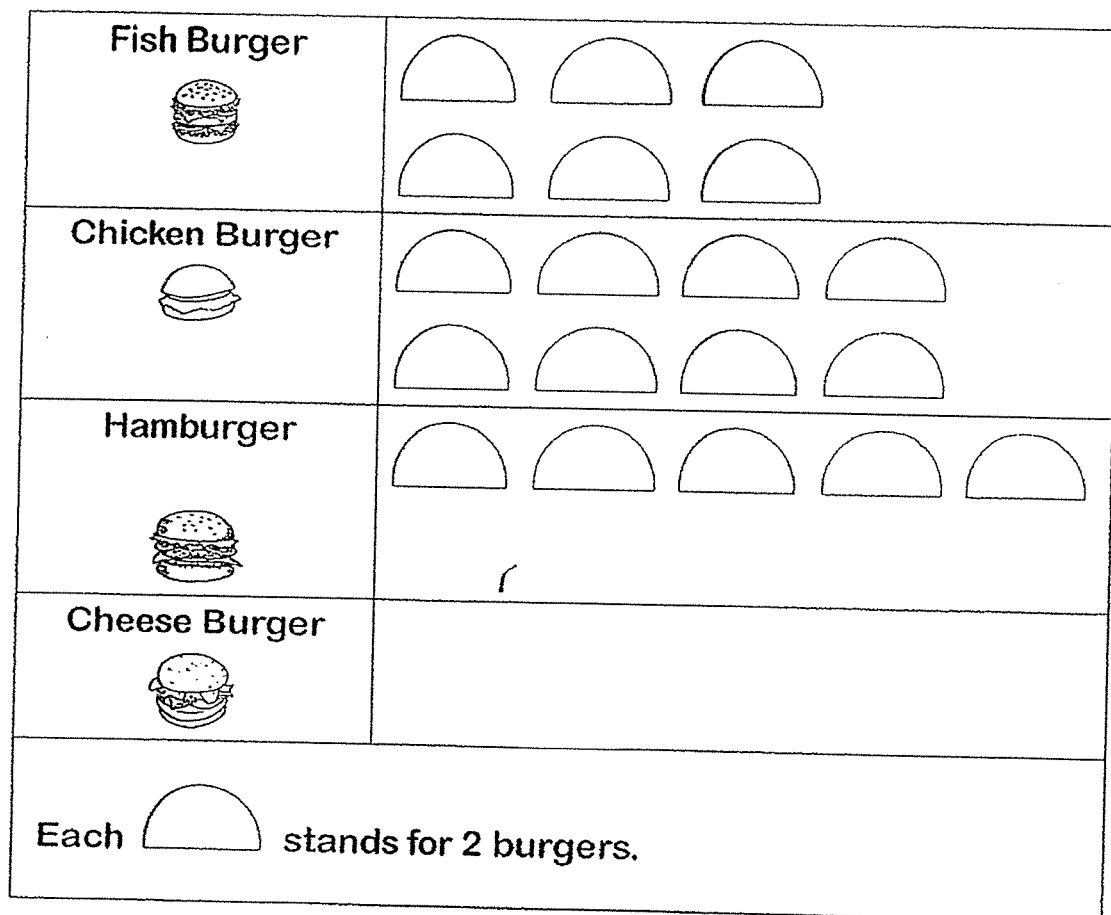



Bag  has **more** money than Bag .

13. The chart below shows the number of each type of burgers sold in a school canteen last Monday. A picture graph has been drawn.


| Fish Burger   | Chicken Burger  | Hamburger   | Cheese Burger   |
|---|---|---|---|
|  |  |  |  |
| 12  | 16  | 10  | 8   |

Number of Burgers Sold



Complete the graph by drawing  to show the number of **Cheese Burgers** sold.

14. Complete the sentence with **a.m.** or **p.m.**



Ali and Tom play soccer in school at 9.45  every day.

15. Siti and her father had lunch at Zam's Restaurant.

The receipt below shows the amount of money they had spent.


| <u>Zam's Restaurant Receipt</u> |         |
|---------------------------------|---------|
| Chicken Chop                    | \$ 8.00 |
| Salad                           | \$ 6.00 |
| Apple Juice                     | \$ 3.00 |
| Orange Juice                    | \$ 2.00 |
| <hr/>                           |         |
| Total Amount:                   | \$19.00 |

The  cost \$4 more than the .

The picture graph below shows the number of storybooks read by 4 children during the school holidays.

Study the graph and answer Questions 16 to 18.

**Number of Storybooks Read**




16. Aini read  more storybooks than Dora.

17.  and  read the same number of storybooks.

18. Ben and Cate read a total of  storybooks.

19. A cap costs \$9.00. A pencil case costs \$4.00 less than the cap.




The pencil case costs \$

20. The number of each type of items collected by Kumar is shown in the table below.

| Stickers | Seashells | Stamps | Game Cards | Bookmarks |
|----------|-----------|--------|------------|-----------|
| 80       | 20        | 50     | 100        | 30        |

Kumar uses the above data to draw the picture graph below.

**Items Collected by Kumar**



In the graph, each stands for  of each item.



**Section B** (5 X 2 marks)

Read the questions carefully.

Show your workings and equations clearly.

21. Meili bought a bag for \$32.00 and a T-shirt for \$29.00.  
She had \$49 left.  
How much money did Meili have at first?

$$\square \ominus \square = \square$$

The bag and T-shirt cost \$ \_\_\_\_\_.

$$\square \ominus \square = \square$$

Meili had \$ \_\_\_\_\_ at first.

22. A stationery shop sold 538 pens in August.

It sold 150 fewer pens in September than in August.

How many pens did it sell in the two months altogether?

$$\square \ominus \square = \square$$

It sold \_\_\_\_\_ pens in September.

$$\square \oplus \square = \square$$

It sold \_\_\_\_\_ pens altogether.

23. There are ~~45 l~~ of milk in Bottles X and Y altogether.

There are ~~28 l~~ of milk in Bottle X.

How much more litres of milk are there  
in Bottle X than in Bottle Y?

$$\square \ominus \square = \square$$

There are \_\_\_\_\_ l of milk in Bottle Y.

$$\square \ominus \square = \square$$

There are \_\_\_\_\_ more litres of milk in Bottle X  
than in Bottle Y.

24. A pail holds 6 l of water.



Mrs Tan uses 3 pails of water to wash her car.

Then, she uses another 2 l of water for her plants.

How many litres of water does she use altogether?

$$\square \bigcirc \square = \square$$

Mrs Tan uses \_\_\_\_\_ l of water to wash her car.

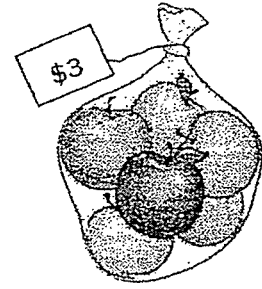
$$\square \bigcirc \square = \square$$

Mrs Tan uses \_\_\_\_\_ l of water altogether.

25. A bag of 6 apples costs \$3.00.

How many **bags** of apples will Mrs Lee be able to buy with \$15.00?

How many apples will Mrs Lee be able to buy with the \$15.00?



$$\square \circ \square = \square$$

Mrs Lee will be able to buy \_\_\_\_\_ bags of apples with \$15.00.

$$\square \circ \square = \square$$

She will be able to buy \_\_\_\_\_ apples with the \$15.00.

---

*End of Paper*



## ANSWER KEY

YEAR : 2019  
LEVEL : PRIMARY 2  
SCHOOL : TAO NAN SCHOOL  
SUBJECT : MATHEMATICS  
TERM : HOLISTIC ASSESSMENT REVIEW 2, 3

### HOLISTIC ASSESSMENT REVIEW 2

#### SECTION A

Q1)  $3 \times 0 = 0$

Q2) 5 groups of 4 = 20

Q3)  $4 \times 8 = 32$

Q4)  $15 \div 3 = 5$

Q5)  $16 \div 4 = 4$

Q6)  $12 \div 4 = 3$

Q7)  $9 \times 3 = 27$

Q8)  $6 \div 3 = 2$

Q9) 9 cm

Q11)  $157 + 8 = 165$  cm

Q12) 20 cm

Q13) 3 cm

Q14) 300 kg

Q15) pineapple, grapes, apples, strawberries.


heaviest

Q16) as heavy as

Q17) lighter than

Q18) 7 kg

Q19)



Q20)  $\frac{3}{8}$

Q21)  $\frac{4}{7}$

Q22)  $\frac{1}{2}, \frac{1}{3}, \frac{1}{7}, \frac{1}{10}$

greatest

Q23)  $\frac{12}{12} - \frac{5}{12} = \frac{7}{12}$

Q24)  $\frac{2}{11} + \frac{6}{11} = \frac{8}{11}$

SECTION B

Q25)  $65 - 25 = 40$

$40 - 25 = 15$

Q26)  $39 + 55 = 94$

$94 - 77 = 17$

Q27)  $680 - 150 = 530\text{g}$

$530 + 450 = 980\text{g}$


HOLISTIC ASSESSMENT REVIEW 3

Q1) \$84.00

Q2) 7.40

Q3) It is made up of a triangle and a rectangle.


Q4)




Q5) 8 l

Q6) 450 cents

Q7)



Q8)



Q10) C, A, B




















greatest

Q11) 5.30 p.m.

Q12) Bag B has more money than Bag A.

Q13)

Number of Burgers Sold

|  |   |
|--|---|
| Fish Burger<br>             |      |
| Chicken Burger<br>          |     |
| Hamburger<br>               |     |
| Cheese Burger<br>           |      |
| Each  stands for 2 burgers. |   |

Q14) a.m.



Q15) The salad cost \$4 more than the Orange Juice.

Q16) 5

Q17) Ben and Dora

Q18) 45

Q19) \$5.00

Q20) 10

SECTION B

Q21)  $32 + 29 = 61$

$61 + 49 = 110$

Q22)  $538 + 150 = 388$

$538 + 388 = 926$

Q23)  $45 - 28 = 17$

$28 - 17 = 11$

Q24)  $6 \times 3 = 18$

$18 + 2 = 20$

Q25)  $15 \div 3 = 5$

$5 \times 6 = 30$

THE END

