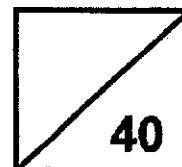




Rosyth School
Weighted Assessment Two for 2020
MATHEMATICS
Primary 3

Name: _____

Total
Marks:



Class: Primary 3 _____ Register No. _____ Duration: 50 min

Date: 25 August 2020 Parent's Signature: _____

Instructions to Pupils:

1. Do not open the booklet until you are told to do so.
2. Follow all instructions carefully.
3. This paper consists of 2 parts, Sections B and C
4. ANSWER ALL THE QUESTIONS.

	Maximum Marks	Marks Obtained
Section B	24 marks	-
Section C	16 marks	
Total	40 marks	

* This booklet consists of 12 printed pages (including cover page).

Section B (24 marks)

Questions 1 to 12 carry 2 marks each. Write your answers in the spaces provided. Show your workings clearly. For questions which require units, give your answers in the units stated.

Do not write in this space.

1. The graph below shows the number of books borrowed by the Primary 3 classes in the month of July.



How many books did the students from Primary 3 Thoughtful and Primary 3 Affable borrow altogether?

Ans: _____



2. The figure below is divided into equal parts.
What fraction of the figure is shaded?



Ans: _____

Do not
write in
this space.

3. Arrange the set fractions in order.
Begin with the smallest.

$$\frac{1}{4}, \frac{1}{6}, \frac{1}{3}$$

Ans: _____ , _____ , _____
 smallest

4. Find the value of $\frac{6}{7} - \frac{2}{7}$.

Ans: _____

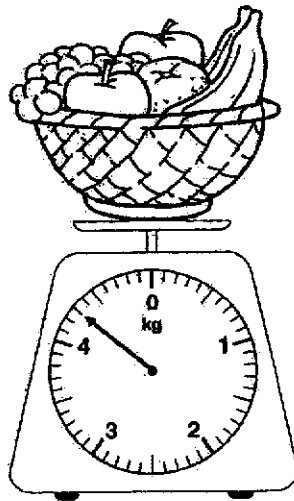
5. (a) Write 3 km 90 m in metres.
(b) Write 7105 m in kilometres and metres.

Do not
write in
this space.

Ans: (a) _____ m

(b) _____ km _____ m

6. What is the mass of the basket of fruits?
(Express your answer in grams.)



Ans: _____ g

7. (a) Write \$39.77 in cents.

(b) Write 1005 ¢ in dollars and cents

Do not
write in
this space.

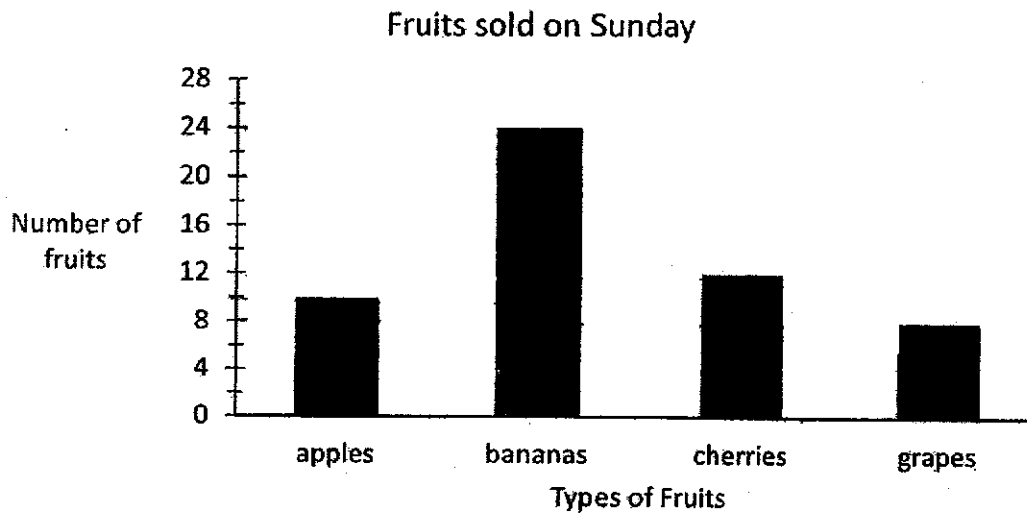
Ans: (a) _____ ¢

(b) \$ _____

8. Find the value of $\$3.85 + \2.25 .

Ans: \$ _____

9. The bar graph below shows the number of each type of fruits sold on Sunday.



Do not
write in
this space.

Which fruit was sold twice as many as cherries?

Ans: _____

10. Jug A and Jug B contain 540 ml of water. Jug A contains twice as much water as Jug B. How much water does Jug B contain?
(Express your answer in millilitres.)

Ans: _____ ml

11. The mass of a watermelon is 1480 g. It is 910 g heavier than a papaya.
Find the mass of the papaya.
(Express your answer in grams.)




Do not
write in
this space.

Ans: _____ g

12. The table below shows the items sold at ABC Pharmacy.

ABC Pharmacy

Do not write in this space.

		
<p>face masks (a pack of 10 pieces) \$8.90</p>	<p>face shield \$7.90</p>	<p>sanitizer \$3.65</p>

Ali bought 2 items from ABC Pharmacy. He gave the cashier \$20 and received a change of \$7.45. List the 2 items that he bought.

Ans: _____ and _____



Section C (16 marks)

Questions 13 to 16 carry 4 marks each. Show your working clearly and write your answers in the spaces provided. The number of marks available is shown in brackets [] at the end of each question or part-question.

Do not
write in
this space.

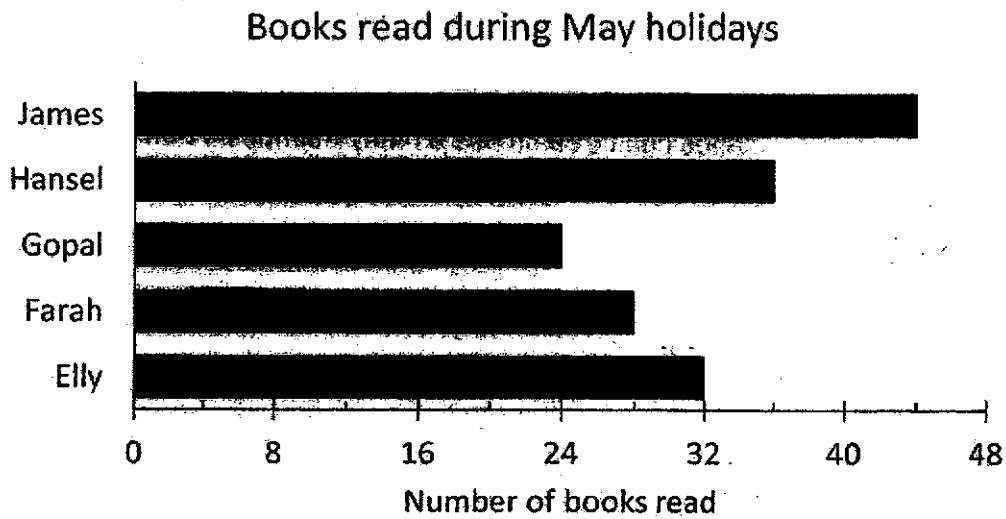
13. Ben has 95 stamps. Charles has three times as many stamps as Ben. Denny has 48 more stamps than Charles. How many stamps does Denny have?

Ans: _____ [4]



14. The bar graph below shows the number of books read by 5 children during the May holidays.

Do not write in this space.



- (a) How many more books did James read than Gopal?
 (b) What is the total number of books read by the 5 children?

Ans: (a) _____ [2]

(b) _____ [2]



15. Kevin bought 8 bottles of orange juice for a party. Each bottle contained 320 ml of orange juice. He served the orange juice to his guests and had 200 ml of orange juice left.

- (a) What was the total amount of orange juice he had at first?
(b) How much orange juice was served to the guests?
(Express your answer in litres and millilitres.)

Do not
write in
this space.

Ans: (a) _____ [2]

(b) _____ [2]



16. Meimei and Leela had 976 stickers. Meimei had 58 stickers more than Leela. How many stickers did Leela have?

Do not
write in
this space.

Ans: _____ [4]



End of Paper

SCHOOL : ROSYTH PRIMARY SCHOOL
 LEVEL : PRIMARY 4
 SUBJECT : MATH
 TERM : 2020 CA2

SECTION B

Q1)	$10+35=45$
Q2)	$\frac{6}{8}$
Q3)	$\frac{1}{6} \cdot \frac{1}{4} \cdot \frac{1}{3}$
Q4)	$\frac{4}{7}$
Q5)	a)3090m b)7km105m
Q6)	4300g
Q7)	a)3977c b)\$10.05
Q8)	\$6.10
Q9)	Bananas
Q10)	180ml
Q11)	570g
Q12)	Face masks and sanitizer
Q13)	333
Q14)	$40-24=20$ $44+36+24+28+32=164$ a)20 b)164
Q15)	a) $8 \times 320=2560$ ml $2560-200=2360$ b)2litre360ml
Q16)	$2u+58=976$ $976-58=918$ $918 \div 2=459$

