



2024 PRIMARY 3 WEIGHTED ASSESSMENT 1

Name: _____ ()

Date: 30 April 2024

Class: Primary 3 ()

Duration: 45 minutes

Parent's Signature: _____

Marks: _____ / **20**

MATHEMATICS

INSTRUCTIONS TO CANDIDATES

1. Write your name, class and register number.
2. Do not turn over this page until you are told to do so.
3. Follow all instructions carefully.
4. Answer all questions.
5. Use a dark blue or black ballpoint pen to write your answers in the space provided for each question.
6. Do not use correction fluid/tape or highlighters on any part of your answers.

Section A**Short Answer Questions**

Questions 1 to 10 carry 1 mark each. Write your answers in the spaces or boxes provided. For questions which require units, give your answers in the units stated. [10 marks]

1. Write the number 6843 in words.

2. Arrange the numbers from the greatest to the smallest.



8080 8008 888 8800

Greatest


3. Find the difference between 3455 and 9050.

4. Luke has 60 lollipops.
He wants to pack 7 lollipops into each goodie bag.
How many goodie bags will he need?

5.



$$+ \boxed{?} = \$100$$



Write the missing amount to make \$100.

\$

6. Dave gave the cashier a \$50 note to pay for a book that cost \$34.65. How much change will he get?

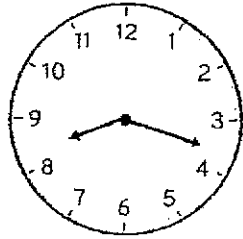
7. Gwen takes half an hour to travel to school every morning. What time does she leave home if she reaches school at 7.15 a.m.?

a.m.

8. Convert the minutes to hours and minutes.
 155 min = _____ h _____ min

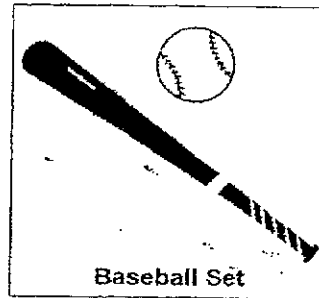

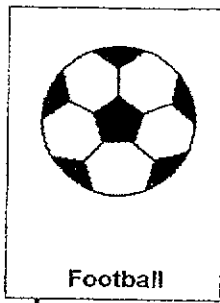
min

9. The clock below shows the time that Sally started her breakfast,
 Sally had her breakfast at _____.



a.m.

10. Some items sold in a sports shop are shown below.



Jack has \$110 to spend.
 What are the 2 different items he can buy?

_____ and _____

Section B

Questions 11 to 15 carry **2 marks** each. Show your working clearly and write your answers in the spaces provided.

[10 marks]

11. James and Tim started working on their project at 7.50 a.m. James stopped working at 9.30 a.m. Tim stopped working half an hour after James. How long did Tim spend working on the project?

Tim spent _____

Ans: _____

12. Michael bought a pencil case and a backpack. He paid \$10.50 for the pencil case. The backpack cost \$28.40 more than the pencil case. How much did he pay altogether?

He paid _____

Ans: _____

13. The difference between two numbers is 380.
The sum of the two numbers is 1280.
What is the smaller number?

The smaller number is _____

Ans: _____

14. Aaron has 58 cards. He has 5 fewer cards than Ben.
Charles has 6 times as many cards as Ben.
How many cards does Charles have?

Charles has _____

Ans: _____

15. Adam eats an egg every day from Monday to Saturday and two eggs on every Sunday.
- (a) How many eggs does Adam eat in a week?
- (b) Adam buys a carton of 30 eggs to eat.
How long will Adam take to finish all the eggs?
(Leave your answer in weeks and days.)

(a) Adam eats _____

(b) It will take _____

Ans: (a) _____

(b) _____

End of paper

LEVEL : PRIMARY 3

SCHOOL : TAO NAN SCHOOL

SUBJECT : MATHEMATICS

TERM : WEIGHTED ASSESSMENT 1

Q1	Six thousand , eight hundred and forty-three
Q2	8800, 8080, 8008, 888
Q3	$9050-3455 = 5595$
Q4	8
Q5	\$35.10
Q6	\$15.35
Q7	6.45a.m
Q8	2h35min
Q9	8.17a.m
Q10	Football and Table Tennis Set
Q11	Tim spent 2 hour 10 minutes on the project
Q12	Altogether = $\$38.90 + \$10.50 = \$49.40$
Q13	The smaller number is 450
Q14	Charles has 378 cards
Q15	<p>a) Adam eats 8 eggs a week</p> <p>b) It will take 3 weeks 6 days</p> <p>1 week = 8 eggs</p> <p>$30 \div 8 = 3R6$</p>

