

**NAN HUA PRIMARY SCHOOL**  
**SEMESTRAL ASSESSMENT 1 - 2009**  
**MATHEMATICS**  
**PRIMARY 4**

**Time: 1 h 45 min**

**INSTRUCTIONS TO CANDIDATES**

1. **Write your name, register number and class in the blanks provided.**
  2. **Do not turn over this page until you are told to do so.**
  3. **Follow all instructions carefully.**
  4. **Answer all questions.**
  5. **Write your answers in this booklet.**
- 

**Marks Obtained**

Section	Maximum Marks	Actual Marks
A	40	
B	40	
C	20	
Total	100	

**Name:** \_\_\_\_\_ (       )

**Class:** Pr 4 \_\_\_\_\_

**Date:** 13 May 2009

**Parent's Signature:** \_\_\_\_\_

**SECTION A (20 x 2 marks)**

**Questions 1 to 20 carry 2 marks each.**

**Of the four options given, only one is correct. Choose the correct answer (1, 2, 3 or 4) and write its number in the brackets provided.**

1. The digit 6 in 60 070 stands for \_\_\_\_\_.

( 1 ) 6

( 2 ) 600

( 3 ) 6 000

( 4 ) 60 000

( )

2. The numeral for eighty-five thousand, eight hundred and five is \_\_\_\_\_.

( 1 ) 8 585

( 2 ) 80 585

( 3 ) 85 805

( 4 ) 85 850

( )

3. The first two common multiples of 4 and 6 are \_\_\_\_\_.

( 1 ) 6 and 12

( 2 ) 8 and 24

( 3 ) 12 and 18

( 4 ) 12 and 24

( )

4. There are \_\_\_\_\_ hundreds in 20 000.

(1) 20

(2) 2

(3) 200

(4) 2 000

( )

5. Kate has \$120. She has \$75 more than Peter. How much money do they have altogether?

(1) \$315

(2) \$270

(3) \$195

(4) \$165

( )

6. Which of the following has 9 as a factor?

(1) 65

(2) 74

(3) 81

(4) 92

( )

7.  $3\frac{2}{5}$  expressed as an improper fraction is \_\_\_\_\_.

(1)  $\frac{6}{5}$

(2)  $\frac{11}{5}$

(3)  $\frac{17}{5}$

(4)  $\frac{32}{5}$  ( )

8. Which of the following fraction is nearest to 1 ?

(1)  $\frac{2}{7}$

(2)  $\frac{5}{6}$

(3)  $\frac{1}{2}$

(4)  $\frac{3}{4}$  ( )

9. A packet of sugar has a mass of  $\frac{5}{6}$  kg. It is  $\frac{1}{12}$  kg heavier than a packet of salt.  
What is the mass of the packet of salt ?

(1)  $\frac{2}{3}$  kg

(2)  $\frac{3}{4}$  kg

(3)  $\frac{1}{3}$  kg

(4)  $\frac{11}{12}$  kg ( )

10. Which of the following is **NOT** equal to  $\frac{9}{12}$  ?

(1)  $\frac{6}{8}$

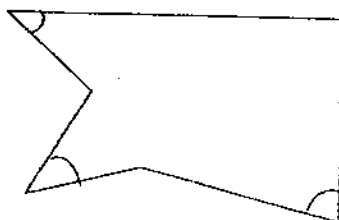
(2)  $\frac{12}{16}$

(3)  $\frac{6}{10}$

(4)  $\frac{3}{4}$

( )

11. Look at the figure below, how many angles **inside** the figure are smaller than a right angle ?



(1) 5

(2) 2

(3) 3

(4) 4

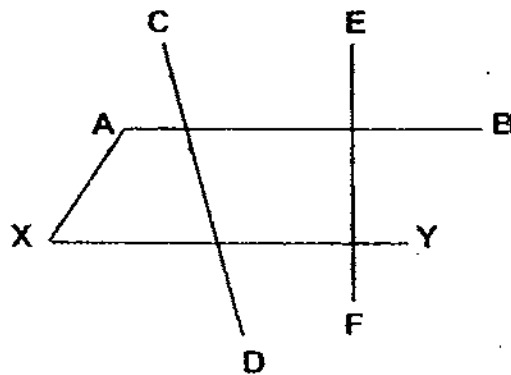
( )

12. Which one of the following figures is  $\frac{1}{3}$  shaded?



( )

13.



In the figure above line XY is perpendicular to line \_\_\_\_\_.

(1) AB

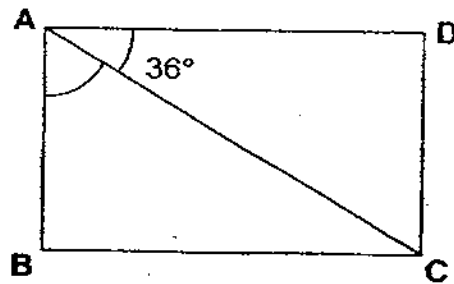
(2) CD

(3) EF

(4) XA

( )

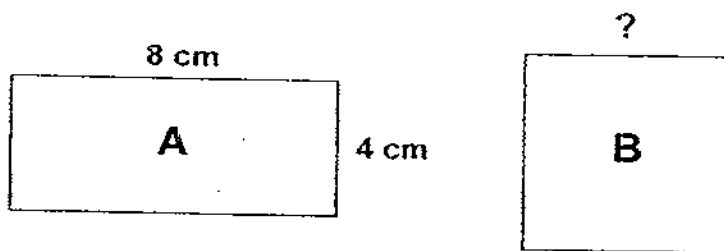
14. In the figure below, ABCD is a rectangle and  $\angle DAC = 36^\circ$ . Find  $\angle BAC$ .



- (1)  $36^\circ$
- (2)  $44^\circ$
- (3)  $54^\circ$
- (4)  $64^\circ$

( )

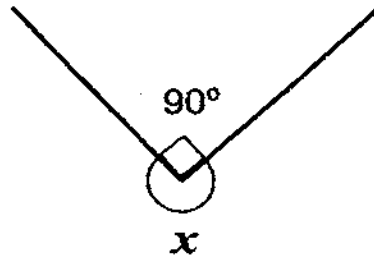
15. The perimeter of Rectangle A and Square B are equal. Find the length of Square B. (The figures are not drawn to scale.)



- (1) 6 cm
- (2) 8 cm
- (3) 24 cm
- (4) 32 cm

( )

16. What is the size of angle  $x$  ?



( 1 ) 5 right angles

( 2 ) 2 right angles

( 3 ) 3 right angles

( 4 ) 4 right angles

( )

17. 8 034 people visited an art exhibition. There were twice as many adults as children. There were 1 698 women. How many men were there?

( 1 ) 980

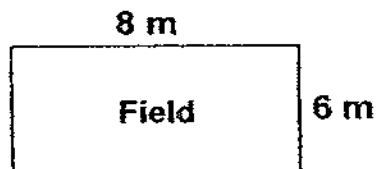
( 2 ) 3 658

( 3 ) 4 376

( 4 ) 6 336

( )

18. Abel ran round the rectangular field **twice** . What was the distance covered ?



( 1 ) 14 m

( 2 ) 28 m

( 3 ) 48 m

( 4 ) 56 m

( )



19. The breadth of a rectangle is 3 cm. If its length is 4 times as long as its breadth, what is the perimeter of the rectangle ?

(1) 12 cm

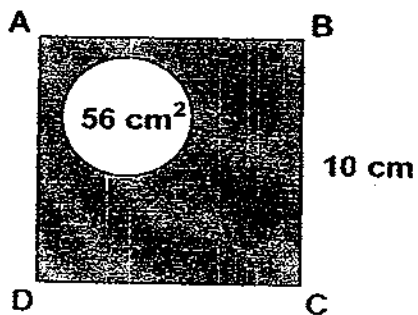
(2) 14 cm

(3) 30 cm

(4) 36 cm

( )

20.



In the figure above, ABCD is a square of side 10 cm. The area of the shaded portion is \_\_\_\_\_ cm<sup>2</sup>. (The figure is not drawn to scale)

(1) 16

(2) 36

(3) 44

(4) 54

( )

**SECTION B ( 20 x 2 marks)**

**Questions 21 to 40 carry 2 marks each.**

**Write the correct answers for the following questions in the blanks provided.  
Show your workings clearly and give your answers in the units provided.**

21. Round off 2 056 to the nearest ten.

Answer: \_\_\_\_\_

22. Express  $\frac{20}{7}$  as a mixed number.

Answer: \_\_\_\_\_

23. What is the 4<sup>th</sup> multiple of 8 ?

Answer: \_\_\_\_\_

24. Sam had 1 040 stamps. He put them equally into 6 plastic bags.  
How many stamps were left over ?

Answer: \_\_\_\_\_ stamps

25. A red ribbon is  $\frac{9}{12}$  m long. A yellow ribbon is  $\frac{1}{6}$  m longer than the red ribbon.  
What is the length of the yellow ribbon?

Answer: \_\_\_\_\_ m

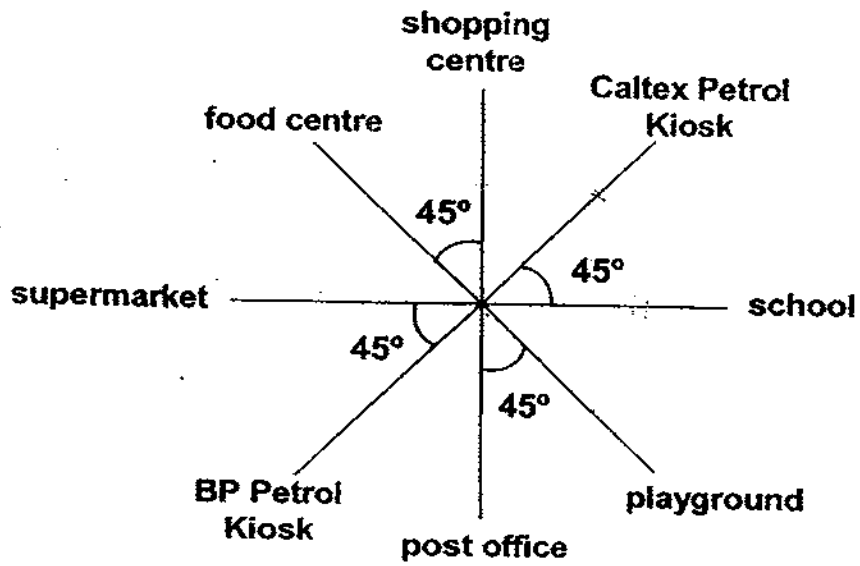
26. There are \_\_\_\_\_ right angles in 2 complete turns.

Answer: \_\_\_\_\_

27. Mina had \$200. She used  $\frac{2}{5}$  of it and saved the rest. How much did she save ?

Answer: \$ \_\_\_\_\_

28. Bala is facing the playground. He turns  $225^\circ$  anti-clockwise. Which place will he face?



Answer: \_\_\_\_\_

29.  $1 - \frac{1}{12} - \frac{1}{3} = \boxed{?}$  Express your answer in its lowest term.

Answer: \_\_\_\_\_

30. Rearrange the numbers in order beginning with the **smallest**.

10 110, 11 011, 1 110, 11 101

Answer: \_\_\_\_\_  
smallest

31.  $\frac{3}{10} + \square = \frac{2}{5}$ . The missing fraction in the box is \_\_\_\_\_.

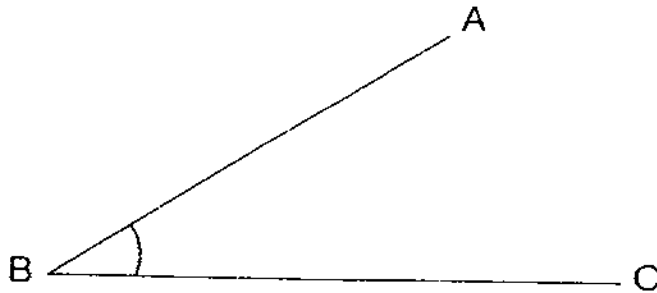
Answer: \_\_\_\_\_

32. Complete the number pattern.

29, 58, 116, \_\_\_\_\_, 464, 928

Answer: \_\_\_\_\_

33. Using a protractor, measure  $\angle ABC$ .



Answer: \_\_\_\_\_°

34. How many halves are there in  $3\frac{1}{2}$ ?

Answer: \_\_\_\_\_

35. Mrs Lim needed 426 beads to make a wedding gown but found that she was short of 104 beads. How many beads did she have ?

Answer: \_\_\_\_\_ beads

36. Divide 2 149 by 6. The quotient is (a) \_\_\_\_\_ and the remainder is (b) \_\_\_\_\_.

Answer: (a) \_\_\_\_\_

(b) \_\_\_\_\_

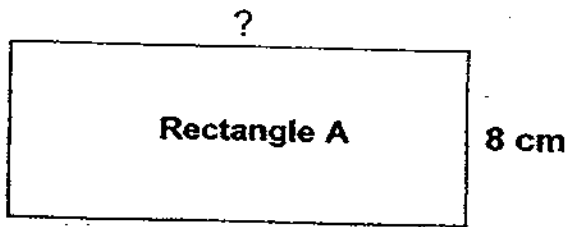
37. Figure A below is made up of 12 identical squares. What fraction of the figure is shaded?



Figure A


Answer: \_\_\_\_\_

38. The area of Rectangle A below is  $152 \text{ cm}^2$ . The breadth of the rectangle is  $8 \text{ cm}$ . Find the length of the rectangle.



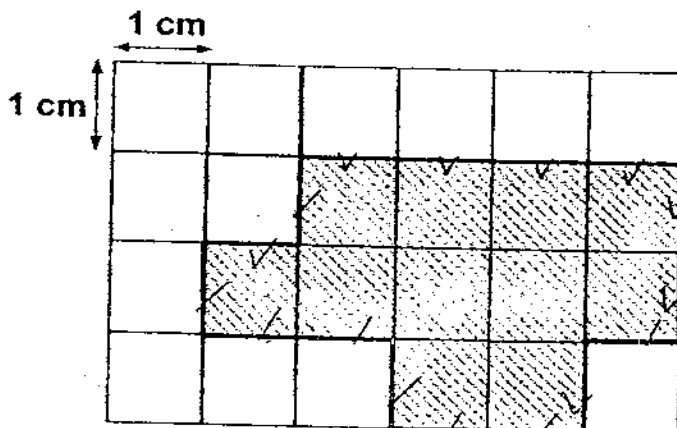
Answer: \_\_\_\_\_ cm

39. What fraction of the set below is shaded?  
Write your answer in the simplest form.



Answer: \_\_\_\_\_

40. The figure is made up of identical 1-cm squares. What is the perimeter of the shaded figure?



Answer: \_\_\_\_\_ cm

**Section C (20 marks)**

**Do the following sums carefully. All statements and workings must be clearly shown. All units must also be stated clearly.**

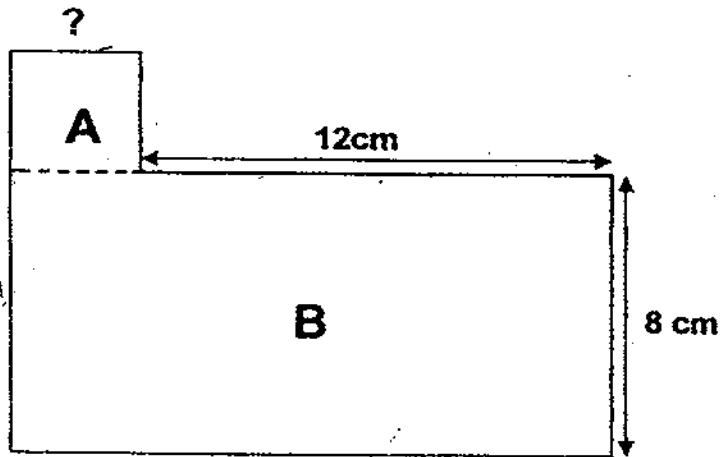
41. A toaster costs \$125. A refrigerator costs 3 times as much as a toaster. Mr Lim bought one such refrigerator and 2 such toasters. How much did he spend altogether?
42. Kelly was given some coupons to sell for the school carnival. For every 2 coupons sold, she would be rewarded with 5 stickers. How many coupons would she have to sell if she wanted to collect 20 stickers?




43. Jenny had \$120. She spent  $\frac{3}{8}$  of it on a pair of shoes and \$35 on a skirt.  
How much money had she left ?

44. Vince had 15 more stamps than Ron. Chris had 3 times as many stamps as Vince. If the 3 children had 455 stamps altogether, how many stamps did Vince have?

45. The figure below is made up of Square A and Rectangle B  
The perimeter of the whole figure shown is 60 cm.  
Find the length of Square A.  
(The figure is not drawn to scale.)



*End of Paper*




# ANSWER SHEET

**EXAM PAPER 2009**

**SCHOOL : NAN HUA PRIMARY SCHOOL**

**SUBJECT : PRIMARY 4 MATHEMATICS**

**TERM : SA 1**



Q1	Q2	Q3	Q4	Q5	Q6	Q7	Q8	Q9	Q10	Q11	Q12	Q13	Q14	Q15	Q16	Q17
4	3	4	3	4	3	3	2	2	3	3	1	3	3	1	3	2

Q18	Q19	Q20
4	3	3

21)2060

22) $2\frac{6}{7}$

23)32

24)2stamps

25)11/12 m

26)8

27)\$120

28)supermarket

29)7/12

30)1110,10110,11011,11101

31)1/10

32)232

33) $32^\circ$

34)7

35)322 beads

36)a)358 b)1

37) $7/12$

38)19 cm

39)  $\frac{1}{2}$

40)16 cm

41)\$125x3=\$375

\$125x2=\$250

\$375+\$250=\$625

He spent \$625 altogether.

42) $20 \div 5 = 4$

$4 \times 2 = 8$

She had to sell 8 coupons.

**43)** $120 \div 8 = \$15$   
 $\$15 \times 3 = \$45$   
 $\$45 + \$35 = \$80$   
 $\$120 - \$80 = \$40$   
She had \$40 left.

**44)** $15 \times 4 = 60$   
 $455 - 60 = 395$   
 $395 \div 5 = 79$   
 $79 + 15 = 94$   
Vince had 94 stamps.

**45)** $12 \times 2 = 24$   
 $8 \times 2 = 16$   
 $24 + 16 = 40$   
 $60 - 40 = 20$   
 $20 \div 4 = 5$   
The length of Square A is 5 cm.

