



Anglo-Chinese School (Primary)

END-OF-YEAR EXAMINATION 2015  
MATHEMATICS  
BOOKLET A  
PRIMARY FOUR

Name: \_\_\_\_\_

Class: Primary 4 \_\_\_\_\_

Date: 30 October 2015

Duration of Booklets A & B: 1 hour 45 minutes

**INSTRUCTIONS TO CANDIDATES**

1. This question paper consists of 8 printed pages, including the cover page.
2. Do not turn this page until you are told to do so.
3. Follow all instructions carefully.
4. Shade your answer on the Optical Answer Sheet (OAS) provided.

**SECTION A - Multiple Choice Questions (30 MARKS)**

Questions 1 to 15 carry 2 marks each.

For each question, four options are given. One of them is the correct answer. Make your choice (1, 2, 3 or 4). Shade the correct oval (1, 2, 3 or 4) on the Optical Answer Sheet (OAS).

1. Thirty-eight thousand and forty-three in figures is \_\_\_\_\_.
  - (1) 38 034
  - (2) 38 043
  - (3) 38 403
  - (4) 38 430
  
2. 45 659 rounded off to the nearest hundred is \_\_\_\_\_.
  - (1) 45 600
  - (2) 45 660
  - (3) 45 700
  - (4) 46 000
  
3. In which of the following numbers does the digit 7 stands for 7 hundredths?
  - (1) 137.234
  - (2) 234.187
  - (3) 324.768
  - (4) 432.176

4. Arrange the following fractions from the greatest to the smallest.

$$\frac{1}{4}, \frac{5}{6}, \frac{7}{12}$$

- (greatest)                      (smallest)
- (1)  $\frac{1}{4}, \frac{7}{12}, \frac{5}{6}$
- (2)  $\frac{5}{6}, \frac{7}{12}, \frac{1}{4}$
- (3)  $\frac{7}{12}, \frac{5}{6}, \frac{1}{4}$
- (4)  $\frac{7}{12}, \frac{1}{4}, \frac{5}{6}$

5.  $\frac{20}{100} = \underline{\hspace{2cm}}$

- (1) 0.002
- (2) 0.02
- (3) 0.2
- (4) 0.5

6.  $12\frac{7}{9} = \frac{\boxed{?}}{9}$

What is the missing number in the box?

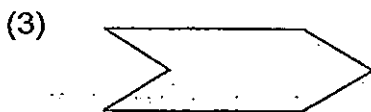
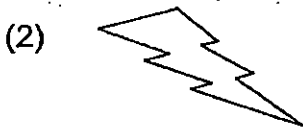
- (1) 115
- (2) 108
- (3) 93
- (4) 84

7. 6 identical poles are placed in a row at equal distances. The distance between the first and third pole is 12 m. What is the distance between the first and sixth pole?



- (1) 20 m
- (2) 24 m
- (3) 30 m
- (4) 36 m

8. Which of the following figures can tessellate?



9. A concert started at 9.55 a.m. and ended at 12.30 p.m.  
How long was the concert? Give your answer in hours and minutes.

(1) 2 h 30 min

(2) 2 h 35 min

(3) 3 h 15 min

(4) 3 h 35 min

10. Write  $6\frac{14}{20}$  as a decimal.

(1) 6.14

(2) 6.20

(3) 6.34

(4) 6.70

11. A rectangle measures 16 cm by 4 cm. It has the same area as a square.  
Find the perimeter of the square.

(1) 8 cm

(2) 10 cm

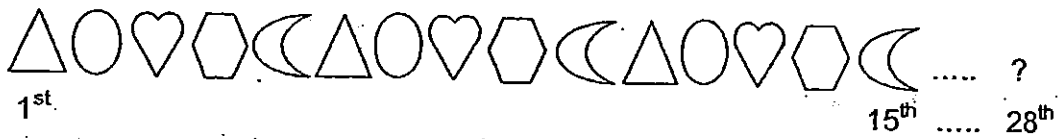
(3) 32 cm





(4) 64 cm

12. Squares A, B and C have a total area of  $170 \text{ cm}^2$ . Square A has an area of  $64 \text{ cm}^2$ . The area of Square B is  $25 \text{ cm}^2$ . What is the length of Square C?

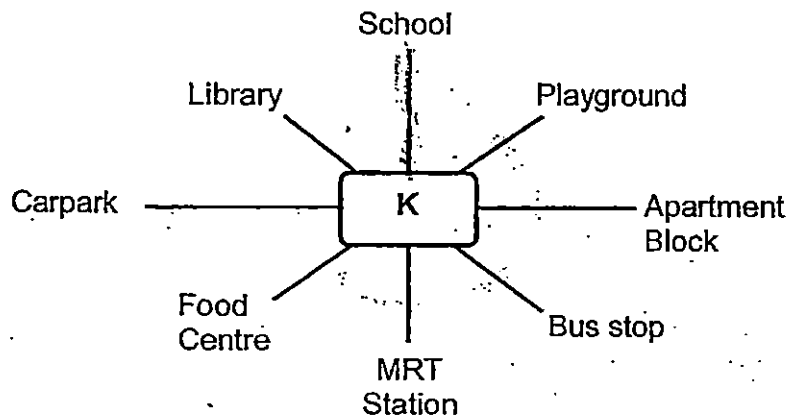
- (1) 40 cm
- (2) 36 cm
- (3) 3 cm
- (4) 9 cm

13. Amir used different shapes to make a pattern. The first 15 shapes are shown below. What is the 28<sup>th</sup> shape?



- (1) 
- (2) 
- (3) 
- (4) 

14. Kyra is standing at the point marked K in the figure below. She is facing the food centre. What will she face when she turns  $225^\circ$  anti-clockwise?



- (1) Bus Stop  
(2) Playground  
(3) Library  
(4) School
15. Bob, Carl and Dan had \$76 altogether. Bob and Carl had the same amount of money. Dan had \$10 more than Bob. How much did Carl have?

- (1) \$22  
(2) \$32  
(3) \$33  
(4) \$66



Anglo-Chinese School (Primary)

END-OF-YEAR EXAMINATION 2015  
MATHEMATICS  
BOOKLET B  
PRIMARY FOUR

Name: \_\_\_\_\_

Class: Primary 4 \_\_\_\_\_

Date: 30 October 2015

Duration of Booklets A & B: 1 hour 45 minutes

\_\_\_\_\_  
Parent's/Guardian's signature

**INSTRUCTIONS TO CANDIDATES**

1. This question paper consists of 16 printed pages, including the cover page.
2. Do not turn this page until you are told to do so.
3. Follow all instructions carefully.
4. Answer all questions.

Section	Maximum Marks	Marks Obtained
A. Multiple-Choice Questions	30	
B. Short Answers	40	
C. Problem Sums	30	
Total Marks	100	



**SECTION B - Short Answers (40 Marks)**

Questions 16 to 35 carry 2 marks each. Show all workings clearly.  
Write your answer in the space provided. Give your answers in the units stated and in its simplest form whenever possible.

16. What is the value of the digit 3 in 23 794?

Answer : \_\_\_\_\_

17. Write  $\frac{94}{6}$  as a mixed number in its simplest form.

Answer : \_\_\_\_\_

18. Arrange the following numbers from the greatest to the smallest.

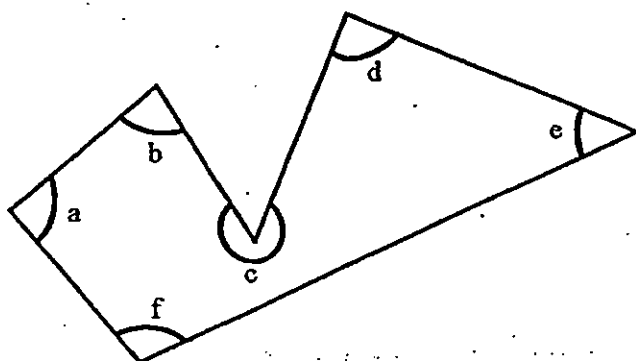
$$\frac{4}{5}, 0.087, 0.87$$

Answer: \_\_\_\_\_ , \_\_\_\_\_ , \_\_\_\_\_  
(greatest) (smallest)

19. What is the remainder when 2 936 is divided by 7?

Answer : \_\_\_\_\_

20. Which of the marked angles in the figure below are right angles?



Answer:  $\angle$ \_\_\_\_\_ and  $\angle$ \_\_\_\_\_

21. What is the sum of 0.78, 7.08 and  $\frac{780}{100}$ ? Express your answer as a decimal.

Answer : \_\_\_\_\_

22. Which two of the fractions below are equivalent to  $\frac{8}{12}$ ?

$$\frac{1}{2}, \frac{2}{3}, \frac{3}{4}, \frac{4}{6}$$

Answer: \_\_\_\_\_ and \_\_\_\_\_

23. The table below shows the prices of two items sold in three shops.

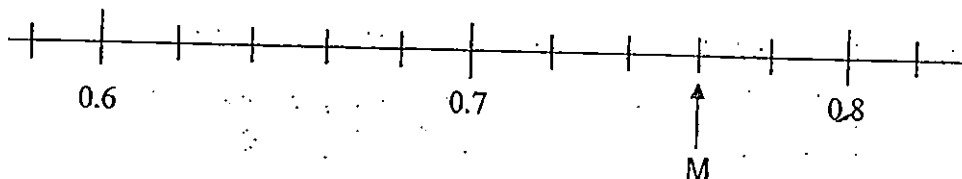
Shop	Price of a loaf of bread	Price of a bottle of water
A	\$1.10	75¢
B	\$1.25	55¢
C	\$1.35	60¢

Tom wants to buy a loaf of bread and a bottle of water.

In which shop will the total price for the two items be the lowest?

Answer: Shop \_\_\_\_\_

24. Write the decimal represented by M.



Answer: \_\_\_\_\_

25. Lana watched a movie which lasted 2 hours 45 minutes. The movie started at 6.25 p.m. What time did the movie end?

Express your answer in the 24-hour clock format.

Answer : \_\_\_\_\_

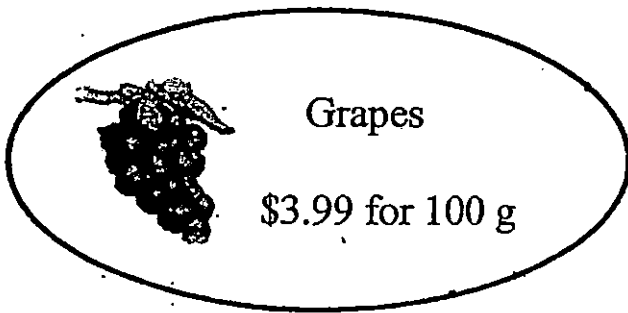
26. A string measuring 65 m is cut into 7 equal pieces. What is the length of each piece of string? Round off your answer as a decimal to 2 decimal places.

Answer : \_\_\_\_\_ m

27. What is the value of  $2 + \frac{3}{10} + \frac{2}{5}$ . Express your answer as a mixed number.

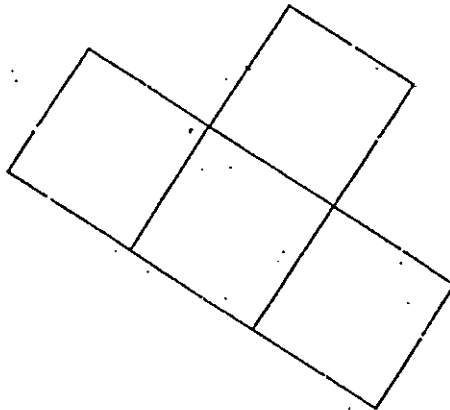
Answer : \_\_\_\_\_

28. Mrs Tan bought 800 g of grapes from a fruit stall. How much did she pay in all?



Answer : \$ \_\_\_\_\_

29. The figure below is made up of 4 identical squares. The perimeter of the figure is 180 cm. What is the area of each square?

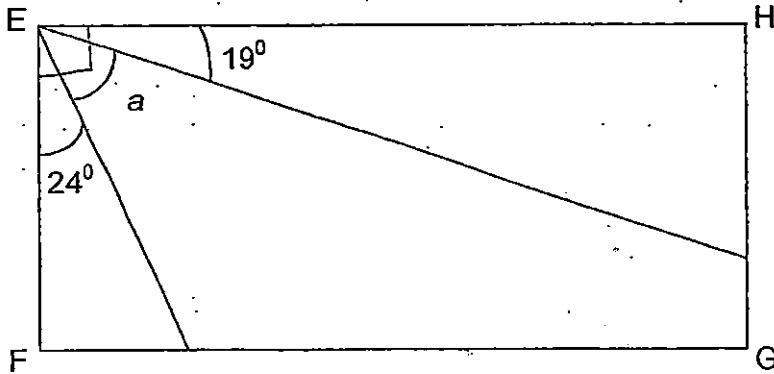


Answer: \_\_\_\_\_ cm<sup>2</sup>

30. There are 3 traffic lights on a street. Traffic light A turns red every 3 minutes. Traffic light B turns red every 4 minutes and Traffic light C turns red every 6 minutes. At 6 p.m., all the traffic lights will turn red at the same time. When is the next earliest time all the traffic lights will turn red? Express your answer in the 12-hour clock format.


Answer : \_\_\_\_\_ p.m.

31. In the figure shown, EFGH is a rectangle. Find  $\angle a$ .



Answer : \_\_\_\_\_ °

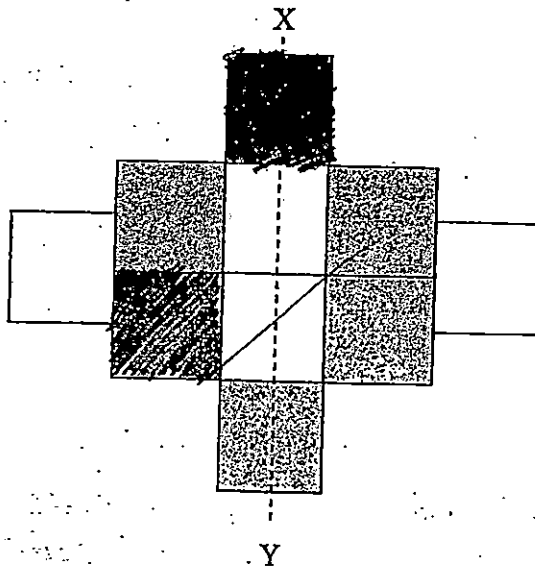
32. The figure below shows 24 hearts. 13 of the hearts are shaded. If  $\frac{5}{6}$  of all the hearts are to be shaded, how many more hearts need to be shaded?



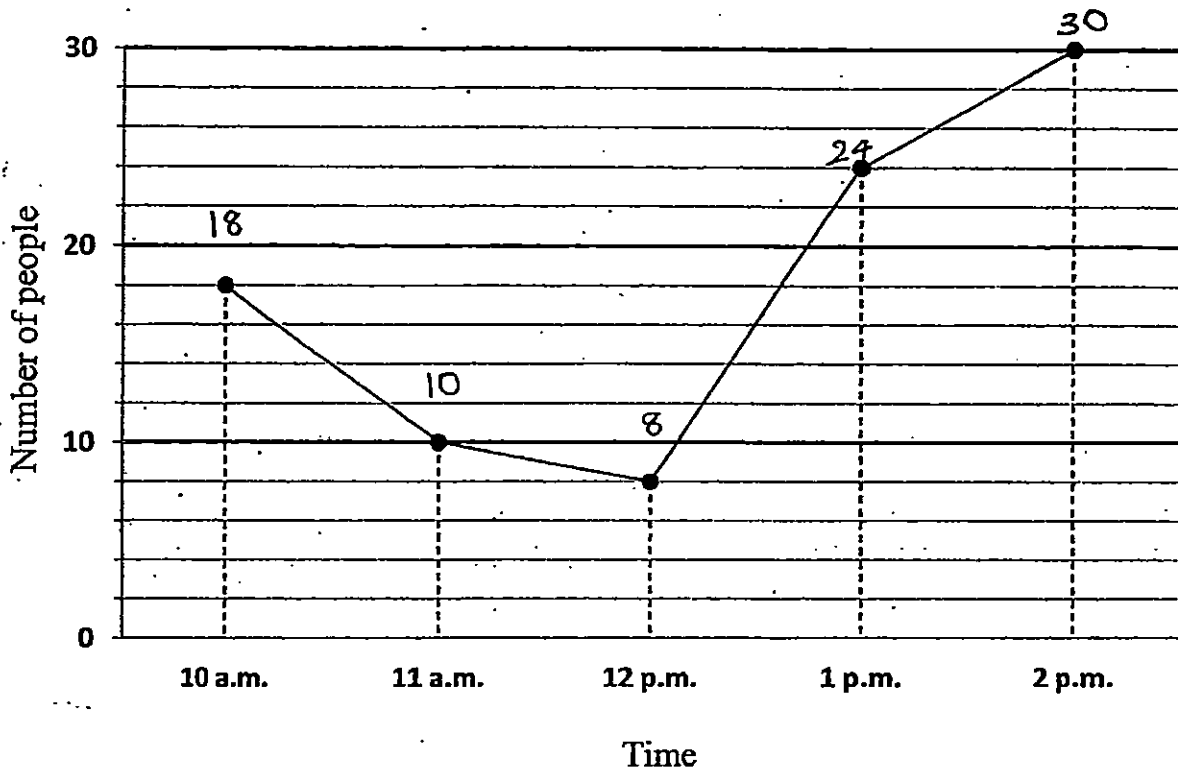
Answer : \_\_\_\_\_

33. In the figure below, the dotted line XY is the line of symmetry.

Shade two more unit squares on the figure below to complete the symmetric figure.



Study the graph below carefully and answer questions 34 and 35. The graph below shows the number of people who visited a store from 10 a.m. to 2 p.m. on Monday.



34. What was the total number of people who visited the store from 10 a.m. to 2 p.m.?

Answer : \_\_\_\_\_

35. During which hour was the greatest increase in visitors?

Answer : Between \_\_\_\_\_ and \_\_\_\_\_



**SECTION C - Problem Sums (30 Marks)**

For each question from 36 to 43, show your working and mathematical statements clearly in the space below each question. Write your answer in the answer space provided. Give your answers in the units stated and in its simplest form whenever possible. Marks awarded are shown in the brackets [ ].

36. Alice bought 6 boxes of apples. Each box contained 25.65 kg of apples. Alice repacked all the apples equally into 9 bags.

What was the mass of apples in each bag?

Answer: \_\_\_\_\_ [ 3 ]

37. 3 pears and 2 mangoes cost \$13.50. A pear and a mango cost \$6.10.

How much does a mango cost?

Answer: \_\_\_\_\_ [ 3 ]

38.  $\frac{7}{10}$  of the people at the party were children and the rest were adults.

- a) There are 52 fewer adults than children. How many people were at the party altogether?
- b) After a while, some children left the party. The number of adults left was three times the number of children remaining. How many children left the party?

Answer: a) \_\_\_\_\_ [ 2 ]

b) \_\_\_\_\_ [ 2 ]

39. Rena left home to go to the market. She walked for 15 minutes to her bus stop. Her bus journey to the market was 55 minutes.

a) How long did she spend travelling to the market from home?

**Give your answer in hours and minutes.**

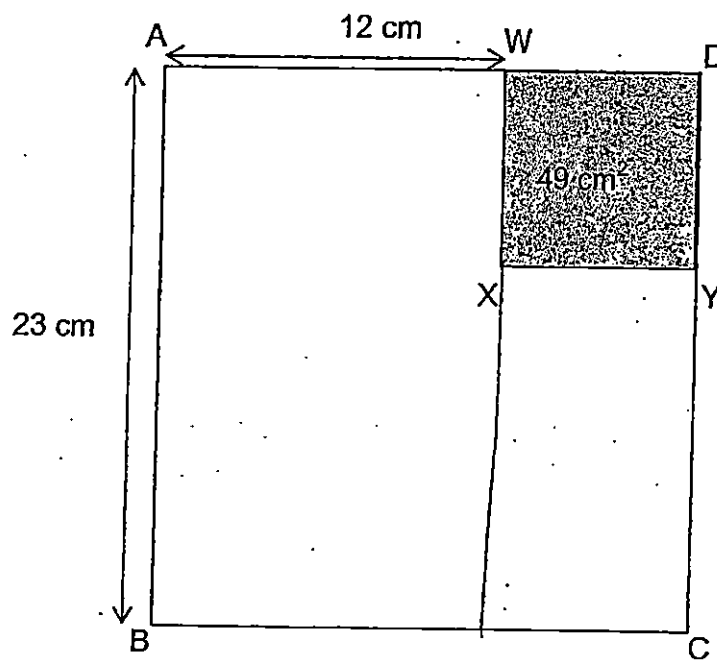
b) She spent 2 h 40 min at the market and left at 14 12. What time did she arrive at the market?

**Draw a timeline to show your working.**

Answer: (a) \_\_\_\_\_ [ 2 ]

(b) \_\_\_\_\_ [ 2 ]

40. In the figure below, not drawn to scale, ABCD is a rectangle and WXYD is a square. The area of WXYD is  $49 \text{ cm}^2$  and AW is 12 cm. Find the area of the unshaded part of the figure.



Answer: \_\_\_\_\_ [ 4 ]

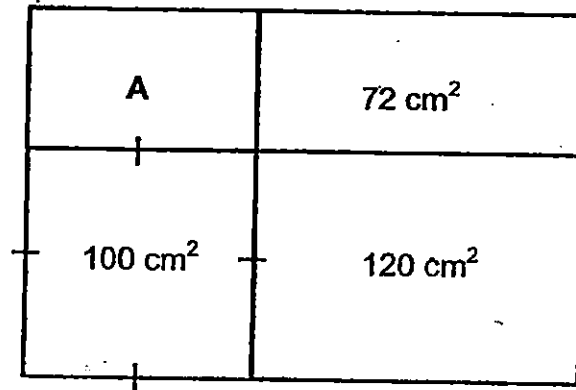
41. In a class library,  $\frac{5}{12}$  of the books are English books.  $\frac{1}{4}$  of them are Chinese books and the rest are 16 Malay and Tamil books.

- a) How many Chinese books are there in the library?  
*non-english*
- b) 18 books are then loaned out to pupils. What fraction of the books left are English books?

Answer: a) \_\_\_\_\_ [ 2 ]

b) \_\_\_\_\_ [ 2 ]

42. The figure below, not drawn to scale, is made up of a square and 3 rectangles. The square has an area of  $100 \text{ cm}^2$ . Find the area of Rectangle A.



Answer: \_\_\_\_\_ [ 4 ]

43. Rose had some money to buy some cupcakes. If she bought 12 cupcakes, she would need \$17 more. If she bought 7 cupcakes, she would be left with \$3. How much money did Rose have?

Answer: \_\_\_\_\_ [ 4 ]

End-of-Paper





**EXAM PAPER 2015**

**LEVEL : PRIMARY 4**

**SCHOOL : ANGLO CHINESE SCHOOL (PRIMARY)**

**SUBJECT : MATHEMATICS**

**TERM : SA2**

Q1	Q2	Q3	Q4	Q5	Q6	Q7	Q8	Q9	Q10
2	3	4	2	3	1	3	3	2	4
Q11	Q12	Q13	Q14	Q15					
3	4	2	4	1					

Q16. 3000

Q17.  $15\frac{2}{3}$

Q18. 0.87 (greatest),  $\frac{1}{5}$ , 0.087 (smallest)

Q19.  $3 \rightarrow 2936 \div 7 = 419 R3$

Q20.  $\angle a$  and  $\angle d$

Q21.  $15.66 \rightarrow 7.8 + 7.08 + .78 = 15.66$

Q22.  $\frac{2}{3}$  and  $\frac{4}{6}$

Q23. Shop B  $\rightarrow$  Shop A:  $1.10 + 0.75 = 1.85$ , Shop B:  $1.25 + 0.55 = 1.8$ , Shop C:  $1.35 + 0.60 = 1.95$

Q24. 0.76

Q25. 2110

Q26.  $9.29m \rightarrow 65 \div 7 = 9.28... \approx 9.29$ ,  $65 \div 7 = 9.285 \approx 9.29$

Q27.  $2\frac{1}{2} \rightarrow 2 + \frac{3}{10} + \frac{2}{5} = 2 + \frac{3}{10} + \frac{4}{10} = 2\frac{7}{10}$

Q28.  $\$31.92 \rightarrow 3.99 \times 8 = 31.92$

Q29.  $324cm^2$

Total sides = 10 sides, 10 sides = 180, 1 side =  $180 \div 10 = 18$ , Area =  $18 \times 18 = 324$

Q30. 6:12p.m.

A (every 3 minutes) : 3, 6, 9, 12, 15, ...

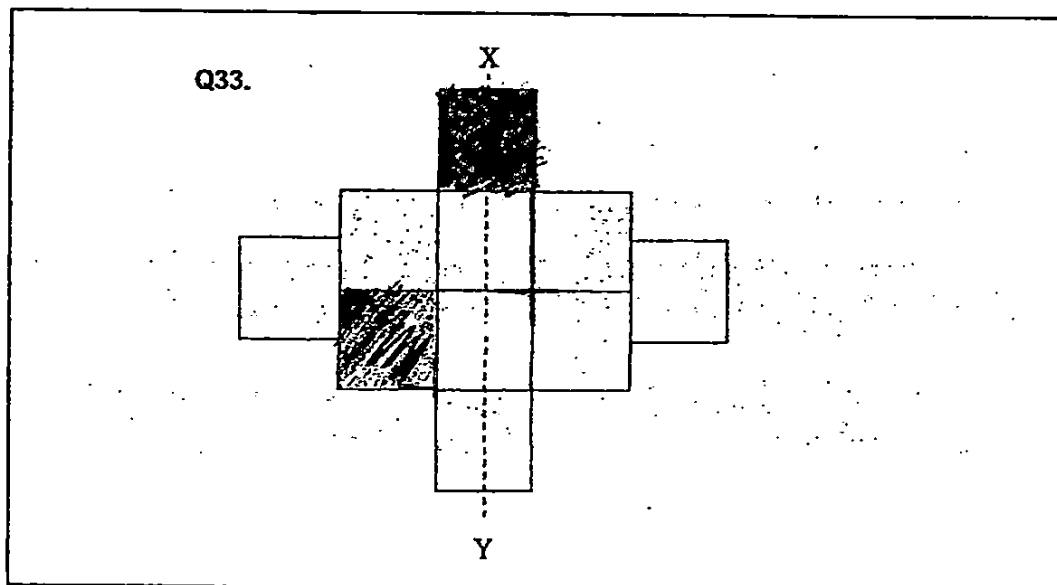
B (every 4 minutes) : 4, 8, 12, 16, ...

C (every 6 minutes) : 6, 12, 18, 24, ...

Q31.  $47^\circ \rightarrow 24 = 19 = 42$ ,  $90 - 43 = 47$

Q32. 7 more  $\rightarrow 20 - 13 = 7$

Q33. SEE PICTURE



Q34. 90 visitors  $\rightarrow 18+10+8+24+30=90$       Q35. Between 12p.m and 1p.m

Q36. 17.1kg  $\rightarrow 25.65 \times 6 = 153.90, 153.90 \div 9 = 17.1$

Q37. \$4.80

3P & 3M = 13.50, 1P & 1M = 6.10,

2P & 1M = 13.50 - 6.10 = 7.40, 1P = 7.40 - 6.10 = 1.30, 1M = 6.10 - 1.30 = 4.80

Q38a. 130  $\rightarrow 1u: 52 \div 4 = 13, 10u: 13 \times 10 = 130$

Q38b. 78  $\rightarrow 39 \div 3 = 13, 91 - 13 = 78$

Q39a. 1hr 10min  $\rightarrow 55\text{min} + 15\text{min} = 70\text{min} = 1\text{h}10\text{min}$

Q39b. 1132

Q40. 388cm<sup>2</sup>

WD =  $\sqrt{49} = 7, YC = 23 - 7 = 16,$

Area of F =  $16 \times 7 = 112, \text{Area of E} = 23 \times 12 = 276$

Area of E & F  $\rightarrow 276 + 112 = 388$

Q41a. 12 Chinese books

4u  $\rightarrow 16, 1u 16 \div 4 = 4, 3u 4 \times 3 = 12$

Q41b.  $\frac{2}{3}$

5u  $\rightarrow 4 \times 5 = 20, 12u 4 \times 12 = 48, 48 - 18 = 30, \frac{20}{30} = \frac{2}{3}$

Q42. 60cm<sup>2</sup>  $\rightarrow \sqrt{100} = 10, 120 \div 10 = 12, 72 \div 12 = 6, 10 \times 6 = 60$

Q43. \$31

Gap = 5 cupcakes, difference =  $17 - 3 = 20, 1 \text{ cupcake} = 20 \div 5 = 4$

12 cupcakes =  $12 \times 4 = 48, 48 - 17 = 31$

7 cupcakes =  $7 \times 4 = 28, 28 + 3 = 31$



**SEMESTRAL ASSESSMENT 2 (2015)**

**PRIMARY 4  
MATHEMATICS**

**Booklet A**

**Monday**

**2 November 2015**

**1 h 45 min**

Name: \_\_\_\_\_ ( ) Class: 4.( )

**INSTRUCTIONS TO PUPILS**

- 1 Do not turn over the pages until you are told to do so.
- 2 Follow all instructions carefully.
- 3 There are 20 questions in this booklet.
- 4 Answer ALL questions.
- 5 Shade your answers in the Optical Answer Sheet (OAS) provided.

**Section A (20 × 2 marks)**

For each question, four options are given. Choose the correct answer and shade the correct oval (1, 2, 3 or 4) on the Optical Answer Sheet provided.

1. 65 563 rounded off to the nearest hundred is \_\_\_\_\_.

- (1) 65 000
- (2) 65 500
- (3) 65 600
- (4) 66 000

2. 42 thousands and 2 tens is the same as \_\_\_\_\_.

- (1) 422
- (2) 4220
- (3) 42 002
- (4) 42 020

3. How many one-fifths are there in 3 wholes?

- (1)  $1\frac{2}{3}$
- (2)  $\frac{3}{5}$
- (3) 5
- (4) 15

4.  $\frac{1}{3} + \frac{1}{12} = \underline{\hspace{2cm}}$ .

(1)  $\frac{1}{36}$

(2)  $\frac{2}{3}$

(3)  $\frac{2}{15}$

(4)  $\frac{5}{12}$

5. In the number 43.57, the digit          is in the tenths place.

(1) 5

(2) 7

(3) 3

(4) 4

6. Which number below is 2.3 less than 4.69?

(1) 2.39

(2) 4.46

(3) 4.92

(4) 6.99

7. When 6 795 is divided by 8, the remainder is         .

(1) 1

(2) 2

(3) 3

(4) 4

8. Which of the following figures has parallel lines?

(1)



(2)



(3)



(4)



9. 572 hundredths is the same as \_\_\_\_\_.

(1) 0.572

(2) 5.72

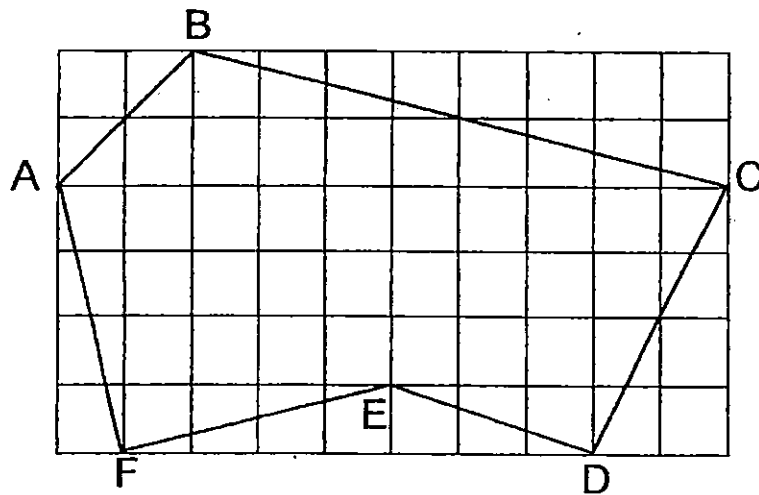
(3) 57.2

(4) 572.0

10. Suresh had 1 m of string. He cut 3 pieces of string, each measuring 20 cm and gave them to his sister. What fraction of the string was left?

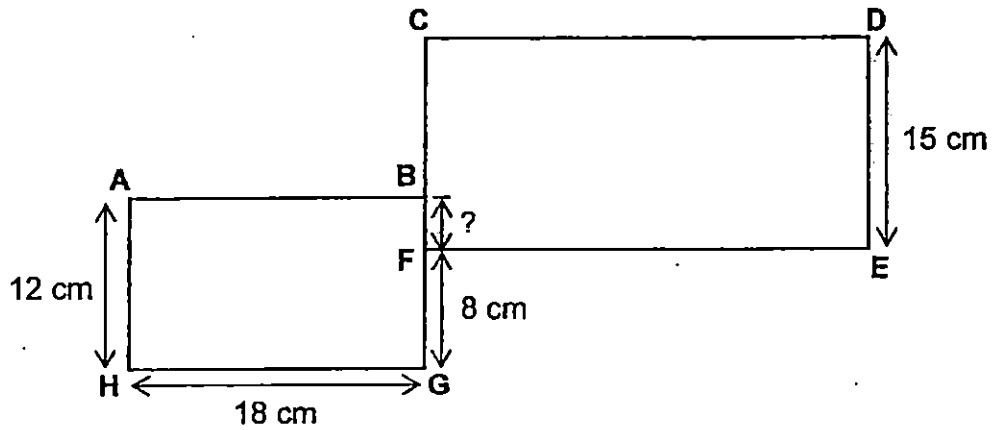
- (1)  $\frac{1}{3}$
- (2)  $\frac{2}{5}$
- (3)  $\frac{3}{5}$
- (4)  $\frac{1}{20}$

11. Figure ABCDEF is drawn on the square grid shown. Which one of the following statements is true?

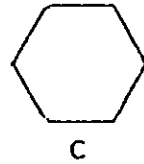
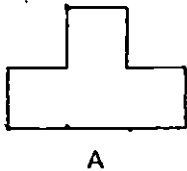


- (1) BC is a vertical line
- (2) AB is parallel to CD
- (3) AF is perpendicular to FE
- (4) DE is a horizontal line

12. All lines in the figure below meet at right angles. Find the length of BF.



- (1) 6 cm
  - (2) 7 cm
  - (3) 10 cm
  - (4) 4 cm
13. Zac wants to choose the unit shape that can tessellate to make his own gift wrapping paper pattern. Which of these shapes can he choose from?




- (1) A only
- (2) A and B only
- (3) A and C only
- (4) A, B and C



14. The movie started at 19 15. It ended at 21 05. How long was the movie?

- (1) 1 h 10 min
- (2) 1 h 50 min
- (3) 2 h 10 min
- (4) 2 h 50 min

15. The dotted line AB is a line of symmetry. What is the least possible number of squares that you should shade to make the figure symmetrical?



- (1) 1
- (2) 2
- (3) 3
- (4) 4

16. Mrs Kaili bought 4 kilograms of grapes. Each kilogram cost \$6.45. She paid the cashier \$50. How much change did she receive?

- (1) \$24.20
- (2) \$25.80
- (3) \$39.50
- (4) \$43.55

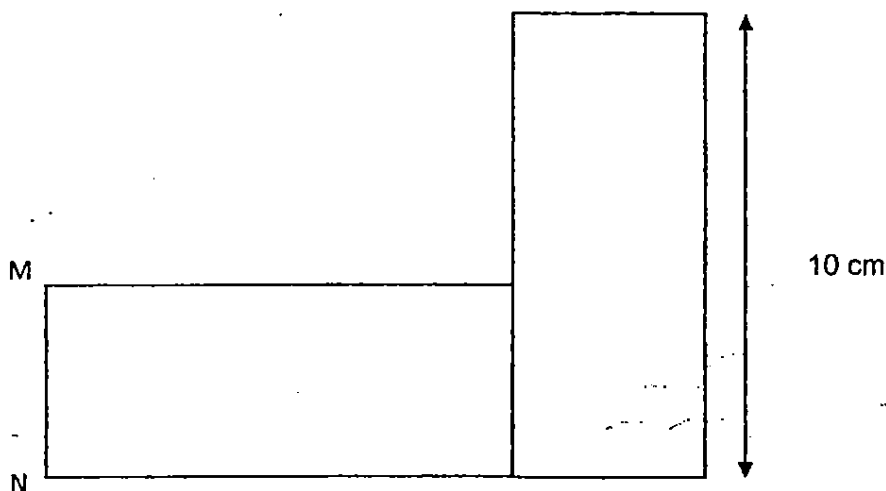
The table shows the growth of a plant in terms of its height. Study the table and answer Question 17.

Week	1st	2 <sup>nd</sup>	3rd	4th	5th
Height (cm)	5.5	12	18	22.5	28

17. During which one-week period was the growth the most?

- (1) Between the 1<sup>st</sup> week and the 2<sup>nd</sup> week
- (2) Between the 2<sup>nd</sup> week and the 3<sup>rd</sup> week
- (3) Between the 3<sup>rd</sup> week and the 4<sup>th</sup> week
- (4) Between the 4<sup>th</sup> week and the 5<sup>th</sup> week

18. The figure below is made up of 2 similar rectangles. The area of the whole figure is  $80 \text{ cm}^2$ . Find the length of MN.

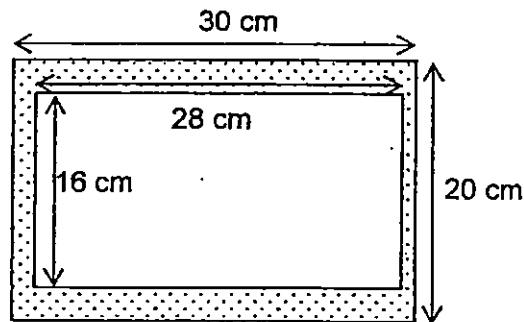


- (1) 8 cm
- (2) 10 cm
- (3) 20 cm
- (4) 4 cm

19. Peter made 76 paper aeroplanes in four days. Each day after the first day, he made 6 more paper aeroplanes than the day before. How many paper aeroplanes did he make on the first day?

- (1) 10
- (2) 13
- (3) 17
- (4) 18

20. A photograph measuring 28 cm by 16 cm is mounted on a frame measuring 30 cm by 20 cm. Find the area of the border.



- (1) 152 cm<sup>2</sup>
- (2) 188 cm<sup>2</sup>
- (3) 448 cm<sup>2</sup>
- (4) 600 cm<sup>2</sup>

**End of Booklet A**

# Anglo-Chinese School (Junior)



## SEMESTRAL ASSESSMENT 2 (2015)

### PRIMARY 4 MATHEMATICS

#### Booklet B

Monday

2 November 2015

1 h 45 min

Name: \_\_\_\_\_

Class: 4.(    )

Parent's Signature: \_\_\_\_\_

#### INSTRUCTIONS TO PUPILS

- 1 Do not turn over the pages until you are told to do so.
- 2 Follow all instructions carefully.
- 3 There are 25 questions in this booklet.
- 4 Answer ALL questions.

Section	Possible Marks	Marks Obtained
A	40	
B	40	
C	20	
Total	100	

---

This question paper consists of 12 printed pages (inclusive of cover page).

**Section B (20 × 2 marks)**

For each question, write your answer in the boxes provided. Give your answer in the units stated.

21. Write twenty-eight thousand and forty-six in figures.

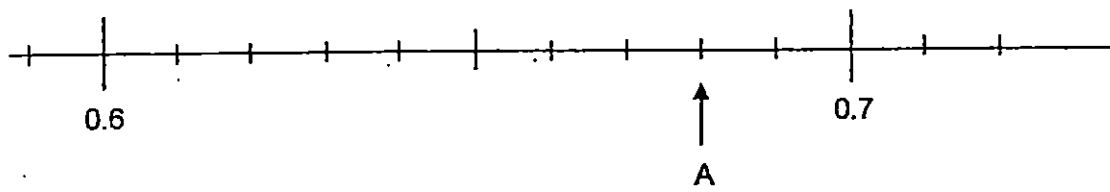
22. Find the product of 2480 and 7

23. Which two of the fractions below are smaller than  $\frac{1}{2}$ ?

$$\frac{3}{4}, \frac{4}{9}, \frac{5}{11}, \frac{6}{12}$$

24. Find the value of  $1 - \frac{1}{8} - \frac{3}{4}$ .

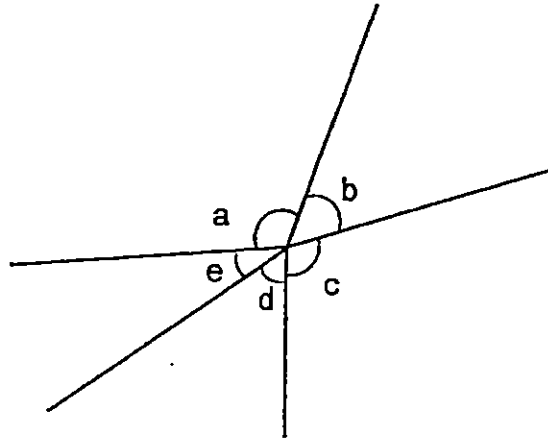
25. Write the decimal represented by A.



26. Find the value of  $5.92 \times 6$ .

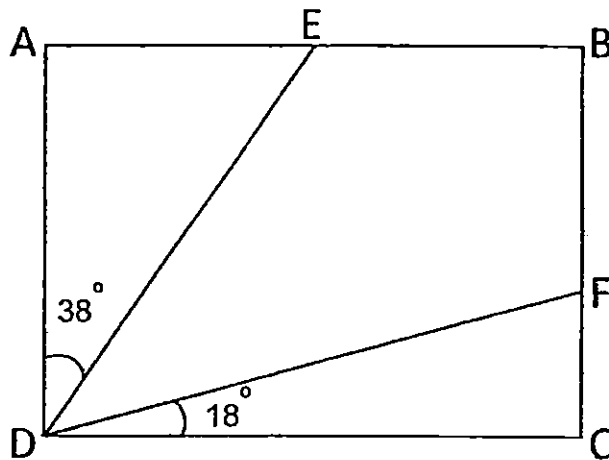
27. Write  $\frac{17}{7}$  as a mixed number in its simplest form.

28. In the figure, name the two angles that are greater than 90°.



$\angle$  \_\_\_ and  $\angle$  \_\_\_

29. In the figure shown, ABCD is a rectangle. Find  $\angle EDF$ .

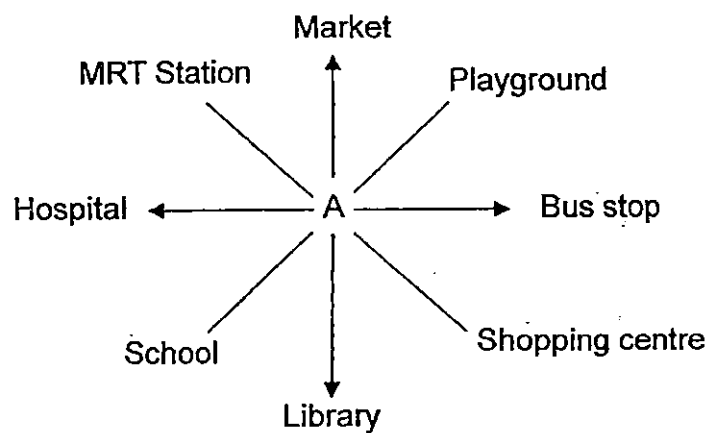


°

30. Write 0.45 as a fraction in its simplest form.

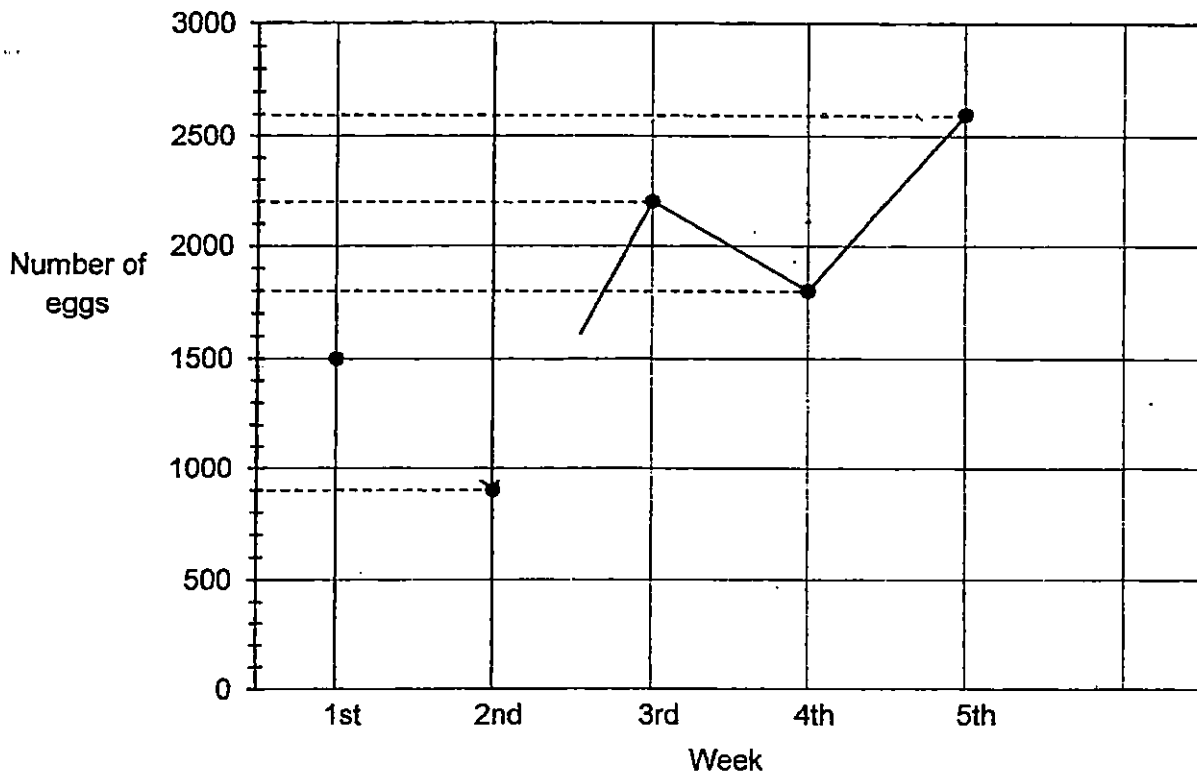
31. Jonathan went to sleep at 21 40. He slept for 7 h 30 min. At what time did he wake up? (Give your answer using the 24-hour clock)

32. Robert is standing at the point A in the figure below. He is facing the school. Where will he face if he makes a  $\frac{3}{4}$ -turn in an anti-clockwise direction?





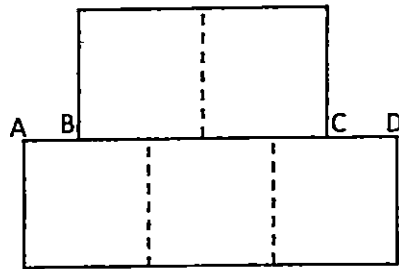
The graph below shows the number of eggs a baker used in 5 weeks. Study the graph carefully and answer Questions 33 and 34.



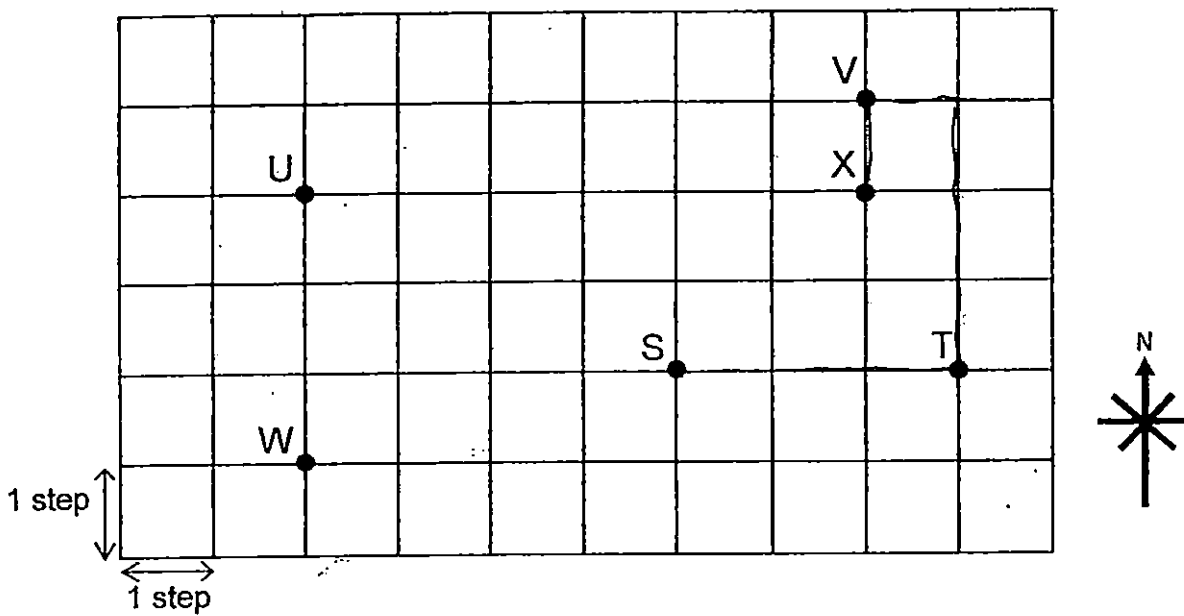
33. What was the increase in the number of eggs used between the 4th and the 5th week?

34. The baker used 8 eggs to bake a cake. How many cakes did he bake altogether from the 1st week to the 3rd week?

35. The figure below is made up of 5 identical squares of sides 5 cm. Find the total length of AB and CD.



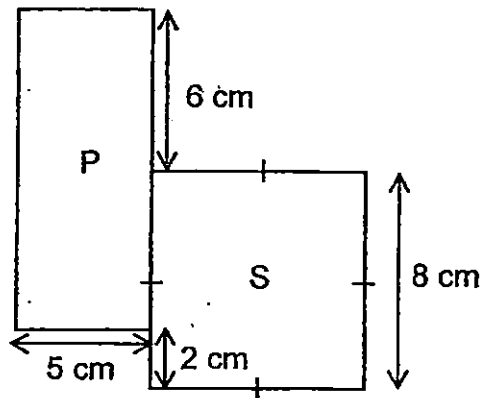
Study the diagram below and answer Question 36.




36. Nancy was at Point S. She walked 3 steps to the east, 3 steps to the north, 1 step to the west and then 1 step due south. At which point would she have landed?

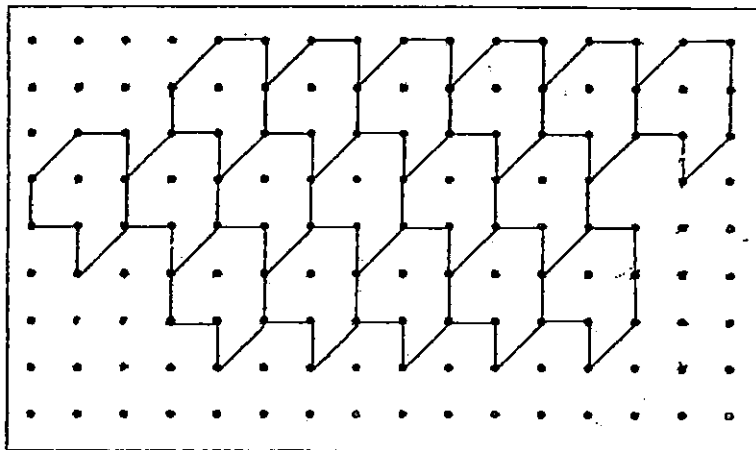
Point \_\_\_\_\_

37. The figure below is made up of a rectangle P and a square S. Find the perimeter of the figure.



cm

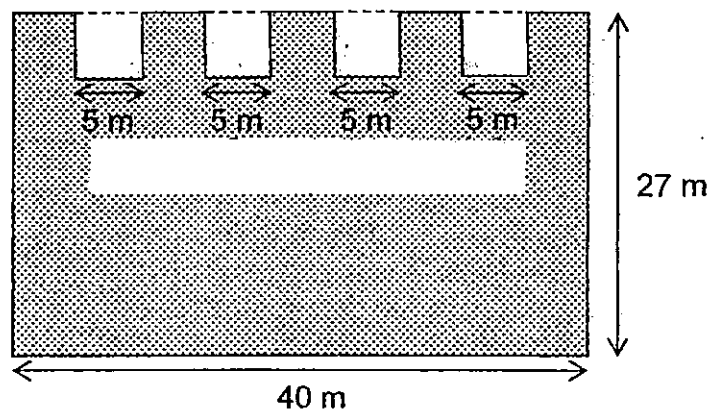
38. In the tessellation below, the unit shape is . Extend the tessellation in the space provided by adding 4 more unit shapes.



39. Pole S is twice as long as Pole T. Pole U is 148 cm shorter than Pole S. Pole U is 930 cm long. What is the length of Pole T?

 cm

40. Mrs Lim has a rectangular garden fully covered with grass. 4 squares of grass were removed as shown in the diagram below. What is the area of the garden covered with grass now?


 m<sup>2</sup>

**Section C (5 × 4 marks)**

Work out the following sums carefully. Show each step of your working clearly as marks will be given for working and relevant statements.

41. Ash bought 8 packets of flour. The mass of each packet of flour was the same. He used some flour to make 9 loaves of bread. He used 1.25 kg of flour for each loaf of bread.
- What was the total mass of flour Ash used to bake 9 loaves of bread?
  - Ash then had 3.15 kg of flour left. What was the mass of each packet of flour he bought?

42. Mrs Wong made  $\frac{4}{5}$  litre of apple juice. She gave Raj  $\frac{1}{5}$  litre of apple juice. She gave some apple juice to Oliver. Oliver had  $\frac{3}{10}$  litre of apple juice more than Raj.
- How much apple juice did Oliver and Raj have altogether?
  - How much apple juice had Mrs Wong left?

--

43. Licia, Krisnam and Imran collected a total of 2371 stamps. Licia collected three times as many stamps as Krisnam. Imran collected 138 more stamps than Licia. How many stamps did Imran collect?

44. Andy had 460 toy cars and some toy motorcycles. He gave away 96 toy motorcycles. In the end, he had 4 times as many toy cars as toy motorcycles. How many toy motorcycles did Andy have at first?

45. In a bookshop, 2 pens and 3 files cost \$11.20. Joseph bought 3 pens and 4 files at \$15.40 from the book shop.
- (a) Find the cost of 1 pen and 1 file.
  - (b) What was the cost of 1 file?

**End of Booklet B**



**EXAM PAPER 2015**

**LEVEL : PRIMARY 4**

**SCHOOL : ANGLO CHINESE SCHOOL (JUNIOR)**

**SUBJECT : MATHEMATICS**

**TERM : SA2**

Q1	Q2	Q3	Q4	Q5	Q6	Q7	Q8	Q9	Q10
3	4	4	4	1	1	3	2	2	2
Q11	Q12	Q13	Q14	Q15	Q16	Q17	Q18	Q19	Q20
3	4	3	2	4	1	1	4	1	1

Q21. 28 046

Q22. 17 360

Q23.  $\frac{4}{9}$  and  $\frac{5}{11}$

Q24.  $\frac{1}{8}$

Q25. 0.68

Q26. 35.52

Q27.  $2\frac{3}{7}$

Q28.  $\angle a$  and  $\angle c$

Q29.  $34^\circ \rightarrow 90 - 38 - 18 = 90 - 56 = 34$

Q30.  $\frac{9}{20} \rightarrow 0.45 = \frac{45}{100} = \frac{9}{20}$

Q31. 0.510

Q32. MRT station

Q33. 800 eggs  $\rightarrow 2600 - 1800 = 800$

Q34. 575 cakes  $\rightarrow 1500 + 900 + 2200 = 4600, 4600 \div 8 = 575$

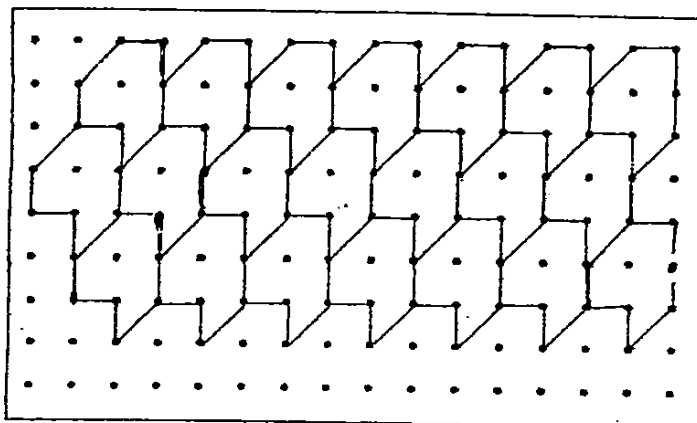
Q35. 5cm

Q36. Point X

Q37. 54cm  $\rightarrow 8+5=13, 8+6=14, 13+14=13+14=54$

Q38. SEE PICTURE

Q39. 539cm  $\rightarrow 930 + 148 = 1078, 1078 \div 2 = 539$





Q40.  $980\text{m}^2 \rightarrow 40 \times 27 = 1080, 5 \times 5 = 25, 25 \times 4 = 100, 1080 - 100 = 980$

Q41a. 11.25kg of flour

1 loaf of bread  $\rightarrow 1.25\text{kg}$ , 9 loaves of bread  $\rightarrow 1.25\text{kg} \times 9 = 11.25\text{kg}$

Q41b.  $1.8\text{kg} \rightarrow 11.25 + 3.15 = 14.4, 14.4 \div 8 = 1.8$

Q42a.  $\frac{7}{10}$  litres of apple juice

$$\frac{4}{5} - \frac{1}{5} = \frac{3}{5}, \quad \frac{1}{5} + \frac{3}{10} = \frac{2}{10} + \frac{3}{10} = \frac{5}{10} = \frac{1}{2}$$

$$\frac{3}{5} + \frac{1}{2} = \frac{2}{10} + \frac{5}{10} = \frac{7}{10}$$

Q42b.  $\frac{1}{10} - \frac{4}{5} - \frac{7}{10} = \frac{8}{10} - \frac{7}{10} = \frac{1}{10}$

Q43. 1095 stamps

$7\text{u} \rightarrow 2371 - 138 = 2233, 1\text{u} \rightarrow 2233 \div 7 = 319, 3\text{u} \rightarrow 319 \times 3 = 957, 1 \rightarrow 957 + 138 = 1095$

Q44.  $211 \rightarrow 460 \div 4 = 115, 115 + 96 = 211$

Q45a.  $44.20 \rightarrow 2\text{p} + 3\text{f} \rightarrow 11.20, 3\text{p} + 4\text{f} \rightarrow 15.40, 1 \text{ pencil} \rightarrow 15.40 - 11.20 = 4.20$

Q45b.  $2.80 \rightarrow 2 \text{ pens and } 2 \text{ files} \rightarrow 4.20 \times 2 = 8.40, 1 \text{ file} \rightarrow 11.20 - 8.40 = 2.80$