



Nan Hua Primary School  
Primary 4 Mathematics  
Term 1 Weighted Assessment 2022

Name: \_\_\_\_\_ ( )

Class: Primary 4M \_\_\_\_\_

Date: \_\_\_\_\_

Marks	
Section A:	/14
Section B:	/6
<b>Total:</b>	<b>/20</b>

\_\_\_\_\_  
Parent's Signature

Answer all questions.

**Section A Part 1 (6 marks)**

Questions 1 to 6 carry 1 mark each. For each question, four options are given.

One of them is the correct answer. Make your choice (1, 2, 3 or 4) and write your answer in the bracket provided.

1. Which of the following is sixteen thousand, four hundred and nine in numerals?

- (1) 16 049
- (2) 16 409
- (3) 16 419
- (4) 16 490

( )

2. Which of the following numbers is the smallest?

- (1) 18 769
- (2) 18 796
- (3) 18 902
- (4) 18 931

( )

Score	2
-------	---

3. In the number pattern below, what is the missing number?

50 880, 50 910, 50 940, 50 970, \_\_\_\_\_, 51 030

- (1) 50 100  
(2) 50 980  
(3) 51 000  
(4) 51 020

( )

4. Which of the following numbers is 38 500 when rounded to the nearest hundred?

- (1) 38 409  
(2) 38 449  
(3) 38 549  
(4) 38 550

( )

5. Which of the following is a factor of both 16 and 24?

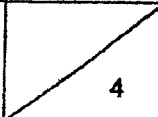
- (1) 6  
(2) 8  
(3) 40  
(4) 48

( )

6. Which of the following is a common multiple of 8 and 12?

- (1) 24  
(2) 20  
(3) 16  
(4) 4

( )

Score	
-------	---

**Section A Part 2 (8 marks)**

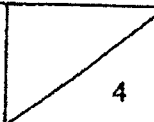
Questions 7 to 10 carry 2 marks each. Write your answers in the spaces provided.  
For questions which require units, give your answers in the units stated.

7. Jane spent \$1749 in February.  
She spent \$253 less in February than in January.  
How much did Jane spend in January?

Ans: \$ \_\_\_\_\_

8. In a school, there were 832 boys and 164 girls. How many more boys than girls were there?

Ans: \_\_\_\_\_

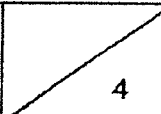
Score	
-------	---

9. There are 428 sweets in a bottle. Mrs Tan bought 14 bottles to give her pupils. How many sweets did she buy altogether?

Ans: \_\_\_\_\_

10. There are 1048 blue markers in a shop. The number of blue markers is 4 times as many as the number of red markers. How many red markers are there?

Ans: \_\_\_\_\_

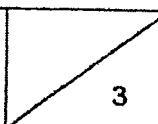
Score	
-------	---

**Section B (6 marks)**

Questions 11 and 12 carry 3 marks each. Show your working clearly and write your answers in the spaces provided. For questions which require units, give your answers in the units stated.

11. Jack jogs 1650 m and Tom jogs 2480 m in a day.  
How many metres do Jack and Tom jog altogether in 7 days? [3 marks]

Ans: \_\_\_\_\_ [3]

Score	
-------	---

12. Mr Tan saved \$4320 in the past 9 months.  
He saved \$100 each month in the first 3 months.  
He saved the same amount of money each month in the last 6 months.  
How much did Mr Tan save each month in the last 6 months? [3 marks]

Ans: \_\_\_\_\_ [3]

**End of Paper**

Score	
-------	---

YEAR : 2022  
 LEVEL : PRIMARY 4  
 SCHOOL : NAN HUA PRIMARY SCHOOL  
 SUBJECT : MATHEMATICS  
 TERM. : TERM 1 WEIGHTED ASSESSMENT

Q1	2	Q2	1	Q3	3	Q4	3	Q5	2
Q6	1								

Q7	$\$1479 + \$253 = \$2002$ Jane spend \$2002 in January.	Q8	$832 - 164 = 668$ There are 668 more boys than girls in school.
Q9	$428 \times 14 = 5992$ Mrs Tan bought 5992 sweets altogether.	Q10	$1048 \div 4 = 262$ There are 262 red markers.
Q11	$1650m + 2480m = 4130m$ $4130m \times 7 = 28910m$ Jack and Tom jog 28 910m in 7 days.	Q12	$\$100 \times 3 = \$300$ $\$4320 - \$300 = \$4020$ $\$4020 \div 6 = \$670$ Mr Tan save \$670 each month in the last 6 months

