

SINGAPORE CHINESE GIRLS' SCHOOL (PRIMARY)
PRIMARY 1 MATHEMATICS
TOPICAL TEST 3
UNIT 3 – ADDITION WITHIN 10

Name: _____ ()

Date: _____

Class: Primary 1 SY / C / G / SE / P / GR



Parent's Signature

For each question, four options are given.
Choose the correct answer and write its number in the brackets
provided.

1. $2 + 2 =$ _____

What is the missing number?

1) 1

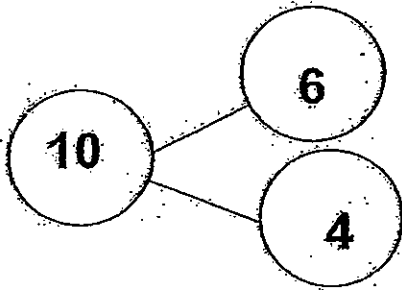
2) 2

3) 3

4) 4

()

2. Study the number bond.



Which of the following is correct?

1) $10 + 4 = 6$

2) $4 + 6 = 10$

3) $6 - 4 = 10$

4) $4 - 6 = 10$

()

3. $4 + 1 + 3 = \underline{\hspace{2cm}}$

What is the missing number?

1) 8

2) 7

3) 5

4) 4

()

4. 3 more than 4 is $\underline{\hspace{2cm}}$

1) 1

2) 5

3) 6

4) 7

()

5. $7 + 3 = 2 + \underline{\hspace{2cm}}$

What is the missing number?

1) 12

2) 10

3) 8



4) 5

()







Read the questions carefully.

Write the correct answers in the space provided.

6. Write an addition sentence for the pictures below.

 + 
 + =

7. Write a number sentence using the following.

   
  =

8. **Cross out** the box which gives the smaller answer.

$$9 + 1$$

$$5 + 4$$

9.




story books



exercise book



Mindy has _____ books altogether.



ANSWER SHEET

EXAM PAPER 2012

SCHOOL : SINGAPORE CHINESE GIRLS' SCHOOL

SUBJECT : PRIMARY 1 - MATHEMATICS

TERM : TOPICAL TEST 3

1. 4

2. 2

3. 1

4. 4

5. 3

6. $3+5=8$

7. $2+4=6$

8.

~~$5 + 4$~~

9. 7

