



RAFFLES GIRLS' PRIMARY SCHOOL

Primary One Mathematics

Review Assessment Practice

**Numbers to 100, Addition and Subtraction within 100, Time,
Multiplication and Division**

Your Score Out of 40
marks

Parent's Signature

Name: _____ () Pr 1 ()

Date: _____

SECTION A (6 × 1 mark)

For each question, four options are given. Choose the correct answer and write its number (1, 2, 3 or 4) in the brackets provided.

1. Which number completes the number pattern below?

15, 20, 25, _____, 35

(1) 26


(2) 30

(3) 34

(4) 40

()

2. Choose the correct **subtraction sentence** based on the picture below.



- (1) $74 - 22 = 52$
(2) $76 - 32 = 44$
(3) $84 - 22 = 62$
(4) $86 - 32 = 54$

()

3. Betty has 8 erasers.

She puts them equally in 2 groups.

How many erasers are there in each group?

- (1) 16
(2) 10
(3) 6
(4) 4

()





4. Which one of the following is equal to 63?

- (1) 5 tens 3 ones
- (2) 5 tens 13 ones
- (3) 6 tens 2 ones
- (4) 6 tens 13 ones

()

5. Look at the picture below.


Which one of the following number sentences is correct?



- (1) 4 fives
- (2) 5 fours
- (3) 4 groups of 4
- (4) 5 groups of 4

()

6. What is the time shown below?



- (1) 5 o'clock
- (2) 6 o'clock
- (3) half past 5
- (4) half past 6

()

SECTION B (11 × 2 marks)

Read the questions carefully. Write the correct answers in the spaces provided.

7. Write **98** in words.

8. a)

$$\begin{array}{r} 12 \\ + 75 \\ \hline \\ \hline \end{array}$$

b)



$$\begin{array}{r} 28 \\ + 44 \\ \hline \\ \hline \end{array}$$

9. Write a related **addition sentence** for the number sentence below.


$$48 - 30 = 18$$

$$\square \bigcirc \square = \square$$

10. Write a multiplication sentence for the picture below.



11 Ring the cupcakes below in groups of 4.



There are _____ groups of 4.

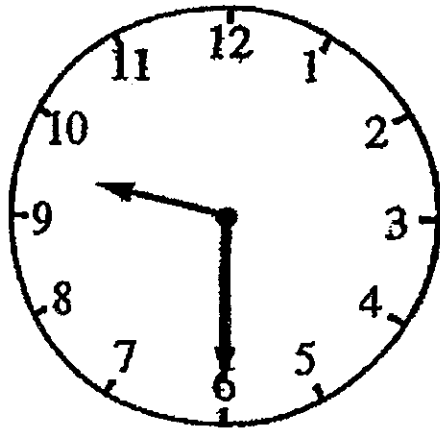
12. a)

$$\begin{array}{r} 96 \\ - 42 \\ \hline \\ \hline \end{array}$$

b)


$$\begin{array}{r} 60 \\ - 17 \\ \hline \\ \hline \end{array}$$

13. Mandy reached the library at the time given below. She left the library **two hours** later. What time did she leave the library?



She left the library at _____.

14. Lily buys the sweets below.
She shares them equally with her 2 friends.



Each friend gets _____ sweets.

15. Ring the set that gives the greatest answer.

3 more than 86

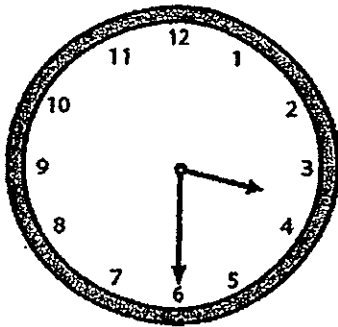
5 less than 92

8 less than 90


10 more than 75

16. The clocks below show what Peter did at different times in one afternoon.


A
Took a nap




B
Had lunch



C
Went jogging



D
Watched television



Arrange what Peter did (A, B, C and D) beginning with the earliest activity and ending with the latest activity.

_____ earliest _____

17. Solve.

$$\text{Smiley Face} + \text{Smiley Face} + \text{Smiley Face} = 15$$

$$\text{Heart} + \text{Heart} + \text{Smiley Face} = 13$$

$$\text{Smiley Face} + \text{Heart} = \underline{\hspace{2cm}}$$

SECTION C (4 x 3 marks)

Read the questions carefully. Write the correct answers in the spaces provided. Show all workings.

18. Mr Lim has 58 pencils.

He has 23 fewer pens than pencils.

(a) How many pens does he have?

He has _____ pens.

(b) How many pens and pencils does he have altogether?

He has _____ pens and pencils altogether.

19. Alicia has many books.

She has 33 English books and 26 Chinese books.

She buys 11 more books.

How many books does she have now?

She has _____ books now.

20. Tammy needs 3 red beads and 2 yellow beads to make a bracelet. How many beads does she need to make 4 similar bracelets?

She needs _____ beads.

21. Mrs Tan bought 19 buns. She sold 7 buns and shared the rest of the buns equally among her 3 children. How many buns did each child have? (You may draw pictures to solve the problem.)

Each child had _____ buns.

Please check your work!

ANSWER SHEET

EXAM PAPER 2013

SCHOOL : RAFFLES GIRLS' PRIMARY SCHOOL

SUBJECT : PRIMARY 1 MATHEMATICS

TERM : REVIEW ASSESSMENT 3 (Review Assessment Practice – Numbers to 100)

Q1	Q2	Q3	Q4	Q5	Q6
2	2	4	2	1	3

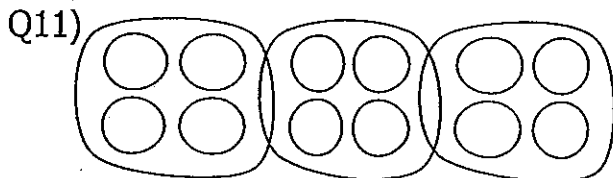
Section B

Q7) Ninety - eight

$$\begin{array}{r} \text{Q8) a) } 12 \\ + 75 \\ \hline 87 \end{array} \quad \begin{array}{r} \text{b) } 28 \\ + 44 \\ \hline 72 \end{array}$$

Q9) $18 + 30 = 48$

Q10) $2 \times 8 = 16$



$$\begin{array}{r} \text{Q12) a) } 96 \\ - 42 \\ \hline 54 \end{array} \quad \begin{array}{r} \text{b) } 60 \\ - 17 \\ \hline 43 \end{array}$$

Q13) half past 11 / 11:30

Q14) 6

Q15) 3 more than 86

Q16) B, D, A, C

Q17) 9

Section B

Q18) a) $58 - 23 = 35$ pens

b) $35 + 58 = 93$ altogether

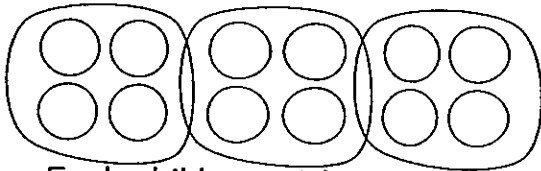
Q19) $33 + 26 = 59$

$59 + 11 = 70$ books

Q20) $3 + 2 = 5$

$5 \times 4 = 5 + 5 + 5 + 5 = 20$ beads

Q21) $19 - 7 = 12$



Each child got 4 buns.