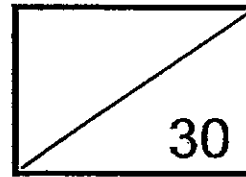


Red Swastika School  
Primary 1  
Mini Test 2  
Mathematics



Name: \_\_\_\_\_ ( )

Date: 9<sup>th</sup> May 2012

Class: \_\_\_\_\_


Duration: 50 minutes

Parents' Sign.: \_\_\_\_\_

**Section A: 10 marks (2 marks each)**

**Choose the correct answer and write its number in the brackets provided.**

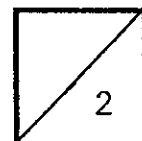
1)




There are \_\_\_\_\_ buses.

- 1) twenty
- 2) thirteen
- 3) twelve
- 4) eleven

( )



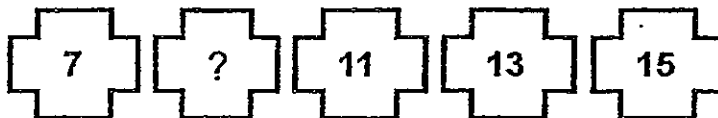
2) How many more sweets are there in Set B than Set A?



- 1) 6
- 2) 12
- 3) 16
- 4) 18

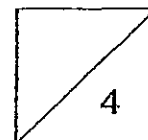
( )

3) Look at the pattern below. What is the missing number?



- 1) 8
- 2) 9
- 3) 10
- 4) 11

( )




4)



Look at the pattern carefully.  
Which object comes next?

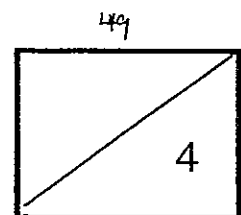


5)



The doll is 3<sup>rd</sup> from the right. Which toy is fifth from the right?

- 1) ball
- 2) teddy bear
- 3) toy car
- 4) toy train



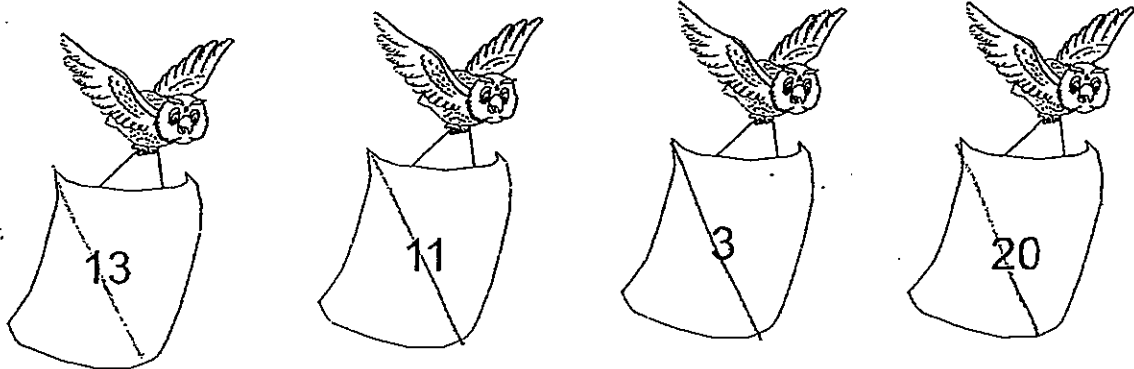
**Section B: 12 marks (2 marks each)**

**Work out the following sums. Show all your workings and write the answers in the spaces provided.**

- 6) Shirley and Judy have 11 cookies altogether.  
Judy has 9 cookies.  
How many cookies does Shirley have?

Ans: \_\_\_\_\_

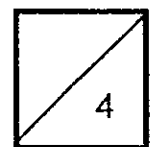
- 7) Arrange the numbers in order from the **smallest to the greatest**.



\_\_\_\_\_


smallest

greatest



8) Joe is standing in a queue to buy popcorn. He is 3<sup>rd</sup> from the left and 4<sup>th</sup> from the right.

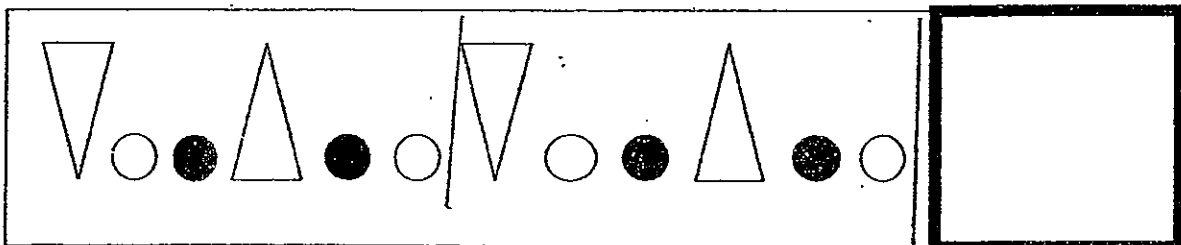
Circle Joe.



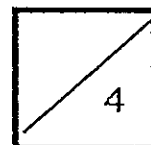
A horizontal line of six stick figures. Below the first figure is a box containing the word "Left". Below the last figure is a box containing the word "Right".

9) Study the pattern below carefully.


Draw the shape that comes next in the box provided.



A sequence of shapes: inverted triangle, white circle, black circle, upright triangle, black circle, white circle, inverted triangle, white circle, black circle, upright triangle, black circle, white circle. A large empty box is provided for the next shape.

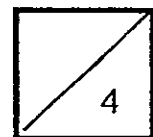
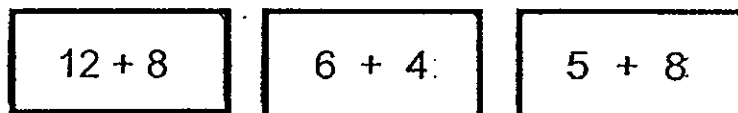


10) Study the pattern below carefully.



Circle the missing shape: (  ,  ,  ,  )

11) Colour the box that has the answer which is smaller than 11.



**Section C : 8 marks (4 marks each)**

**Do the following sums. Show your workings and statements clearly.**

- 12) There are 20 eggs in a basket. Mrs Tan broke 2 eggs.  
How many eggs are left?

\_\_\_\_\_ eggs are left.

- 13) Hamid has 7 toy cars. Kumar has 2 more toy cars than Hamid.

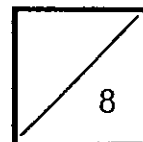
(a) How many toy cars does Kumar have?

(a) Kumar has \_\_\_\_\_ toy cars.

(b) How many toy cars do Hamid and Kumar have altogether?

(b) Hamid and Kumar have \_\_\_\_\_ toy cars altogether.

--- End of paper ---







# ANSWER SHEET

## EXAM PAPER 2012

SCHOOL : RED SWASTIKA SCHOOL

SUBJECT : PRIMARY 1 - MATHEMATICS


TERM : MINI TEST 2

Q1	Q2	Q3	Q4	Q5
3	1	2	1	2

Q6. 2

Q7. 3, 11, 13, 20

Q8.



Q9.



Q10.



Q11.  $6+4$

Q12. 18

Q13. a) 9

b) 16

