


**TAO NAN SCHOOL**

**HOLISTIC ASSESSMENT MATHEMATICS REVIEW (2) 2012**

Name: \_\_\_\_\_ ( )

Class : Pr 1 ( )

Date: \_\_\_\_\_



Parent's signature : \_\_\_\_\_

---

**Section A** (8 x 1 mark)

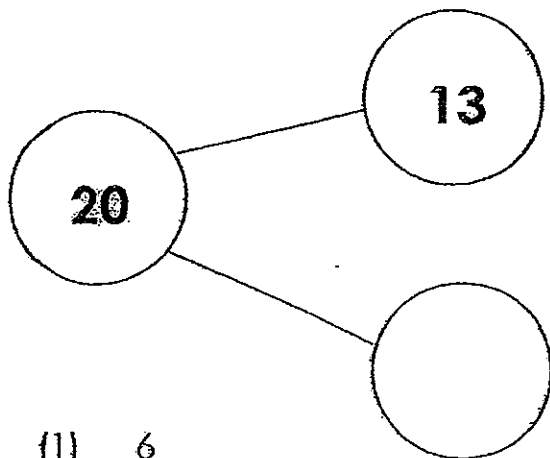
Questions 1 to 8 carry 1 mark each.

For each question, four options are given.

One of them is the correct answer.

Make your choice (1, 2, 3 or 4) and write it in the brackets provided.

1. What is the missing number ?



(1) 6

(2) 7

(3) 8

(4) 9

( )

2. What is 3 more than 16 ?

(1) 13

(2) 14

(3) 18

(4) 19

( )

3.  $14 - \underline{\hspace{2cm}} = 6$

(1) 8


(2) 9

(3) 12

(4) 20

( )

4.



What does



stand for?

(1) 8

(2) 14

(3) 15

(4) 18

( )

5.  $19 - 9 = 5 + \square$

(1) 5

(2) 6

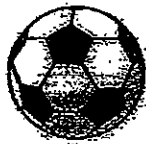
(3) 7

(4) 8


( )

6. Which object has the shape of a triangle?

(1)




(2)



(3)

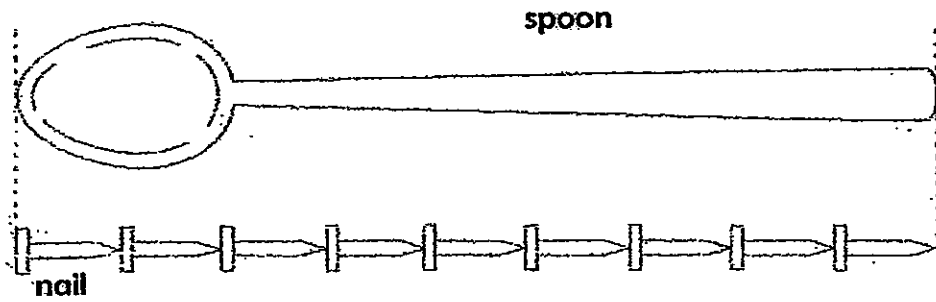


(4)



( )

7. The length of the spoon is \_\_\_\_\_ nails long.



(1) 6

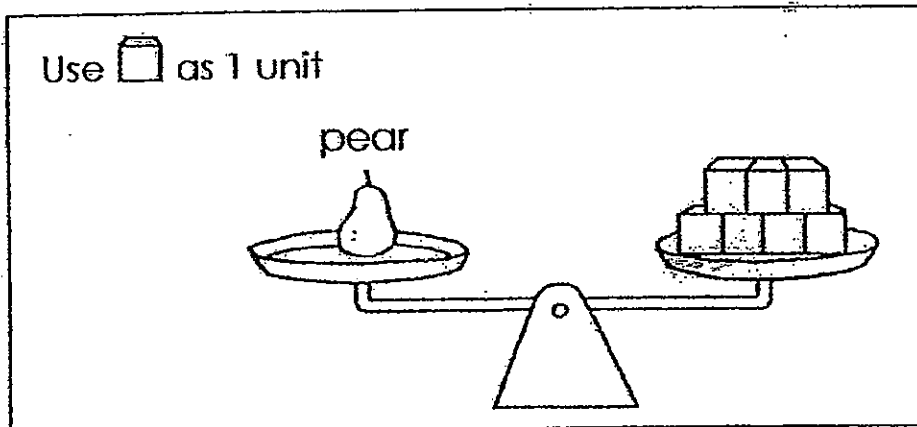
(2) 7

(3) 8

(4) 9

( )

8. The pear has a mass of \_\_\_\_\_ units.



(1) 5

(2) 6

(3) 7


(4) 8

( )

**Section B** (5 X 1 mark)

Questions 9 to 13 carry 1 mark each.




9. Count the butterflies and write your answer in words.




There are

butterflies altogether.

10. Circle the longest pencil.



11. Arrange these numbers in order from the greatest to the smallest.

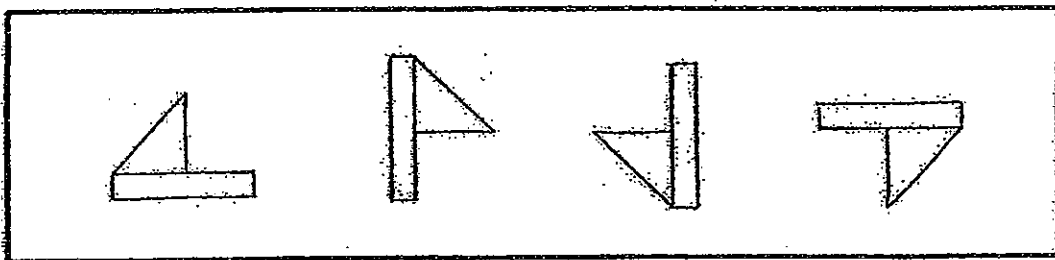


\_\_\_\_\_

**greatest**

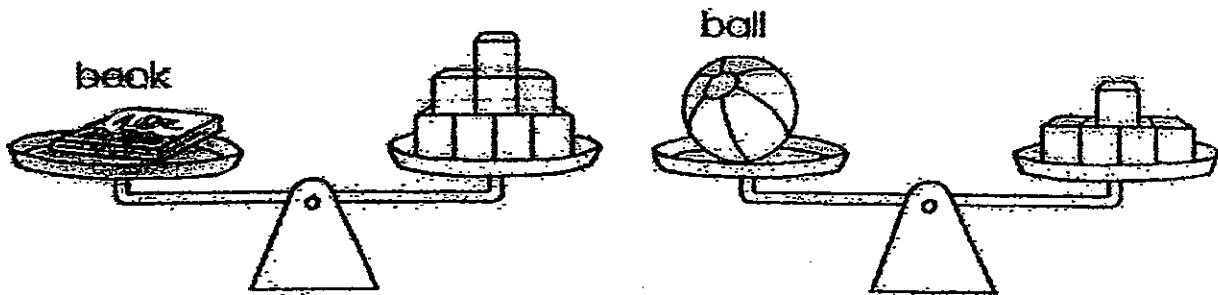
12. Look at the pattern below .

**Circle** the missing shape in the box.



13. Look at the diagram below and answer the question .

Use  as 1 unit




The book is \_\_\_\_\_ units heavier than the ball.

**Section C** (1 X 2 marks)

Question 14 carries 2 marks.

14. Sally has 13 cupcakes. Her sister has 5 fewer cupcakes than Sally.  
How many cupcakes does her sister have?



$$\square \ominus \square = \square$$

Her sister has \_\_\_\_\_ cupcakes.





# ANSWER SHEET

## EXAM PAPER 2012

SCHOOL : TAO NAN SCHOOL

SUBJECT : PRIMARY 1 - MATHEMATICS

TERM : SA 1

### SECTION A

Q1	Q2	Q3	Q4	Q5	Q6	Q7	Q8
2	4	1	2	1	3	4	3

### SECTION B

9. eighteen

10. (circle the middle pencil)

11. 20, 17, 15, 13, 11

12.



13. 3

### SECTION C

14.  $13 - 5 = 8$

Her sister has 8 cupcakes.

