



# RAFFLES GIRLS' PRIMARY SCHOOL

## Primary One: Mathematics

### Practice 1

### Addition and Subtraction within 10


Name: \_\_\_\_\_ Pr 1 ( )

Date: \_\_\_\_\_

Your Score Out of 20 marks	
Class Highest Score	
Class Average Score	
Parent's Signature	

#### SECTION A (5 × 1 mark)

For each question, four options are given. Choose the correct answer and write its number (1, 2, 3 or 4) in the brackets provided.



suns

moons

There are \_\_\_\_\_ suns and moons altogether.

- (1) 7
- (2) 8
- (3) 3
- (4) 4

( )

2.



How many apples are left?

- (1) 7
- (2) 5
- (3) 3
- (4) 4

( )

3.  $3 + 1 + 5 = \underline{\hspace{2cm}}$

(1) 9

(2) 6

(3) 5

(4) 4

( )

4. Sam has 5 sweets.  
Bob has 2 sweets fewer than Sam.  
How many sweets does Bob have?

(1) 5

(2) 2

(3) 3

(4) 7

( )

5.  $3 + 5 = \underline{\hspace{2cm}} - 1$   
What is the missing number?

(1) 5

(2) 7

(3) 8


(4) 9

( )

**SECTION B (4 × 2 marks)**

Read the questions carefully. Write the correct answers in the spaces provided.

6. Complete the addition sentence.



$$\square + \square = \square$$

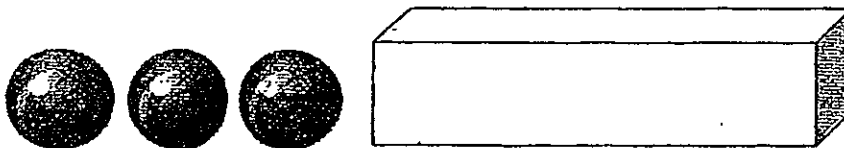
7. Write the missing answer in the box below.

2 less than 4 is

8. If there are 10 oranges altogether, how many oranges are there in the box?

Write a subtraction sentence below.

$$\square - \square = \square$$



9. Circle the box which gives the smallest answer.

$$4 + 4$$


$$10 - 3$$

$$8 - 2$$

**SECTION C (7 marks)**

Read the questions carefully. Write the correct answers in the spaces provided.

10. There are 3 eggs in the nest.  
There are 4 eggs in the basket.  
How many eggs are there altogether?



There are \_\_\_\_\_ eggs altogether.

(2 marks)

11. Lisa has 8 ribbons.

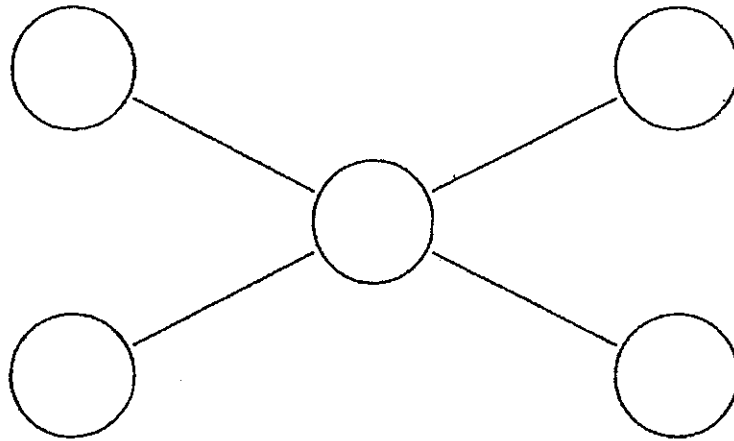
3 of the ribbons are red and the rest are blue.  
How many blue ribbons does Lisa have?



Lisa has \_\_\_\_\_ blue ribbons.

(2 marks)

12. Write the numbers 1, 2, 3, 4 and 5 in the circle.  
The numbers in each line will add up to 9.  
Use each number only once.



(3 marks)



# ANSWER SHEET

**EXAM PAPER 2013**

**SCHOOL : RAFFLES GIRLS' PRIMARY SCHOOL**

**SUBJECT : PRIMARY 1 MATHEMATICS**

**TERM : TEST 1 (Addition and subtraction under 10)**

Q1	Q2	Q3	Q4	Q5
1	2	1	3	4

Section B

Q6)  $4 + 2 = 6$

Q7) 2

Q8)  $10 - 3 = 7$

Q9)  $8 - 2$

Section C

Q10)  $3 + 4 = 7$  eggs altogether

Q11)  $8 - 3 = 5$  blue ribbons

Q12)

