



RAFFLES GIRLS' PRIMARY SCHOOL
Primary One: Mathematics
Review Practice Term (1)
Numbers 0 to 10 and Number Bonds

Name: _____ () Class: Pr 1 ()
Date: _____


Your Score Out of 15 marks	
Class Highest Score	
Class Average Score	
Parent's Signature	

SECTION A (5 × 1 mark)


For each question, four options are given. Choose the correct answer and write its number (1, 2, 3 or 4) in the brackets provided.

1. Which of the following shows a set of six stars?


(1)




(2)



(3)



(4)



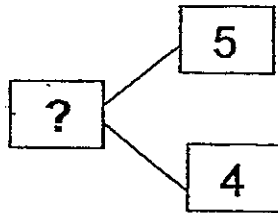
()

2. Which is the **greatest** number?

- (1) 5
- (2) 2
- (3) 3
- (4) 7

()

3.

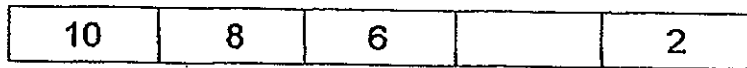


The missing number in the box above is _____.

- (1) 4
- (2) 5
- (3) 9
- (4) 10

()


4. Complete the number pattern.



- (1) 5
- (2) 6
- (3) 8
- (4) 4

()

5. How many more cats than fishes are there?



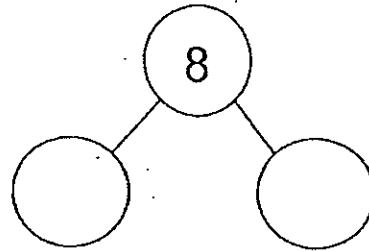
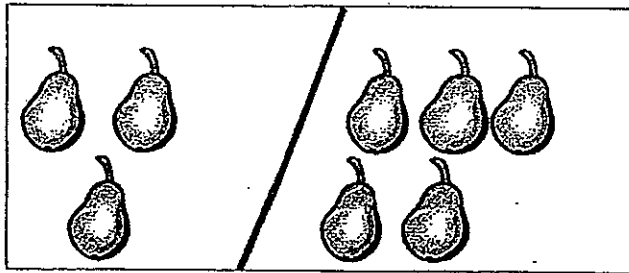
- (1) 1
- (2) 2
- (3) 3
- (4) 4


()

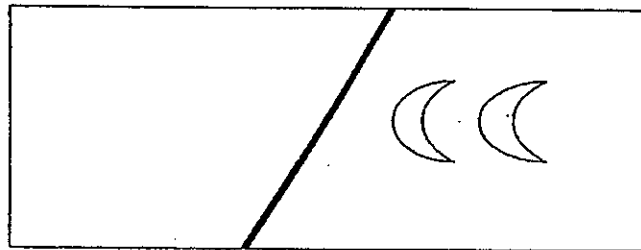
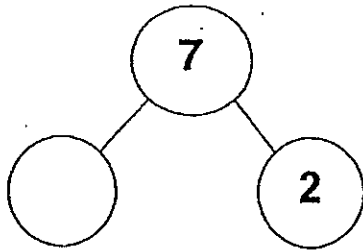
SECTION B (5 x 2 marks)

Fill in the blanks with the correct answers.


6. Look at the picture below and complete the number bond.



7. Complete the number bond and draw the correct number of  in the space.



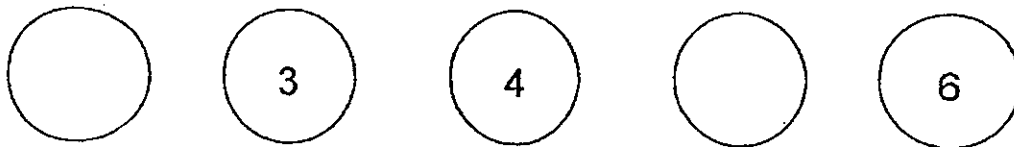
8. Count the number of apples and write in words.



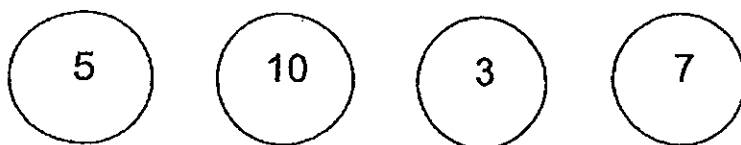
There are

apples.

9. Complete the number pattern.



10. Use the numbers below to answer Questions (a) and (b)



(a) is **greater** than 6 but **smaller** than 8.

(b) is **between** 4 and 6.

~End of Paper~



**RAFFLES GIRLS' PRIMARY SCHOOL
MATH PERFORMANCE TASK
ACTIVITY SHEET**

1

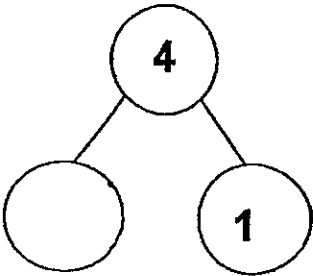
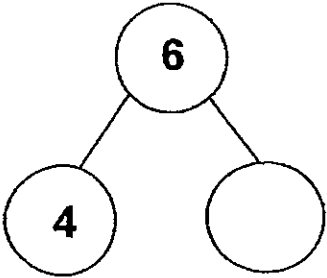
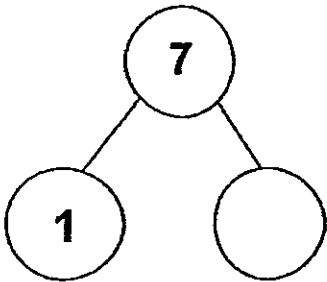
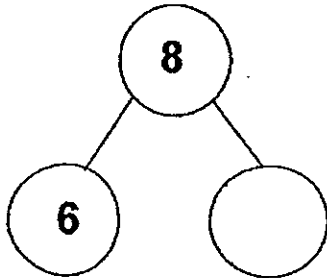
Name: _____ ()

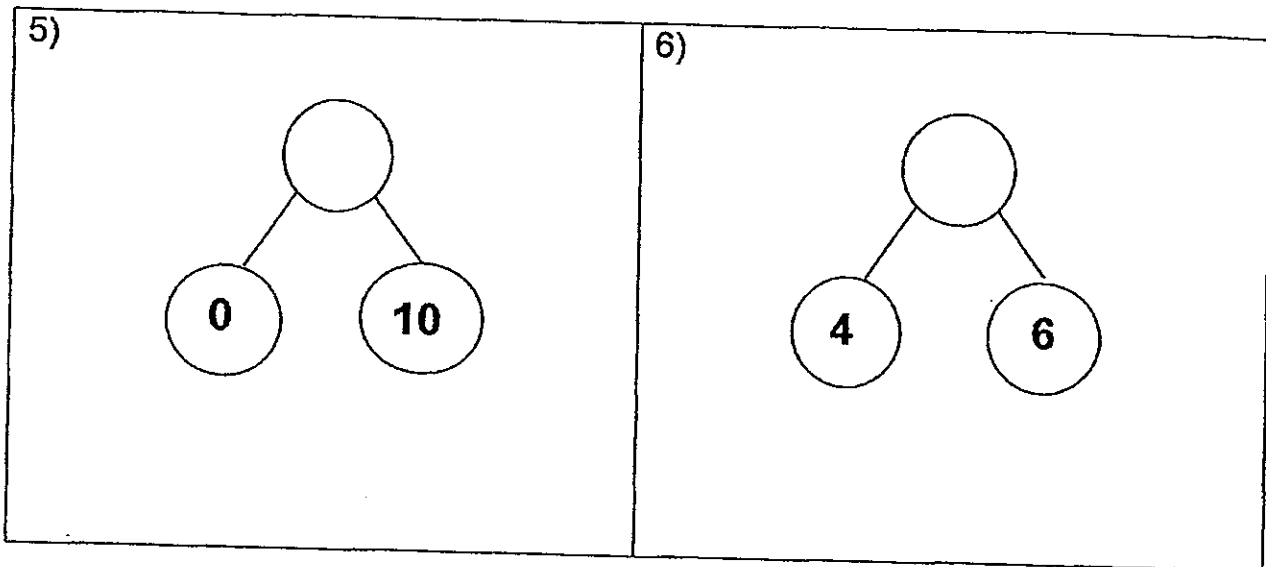
Date: _____

Class: P 1 ()

Topic/s: Number Bonds

Section A : Use the counting cubes provided to complete the number bonds.

1) 	2) 
3) 	4) 



Section B : Look at the picture.

We have 9
stickers
altogether.



Mary

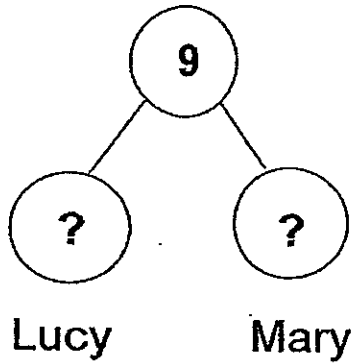
I have
more
stickers
than you.



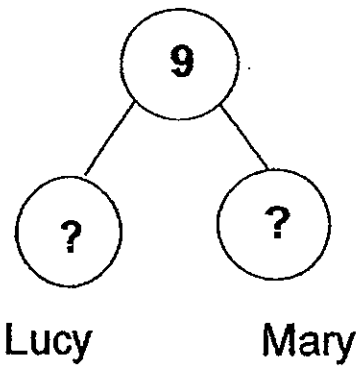
Lucy

Use the number cubes to help you.

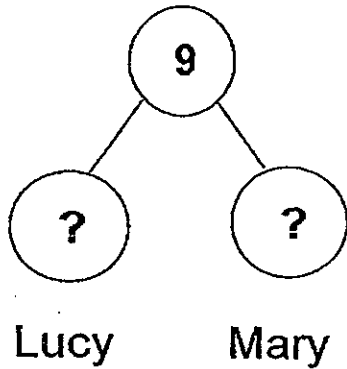
How many stickers does Lucy have?



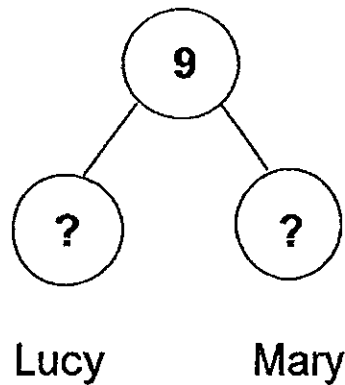
Lucy has _____ stickers.



Lucy has _____ stickers.



Lucy has _____ stickers.



Lucy has _____ stickers.



ANSWER SHEET

EXAM PAPER 2013

SCHOOL : RAFFLES GIRLS' PRIMARY SCHOOL

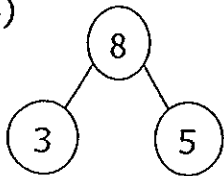
SUBJECT : PRIMARY 1 MATHEMATICS

TERM : REVIEW ASSESSMENT 1 [Review Practice Term (1)]

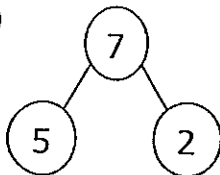
Q1	Q2	Q3	Q4	Q5
1	4	3	4	2

Section B

Q6)



Q7)



Q8) eight

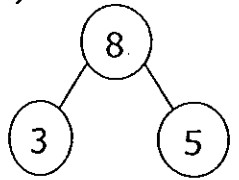
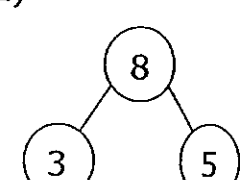
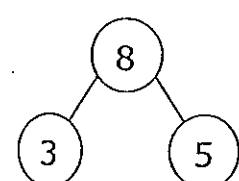
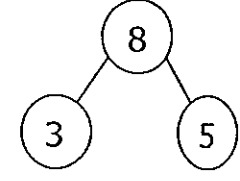
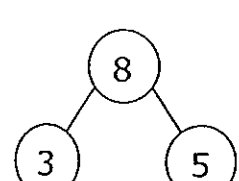
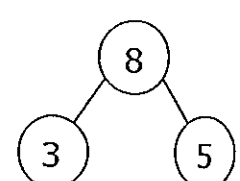
Q9) 2, 3, 4, 5, 6

Q10) a) 7

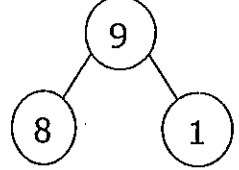
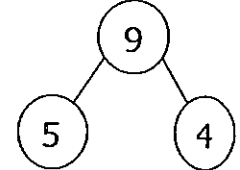
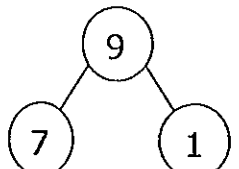
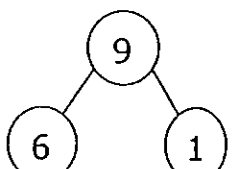
b) 5

Performance task Activity sheet

Section A

Q1) 	Q2) 
Q3) 	Q4) 
Q5) 	Q6) 

Section B

 <p>Lucy has 8 stickers</p>	 <p>Lucy has 5 stickers</p>
 <p>Lucy has 7 stickers</p>	 <p>Lucy has 6 stickers</p>