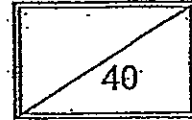


CHIJ ST NICHOLAS GIRLS' SCHOOL  
PRIMARY (2) MATHEMATICS 2012

TOPICAL REVIEW (4)



Name: \_\_\_\_\_ ( )

Date: \_\_\_\_\_

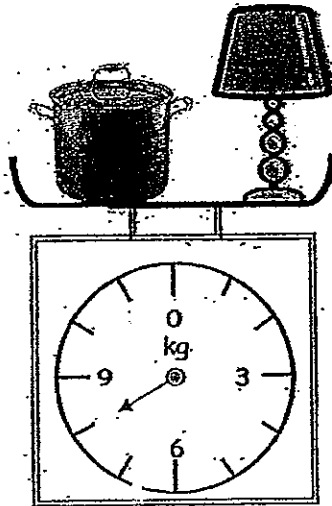
Class: Primary 2 ( )

Parent's Signature: \_\_\_\_\_

**Section A (7 X 2 marks = 14 marks)**

Read each question carefully. For each question, choose the correct answer and write its number (1, 2, 3 or 4) in the brackets provided.

1



The mass of the pot is 3 kg.

What is the mass of the lamp?

(1) 8 kg

(2) 5 kg

(3) 3 kg

(4) 4 kg

( )

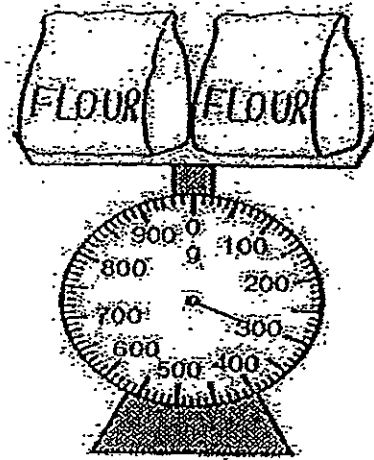
Mass

Working

147

2.

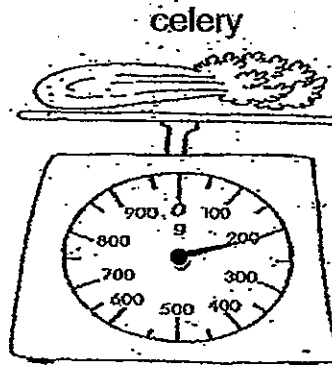
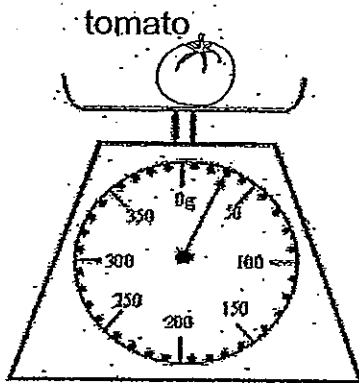
Working



What is the total mass of 4 similar bags of flour?

- (1) 150g
  - (2) 300g
  - (3) 600g
  - (4) 1200g
- ( )

3.



The mass of the tomato is \_\_\_\_\_ g less than the mass of the celery.

- (1) 30
  - (2) 170
  - (3) 200
  - (4) 230
- ( )

Mass

4. 489¢ is the same as \_\_\_\_\_.

(1) \$4.89

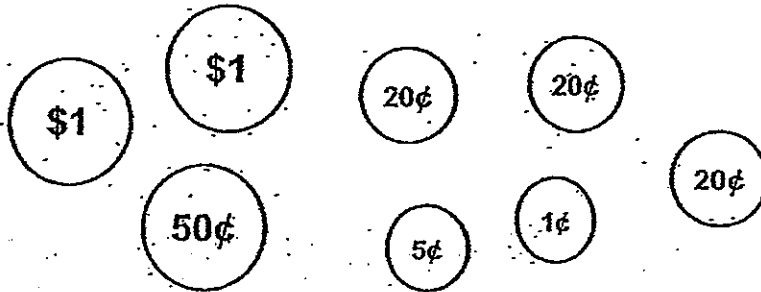
(2) \$4.89¢

(3) \$48.90

(4) \$489

( )

5. What is the total amount of money shown below?



(1) \$2.66

(2) \$3.16

(3) \$25.66

(4) \$31.60

( )

6. Which one of the following is the greatest amount?

(1) \$88.09

(2) \$89.80

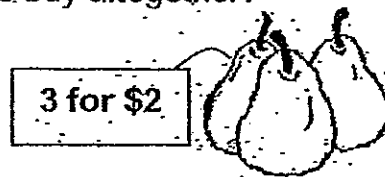
(3) \$98.08

(4) \$98.80

( )

7. Jenny spent \$10 on some pears.

How many pears did she buy altogether?



(1) 5

(2) 9

(3) 10

(4) 15

( )

Money

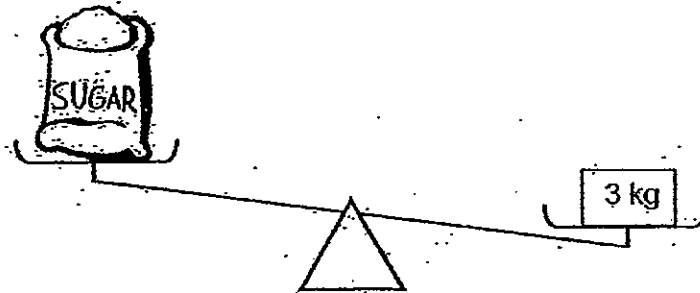
Working

**Section B. (7 X 2 marks = 14 marks)**

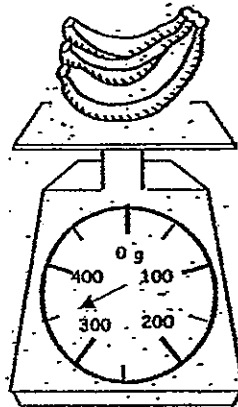
Write your answers in the blanks provided. Show all mathematical working clearly in the space provided.

8. Fill in the blanks with more or less.

Working



(a) The mass of the packet of sugar is \_\_\_\_\_ than 3 kg.



(b) The mass of the bunch of bananas is \_\_\_\_\_ than 400 g.

Mass



11. Paul has a mass of 38 kg. He is 19 kg lighter than his mother.  
What is the mass of his mother?

Working

Ans: \_\_\_\_\_ kg

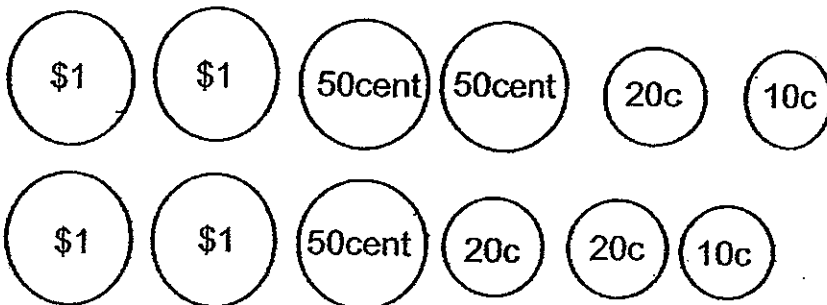
- 12a. Write the amount of money in words.

\$95.40 = \_\_\_\_\_

- b. Write the amount of money in numbers.

Thirty-six dollars and two cents = \_\_\_\_\_

13. Colour 7 coins to make \$4.30



Mass

Money

14. Lily has \$36. She needs \$17 more in order to buy a school bag. Working  
What is the cost of the school bag?

Ans: \$ \_\_\_\_\_

**Section C (3 x 4 marks = 12 marks)**

Write your answers in the blanks provided. Show all mathematical statements and working clearly in the space provided.

15. Mrs. Lee had 350 g of butter. She used 185 g of it to bake a cake and used the rest to bake some cookies. How much more butter did she use to bake the cake than the cookies? Working

Mrs Lee used \_\_\_\_\_ g more butter to bake the cake than the cookies.

Mass

Money

16. Nathan had 8 five-dollar notes. He bought a book for \$9 and a water bottle for \$15. How much money had he left?

Working

Nathan had \$ \_\_\_\_\_ left.

17. Mr Tang bought 3 similar T-shirts. He paid \$21 altogether. What is the cost of 5 such T-shirts?

Working

The cost of 5 such T-shirts is \$ \_\_\_\_\_

END OF PAPER



# ANSWER SHEET

## EXAM PAPER 2012

SCHOOL : CHIJ ST NICHOLAS GIRLS' SCHOOL (PRI)

SUBJECT : PRIMARY 2 - MATHEMATICS

TERM : TOPICAL 4

Q1	Q2	Q3	Q4	Q5	Q6	Q7
2	3	2	1	2	4	4

8. a) Less  
b) Less

9. A, C, B

10.  $47-14=33\text{g}$   
Ans: 33 g

11.  $38+19=57\text{kg}$   
Ans: 57 kg

12a. ninety-five dollars and forty cents  
b. \$36.02

13. \$1, \$1, \$1, 50¢, 50¢, 20¢, 10¢

14.  $36+17=\$53$   
Ans: \$53

15. Cookies -  $350-185=165$   
Difference -  $185-165=20\text{g}$

Mrs Lee used 20g more butter to bake the cake than the cookies.

16.  $40 - 9 = 31$

$31 - 15 = 16$

Nathan had \$16 left.

17. 1 T-shirt -  $21 \div 3 = 7$

Cost of 5 T-shirts -  $5 \times \$7 = \$35$

The cost of 5 such T-shirts is \$35.