

Rosyth School
P1 Mathematics
Topical Test 1 (2008)



Name: _____ ()

Date: 29/12/10

Class: P1- _____

Duration : 40 minutes

Parent's Signature: _____

Answer all the questions. (2 marks each)

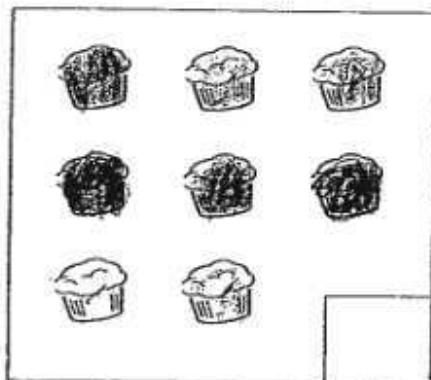
1. Count and write the correct number in the box.

a) 


b) 

2. Tick the set that has less.

Set A



Set B



3. Fill in the missing number.


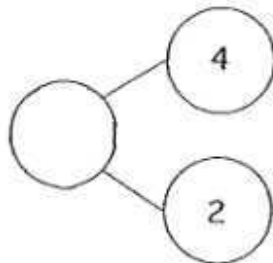
7 , , 5 , 4 ,

4. I am 4 more than 5.
I am also 1 less than 10.
What number am I?


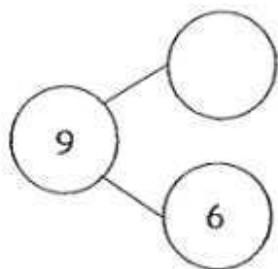
I am

5. Complete the number bond.

a)

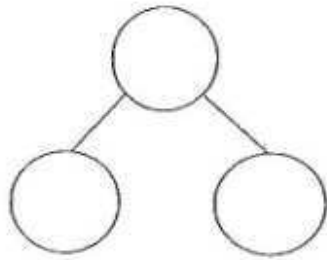



b)

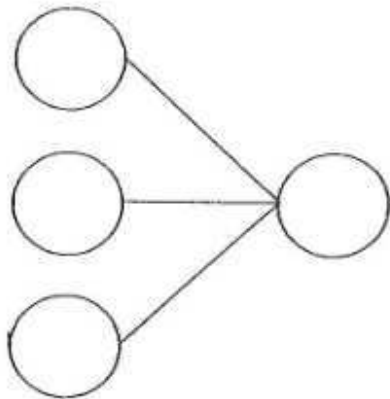



6. and 6 make 8.

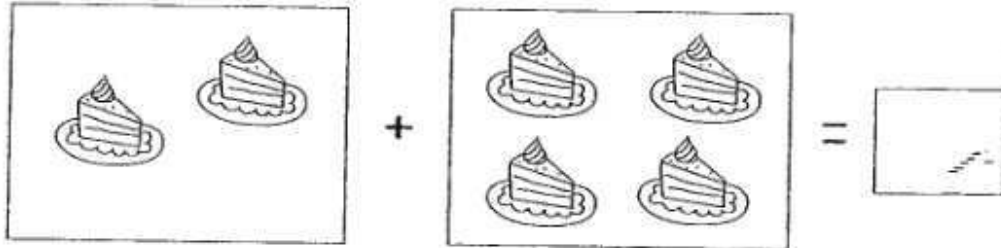
7. Use all the numbers in the box to complete the number bond.



8. Look at the pictures below.
Fill in the blanks to complete the number bond.



9. Write the correct number in the box.

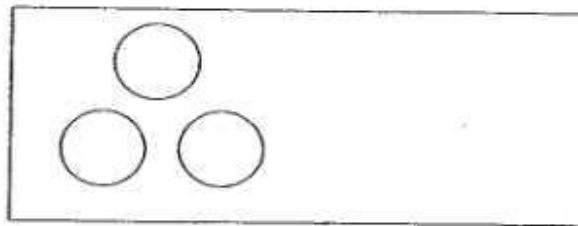


10. Do these sums.

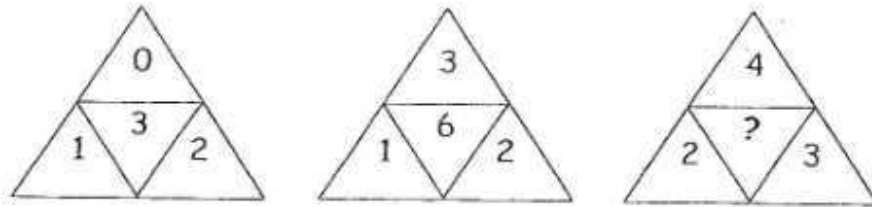
(a) $0 + 4 =$

(b) $3 + 5 =$

11. Draw more circles in the box so that there are 5 circles altogether.



12. Study the pattern below.
 What does the "?" stand for?
 Fill in the box with the correct answer.



The answer is


13. 

There are 8 cups.

Cross out 4 of them.

There are cups left.

14. Colour two flowers with the correct answer.



15. Tom has 6 stickers.
John has 4 stickers more than Tom.
How many stickers does John have?

John has stickers.

-----THE END-----

Have you checked your work?



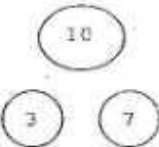
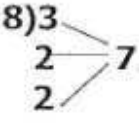

ANSWER SHEET

EXAM PAPER 2008

SCHOOL : ROSYTH PRIMARY SCHOOL
SUBJECT : PRIMARY 1 MATHEMATICS

TERM : CA 1

1)a)7 b)8 2)Set A 3)6,3 4)9 5)a)6 b)3 6)2

7)  8)3  9)6 10)a)4 b)8 11) 

12)9 13)4 14)5x1, 8-3 15)6+4=10
John has 10 stickers.