

Methodist Girls' School (Primary)  
2008 Mid Year Examination  
Primary 1  
Mathematics

Name: \_\_\_\_\_ ( )

Class: 1. \_\_\_\_\_


Date: 9 May 2008

Marks Obtained: \_\_\_\_\_/100

This booklet consists of 16 printed pages.




Section A ( 6 x 1 m)

Look at the picture. Count and fill in each blank with the correct number.



1. There are \_\_\_\_\_ fishes.
2. I can see \_\_\_\_\_ crabs.
3. There are \_\_\_\_\_ octopuses altogether.

Look at the picture. Count and fill in each blank with the correct number in words.





4. There are \_\_\_\_\_ children altogether.

5. \_\_\_\_\_ children wear spectacles.

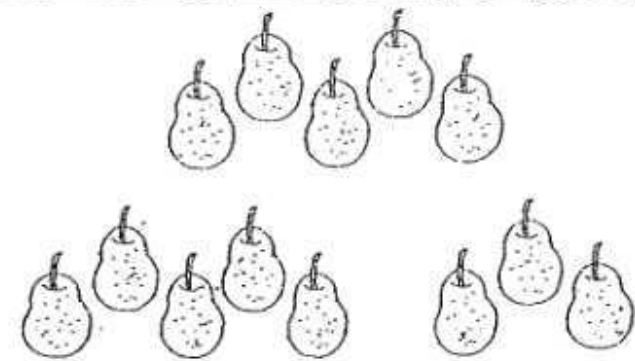
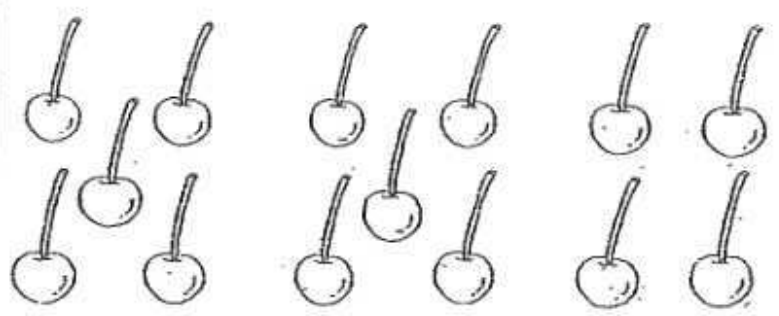
6. \_\_\_\_\_ children wear hats.

Section B ( 38 x 2 m )


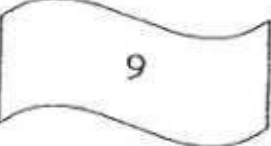
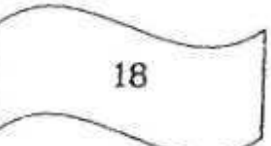
7. Tick ( ✓ ) the box which has fewer animals.

A		<input type="checkbox"/>
B		<input type="checkbox"/>

8. Tick ( ✓ ) the box which has more fruits.


A		<input type="checkbox"/>
B		<input type="checkbox"/>

Circle the two numbers that add up to the number on the left.


9.		1      2      3      4
10.		2      3      4      6
11.		7      8      9      10

Fill in the missing numbers for Questions 12 and 13.

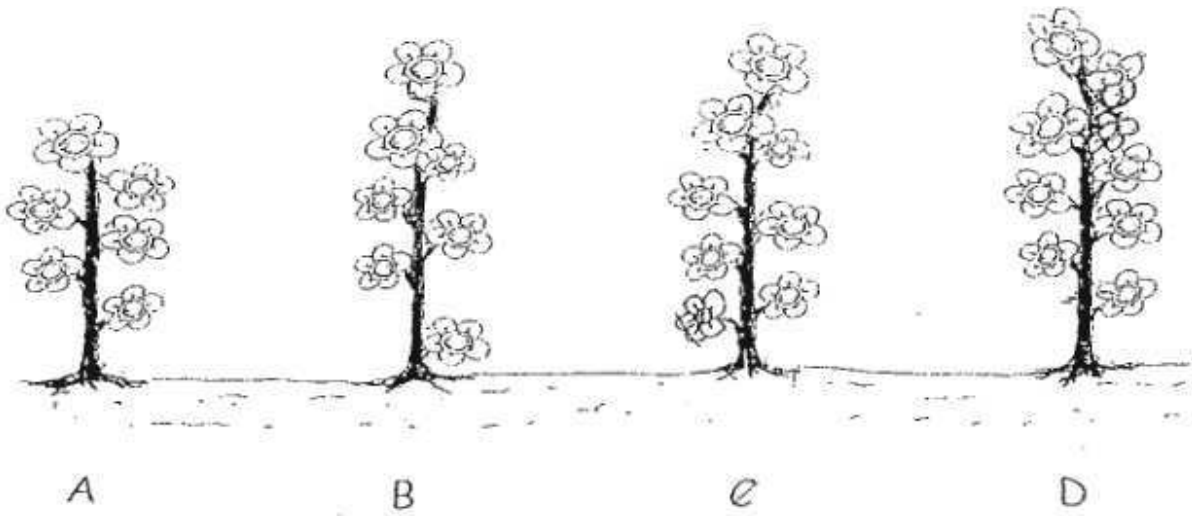
12.



13.



14. Circle the plants that have more than 7 flowers.




15.

If  = 5

and  = 6,

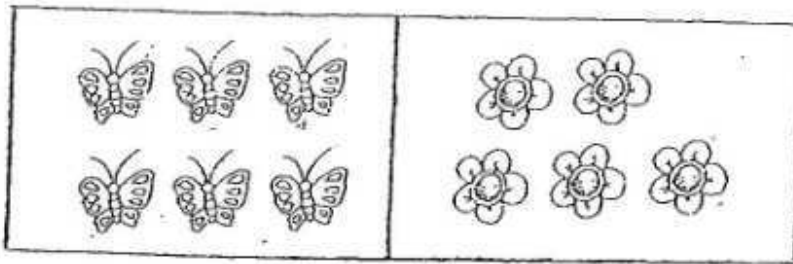
then  +  +  = \_\_\_\_\_

16. Write an addition sentence for the bees and butterflies.



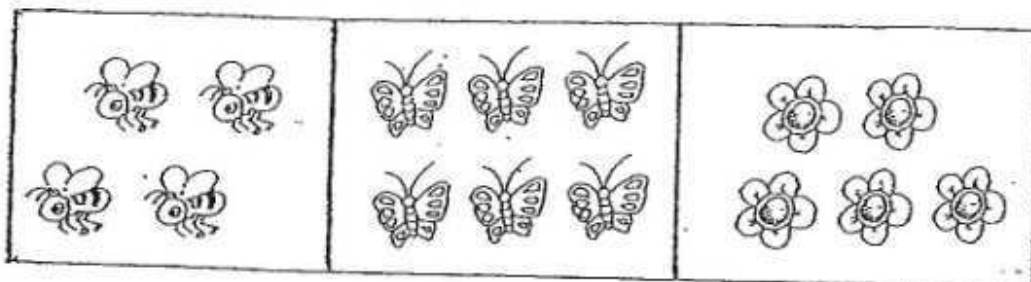
$$\square \bigcirc \square = \square$$

17. Write a subtraction sentence for the butterflies and flowers.



$$\square \bigcirc \square = \square$$

18. Write an addition sentence for the bees, butterflies and flowers.



$$\square \bigcirc \square \bigcirc \square = \square$$

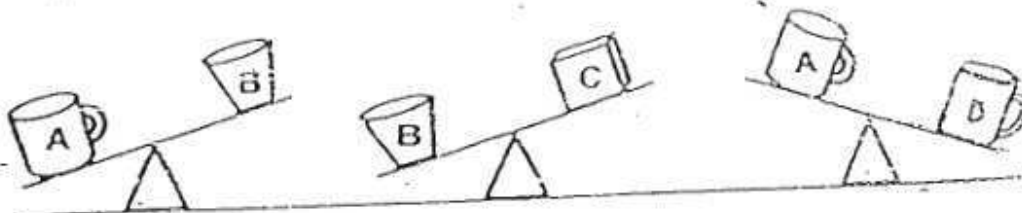
19)  $4 + 4 + 4 + 4 + 4 = \square \times \square$   
 $= \square$  fours

20) Fill in the boxes with the correct numbers.



$\square \times \square = \square$


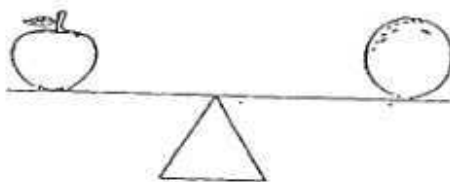
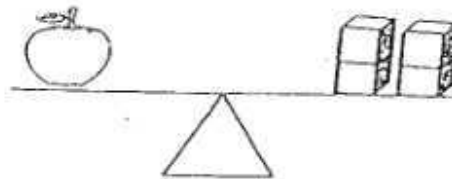
21)



(a) Object  $\square$  is the lightest.

(b) Object  $\square$  is the heaviest.

22)



The total mass of an apple, an orange and a pineapple is

$\square$



Match.

23.  $4 + 7$

5 more than 10

24.  $16 - 6$

6 less than 13

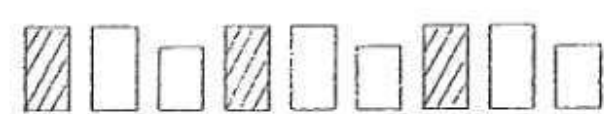

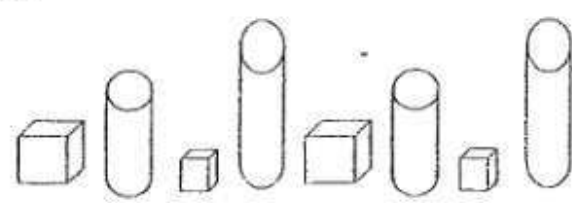

25.  $20 - 5$

5 more than 6


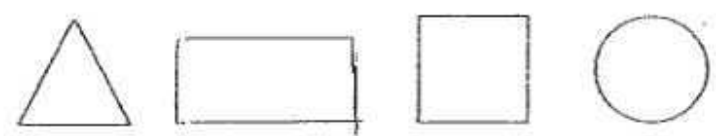

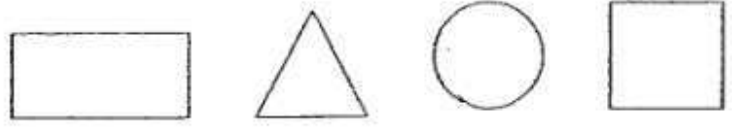
26.  $3 + 4$

10 less than 20

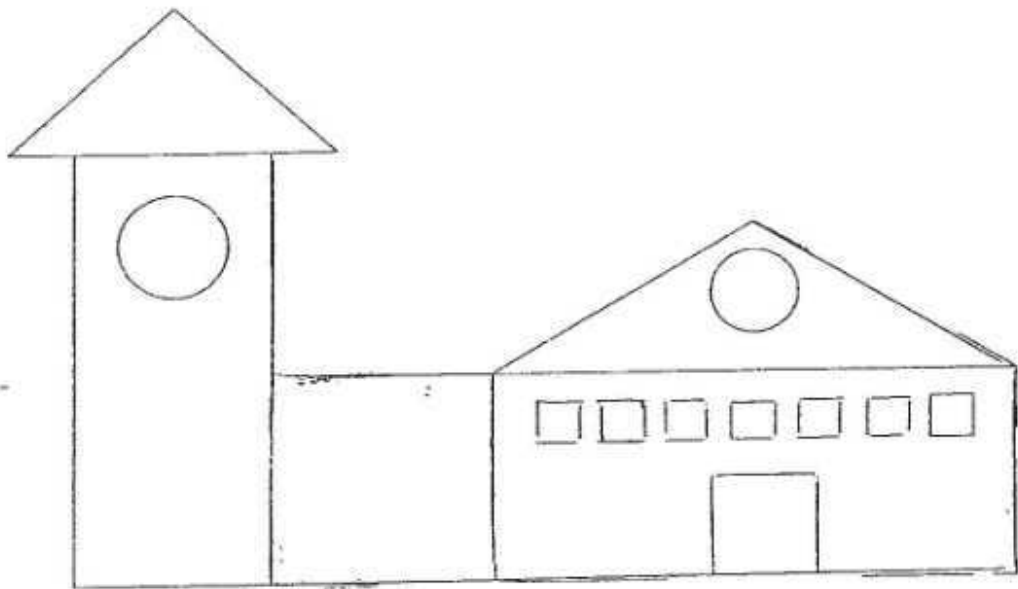
Circle the correct shape that comes next for Questions 27 and 28.

27. 	
28. 	

Colour the shape that matches each object for Questions 29 and 30.

29. 	
30. 	

Look at the picture for Questions 31 and 32.



31. Colour all the circles blue.
32. Colour all the squares red.

For Questions 33 and 34, circle the sets that match the number on the left.

33.	6	$2 + 3$	$5 + 1$	$6 - 0$	$6 - 1$
34.	19	$11 + 9$	$15 + 4$	$19 - 1$	$20 - 1$

For Questions 35 to 39, look at the pictures below and answer the questions.

giraffe

dog

cat

elephant

rabbit

rat

hen



Left

Right

35. The \_\_\_\_\_ is the 4<sup>th</sup> animal from the left.

36. The hen is the \_\_\_\_\_ animal from the left.

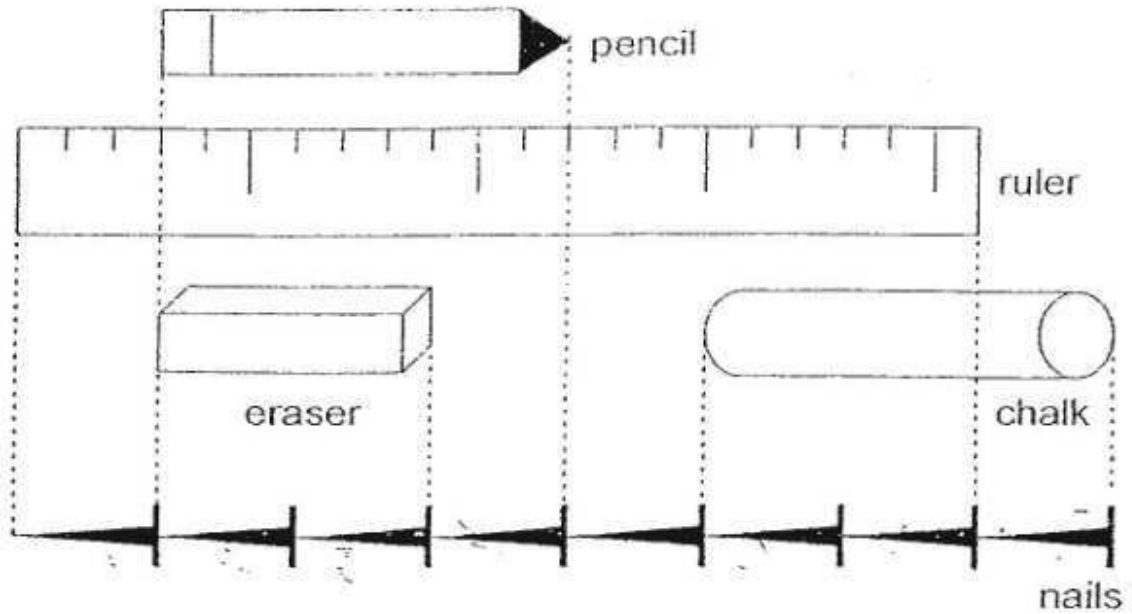
37. The \_\_\_\_\_ is the 6<sup>th</sup> animal from the right.

38. The cat is the \_\_\_\_\_ animal from the left.

39. Circle the 6<sup>th</sup> animal from the left.

(Questions 40 to 43).

Study the picture below and write the answers in the boxes.



40. The ruler is  long.

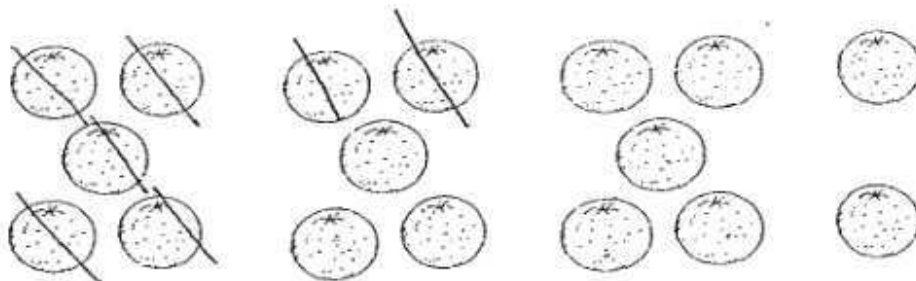
41. The chalk is longer than the

42. The pencil is as long as the

43. The eraser is  shorter than the chalk.


Write the correct answers in the boxes provided.

44.



Cross out 7 oranges.

is 7 less than 17.



Draw 5 apples.

is 5 more than 15.

Section C ( 6 x 3 m )

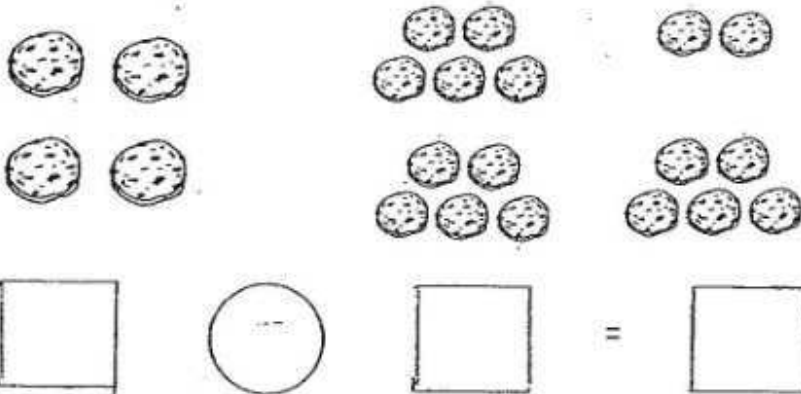
Do the story sums.

45. Mother buys 9 carrots.  
She uses 7 carrots.  
How many carrots has she left?



Mother has \_\_\_\_\_ carrots left.

- 
46. There are 4 big cookies and 17 small cookies.  
How many more small cookies than big cookies are there?



There are \_\_\_\_\_ more small cookies than big cookies.


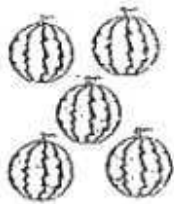
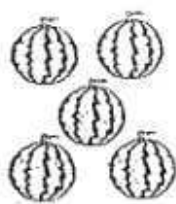
47. I give away 6 cupcakes.  
I have 8 cupcakes left.  
How many cupcakes do I have at first?



I have \_\_\_\_\_ cupcakes at first.

---

48. Tom has 14 watermelons.  
He sells 7 watermelons.  
How many watermelons has he left?



Tom has \_\_\_\_\_ watermelons left.



49. There are 2 bananas, 3 apples and 5 oranges.  
How many fruits are there altogether?




$$\square \quad \bigcirc \quad \square \quad \bigcirc \quad \square = \square$$

There are \_\_\_\_\_ fruits altogether.


\_\_\_\_\_

50. There are 20 balloons.  
10 balloons fly away.  
4 balloons burst.  
How many balloons are left?



$$\square \quad \bigcirc \quad \square \quad \bigcirc \quad \square = \square$$

There are \_\_\_\_\_ balloons left.



Have you checked your work?

The End











# ANSWER SHEET

EXAM PAPER 2008

SCHOOL : MGS PRIMARY SCHOOL  
SUBJECT : PRIMARY 1 MATHEMATICS

TERM : SA 1

- 1)9    2)5    3)18    4)twenty    5)twelve    6)three    7)B
- 8)B    9)1,3    10)3,6    11)8,10    12)11,17    13)16,12    14)C,D
- 15)16    16) $4+6=10$     17) $6-5=1$     18) $4+6+5=15$     19) $5 \times 4=20$
- 20) $4 \times 6=24$     21)a)C    b)D    22)14    23) $4+7=5$  more than 6
- 24) $16-6=10$  less than 20    25) $20-5=5$  more than 10
- 26) $3+4=6$  more than 13    27)     28)     29) 
- 30)     31)     32) 
- 33) $5+1, 6-0$     34) $15+4, 20-1$     35)elephant    36) $7^{\text{th}}$
- 37)dog    38) $3^{\text{rd}}$     39)rat    40)7    41)eraser    42)chalk
- 43)1    44)10 , 20
- 45) $9-7=2$   
Mother has 2 carrots left.
- 46) $17-4=13$   
There are 13 more small cookies than big cookies

47)  $14-6=8$

I have 14 cupcakes at first.

48)  $14-7=7$

Tom has 7 watermelons left.

49)  $2+3+5=10$

There are 10 fruits altogether.

50)  $20-10-4=6$

There are 6 balloons left.