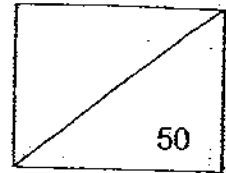




HENRY PARK PRIMARY SCHOOL
 2009 MID-YEAR REVIEW
 MATHEMATICS
 PRIMARY 1



Name: _____ ()

Parent's Signature _____

Class: Pr 1 _____

Duration of Paper: 1 h

Section A : Multiple Choice Questions (2 marks each)

Read the questions carefully. Choose the correct answer and put a tick in the correct box.

1. There are _____ cupcakes.



twelve	<input type="checkbox"/>
thirteen	<input type="checkbox"/>
twenty	<input type="checkbox"/>


2. $14 - 5 =$ _____

9	<input type="checkbox"/>
11	<input type="checkbox"/>
19	<input type="checkbox"/>

3. _____ makes 18.

1 and 8	
8 and 10	
9 and 11	

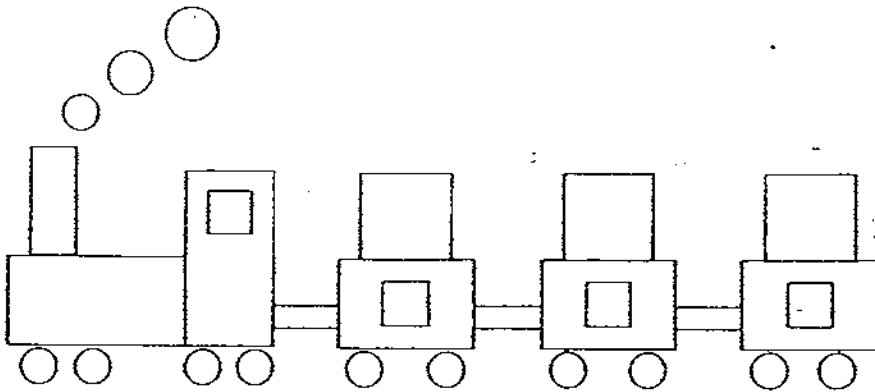
4.



Dinosaur C is _____ from the left.

2nd	
3rd	
4th	

5.



There are _____ circles.

10	
13	
16	

Section B : Open - Ended Questions (2 marks each)

Fill in your answers in the blanks provided.

6. Write the following number in words.

18	
----	--


7. $9 + 8 =$

8. Read the clues carefully. Write the names of the boys on the lines provided.


Clue 1: Tom is 1st from the left.

Clue 2: Sam is between John and Tom.

Clue 3: John is between Sam and Ben.




9. Ring the 7th ice-cream.



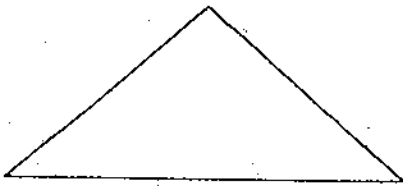
3rd

14.



Cross out the 4th apple from the right.

15. Name this shape. This is a _____



16.



crab



fish



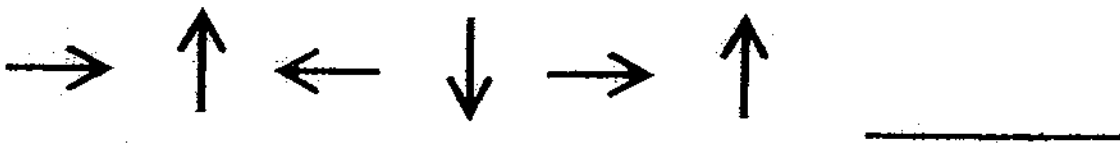
squid



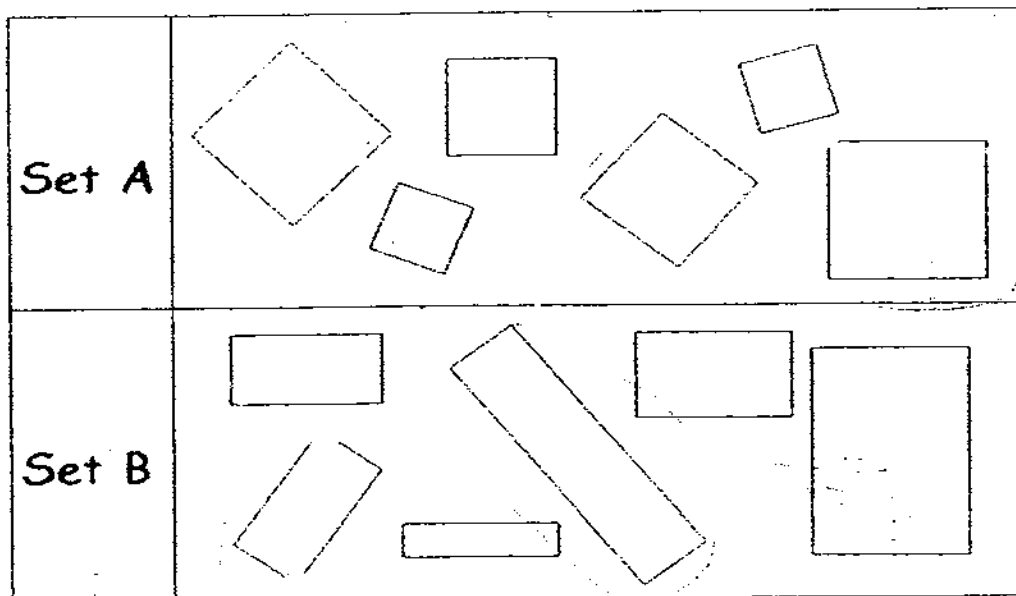
lobster

The _____ is last from the right.

17. Complete the pattern.




18. Look at the picture below and circle the correct answer in the sentence that follows.



The shapes above are sorted according to (size / shape).

19.

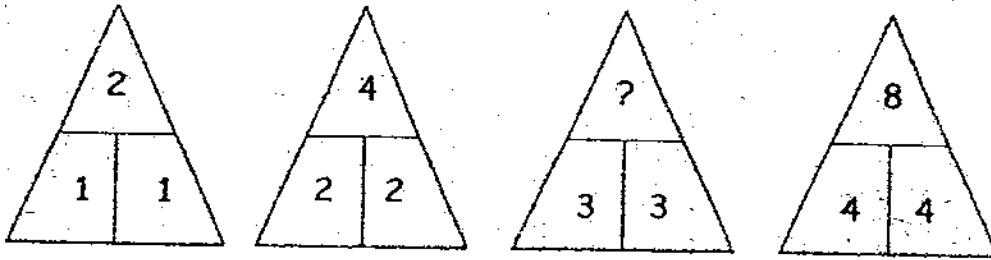


There are _____ more circles than triangles.

20. Complete the number pattern.

20, _____, 16, 14, _____, 10.

21.



The missing number is _____.

Section C: Story Sums/Heuristics (4 marks each)

Read each question carefully. Show your working and statements clearly in the spaces provided.

22. Dan had 19 marbles. He lost 7 marbles. How many marbles had he left?

Working

He had _____ marbles left.


23. Joy has 5 storybooks. Her mother gives her 8 more storybooks. How many storybooks does she have now?

Working

She has _____ storybooks now.

-END OF PAPER-


Setters: Mdm Aidi & Miss Sim



ANSWER SHEET

EXAM PAPER 2009

SCHOOL : HENRY PARK PRIMARY
SUBJECT : PRIMARY 1 MATHEMATICS



TERM : SA1

1)twelve 2)9 3)8 and 10 4)3rd 5)13 6)eighteen 7)17

8)Tom, Sam, John, Ben 9)§ § § § ○ § § 10)19,14,10,8

11)12 12)5+4=9 13)0 14)0 x 0 0 0 15)triangle 16)crab

17)← 18)shape 19)4 20)18, 12 21)6

22)19-7=12

He had 12 marbles left.

23)8+5=13

She has 13 storybooks now.