

ROSYTH SCHOOL
PRIMARY 1
MATHEMATICS
TOPICAL TEST 1

Name : _____ ()

Marks :

30

Class : P 1 - _____

Date : 18 Feb 11


Duration : 30 minutes

Parent's Signature : _____

Read the questions carefully. Answer all questions.

1. Match the word to the correct numeral.

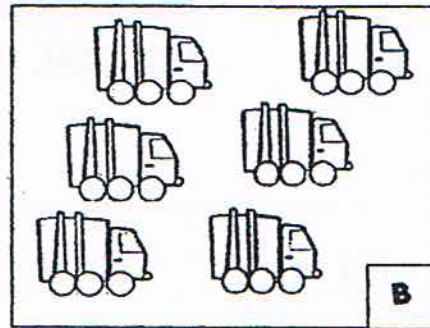
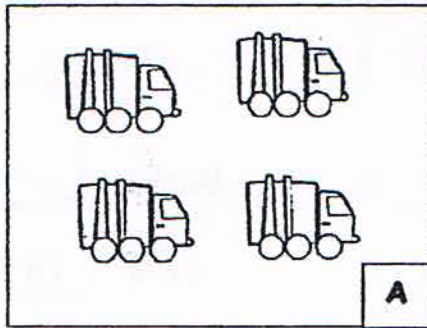



2. Count and write the number of  in the box.



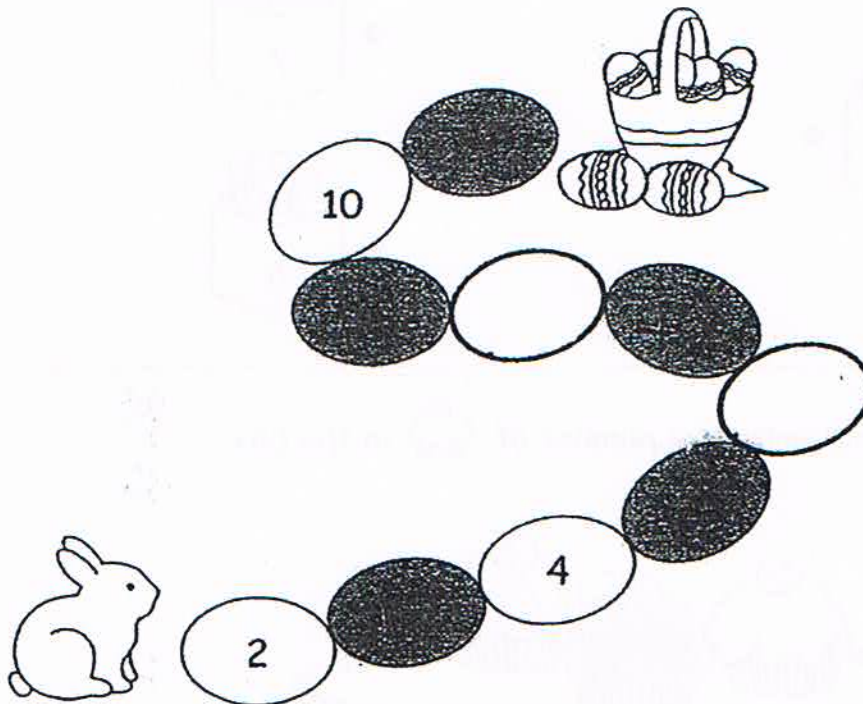
There are  on the plate.

3. Study the pictures carefully.
Fill in the numbers to complete the sentence.



Box B has more  than Box A.


4. Complete the number pattern.



5. Fill in the card with the missing number.



6.




There are 

There are 

There are party hats altogether.

7.

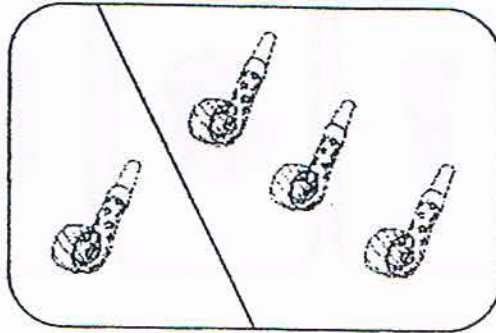
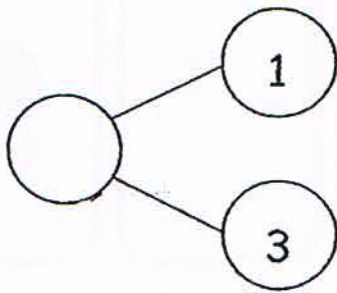


There are 

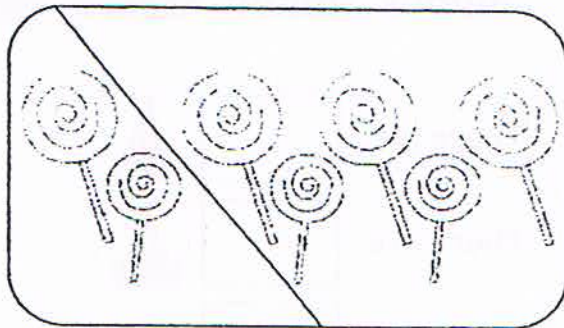
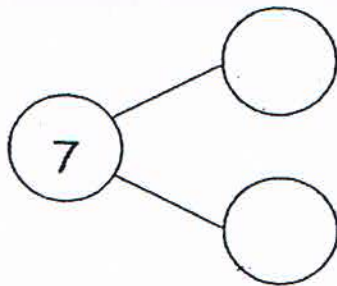
There are 

There are toys altogether.

8. Study the picture carefully. Complete the number bond.

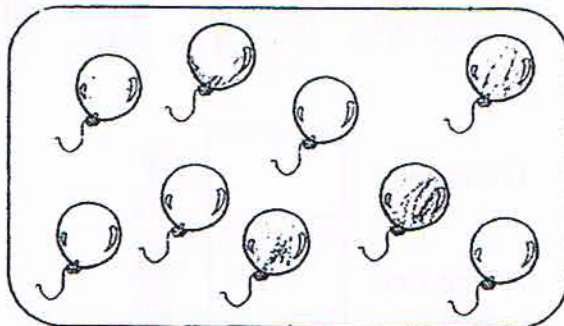
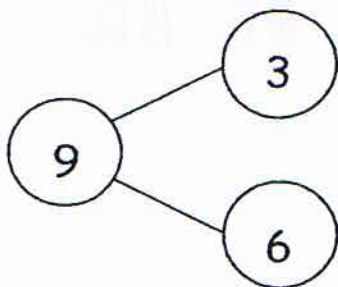


9. Study the picture carefully. Complete the number bond.

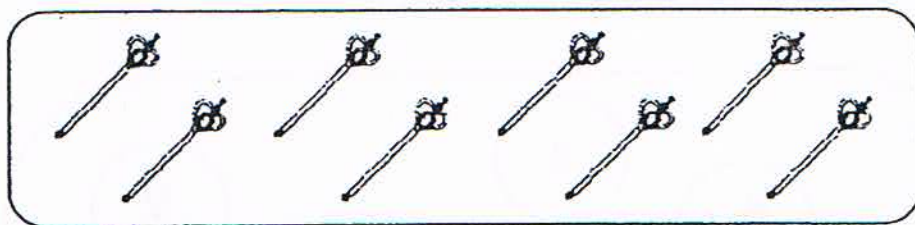


10. Study the number bond carefully.

Draw a line in the picture to show the two parts.



Use the picture below to answer questions 11 and 12.




11. 4 and make 8.

12. and 1 make 8.

13. Match each child to a gift to make 5.



Use the picture below to answer questions 14 and 15.
Each number can only be used once.



14. Use green to colour two bubbles that make 10.

15. Use blue to colour *another* two bubbles that make 10.

- End of paper -





ANSWER SHEET

EXAM PAPER 2011

SCHOOL : ROSYTH
SUBJECT : PRIMARY 1 MATHEMATICS

TERM : CA1

1)7 2)3 3)2 4)8, 6 5)7 6)2,4,6 7)5,3,8 8)4

9)5,2 10)  11)4 12)7 13)1→4 3→2

14)8 and 2 15)9 and 1