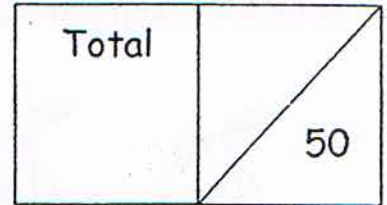




Pei Hwa Presbyterian Primary School
Mathematics Revision Paper - 2011

Mathematics
Primary One
(Time: 1 hour)



Name: _____ ()

Date : 1 November 2011

Class: Integrity ()

Parent's Signature: _____

Section A: (10 X 1 mark)

Choose the correct answer and write its number in the brackets provided.

1. How many faces are there?



(1) 40

(2) 44

(3) 50

(4) 54

()

2. 6 tens 8 ones is the same as _____.

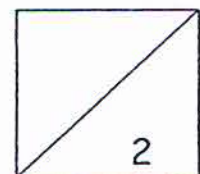
(1) 16

(2) 18

(3) 68

(4) 88

()



3. Which statement best represents the picture below?



(1) $3 + 3$


(2) 3 groups of 3

(3) $4 + 3$

(4) 4 groups of 3

()

4. James puts 15 balloons equally into 3 groups. How many balloons are there in each group?



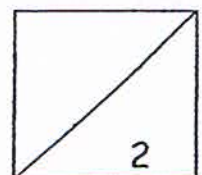
(1) 5

(2) 6

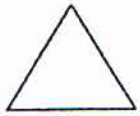
(3) 3

(4) 4

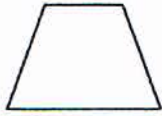
()



5.



A



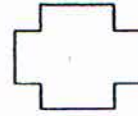
B




C



D



E



F

Shape _____ is fifth from the right.

(1) E

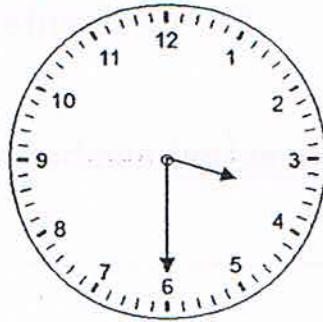
(2) B

(3) C

(4) D

()

6. Which of the following shows the correct time on the clock?



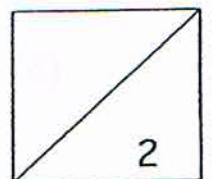
(1) 6 o'clock

(2) half past 6


(3) 3 o'clock

(4) half past 3

()



7. How much money is there in the purse?



(1) 80 cents


(2) 70 cents

(3) 65 cents

(4) 60 cents

()

8. What is the sum of the greatest number and the smallest number in the box?



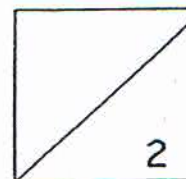
(1) 14

(2) 20

(3) 24

(4) 30

()



9. Amy spent 90¢ altogether. She bought a pair of scissors and a _____.

pencil - 20¢



scissors - 60¢



ruler - 15¢



notebook - 30¢



(1) pencil

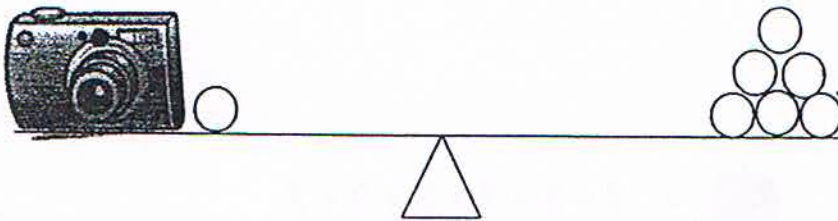
(2) ruler

(3) a pair of scissors

(4) notebook

()

10.



The mass of the camera is _____ ○.

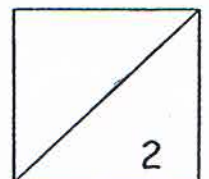
(1) 6

(2) 5

(3) 3

(4) 4

()



Section B: (10 X 2 marks)

Write your answers in the blank. Show your workings in the space provided.

11. $75 = \underline{\hspace{2cm}}$ tens + 35 ones

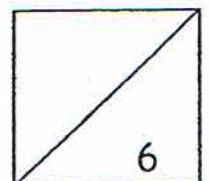
12. Kenny has 3 twenty-cent coins.
Lucy has 25 cents.
David has 5 cents.
How much do they have altogether?



They have cents altogether.

13. $6 \times \text{●} = 3 + 3 + 3 + 3 + 3 + 3$

$\text{●} = \underline{\hspace{2cm}}$

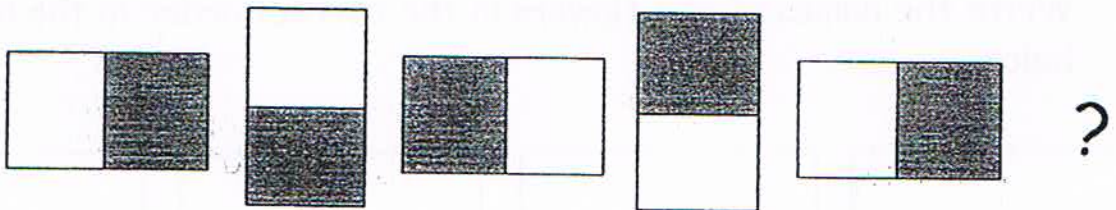


14. Robert had 12 stamps. He shared the stamps equally with Jimmy and Tom.

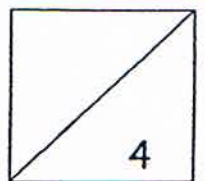



Each of them had _____ stamps.

15. Complete the pattern shown below by drawing the correct shape in the box provided.

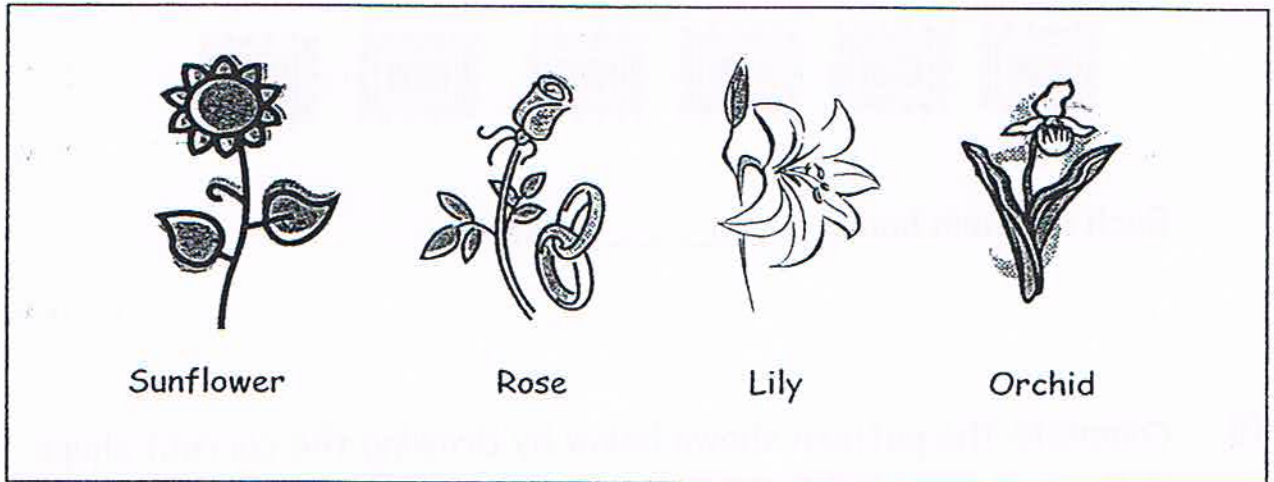


The missing shape is



16. Mrs Lim planted some flowers in her garden.

- Sunflower is planted next to the Rose.
- Lily is planted between Sunflower and Orchid.
- Rose is not on the left of the garden.



Write the names of the flowers in the correct order in the boxes below.

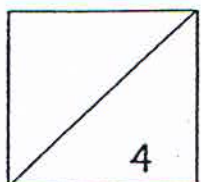
--	--	--	--

17. I am a number less than 100.

I have a five in the tens place.

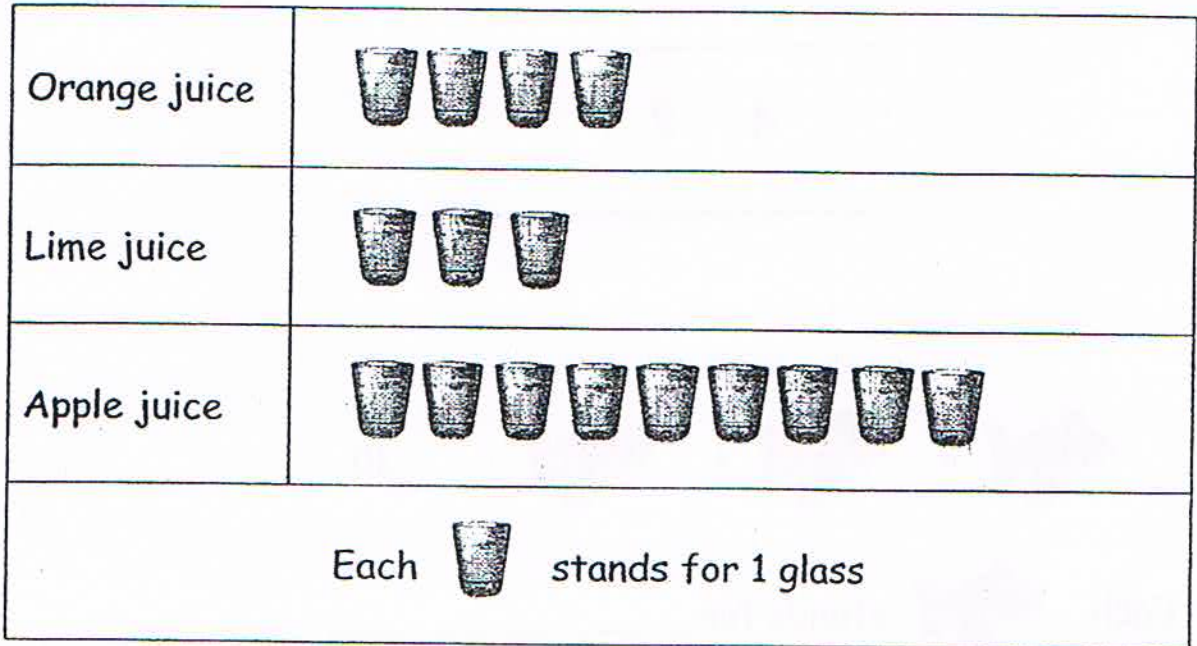
When you add 6 and 2, you will get the number in the ones place.

I am _____.

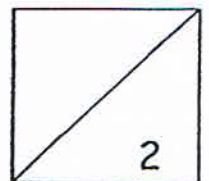


Study the graph below and answer Questions 18a and 18b.
 The graph below shows the number of glasses of fruit juice Mr Ravi sold.

Glasses of fruit juice sold




- 18 a) Mr Ravi sold the least glasses of _____ juice.
- b) Mr Ravi sold _____ more glasses of apple juice than orange juice.

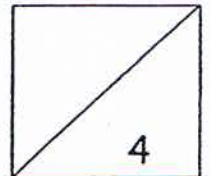


19. The missing number in the box is _____.

$$\begin{array}{r} 71 \\ - \square 9 \\ \hline 42 \\ \hline \end{array}$$

20.  +  +  = 30

Each  stands for _____.



Section C: (5 X 4 marks)

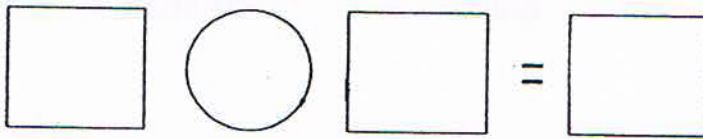
Solve each of the following problem sums.

Show all your workings and statements clearly.

Write your answers in the space provided.

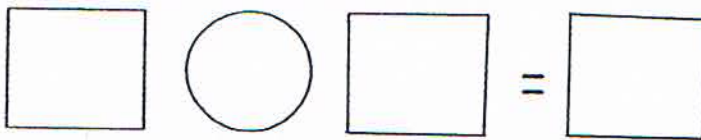
21. Kenny has 24 stickers.
Kenny has 6 more stickers than Peter.

- (a) How many stickers does Peter have?

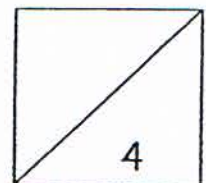


Peter has _____ stickers.


- (b) How many stickers do they have altogether?



They have _____ stickers.



22. Macdonald is a farmer. He has some cows, goats and chickens at his farm. There are altogether 26 animal legs. If Macdonald has three cows and two goats, how many chickens does Macdonald have at his farm? (You may draw to show your working)



Cow

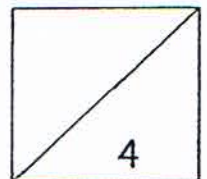


goat

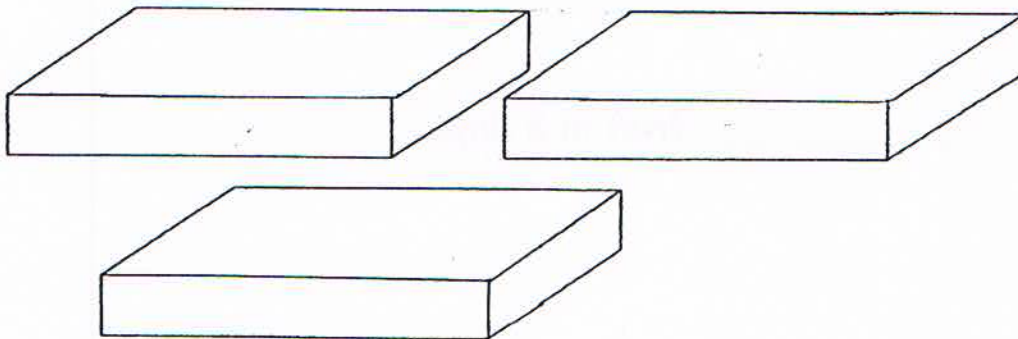


chicken

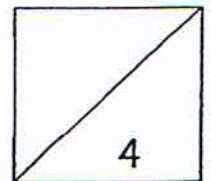
Macdonald has _____ chickens at his farm.



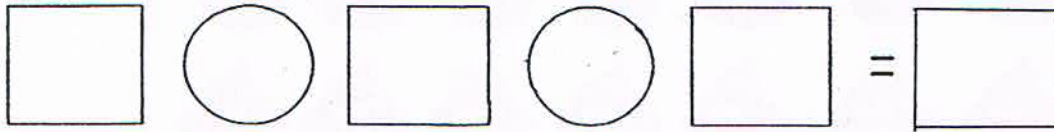
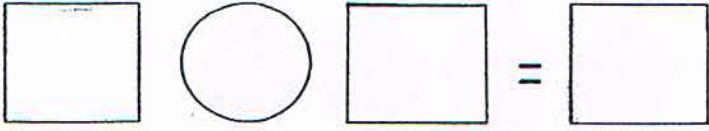
23. Marvis baked 24 cupcakes. She ate 9 cupcakes. She put the rest of the cupcakes equally into 3 trays. How many cupcakes were there in each tray? Draw the cupcakes in the trays below.



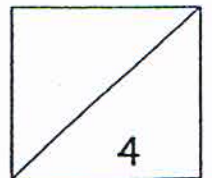
There were _____ cupcakes in each tray.





24. Harry ate 2 apples and 3 oranges every recess.
How many fruits did he eat in 3 days?



He ate _____ fruit in 3 days.



25. (a) Danny had 2 ten-dollar notes.
How much money did he have?



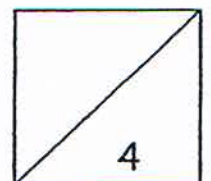
$$\square \bigcirc \square = \square$$

He had \$ _____.

- (b) Danny bought a toy telescope for \$16.
How much change did he have if he paid for the telescope with his money?

$$\square \bigcirc \square = \square$$

He had \$ _____ change.





ANSWER SHEET

EXAM PAPER 2011

SCHOOL : PEI HWA
 SUBJECT : PRIMARY 1 MATHEMATICS

TERM : SA2

Q1	Q2	Q3	Q4	Q5	Q6	Q7	Q8	Q9	Q10
2	3	4	1	2	4	1	2	4	2

11)4

12)90

13)3

14)4

15)



16)Orchid , Lily , Sunflower , Rose

17)58

18)a)Lime b)5

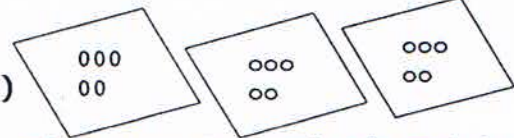
19)2 20)10

21)a)24 - 6 = 18

Peter has 18 stickers.

22)3

23)



There were 5 cupcakes in each tray

b)24 + 18 = 42

They have 42 stickers.

24)2 + 3 = 5

5 + 5 + 5 = 15

He ate 15 fruit in 3 days.

25)a)\$10 + \$10 = \$20

He had \$20.

b)20 - 16 = 4

He had \$4 change.