

Parent's Signature:

ST. ANDREW'S JUNIOR SCHOOL
PRIMARY 1 MATHEMATICS 2014


Topics: Numbers to 20, Addition and Subtraction within 10, Ordinal
Numbers
Topical Test 1

Name: _____ ()

Date: _____

Primary 1 – _____

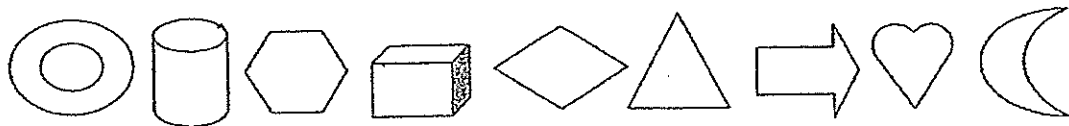
Marks:



Show your working in the space below each question clearly and write your answers in the spaces provided. (10 x 2 = 20 marks)

1) Write 18 in words. (2m)

2) Circle the 8th shape from the right. (2m) ✓




3) 9 is _____ more than 5. (2m)

4) Fill in the blanks (4m)

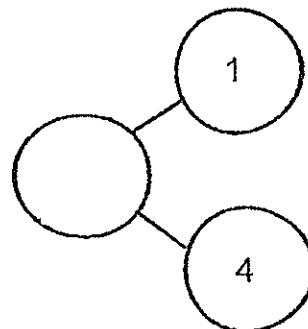
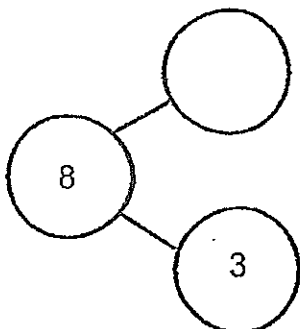
+	2	3	4	5
2	4		6	
3	5			8
4	6	7	8	9

5) Show the following number statement by crossing out the correct number of items and fill in the blank. (2m)

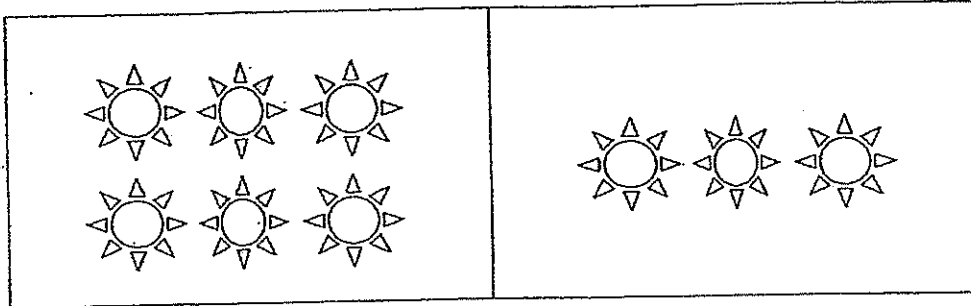
$$10 - 2 = \square$$



6) Fill in the number bonds. (2m)



7) Write one addition number sentence and one subtraction number sentence for the diagram below. (4m) μ



$$\square + \square = \square$$

$$\square - \square = \square$$

8) Fill in the blank. (2m)

$$\text{Sun} + \text{Heart} = 12$$

$$\text{Heart} + \text{Heart} = 10$$

$$\text{Sun} = \underline{\hspace{2cm}}$$

End of Paper
Have you checked your work?

YEAR: 2014

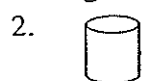
LEVEL: P1

SCHOOL: ST ANDREWS

SUBJECT: MATHEMATICS

SEMESTER: TEST 1

1. eighteen



3. 4

4. 5, 7
6, 7

5. 8

Cross out 2

6. 5, 5

7. $6 + 3 = 9$
 $9 - 3 = 6$

8. 7

