



Holy Innocents' Primary School

Topical Test 5 – 2014

Primary One

Mathematics

Duration of Time: 50 minutes

Instructions:

1. Do not turn over this page until you are told to do so.
2. Follow all instructions carefully.
3. Answer all questions.

	Obtained	Max.
Section A		18
Section B		20
Section C		12
Total		50

Name: _____ ()

Date : 30 October 2014

Class : 1 Sincerity ()

Parent's Signature: _____

SECTION A: (9 × 2 marks)

For each question, four options are given. One of them is the correct answer. Choose the correct answer and write its number in the brackets provided.

1) 6 tens and 3 ones is _____.

(1) 3

(3) 63

(2) 9

(4) 90

()

2) $9 + 8 + 7 + 2 + 1 = \boxed{?}$

(1) 26

(3) 28

(2) 27

(4) 29

()

3) $56 - 36 = \boxed{?}$

(1) 20

(3) 62

(2) 26

(4) 86

()

4) 5 twos is the same as _____.

(1) $5 + 2$

(3) $2 \times 2 \times 2 \times 2 \times 2$

(2) $5 + 5$

(4) $2 + 2 + 2 + 2 + 2$

()

5) John scored 21 points in a game.
He scored 8 more points than Sam.
How many points did Sam score?

(1) 13

(3) 27

(2) 21

(4) 29

()

6) 51 is 3 tens less than ?

(1) 21

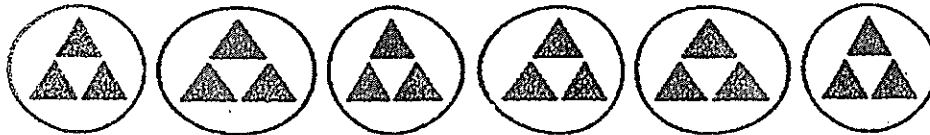
(3) 54

(2) 48

(4) 81

()

7) There are 6 groups of 3 triangles below.



Peter re-arranges the triangles into groups of 9.
How many groups of 9 are there?

(1) 6

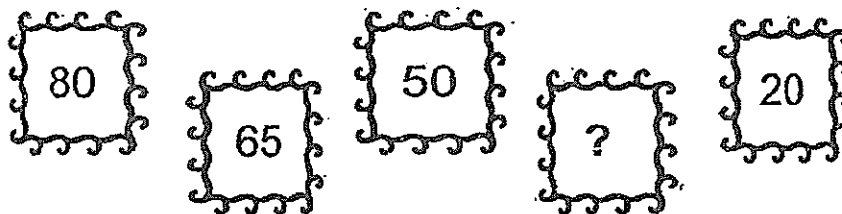
(3) 3

(2) 2

(4) 18

()

8) Look at the number pattern below. What is the missing number?



(1) 15

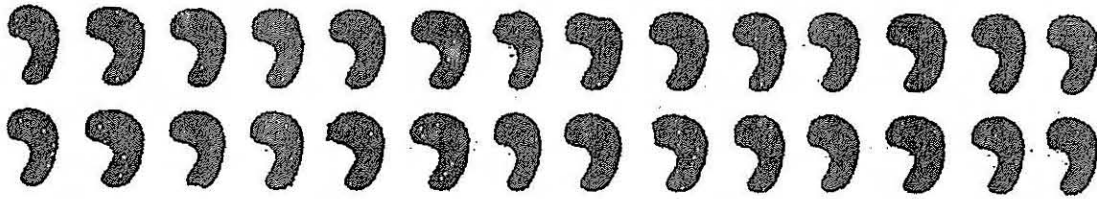

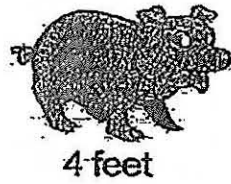
(3) 35


(2) 25

(4) 45

()

- 9) Old McDonald has a farm. In his farm, he has 4 pigs and some ducks.
If the pigs and ducks have 28 feet altogether, how many ducks are there?



Each  stands for 1 footprint.

(1) 6

(3) 14

(2) 7

(4) 24

()

- End of Section A -

SECTION B: (10 × 2 marks)

For each question, show your workings clearly and write your answer in the boxes provided. Give your answers in the units stated.

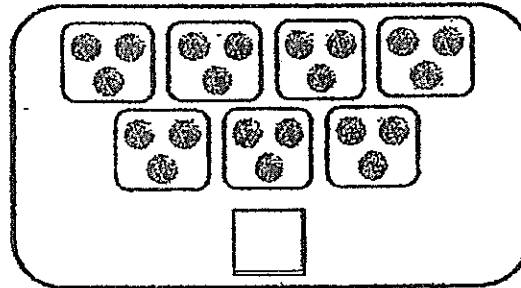
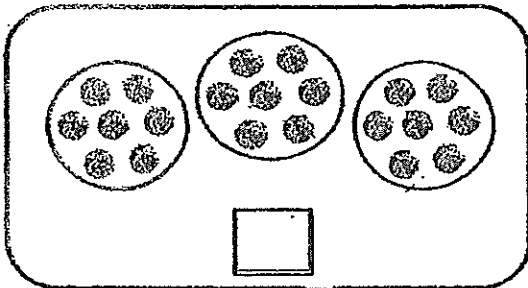
10) Write the following numbers in words.

a) 42

b) 90


11) The sum of 6 and 56 is

12) Tick (✓) the correct box which shows 3 groups of seven.



13) Look at the pictures below.

Put the bears into groups of 4. How many groups of bears are there?



There are groups of bears.


- 14) Mother bought 43 apples and 28 oranges.
How many more apples than oranges did she buy?

She bought more apples than oranges.

- 15) What number comes just before 90?

The number is

- 16) An oven can hold 2 trays.
There are 12 cupcakes in each tray.
How many cupcakes can the oven hold altogether?



The oven can hold cupcakes altogether.


- 17) I am a 2-digit number.
I am greater than 75 but smaller than 90.
Both my digits add up to 15.
The smaller digit is in the tens place.
What number am I?

I am

- 18) On the 1st day, Mrs Lee sold 3 erasers.
Each day, she sold 2 more erasers than the day before.
How many erasers would she sell on the 5th day?

She would sell erasers on the 5th day.

- 19) Kaiting has 20 oranges.
She shared the oranges with 4 friends.
How many oranges did each of them get?



Each of them got oranges.

- End of Section B -

SECTION C: (3 × 4 marks)

Solve the following problems. Show your workings clearly.

Write the equations in the given spaces and write the final answer in the blank.

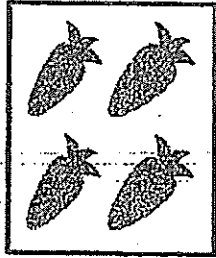
- 20) Pam and George went on a fishing trip.
Pam caught 29 fish. George caught 14 more fish than Pam.
How many fish did George catch?

George caught _____ fish.

- 21) Mother had some curry puffs. She gave 25 curry puffs to Aunt Sue and 8 curry puffs to Aunt May. She had 10 curry puffs left.
How many curry puffs did she have at first?

She had _____ curry puffs at first.


- 22) Zhiming buys carrots for his pet rabbit.
There are 4 carrots in each bag. He buys 5 bags of carrots.
(a) How many carrots does Zhiming buy in all?



1 bag

Zhiming buys _____ carrots in all.

- (b) The rabbit eats 3 carrots a day. After 6 days, how many carrots does Zhiming have left?



Zhiming has _____ carrots left.

- End of Paper -

Year: 2014
Level: P1
School: Holy innocents' Primary School
Subject: Mathematics
Semester: Test 5

Q1	Q2	Q3	Q4	Q5	Q6	Q7	Q8	Q9
3	2	1	4	1	4	2	3	1

Q10a) Forty-two

Q10b) Ninety

Q11) 62

Q12) tick the left box

Q13) 6

Q14) 15

Q15) 89

Q16) 24

Q17) 78

Q18) 11

Q19) 4

Q20) $29+14=43$

George caught 43 fish.

Q21) $10+25=35$

$$35+8=43$$

She had 43 curry puffs at first.

Q22) $4+4+4+4+4=20$

Zhiming buys 20 carrots in all.

Q22b) $3+3+3+3+3+3=18$

$$20-18=2$$

Zhiming has 2 carrots left.

11/11/2019 10:11:25 AM

11/11/2019 10:11:25 AM