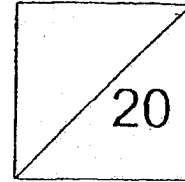


Ai Tong School
Primary One Mathematics
Term 2 Mini Test - 2018

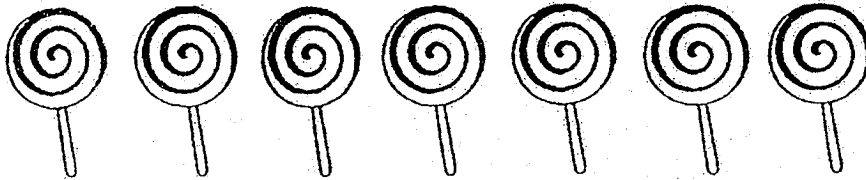


Name: _____ () Date: _____

Class: 1 _____ Parent's Signature: _____

Duration: 30 minutes

1. Count. Fill in the blanks. (2 marks)



(a) Write in number: _____

(b) Write in words: _____

2. Fill in the blanks. (2 marks)

(a) 8 and 2 make _____

(b) 4 + _____ = 9

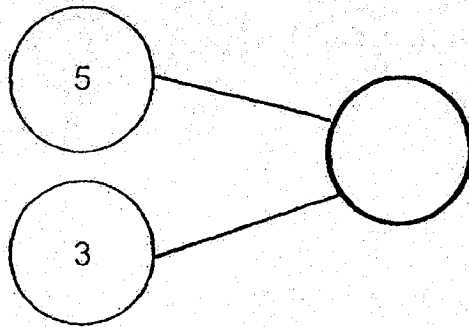
3. Fill in the blanks. (2 marks)

(a) 1 more than _____ is 4.

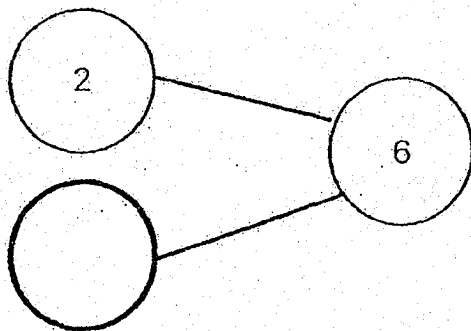
(b) _____ is 1 less than 7.

4. Look at the number bonds and fill in the missing numbers. (2 marks)

(a)



(b)




5. (a) Colour the 2nd cat from the left. (1 mark)



Left


Right

- (b) Cross out the 7th frog. (1 mark)



3rd

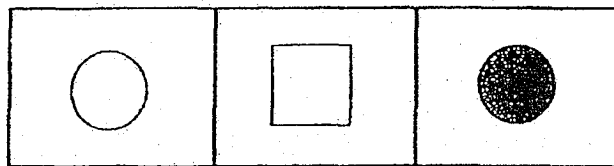
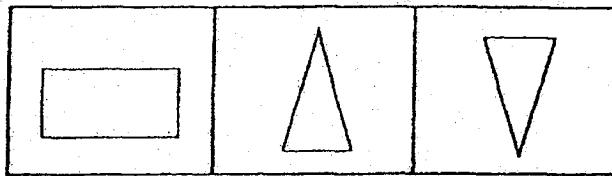
6. Look at the picture. Circle the correct word in each sentence. (2 marks)



(a) Sam is the in the race.

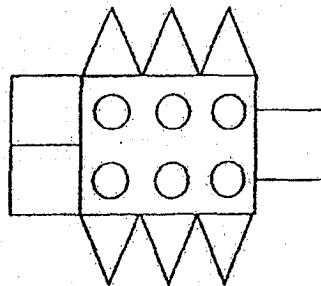
(b) Joe came Ben and Dan.

7. Complete the patterns below. Circle the missing shapes. (2 marks)



8. Tom made a picture shown below with some shapes.

Fill in the blanks. (2 marks)



(a) Tom used _____ squares altogether.

(b) He used the same number of _____ and _____

9. Which of the following have answers equal to 7?
Circle them. (2 marks)

$0 + 7$	$1 + 5$	$3 + 4$	$4 + 5$
---------	---------	---------	---------

10. Fill in the blanks. (2 marks)

Max, Ray, Henry and Eric are standing in a line.

Max is in last position.

Eric is standing between Henry and Ray.

Write their names in the correct order.



Henry

1st

End-of-Test

Have you checked your work?

EXAM PAPER 2018 (P1)
SCHOOL : AI TONG
SUBJECT : MATHEMATICS
TERM : Term 2 Mini Test

Q1) a) 7

b) seven

Q2) a) 10

b) 5


Q3) a) 3

b) 6

Q4) a) 8

b) 4

Q5) a) (a) Colour the 2nd cat from the left. (1 mark)



b)

(b) Cross out the 7th frog. (1 mark)



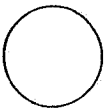
Q6) a) last

b) after

Q7) a)



b)



Q8) a) 3

b) circles , triangles

Q9) $0 + 7$, $3 + 4$

Q10) Henry , Eric , Ray , Max