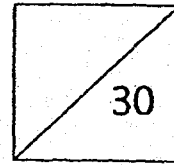


25

Al Tong School
Primary 1 Mathematics
Term 3 Mini Test - 2018



Name: _____ ()

Marks:

Class : P1 _____

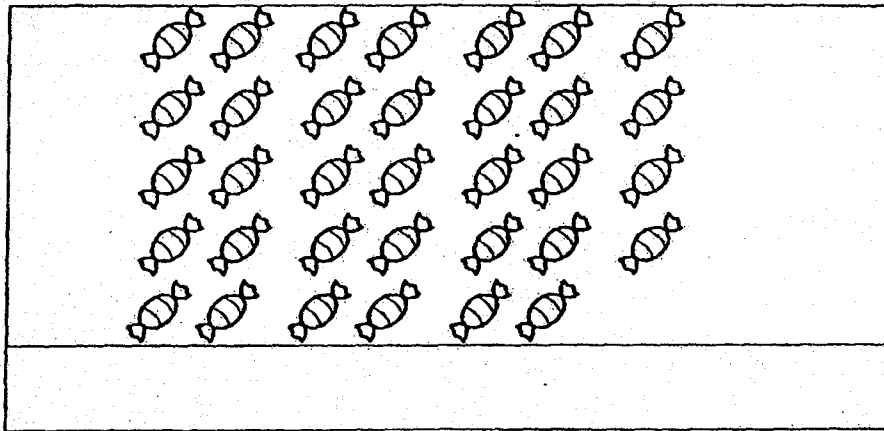
Date: _____

Duration: 40 minutes

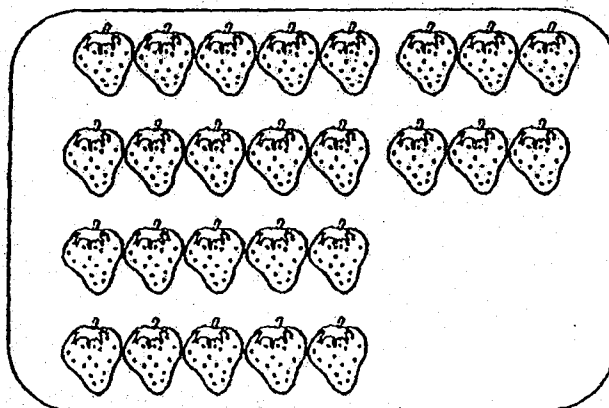
Parent's Signature: _____

Section A (20 marks)

1. Count and write the number in **words**. (2 marks)



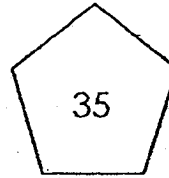
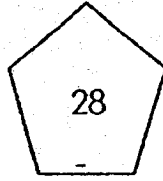
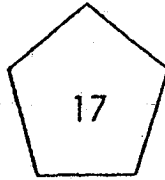
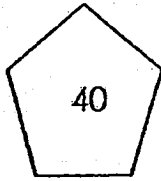
2. Count the number of . Then fill in the blanks. (1 mark)



tens

ones

3. Look at the numbers. Then use them to fill in the blanks. (3 marks)

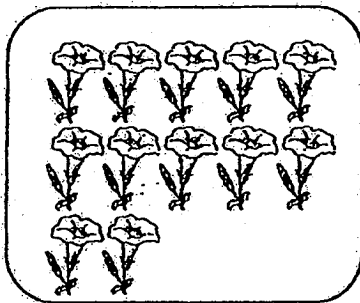


(a) _____ is smaller than 20.


(b) _____ is greater than 25 but smaller than 34.

(c) _____ is the greatest number.

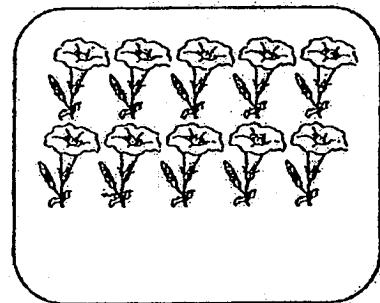
4. Fill in the blanks with more or fewer. (2 marks)



Mary



Jane

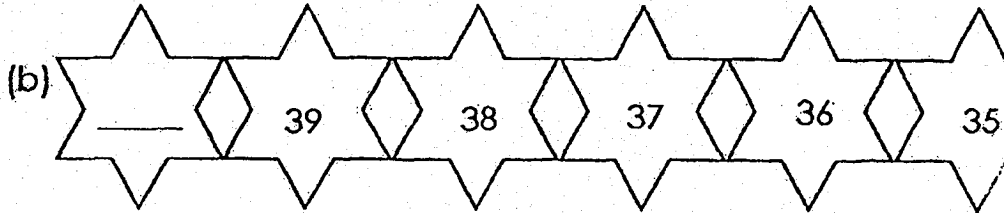
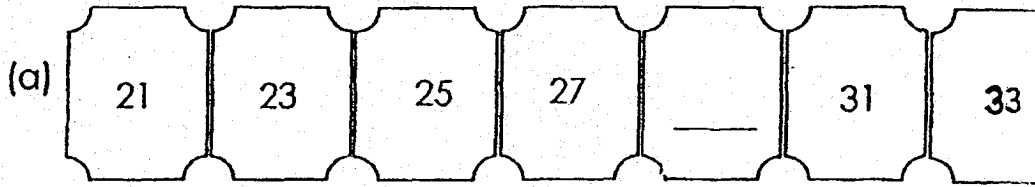


Sarah

(a) Mary has _____ flowers than Sarah.

(b) Sarah has _____ flowers than Jane.



5. Complete the number pattern below. (2 marks)




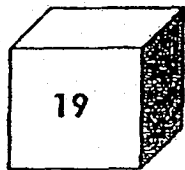


6. Fill in the missing numbers. (2 marks)

(a) _____ is 3 less than 18.

(b) 2 more than 29 is _____.

7. Colour the  that gives the number in the . (2 marks)



8. Fill in the missing numbers in the boxes. (2 marks)

(a) Tens Ones

$$\begin{array}{r} 2 \quad 8 \\ - 1 \quad 6 \\ \hline \square \quad \square \end{array}$$

(b) Tens Ones

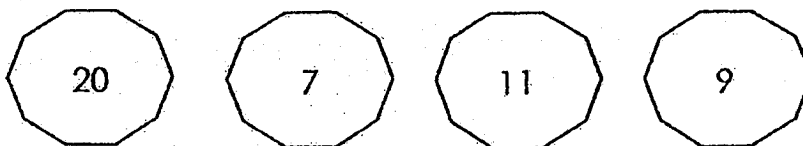
$$\begin{array}{r} 1 \quad \square \\ + 1 \quad 7 \\ \hline \square \quad 2 \end{array}$$

9. Fill in the missing numbers. (2 marks)

(a) $23 + \square = 32$

(b) $\square - 20 = 10$

10. Write an addition equation using 3 of the numbers below. (2 marks)



$$\square + \square = \square$$


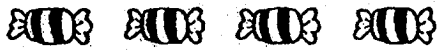
Section B (10 marks)

Read and solve these word problems carefully. Show your workings.

11. Sharon has 4 sweets.

Wei Ming has 9 sweets.

How many sweets do they have altogether?



$$\square \bigcirc \square = \square$$

They have _____ sweets altogether.

Working

12. 15 children go to the zoo.

7 of them are girls and the rest are boys.

How many boys are there?



7 girls

?

boys

$$\square \bigcirc \square = \square$$

There are _____ boys.

13. Glenda bakes 20 cupcakes.
She gives 11 cupcakes to her friends.
How many cupcakes are left?



$$\square \bigcirc \square = \square$$

_____ cupcakes are left.

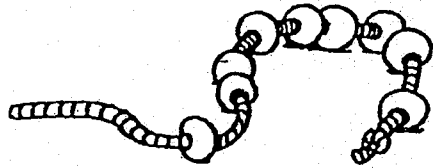
-
14. Jim has 8 stamps.
Ali has 10 more stamps than Jim.
How many stamps does Ali have?



$$\square \bigcirc \square = \square$$

Ali has _____ stamps.

15. Linda needs 15 beads to make a bracelet.
She has 9 beads now.
How many more beads does she need?




$$\square \quad \bigcirc \quad \square = \square$$

She needs more beads.

Remember to check your work!

END OF PAPER 😊

Working



EXAM PAPER 2018 (P1)

SCHOOL : AI TONG

SUBJECT : MATHEMATICS

TERM : TERM 3 MINI TEST

Q1) thirty-four

Q2) 2 tens 6 ones

Q3) a) 17

b) 28

c) 40

Q4) a) more

b) fewer

Q5) a) 29

b) 40

Q6) a) 15

b) 31

Q7) $4 + 15$

Q8) a) 12

b) $1(5) + 17 = (3)2$

Q9) a) 9

b) 30

Q10) $11 + 9 = 20$

Q11) $4 + 9 = 13$

Q12) $15 - 7 = 8$

Q13) $20 - 11 = 9$

Q14) $10 + 8 = 18$

Q15) $15 - 9 = 6$