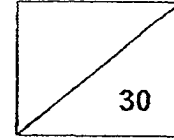




Maha Bodhi School
 Topical Review 3
 P1 Mathematics



Name : _____ ()

Class: Primary 1 _____

Duration : 50 minutes

Date :

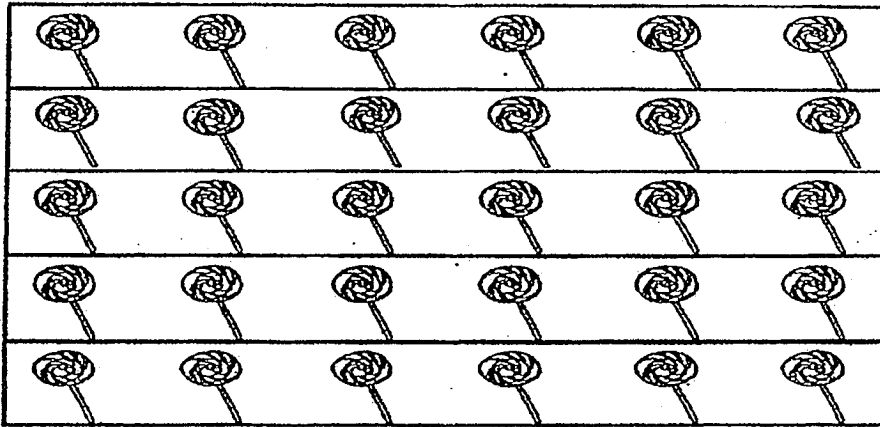
Parent's Signature : _____

Questions 1 to 10 carry 1 mark each.

Questions 11 to 20 carry 2 marks each.

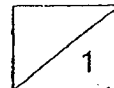
Write your answers in the spaces provided.

1.



$$6 + 6 + 6 + 6 + 6 = \underline{\quad\quad} \times 6$$

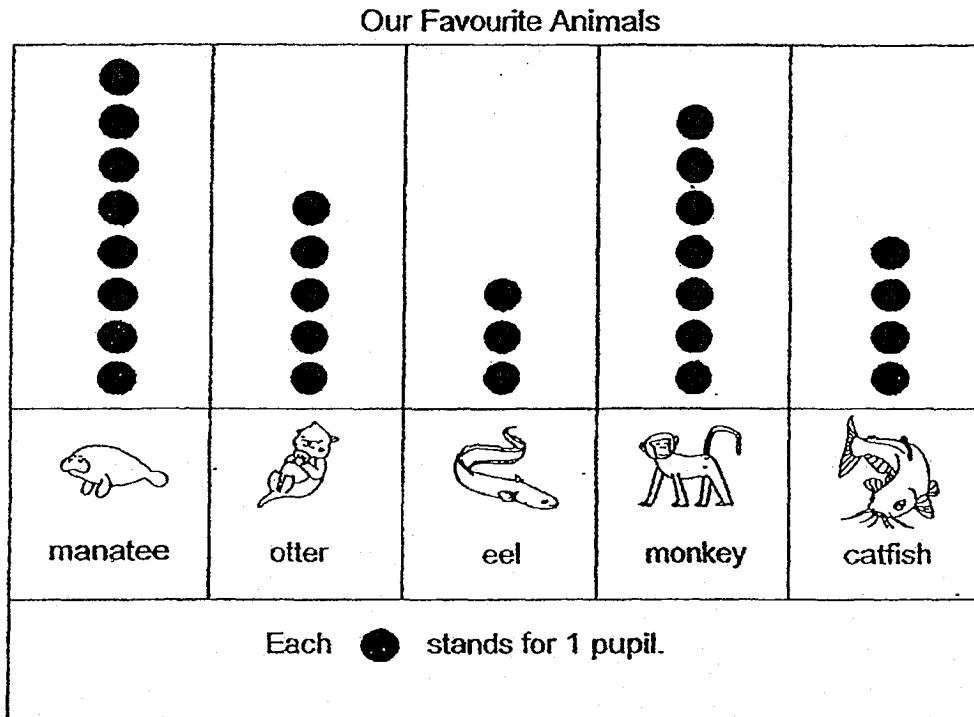
Mark:



Primary 1 Respect goes to River Safari.

This graph shows the different animals that the pupils like.

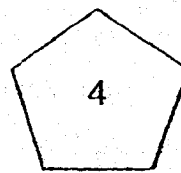
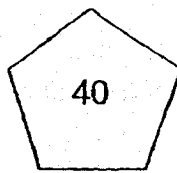
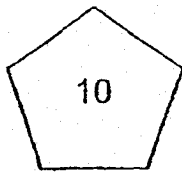
Use it to answer Questions 2 and 3.



2. The least popular animal is the _____.

3. There are _____ pupils who like the monkey.


4.



Use the numbers given above to write a multiplication equation.


$$\square \times \square = \square$$

5. Write a multiplication equation to show the total number of cupcakes.



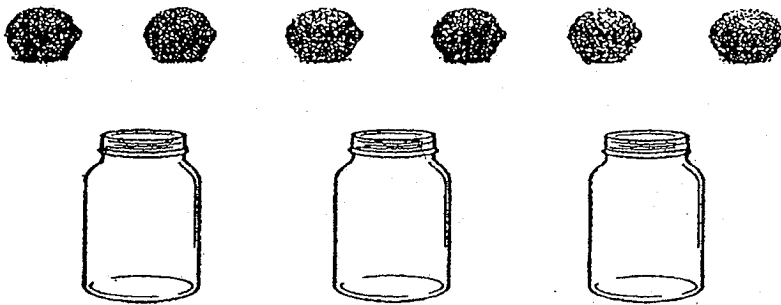
$$\square \times \square = \square 27$$

6. There are 20 coins.




There are _____ equal groups of _____ coins.

7. Marcus puts an equal number of lemons in each jar.



There are _____ lemons in each jar.

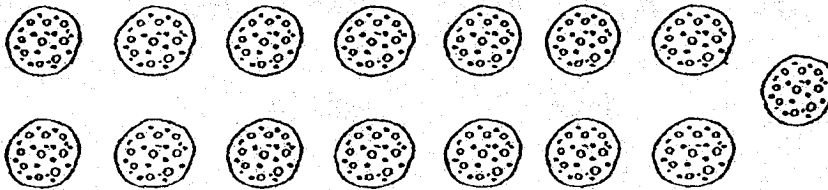
8. Some pupils share 16 sweets equally.



Each pupil gets 4 sweets.

There are _____ pupils.

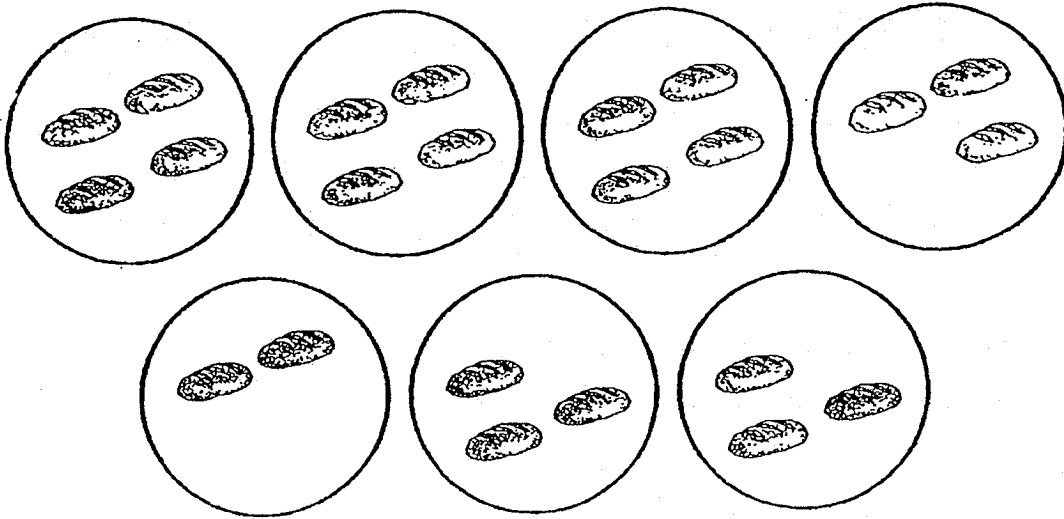
9. Put 15 cookies equally into 5 groups.



Each group has _____ cookies.

10. Susan bakes some buns for 7 friends.


The picture shows the number of buns she has baked.



Susan wants to give 4 buns to each friend.

She needs to bake _____ more buns.

11. Look at the pictures below.

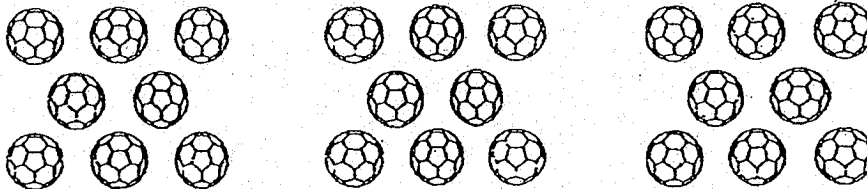


How many cars are there altogether?

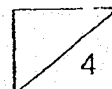
Tick (✓) the box that shows the correct answer.

6×3	<input type="checkbox"/>
2 twos	<input type="checkbox"/>
6 groups of 2	<input type="checkbox"/>
$2 + 2 + 2 + 2 + 2$	<input type="checkbox"/>

12.




3 eights = _____



13. There are 14 marbles.



Circle groups of 7.



14. There are 18 buttons.

Mrs Ong sews the buttons onto 3 shirts equally.

Draw to show the number of buttons on each shirt.

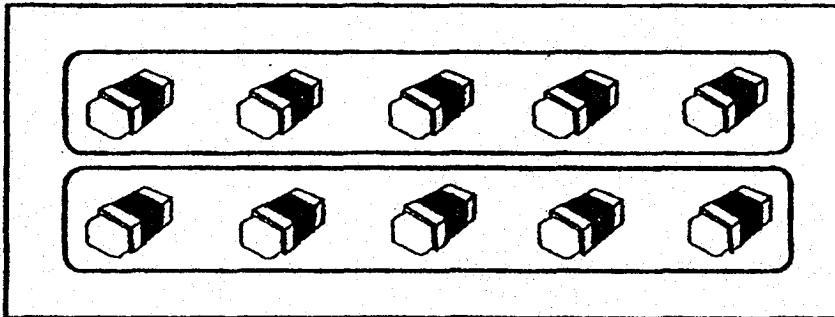


15. Kalis has 10 erasers.

She puts the erasers equally into groups in 2 different ways.

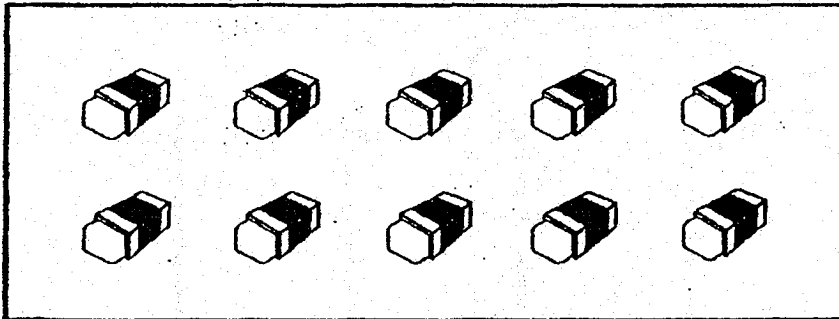
The first way is shown below.

Way 1



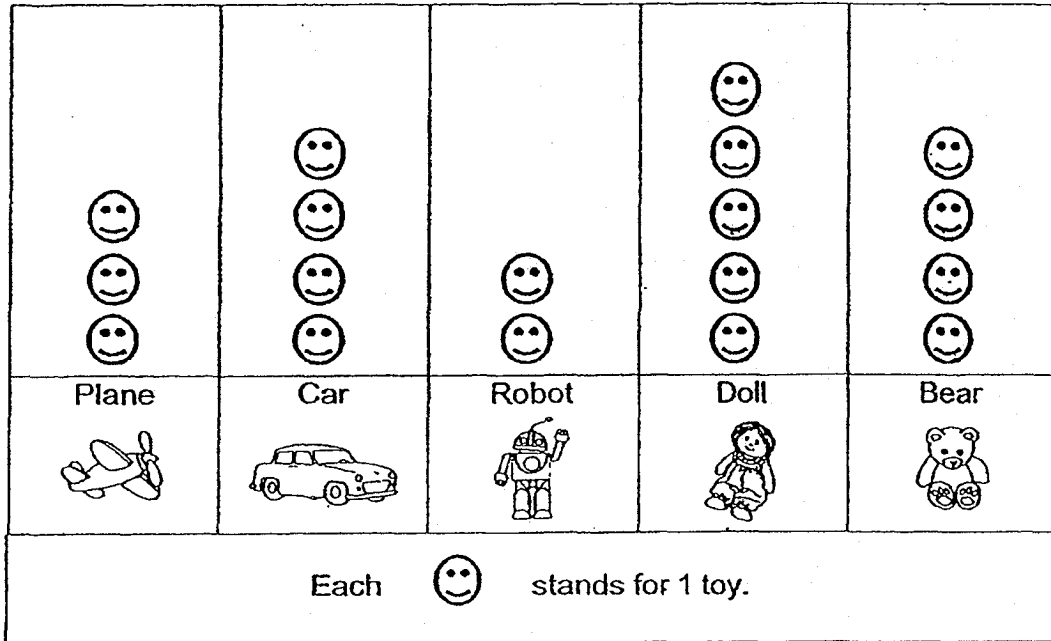
Circle a different way of putting the 10 erasers equally into groups.

Way 2



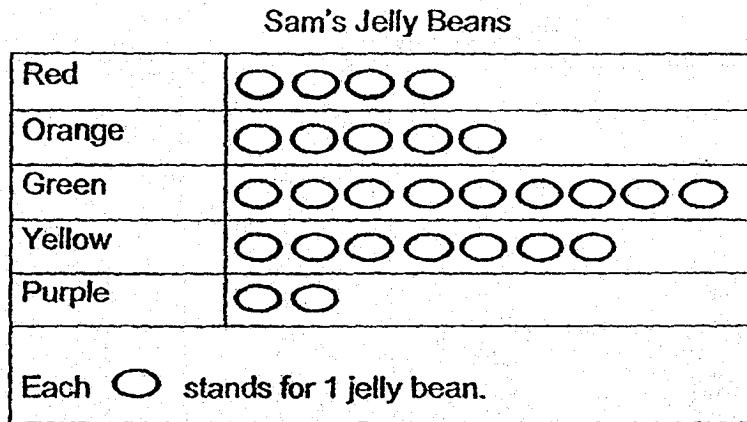
16. This picture graph shows the number of toys in a room.

Number of Toys




There are as many _____ as _____.

17. This picture graph shows the number of coloured jelly beans Sam has.



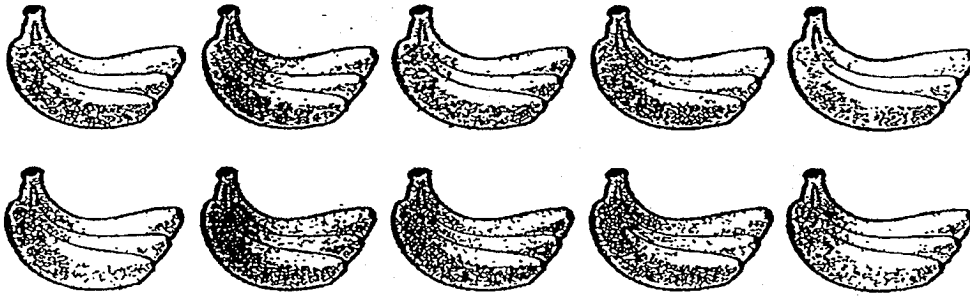
Sam has _____ more yellow jelly beans than red jelly beans.

18. John has 12 mugs.
He puts 3 mugs into 1 box.
How many boxes does he need?



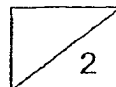
John needs _____ boxes.

19. There are 10 bunches of bananas.
Each bunch has 3 bananas.
How many bananas are there altogether?



Complete the multiplication equation to show the answer.


$$\square \times \square = \square$$



20. A ladybug has 6 legs.

There are 6 ladybugs.

How many legs do they have altogether?



Complete the multiplication equation to show the answer.

$$\square \times \square = \square$$

— The End —



Remember to check your work!

EXAM PAPER 2018 (P1)

SCHOOL : MAHA BODHI

SUBJECT : MATHEMATICS

TERM : Topical Review 3

Q1) 5

Q2) eel

Q3) seven

Q4) $4 \times 10 = 40$

Q5) $3 \times 9 = 27$

Q6) There are 4 equal groups of 5 coins

Q7) There are 2 lemons in each jar.

Q8) There are 4 pupils.

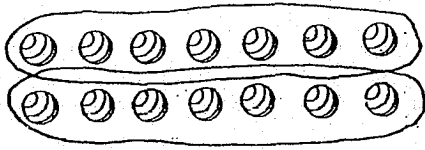
Q9) Each group has 3 cookies.

Q10) She needs to bake 5 more buns.


Q11) 6 groups of 2

Q12) 24

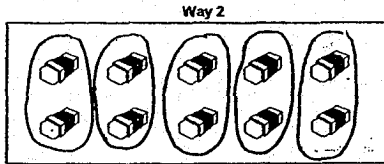
Q13)



Q14)



Q15)



Q16) There are as many cars as bears.

Q17) Sam has 3 more yellow jelly beans than red jelly beans.

Q18) John needs 4 boxes.

Q19) $3 \times 10 = 30$

Q20) $6 \times 6 = 36$