



RAFFLES GIRLS' PRIMARY SCHOOL
Primary One Mathematics 2018
Review Assessment 3-3
Multiplication & Division

Name: _____ () Pri 1 ()

Date: _____

Your score out of 14 marks	
Parent's Signature	

Section A: (2 x 1 mark)

Choose the correct answer and write its number in the brackets provided.

1. The picture shows _____.



(1) 3 fours


(3) $3 + 3 + 3$

(2) 4 groups of 3

(4) $4 + 4 + 4$

()

2. The eggs are put equally into 2 groups. How many eggs are there in each group?



(1) 14

(3) 9

(2) 12


(4) 7

()

Section B: (4 x 2 marks)

Work out these questions carefully and write the answers in the blanks provided.


3. Write a related multiplication equation for the pictures.



=

4. 18 cupcakes are shared equally among some girls.
Each girl receives 2 cupcakes.


a) Circle to show the number of girls.



b) How many girls are there?

There are _____ girls.



5. Write an addition and multiplication equation for the pictures.



$$\square \circ \square \circ \square = \square$$

$$\square \circ \square = \square$$

6. Lily wants to put 15 sweets equally into 5 bowls. However, she breaks 2 bowls.



- a) How many bowls are left?

There are _____ bowls left.

- b) Lily puts the sweets into the remaining bowls.
How many sweets does she put in each bowl?

She puts _____ sweets in each bowl.

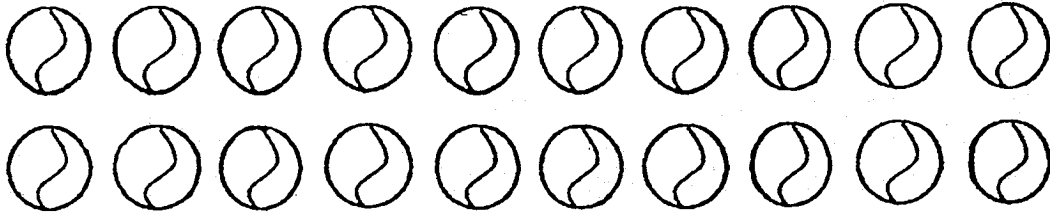
Section C: (2 x 2 marks)

Read the questions carefully. Show all number equations and working clearly in the spaces provided.

7. Mrs Eng bakes 4 cakes to sell.
She adds 7 flowers onto each cake.
How many flowers are there on the cakes altogether?
[Hint: You may draw pictures to help you]

There are _____ flowers altogether.

8. Ravi had 20 marbles. He lost 2 marbles.



a) How many marbles had he left?

He had _____ marbles left.

b) Using the marbles left, he then put the marbles into groups of 3.
How many groups were there?

There were _____ groups.

-----The End-----

EXAM PAPER 2018 (P1)

SCHOOL : RGS


SUBJECT : MATHEMATICS

TERM : Review Assessment 3-3

Q1	Q2
2	4

Q3) $2 \times 3 = 6$

Q4) a)



b) 9

Q5) $8 + 8 + 8 = 24$

$3 \times 8 = 24$

Q6) a) 3

b) 5

Q7) $4 \times 7 = 28$

Q8) a) 18

b) 6