



Maris Stella High School (Primary)
Mathematics Mini Test 5
Two-Step Word Problems: Addition & Subtraction,
Money
2014

Name: _____ () Marks: _____ /40

Class: Pr 2 () Date: _____

Duration: 45 mins Parent's signature: _____

Section A: 5 marks (5 x 1 mark)

Choose the correct answer and write 1, 2, 3, or 4 in the bracket provided.

1. ____ * 20¢ = \$1.20

(1) 6


(2) 2

(3) 12

(4) 24

()

2. Count the money below.



The total amount of money is ____* .

(1) \$3

(2) \$3.30

(3) \$3.40

(4) \$3.50

()

3. $1000\text{¢} = \$$ _____ *

(1) 1

(2) 10

(3) 100

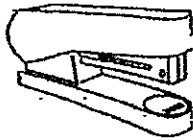
(4) 1000

()

4.



Pencil
\$1.40



Stapler
\$1.80



Scissor
\$1.30



Glue
\$1.90

Which item is the most expensive?

(1) pencil

(2) stapler

(3) scissor

(4) glue

()

5. Twenty dollars and fifty cents is the same as _____ *

(1) \$20.00

(2) \$20.05

(3) \$20.50

(4) \$2050

()

Section B: 20 marks (10 x 2 marks)

Write the correct answer in the blank provided.

6. Put a tick in the box that has the greater amount of money.


			
			
	<input type="checkbox"/>		<input type="checkbox"/>

7. Write the amount of money in dollars.

a) $80\phi = \$$ _____

b) $510\phi = \$$ _____

8. Colour 4 coins given in the box to make \$1.



9. Arrange the amount of money in order from the smallest amount.

\$40.05	\$14.05	\$4.50	\$44.00
---------	---------	--------	---------

_____ , _____ , _____ , _____
smallest

10. Elsa bought an eraser for 40¢ and a pencil for 60¢.
How much did she pay for the two items altogether?
(Give your answer in dollars.)

She paid \$ _____ altogether.

11. Mr Bala sold 43 chickens on Monday, 37 chickens on Tuesday and
54 chickens on Wednesday.
How many chickens did he sell in all?

He sold _____ chickens in all.

12. Jun Jie collected 289 stamps.

Ansheng collected 75 fewer stamps than Jun Jie.


How many stamps did they collect in all?

They collected _____ stamps in all.

13. Alice brought \$6 00 to school.

After recess, she was left with the amount of money shown below.

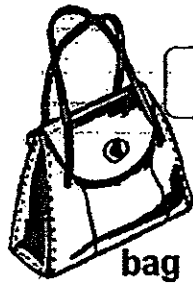
How much money did she spend during recess?



She spent \$ _____ during recess.


14. Sarah paid \$55 for 2 of the items shown below.

Which 2 items did she buy?




\$27

bag



\$36

dress



\$36

skirt



\$28

shoes

She bought the _____ and the _____.

15. Adam went to Chicken Zone Restaurant for lunch.

Chicken Zone Restaurant	
<u>Receipt</u>	
➤ Chicken Burger set	— \$6
➤ Ice-cream sundae	— \$5

The receipt showed what Adam had eaten.

Adam gave the cashier \$50.

How much change would he receive?

He would receive \$ _____ change.

Section C: 15 marks (5 x 3 marks)

Solve the following story sums. Show your workings, number sentences and final answers clearly.

Workings

16. Farmer Dan had 156 chicks.

Farmer Sam had 79 more chicks than Farmer Dan.

(a) How many chicks did Farmer Sam have?

Farmer Sam had _____ chicks.

(b) How many chicks did they have altogether?

They had _____ chicks altogether.

17. A notebook cost \$5.

A pencil case cost \$8 more than the notebook.

Jack bought a pencil case and a notebook.

How much did he spend altogether?

He spent \$ _____ altogether.

18. 248 children visited the River Safari.
There were 100 boys and the rest were girls.
How many more girls than boys were there?

There were _____ more girls than boys.

19. Sofia has 450 blocks.

Dora has 74 more blocks than Sofia.

Ariel has 158 fewer blocks than Dora.

How many blocks does Ariel have?

Ariel has _____ blocks.

20. Mrs Ng had some oranges at first.
She threw away 34 oranges that were rotten.
She bought another 25 oranges.
Then, she had 133 oranges.
How many oranges did she have at first?

She had _____ oranges at first.

Please check your work.

The End



YEAR: 2014

LEVEL: P2

SCHOOL: MARIS STELLA

SUBJECT: MATHEMATICS

SEMESTER: CA2

Mini test 5

Q1	Q2	Q3	Q4	Q5
1	4	2	4	3

6. tick the box on the left

7. a) \$0.80

b) \$5.10

8. Colour: \$0.20, \$0.20, \$0.50, \$0.10

9. \$4.50, \$14.05, \$40.05, \$44.00

10. 1.00

11. 134

12. 503

13. 4.00

14. bag & shoes

15. 39

16. a) $156+79=235$

b) $235+156=391$

17. $\$8+\$5=\$13$

$\$13+\$5=\$18$

18. $248-100=148$

$148-100=48$

19. $450+74=524$

$524-158=366$

20. $133-25=108$

$108+34=142$

Mini test 4

Q1	Q2	Q3	Q4
3	3	1	2

5. B, C, A

6. a) C

b) C, A

7. 180

8. a) kg

b) g

9. 500

10. a) $42+9=51$

b) $51+42=93$

11. $24\div 4= 6$