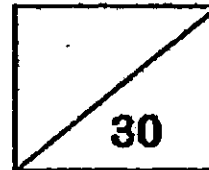




Rosyth School
Topical Test 1 2015
Mathematics
Primary 2

Name: _____



Class: Pr 2-_____ Register No.: _____

Duration: 40 mins

Date: 2 Mar 2015

Instructions to Pupils:

1. Do not open this booklet until you are told to do so.
2. Follow all instructions carefully.
3. This paper consists of 2 parts, Sections A and B.
4. ANSWER ALL THE QUESTIONS.
5. Check all answers carefully.

	Maximum	Marks Obtained
Section A	10	
Section B	20	
Total	30	

* This paper consists of 5 pages altogether (including cover page).

This paper is not to be reproduced in part or whole without the permission of the Principal.

SECTION A -(5x2)

There are 5 question in this section

Read the question carefully . Choose the correct answer.

Write its number 1,2,3 or 4 in thee brackets provided.

1) In 358, the digit 8 stand for

(1) 8 ones

(2) 8 tens

(3) 8 hundreds

(4) 80 ones

()

2) In 124, the smallest digit in the hundred place is

(1) 1

(2) 2

(3) 100

(4) 4

()

3) Which one of the following has the smallest value?

(1) 521

(2) 152

(3) 125

(4) 512

()

4) $46+232=$

(1) 214

(2) 278

(3) 296

(4) 692

()

5) $1000 - 590 =$

(1) 410

(2) 490

(3) 510

(4) 590

()

SECTION B – (10 x 2 marks)

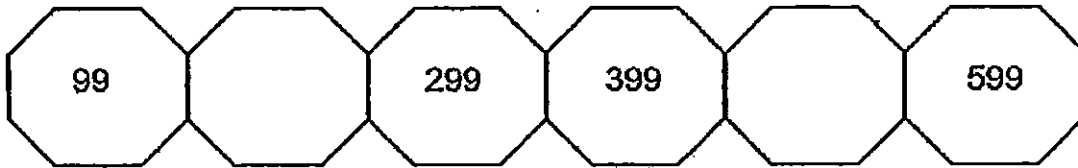
There are 10 question in this section.

Read the questions carefully. Write your answer in the space provided.

Please show ALL your working clearly.

6) Write seven hundred and eighteen in numerals.

7) Complete the number pattern.



8) Arrange these numbers in order beginning with the greatest.

676

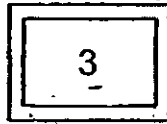
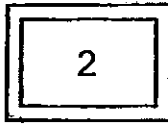

766

667

776

greatest

9)




Use the digits above to form the smallest 3-digit number.
(You may use each digit once only.)
Write your answer in the box



10) Solve this problem.

$$\begin{array}{r} 6 \ 5 \ 7 \\ + 3 \ 1 \ 4 \\ \hline \\ \hline \end{array}$$

11) Solve this problem.

$$\begin{array}{r} 2 \ 8 \ 4 \\ + 5 \ 4 \ 6 \\ \hline \\ \hline \end{array}$$

12)  + 126 = 376

 +  = _____

13) Circle the box that has the smallest value.

$480 + 41$

532

$540 - 21$

five hundred
and twelve

14) Two numbers below give a total of 1000.

636

274

324

726


The two numbers are and

15) Elsie sold a total of 280 cakes and cookies.
156 were cakes.
How many cookies did she sell?

Working

Elsie sold cookies.

— END OF PAPER —





EXAM PAPER 2015

SCHOOL : ROSYTH SCHOOL

SUBJECT : P2 MATHEMATICS

TERM : CA1

Q1	Q2	Q3	Q4	Q5
1	1	3	2	1

6) 718 7) 199, 499 8) 776, 766, 676, 667 9) 238

10) 971 11) 830

12) $276 - 126 = 250$

$$250 + 250 = \underline{500}$$

13) circle : five hundred and twelve

14) 726 and 274

15) $280 - 156 = \underline{124}$