



Holy Innocents' Primary School

Topical Test 3 – 2015

Primary Two

Mathematics

Duration: 50 minutes

Instructions:

1. Do not turn over this page until you are told to do so.
2. Follow all instructions carefully.
3. Answer all questions.



	Obtained	Max.
Section A		18
Section B		20
Section C		12
Total		50

Name: _____ ()

Date : 13 August 2015

Class : 2 Charity ()

Parent's Signature: _____

For each question, four options are given. One of them is the correct answer. Choose the correct answer and shade the correct oval in the Optical Answer Sheet (OAS).

1) Nineteen dollars and five cents is the same as _____.

(1) \$19.05 (3) \$90.05

(2) \$19.50 (4) \$90.50

2) $1 - \frac{7}{11} = \underline{\hspace{2cm}}$

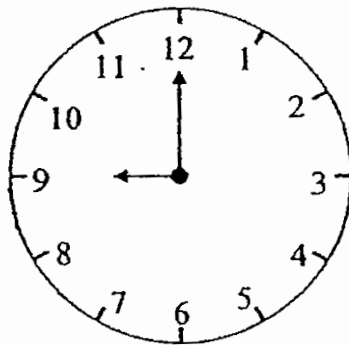
(1) $\frac{3}{11}$

(3) $\frac{6}{11}$

(2) $\frac{4}{11}$

(4) $\frac{8}{11}$

3) The time shown below is an hour slower than the actual time.
What is the actual time?



(1) 8 o'clock

(3) 10 o'clock

(2) 9 o'clock

(4) 11 o'clock

4) 6 fifty-cent coins have the same value as _____ ten-cent coins.

(1) 30

(3) 300

(2) 50

(4) 650

5) Which one of the following fractions is the smallest?

(1) $\frac{1}{4}$

(3) $\frac{1}{6}$

(2) $\frac{1}{5}$

(4) $\frac{1}{7}$

6. Annie left home an hour ago to go to the post office. If she reached at 12.30 p.m., at what time did she leave her home?

(1) 11.30 p.m.

(3) 1.30 p.m.

(2) 11.30 a.m.

(4) 1.30 a.m.

7) Arrange the fractions below from the greatest to the smallest:

$\frac{1}{9}$, $\frac{1}{3}$, $\frac{1}{5}$

(1) $\frac{1}{3}$, $\frac{1}{5}$, $\frac{1}{9}$

(3) $\frac{1}{9}$, $\frac{1}{3}$, $\frac{1}{5}$

(2) $\frac{1}{9}$, $\frac{1}{5}$, $\frac{1}{3}$

(4) $\frac{1}{5}$, $\frac{1}{3}$, $\frac{1}{9}$

--

8)

Uncle Sam cut a pizza into equal slices. He ate $\frac{3}{8}$ of it. His son and daughter ate $\frac{2}{8}$ of the pizza each. What fraction of the pizza was left?


(1) $\frac{1}{8}$

(3) $\frac{5}{8}$

(2) $\frac{3}{8}$

(4) $\frac{7}{8}$

9) Which fraction of the figure below is not shaded?



(1) $\frac{3}{12}$

(3) $\frac{5}{12}$

(2) $\frac{4}{12}$

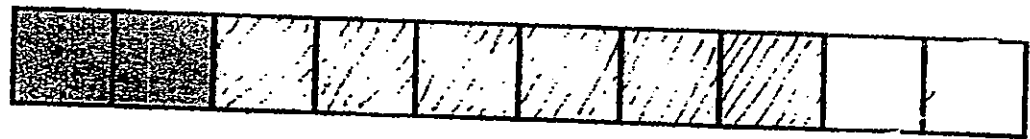
(4) $\frac{7}{12}$

- End of Section A -

(10 x 2 marks)
 For each question, write your answer in the **boxes** provided.
 Give your answers in the units stated.
 Show your workings clearly where appropriate.


10) $603\phi = \$$

11) Study the figure carefully. It is made up of identical squares.
 Shade the squares so that $\frac{8}{10}$ of the figure is shaded.



12) How many quarters make 3 wholes?

13) Study the picture below. What is the total amount of money shown?

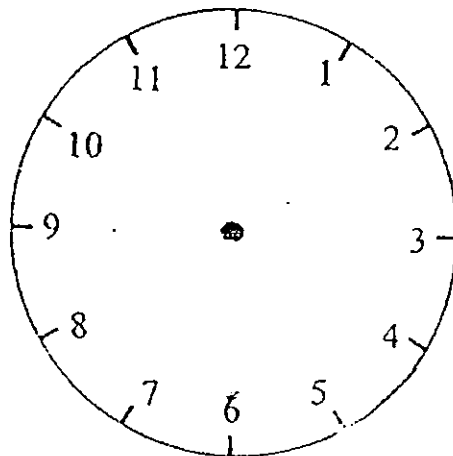


Score.

- 14) Ben saves \$1 every day. Shanti saves \$2 more than Ben.
How much does Shanti save in a week?

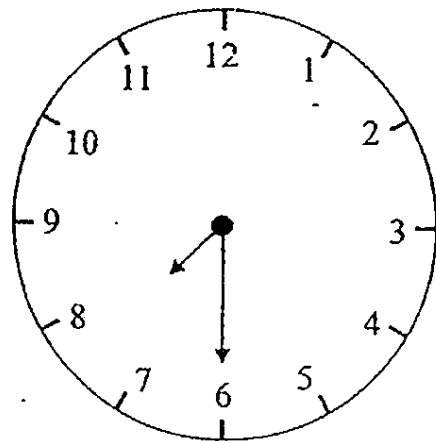
- 15) Ahmad left home for his tennis lesson at half past eleven in the morning.
30 minutes later, he arrived at the Sports Centre. At what time did Ahmad
arrive?

- 16) Kaili's tuition usually ends at 6.00 p.m. Today, it ended half an hour early.
At what time did Kaili's tuition end today? Draw the hour and minute
hands on the clock face below to show the time.



17) $\frac{3}{9} + \frac{\boxed{?}}{9} = 1$

18) Emily went for a jog before taking her breakfast at the time shown on the clock below. At what time did she go for her jog?



19) Devi's grandfather gave her \$40. He told her to share the money equally with four of her cousins. How much did each of them receive?

- End of Section B -

Score:

Solve the following problems. Show your working clearly in the given spaces.

- 20) Lily wanted to buy a present for her mother which cost \$135.
She needed \$50 more to buy it.
How much money did Lily have?

-
- 21) Max cut a mooncake into 12 equal pieces. He ate 2 pieces.
Brian ate 3 times as many pieces as Max.
What fraction of the mooncake was left?

22) A basketball is \$38 cheaper than a bag.

A pair of shoes costs \$67 more than the basketball.

If the pair of shoes costs \$102, how much does the bag cost?

- End of Paper -



EXAM PAPER 2015

LEVEL : PRIMARY 2

SCHOOL : HOLY INNOCENTS' PRIMARY SCHOOL

SUBJECT : MATHEMATICS

TERM : TOPICAL TEST 3

Q1	Q2	Q3	Q4	Q5	Q6	Q7	Q8	Q9
1	2	3	1	4	2	1	1	4

Q10. \$6.03

Q11. *Shade 5 more boxes*

Q12. 12

Q13. \$31.85

Q14. \$21 \rightarrow $\$1+\$2=\$3$, $7\times\$3=\21

Q15. 12 noon

Q16. SEE PICTURE

Q17. 6

Q18. 7.30 am

Q19. \$8 \rightarrow $\$40\div 5=\8

Q20. Lily had \$85. \rightarrow $\$135-\$50=\$85$

Q21. $\frac{4}{12}$ of the mooncake was left. $\rightarrow 3\times\frac{2}{12}=\frac{6}{12}$, $\frac{2}{12}+\frac{6}{12}=\frac{8}{12}$, $1-\frac{8}{12}=\frac{4}{12}$

Q22. The bag costs \$73. \rightarrow $\$102-\$67=\$35$, $\$35+\$38=\$73$

