

**METHODIST GIRLS' SCHOOL (PRIMARY)**

Founded in 1887

**END-OF-YEAR EXAMINATION 2020  
PRIMARY 4  
MATHEMATICS****BOOKLET A****Total Time**

Sections A to C: 1 hour 45 minutes

**INSTRUCTIONS TO CANDIDATES**

Do not turn over this page until you are told to do so.

Follow all instructions carefully.

Answer all questions.

Shade your answers in the Optical Answer Sheet (OAS) provided.

Name: \_\_\_\_\_ ( )

Class: Primary 4. \_\_\_\_\_

Date: 29 October 2020

This booklet consists of 8 printed pages including this page



**Section A: MCQ (36 marks)**

Questions 1 to 18 carry 2 marks each. For each question, four options are given. One of them is the correct answer. Make your choice (1, 2, 3 or 4).  
Shade the correct oval (1, 2, 3 or 4) on the Optical Answer Sheet.

1. The value of the digit 1 in 61 450 is \_\_\_\_\_.

- (1) 10
- (2) 100
- (3) 1000
- (4) 10 000

2. Which of the following numbers when rounded to the nearest ten becomes 75 900?

- (1) 75 844
- (2) 75 896
- (3) 75 906
- (4) 75 954

3. Which of the following decimals is the greatest?

- (1) 0.403
- (2) 0.496
- (3) 0.049
- (4) 0.154

4. How many one-fifths are there in 2 wholes?

- (1)  $\frac{2}{5}$
- (2)  $2\frac{1}{2}$
- (3) 5
- (4) 10

(Go on to the next page)

5. Express 0.08 as a fraction in its simplest form.

(1)  $\frac{1}{8}$

(2)  $\frac{1}{10}$

(3)  $\frac{2}{25}$

(4)  $\frac{4}{5}$

6. Round 63.57 to the nearest whole number.

(1) 60

(2) 63

(3) 64

(4) 65

7. 8 is a factor of \_\_\_\_\_.

(1) 18

(2) 28

(3) 38

(4) 48

8. Subtract 25.09 from 36.8.

(1) 10.9

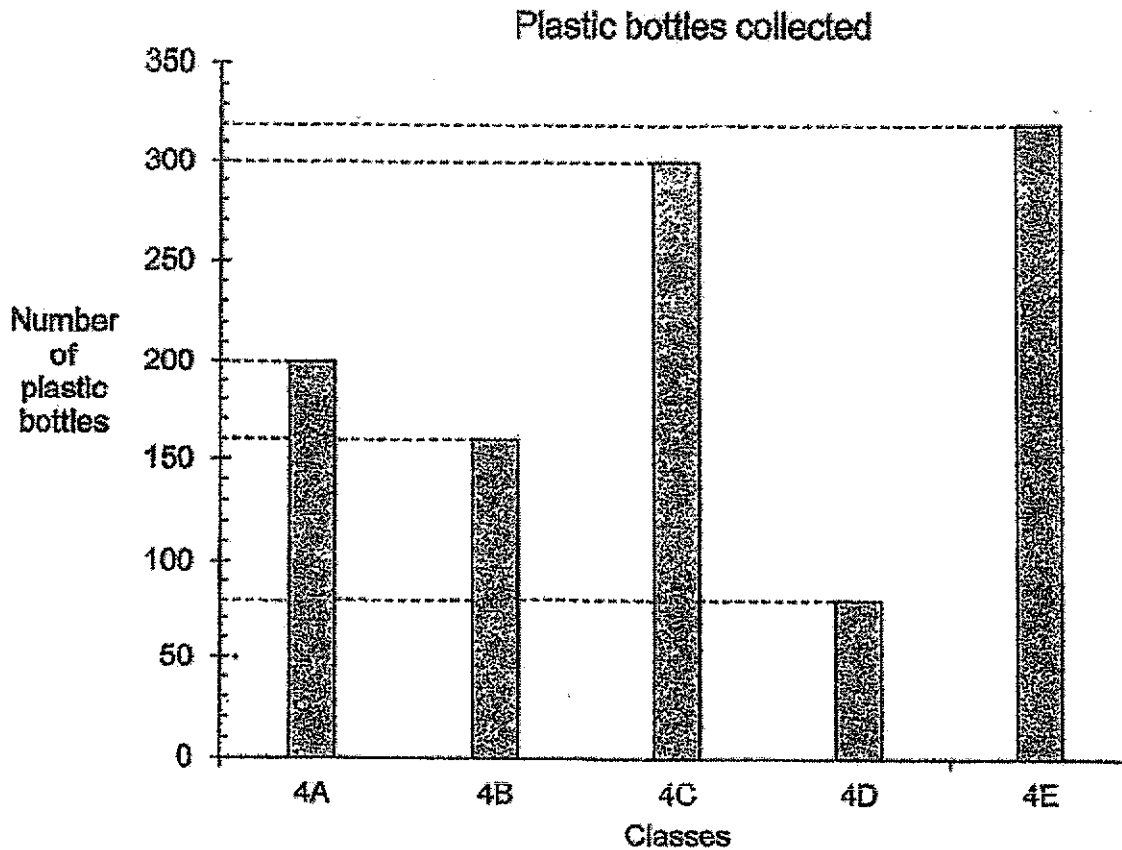
(2) 11.71

(3) 21.41

(4) 61.89

(Go on to the next page)

The graph shows the number of plastic bottles collected by 5 classes for a recycling project.



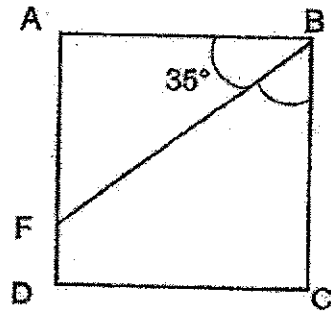
9. Which class collected twice as many plastic bottles as Class 4B?

- (1) Class 4A
- (2) Class 4C
- (3) Class 4D
- (4) Class 4E

(Go on to the next page)

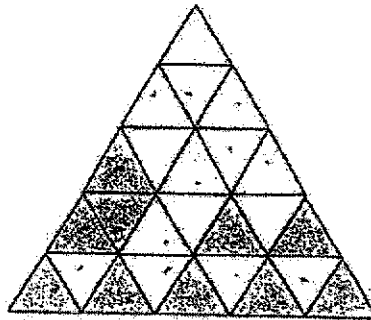
5

10. In the figure below, ABCD is a square.  
 $\angle ABF = 35^\circ$ . Find  $\angle FBC$ .



- (1)  $35^\circ$   
 (2)  $45^\circ$   
 (3)  $55^\circ$   
 (4)  $90^\circ$

11. The figure below is made up of identical triangles.



Sarah wants  $\frac{3}{5}$  of the figure to be shaded.

How many more triangles must she shade?

- (1) 1  
 (2) 5  
 (3) 8  
 (4) 10

(Go on to the next page)

12. The mass of a school bag is 3.92 kg when rounded to 2 decimal places. Which of the following could be the actual mass of the school bag?

- (1) 3.913 kg
- (2) 3.914 kg
- (3) 3.924 kg
- (4) 3.925 kg

13. Mrs Siva went to the shopping mall at 8.30 p.m.

She reached home 2 hours 35 minutes later.

What time did she reach home? Give your answer in 24-hour clock.

- (1) 23 05
- (2) 23 00
- (3) 17 55
- (4) 11 05

14. Ali has 2 pieces of wire.

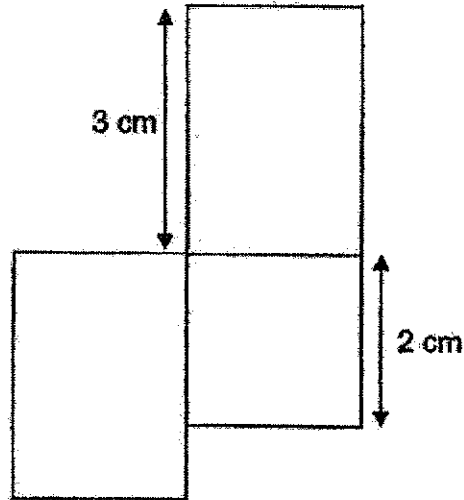
One piece is  $\frac{5}{6}$  m long and the other piece is  $\frac{2}{3}$  m shorter.

What is the total length of the two pieces of wire?

- (1) 1 m
- (2)  $\frac{1}{6}$  m
- (3)  $1\frac{1}{2}$  m
- (4) 6 m

(Go on to the next page)

15. The figure shown is made up of a square of side 2 cm and two identical rectangles of length 3 cm. What is the perimeter of the figure?



- (1) 19 cm  
(2) 20 cm  
(3) 24 cm  
(4) 28 cm
16. Mandy started watching a TV programme at 10 15. It lasted for 45 minutes. She decided to paint after that. She stopped painting at 13 15. How long did she spend on painting?
- (1) 3 h 00 min  
(2) 2 h 30 min  
(3) 2 h 15 min  
(4) 1 h 45 min


(Go on to the next page)



17. Daniel had twice as many stamps as John at first.  
After John lost 409 stamps, Daniel had 4 times as many stamps as John.  
How many stamps did Daniel have?

- (1) 818
- (2) 1 227
- (3) 1 636
- (4) 2 045

18. John took 20 minutes to walk to school from home.  
He left his house at the time shown on the clock below.  
The time on the clock was 10 minutes slower than the actual time.  
What was the **actual** time he reached school?



- (1) 07 05
- (2) 07 15
- (3) 07 25
- (4) 07 35

**End of Booklet A**

**METHODIST GIRLS' SCHOOL (PRIMARY)**  
 Founded in 1887



**END-OF-YEAR EXAMINATION 2020**  
**PRIMARY 4**  
**MATHEMATICS**

**BOOKLET B**

Total Time: 1 h 45 minutes

**INSTRUCTIONS TO CANDIDATES**

Do not turn over this page until you are told to do so.  
 Follow all instructions carefully.  
 Answer all questions.

Name: \_\_\_\_\_ (    )

Class: Primary 4. \_\_\_\_\_

Date: 29 October 2020

|                  |              |
|------------------|--------------|
| <b>Booklet A</b> | <b>/ 36</b>  |
| <b>Booklet B</b> | <b>/ 36</b>  |
| <b>Booklet C</b> | <b>/ 28</b>  |
| <b>TOTAL</b>     | <b>/ 100</b> |

Parent's Signature: \_\_\_\_\_

This booklet consists of 8 printed pages including this page.

**Section B: (36 marks)**

Questions 19 to 36 carry 2 marks each.

Write out the correct answers for the following questions in the space provided.  
Show your working clearly and give your answers in the units provided.

19. Write the missing number in the number pattern below.

41 369 , 41 169 , 40 969 , \_\_\_\_\_ , 40 569

Ans : \_\_\_\_\_

20. Some factors of 32 are 1, 2, 4 and 32. What are the other two factors of 32?

Ans : \_\_\_\_\_ and \_\_\_\_\_

21. What is the remainder when 6302 is divided by 7?

Ans : \_\_\_\_\_

22. Arrange the following fractions from the smallest to the greatest.

$$\frac{4}{7}, \frac{1}{2}, \frac{5}{7}$$

Ans : \_\_\_\_\_ , \_\_\_\_\_ , \_\_\_\_\_  
(smallest) (greatest)

(Go on to the next page)

3

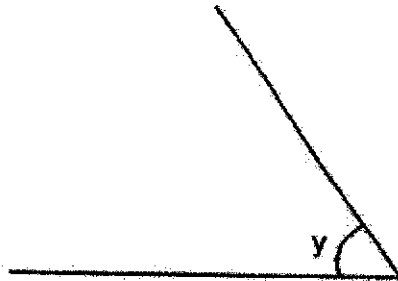
23.  $\frac{2}{5} - \frac{1}{10} =$  \_\_\_\_\_

Ans : \_\_\_\_\_

24.  $2.04 + 5 =$  \_\_\_\_\_

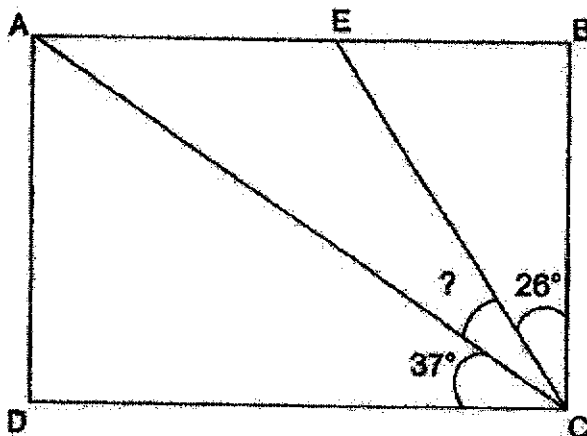
Ans : \_\_\_\_\_

25. Measure and write down the size of  $\angle y$ .



Ans : \_\_\_\_\_ °

26. In the figure shown, ABCD is a rectangle. Find  $\angle ACE$ .

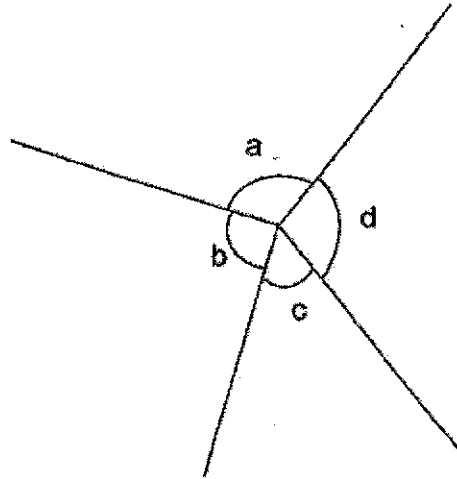


Ans : \_\_\_\_\_ °

(Go on to the next page)

4

27. In the figure below, name the smallest angle.



Ans :  $\angle$  \_\_\_\_\_

28.  $10.15 \times 7 =$  \_\_\_\_\_

Ans : \_\_\_\_\_

29. Use the digits below to form the smallest 5-digit even number.

2    7    1    0    9

Ans : \_\_\_\_\_

(Go on to the next page)

30. Xiaowen wants to pack 1346 sweets into bags.

Each bag can contain 6 sweets.

What is the least number of bags Xiaowen needs to pack all the sweets?

Ans : \_\_\_\_\_

31. Ben had a container filled with 5 l of water.

He poured  $\frac{1}{6}$  l into Bottle A and  $\frac{7}{12}$  l into Bottle B.

How much water was left in the container?

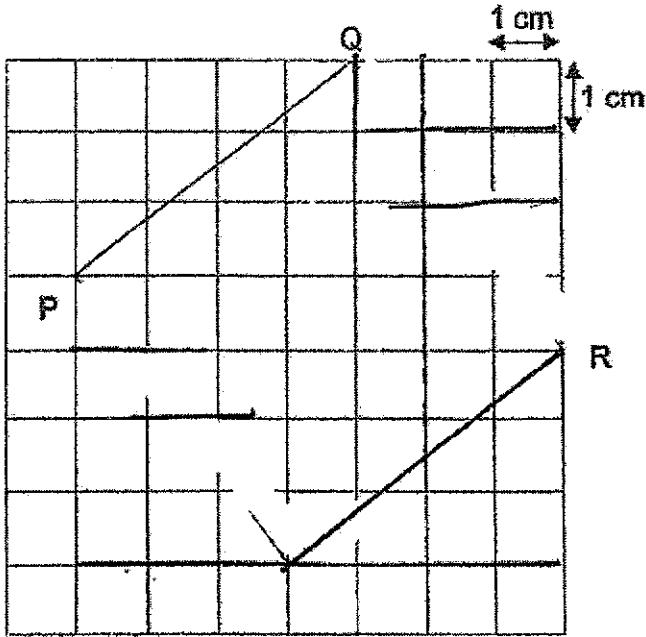
Ans : \_\_\_\_\_ l

(Go on to the next page)

32. In the square grid below, line PQ and line QR form two sides of a square.

(a) Complete the drawing of square PQRS in the square grid.

(b) Measure line PS.



Ans : (b) \_\_\_\_\_ cm

33. What is the value of A on the number line?



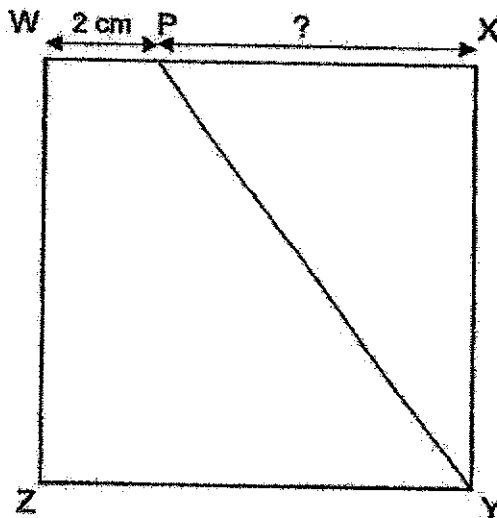
Ans : \_\_\_\_\_

(Go on to the next page)

34. Govin took 2 h 10 min to travel from home to his grandmother's house.  
He reached his grandmother's house at 1.30 p.m.  
What time did he leave home? Give your answer using the 24-hour clock.

Ans : \_\_\_\_\_

35. The figure shows a square  $WXYZ$  of area  $64 \text{ cm}^2$ .  
The length of  $WP$  is 2 cm.  
Find the length of  $PX$ .

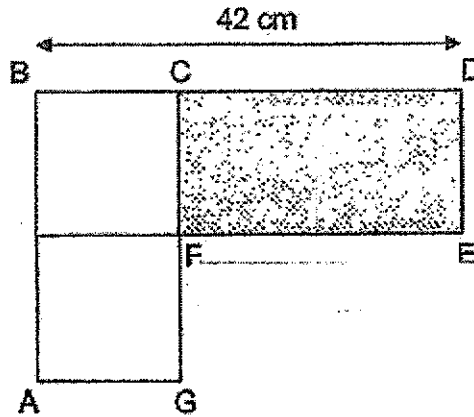


Ans : \_\_\_\_\_ cm

(Go on to the next page)



36. The figure below is made up of two identical squares and a rectangle.  
 The length of  $BD$  is 42 cm.  
 The length of  $AB$  is equal to the length of  $CD$ .  
 What is the area of the shaded rectangle  $CDEF$ ?



Ans : \_\_\_\_\_  $\text{cm}^2$

End of Booklet B

**METHODIST GIRLS' SCHOOL (PRIMARY)**

Founded in 1887

**END-OF-YEAR EXAMINATION 2020  
PRIMARY 4  
MATHEMATICS****BOOKLET C****Total Time**

Sections A to C: 1 hour 45 minutes

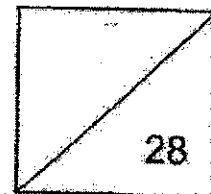
**INSTRUCTIONS TO CANDIDATES**

Do not turn over this page until you are told to do so.  
Follow all instructions carefully.  
Answer all questions.

Name: \_\_\_\_\_ (    )

Class: Primary 4. \_\_\_\_\_

Date: 29 October 2020



This booklet consists of 9 printed pages including this page.

**Section C: (28 marks)**


Show your working clearly in the space provided for each question and write your answers in the space provided.

The number of marks available is shown in brackets [ ] at the end of each question or part-question.

37. Huimin and her sister shared 4 m of cloth.  
She used  $\frac{1}{4}$  m of cloth while her sister used  $\frac{1}{5}$  m more cloth than her.  
How much cloth was left? Give your answer as a mixed number in the simplest form.

Do not write anything in this margin.

Ans : \_\_\_\_\_ [3]



(Go on to the next page)


38. Peter's Art teacher gave him 300 ice-cream sticks to paint. She wanted  $\frac{1}{6}$  of the ice-cream sticks to be painted yellow and the rest green.

- (a) How many ice-cream sticks must be painted yellow?  
(b) How many more ice-cream sticks would be painted green than yellow?

Do not write anything in this margin.

Ans: (a) \_\_\_\_\_ [1]

(b) \_\_\_\_\_ [2]




(Go on to the next page)

39. Mr Yan had \$500 at first.  
He gave Amanda three times as much money as Billy.  
He gave Billy twice as much money as Cassie.  
He was left with \$45.50 in the end.  
How much money did Cassie receive?

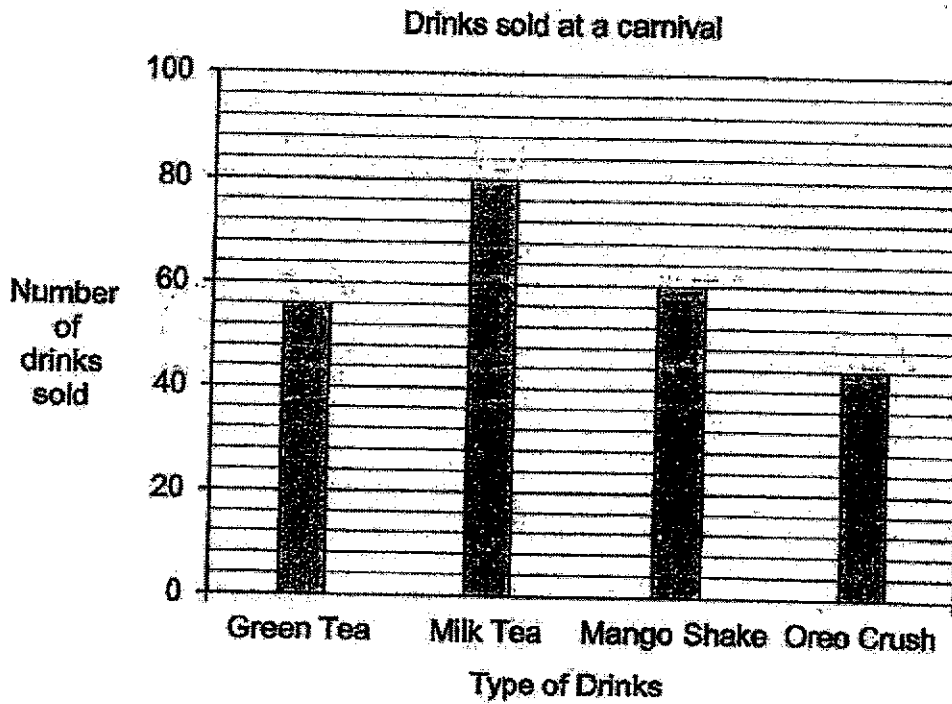
Do not write  
anything in this  
margin.

Ans : \_\_\_\_\_ [3]



(Go on to the next page)

40. The graph below shows the total number of drinks sold at a carnival on a particular day.



Do not write anything in this margin.

- (a) The difference in the number between 2 types of drinks sold was 24. Which 2 drinks were they?
- (b) What was the total number of drinks sold at the carnival?

Ans: (a) \_\_\_\_\_ and \_\_\_\_\_ [1]

(b) \_\_\_\_\_ [2]

(Go on to the next page)

41. A thermometer cost 3 times as much as a box of masks.  
Mr Teng paid \$400 to buy 2 similar boxes of masks and 2 similar thermometers.  
How much more did each thermometer cost than a box of masks?

Do not write  
anything in this  
margin.

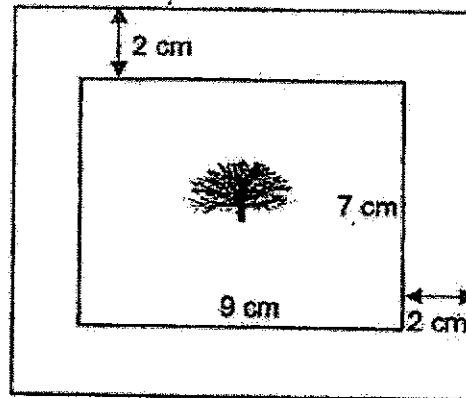
Ans : \_\_\_\_\_ [4]




(Go on to the next page)

42. A photograph measuring 9 cm by 7 cm is placed on a cardboard leaving a 2-cm border around it.  
Find the area of the cardboard not covered by the photograph.

Do not write  
anything in this  
margin.



Ans : \_\_\_\_\_ [4]



(Go on to the next page)



43. Gopal had 3 times as much money as Mariam.  
After Gopal used his money to buy 5 pencils at \$1.20 each, he had \$0.60 left. How much money did Mariam have?

Do not write  
anything in this  
margin.

Ans : \_\_\_\_\_ [4]




(Go on to the next page)

44. The total mass of a box and 10 identical packets of sugar is 4500 g.  
The total mass of the same box and 3 identical packets of sugar is 2050 g. What is the mass of the empty box?

Do not write anything in this margin.

Ans : \_\_\_\_\_ [4]



**End of Booklet C**

**SCHOOL :** METHODIST GIRLS' SCHOOL  
**LEVEL :** PRIMARY 4  
**SUBJECT :** MATH  
**TERM :** 2020 SA2

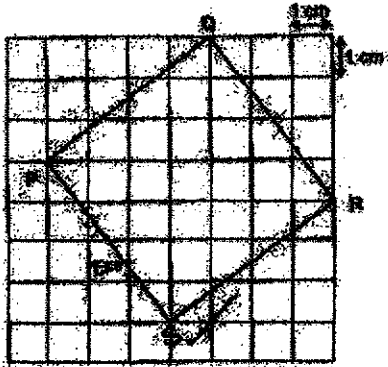
**BOOKLET A**

|    |    |    |    |    |    |    |    |    |     |
|----|----|----|----|----|----|----|----|----|-----|
| Q1 | Q2 | Q3 | Q4 | Q5 | Q6 | Q7 | Q8 | Q9 | Q10 |
| 3  | 2  | 2  | 4  | 3  | 3  | 4  | 2  | 4  | 3   |

|     |     |     |     |     |     |     |     |
|-----|-----|-----|-----|-----|-----|-----|-----|
| Q11 | Q12 | Q13 | Q14 | Q15 | Q16 | Q17 | Q18 |
| 2   | 3   | 1   | 1   | 2   | 3   | 3   | 3   |

**BOOKLET B**

|      |   |
|------|---|
| Q19) | 40769                                   |
| Q20) | 16 and 8                                |
| Q21) | 2                                       |
| Q22) | $\frac{1}{2}, \frac{4}{7}, \frac{5}{7}$ |
| Q23) | $\frac{3}{10}$                          |
| Q24) | 7.04                                    |
| Q25) | 55°                                     |
| Q26) | 27°                                     |
| Q27) | <i>c</i>                                |
| Q28) | 71.05                                   |
| Q29) | 10792                                   |
| Q30) | 225                                     |

|      |   |
|------|---|
| Q31) | $4\frac{1}{4}l$   |
| Q32) | <p>(a)</p>  <p>(b) 5cm</p>   |
| Q33) | 20.7  |
| Q34) | 1120  |
| Q35) | 6cm   |
| Q36) | $392cm^2$   |
| Q37) | $\frac{1}{4} + \frac{1}{5} = \frac{9}{20}$ $\frac{9}{20} + \frac{5}{20} = \frac{14}{20}$ $4 - \frac{14}{20} = 3\frac{3}{10}$ <p><math>3\frac{3}{10}m</math> of cloth was left</p> |

|      |   |
|------|---|
| Q38) | $1 - \frac{1}{6} = \frac{5}{6}$ $300 \div 6 = 50$ $50 \times 5 = 250$ $250 - 50 = 200$ <p>(a) 50 ice cream stickers must be painted yellow</p> <p>(b) 200 more ice cream sticks would be painted green than yellow.</p> |
| Q39) | $500 - 45.50 = 454.50$ $454.50 \div 9 = 50.50$ <p>Cassie received \$50.50</p>   |
| Q40) | $80 - 56 = 24$ $56 + 80 + 60 + 44 = 240$ <p>(a) The 2 drinks were milk tea and green tea.</p> <p>(b) The total number of drinks sold at the carnival is 240.</p>  |
| Q41) | $400 \div 8 = 50$ $50 \times 2 = 100$ <p>Each thermometer cost \$100 more than a box of mask.</p>   |
| Q42) | $7 + 2 + 2 = 11$ $9 + 2 + 2 = 13$ $11 \times 13 = 143$ $7 \times 9 = 63$ $143 - 63 = 80$ <p>The area of the cardboard not covered by the photograph is 80cm<sup>2</sup></p>   |
| Q43) | $1.20 \times 5 = 6$   |

|             |   |
|-------------|---|
|             | $6 + 0.60 = 6.60$<br>$6.60 \div 3 = 2.20$<br><b>Maria have \$2.20</b>                         |
| <b>Q44)</b> | $4500 - 2050 = 2450$<br>$2400 \div 7 = 350$<br>$3.50 \times 3 = 1050$<br>$2050 - 1050 = 1000$ |