

Name : \_\_\_\_\_ (     )

Class : Primary 4 SY / C / G / SE / P

Mathematics Teachers : AT / JY / ME / KC / DT



**SINGAPORE CHINESE GIRLS' SCHOOL  
END-OF-YEAR EXAMINATION**

**PRIMARY 4**

23 Oct 2023

**MATHEMATICS  
(BOOKLET A)**

Additional materials:  
Optical Answer Sheet (OAS)

**Total Time for Booklets A and B: 1 hour 45 minutes**

---

**INSTRUCTIONS TO CANDIDATES**

1. Do not turn over this page until you are told to do so.
2. Follow all instructions carefully.
3. Answer all questions.
4. Use a 2B pencil to shade your answers on the Optical Answer Sheet (OAS).
5. The use of calculators in **NOT** allowed.

---

This booklet consists of 6 printed pages.



Questions 1 to 15 carry 2 marks each. For each question, four options are given.

One of them is the correct answer. Make your choice (1, 2, 3 or 4) on the Optical Answer Sheet.

(30 marks)

1. The value of the digit 9 in 69 216 is \_\_\_\_\_.

- (1) 90
- (2) 900
- (3) 9000
- (4) 90 000

2.  $70\ 000 + 1000 + 900 + 5 =$  \_\_\_\_\_.

- (1) 71 950
- (2) 71 905
- (3) 71 095
- (4) 70 195

3. Which of the following is a multiple of 5 and 6?

- (1) 11
- (2) 24
- (3) 25
- (4) 30

4. Round 31.76 to the nearest whole number.

- (1) 30
- (2) 31
- (3) 32
- (4) 35

5. Which of the following figures has perpendicular lines?

(1) M

(2) V

(3) N

(4) H

6. Kaye prepared 48 fruit baskets for a party. There were 21 fruits in each basket. How many fruits were there altogether?

(1) 69

(2) 144

(3) 908

(4) 1008

7. Write  $5\frac{7}{20}$  as a decimal.


(1) 5.35

(2) 5.035

(3) 5.7

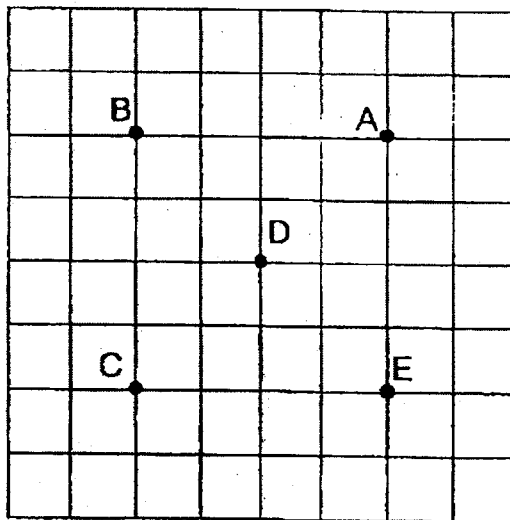
(4) 5.72

8. What fraction represents the shaded parts below.



- (1)  $\frac{13}{8}$
- (2)  $\frac{15}{8}$
- (3)  $\frac{19}{8}$
- (4)  $\frac{21}{8}$

9. The figure shows the position of five towns on a grid map. Which town is north-east of town D?



- (1) A
- (2) B
- (3) C
- (4) E

10. Hayley's dance lesson is 2 h 30 min long. It started at 11 45.


What time did it end?

- (1) 02 15
- (2) 09 15
- (3) 13 45
- (4) 14 15

11. In a class, 12 pupils take the bus to school. The remaining 28 pupils walk to school. What fraction of the pupils in class walk to school?

- (1)  $\frac{3}{10}$
- (2)  $\frac{7}{10}$
- (3)  $\frac{3}{7}$
- (4)  $\frac{7}{3}$

12. Chloe jogs 840 m round the rectangular field once. The breadth of the field is 150 m. What is the length of the field?

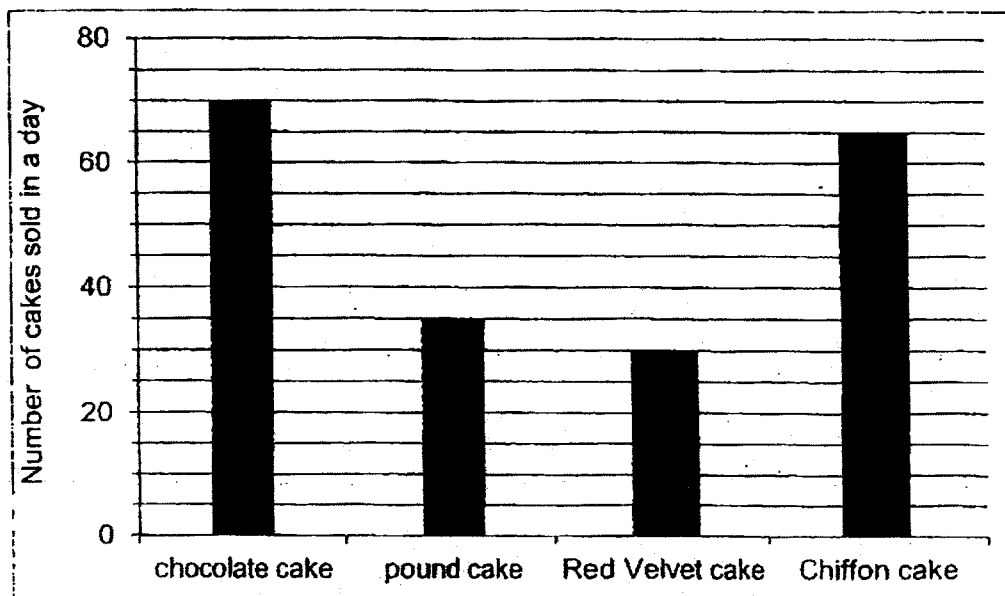


- (1) 270 m
- (2) 300 m
- (3) 540 m
- (4) 690 m

13. Lana is 43.5 kg. Her brother is 5.6 kg lighter than her. What is their total mass?

- (1) 37.9 kg
- (2) 49.1 kg
- (3) 81.4 kg
- (4) 92.6 kg

The bar graph below shows the number of types of cake sold on a certain day. Study the graph below carefully and answer Question 14 and Question 15.



14. How many more chocolate cakes were sold more than pound cakes?

- (1) 20
- (2) 25
- (3) 30
- (4) 35

15. If 1 chiffon cake costs \$12, how much was collected from the sale of chiffon cakes on that day?

- (1) \$744
- (2) \$780
- (3) \$840
- (4) \$900





Name : \_\_\_\_\_ ( )

Class : Primary 4 SY / C / G / SE / P

Mathematics Teachers : AT / JY / ME / KC / DT



**SINGAPORE CHINESE GIRLS' SCHOOL  
END-OF-YEAR EXAMINATION**

**PRIMARY 4**

23 Oct 2023

**MATHEMATICS  
(BOOKLET B)**

**Total Time for Booklets A and B: 1 hour 45**

**minutes**

**INSTRUCTIONS TO CANDIDATES**

1. Do not turn over this page until you are told to do so.
2. Follow all instructions carefully.
3. Answer all questions.
4. Use a dark blue pen to write your answers in the space provided for each question. Do not use correction fluid/tape or highlighters.

		Max Mark	Marks attained	Parent's Signature
Booklet A	Section A	30		
Booklet B	Section B	40		
	Section C	30		
Total Marks		100		

This booklet consists of 16 printed pages.



**Section B: (40 marks)**

**Questions 16 to 35 carry 2 marks each. Show your working clearly and write your answers in the spaces provided. For questions which require units, give your answers in the units stated.**

Do not write  
in this column

16. Write eleven thousand and thirty-five in figures.

Ans: \_\_\_\_\_

---

17. Some factors of 18 are 1, 2, 3 and 18. What are the other two factors of 18?

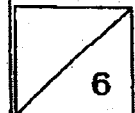
Ans: \_\_\_\_\_ and \_\_\_\_\_

---

18. What is the remainder when 4279 is divided by 4?

Ans: \_\_\_\_\_

---



19. Arrange the following numbers from smallest to the greatest.

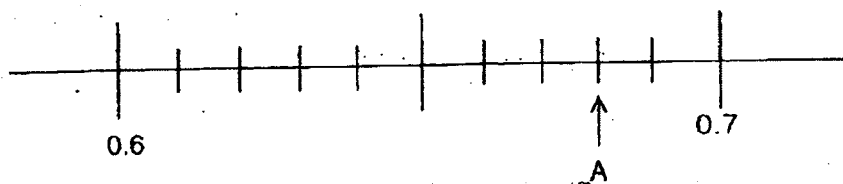
Do not write  
in this column

$$\frac{2}{5}, 0.408, 0.048$$

\_\_\_\_\_

(smallest) (greatest)

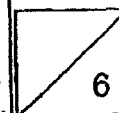
20. Write the decimal represented by A.



Ans: \_\_\_\_\_


21.  $9.3 - 0.77 =$  \_\_\_\_\_

Ans: \_\_\_\_\_



Do not write  
in this column

22. What fraction of the stars are grey in colour?



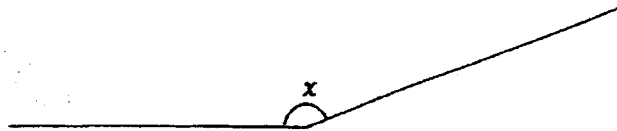
Ans: \_\_\_\_\_

23. What is the value of  $\frac{3}{10} + \frac{4}{5}$ ?

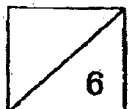
Express your answer as a mixed number.

Ans: \_\_\_\_\_

24. Measure and write down the size of  $\angle x$ .

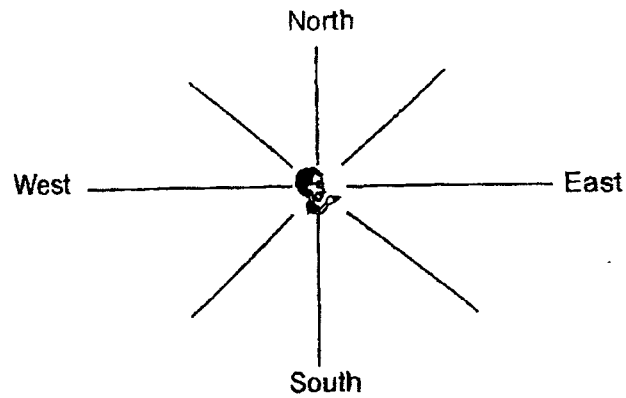


Ans: \_\_\_\_\_°



Do not write  
in this column

25. Tom is facing east at first. If he turns  $135^\circ$  in an anti-clockwise direction. Which direction will he face?



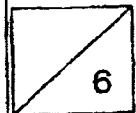
Ans: \_\_\_\_\_

- 26.— A piece of ribbon is 14 m long. Jane used  $\frac{3}{7}$  of it.  
What was the length of the ribbon left?

Ans: \_\_\_\_\_ m

27. Sera was in school from 07 30 to 14 00.  
How long was she in school?

Ans \_\_\_\_\_ h \_\_\_\_\_ min



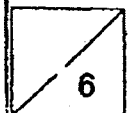
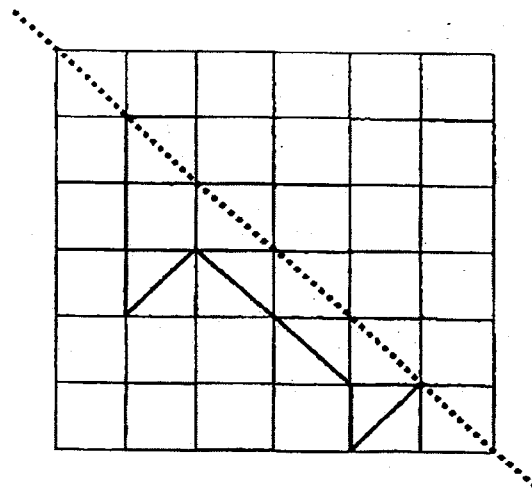
28. Mrs Tan watched a movie which ended at 01 15. The movie lasted for 2h 30 min. What time did the movie start?  
Express your answer in 24h-clock.

Ans \_\_\_\_\_

29. The area of a square is  $36 \text{ cm}^2$ .  
Find the perimeter.

Ans: \_\_\_\_\_ cm

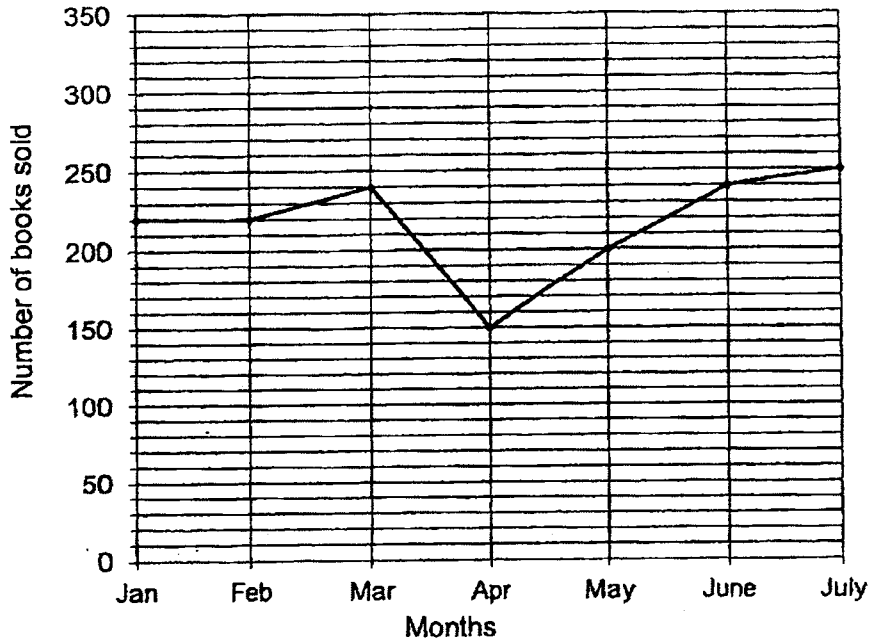
30. Complete the diagram below to form a symmetric figure.  
The dotted line is the line of symmetry. Draw the other half.



Do not write  
in this column

For questions 31, 32 and 33, refer to the line graph below:

The following line graph shows the number of books sold in a bookshop at the end of each month.



31. In which two months were the number of books sold the same?

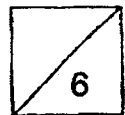
Ans: \_\_\_\_\_ and \_\_\_\_\_

32. What was the difference between the highest and lowest number of books sold?

Ans: \_\_\_\_\_

33. In which month was the increase in the number of books sold the greatest as compared to the previous month?

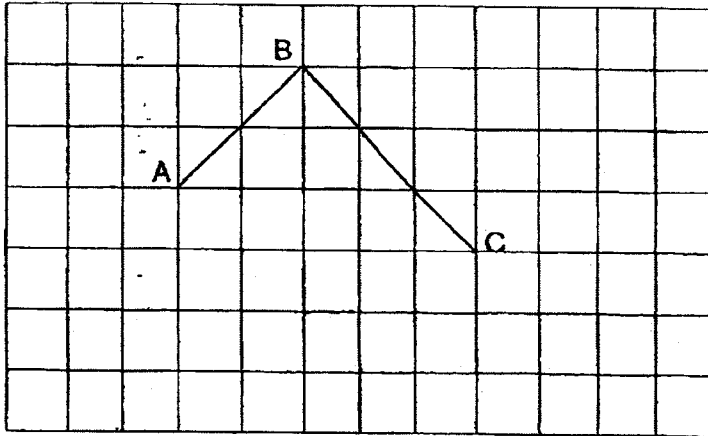
Ans: \_\_\_\_\_





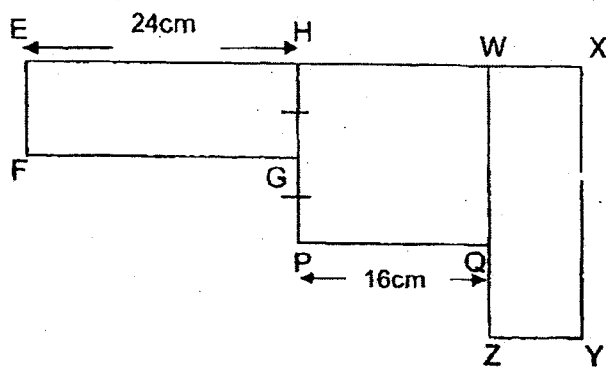
34. Lines AB and BC form part of a rectangle as shown.  
Draw two parallel lines to complete the rectangle.

Do not write  
in this column



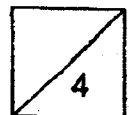
35. 2 identical rectangles and 1 square are used to form the figure below.

EF is  $\frac{1}{2}$  of HP. Find the perimeter of the figure given that EH is 24 cm and PQ is 16 cm.



Ans: \_\_\_\_\_ cm

End of Section B



**Section C: (30 marks)**

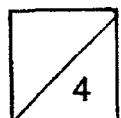
For questions 36 to 43, show your working clearly and write your answer in the spaces provided. The number of marks available is shown in the brackets [ ] at the end of each question or part-question.

Do not write  
in this column

36. During a travel fair, 958 people attended it on the first day.  
On the second day, there were 3 times as many people as on the first day.
- (a) How many people attended the travel fair on the second day?
- (b) What is the total number of people who attended the fair for the two days?

Ans: (a) \_\_\_\_\_ [ 2 ]

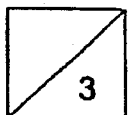
Ans: (b) \_\_\_\_\_ [ 2 ]



37. Ms Chai bought 3 blouses and 4 skirts for \$465.  
Each skirt costs \$20 more than a blouse.  
What is the cost of 1 blouse?

Do not write  
in this column

Ans: \_\_\_\_\_ [3]



38. The table below shows the mass of meat sold by a butcher in a day.

Meat	Mass of meat sold (kg)
Beef	55.5
Mutton	?
Chicken	?
Total	246

Do not write  
in this column

- a) If the butcher sold twice as much chicken as mutton, what is the mass of the chicken sold?
- b) If the cost of 1 kilogram of chicken is \$9, what was the total amount collected from the sale of the chicken?

Ans: (a) \_\_\_\_\_ [ 2 ]

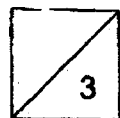
Ans: (b) \_\_\_\_\_ [ 2 ]



39. Olivia used  $\frac{2}{3}$  kg of sugar. Shannon used  $\frac{1}{6}$  kg of sugar more than Olivia.  
Adele used  $\frac{1}{3}$  kg less sugar than Shannon. What was the amount of sugar used by Adele? Express your answer in its simplest form.


Do not write  
in this column

Ans: \_\_\_\_\_ [3]

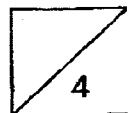


40. Eliza places each group of 3 balloons 4 m apart along the corridor. The corridor is 32 m long. How many balloons does Eliza need in all to decorate the corridor?

Do not write  
in this column



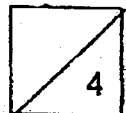
Ans: \_\_\_\_\_ [ 4 ]



41. There are red, blue and yellow balls.  $\frac{1}{12}$  of the balls are red.  $\frac{1}{2}$  of the balls are blue and the rest of the balls are yellow.  
There are 680 more yellow balls than red balls.  
How many balls are there altogether?

Do not write  
in this colour


Ans: \_\_\_\_\_ [4]



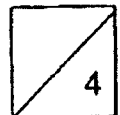
42. A swimming pool measures 50 m by 25 m.

Find the area of the pavement around the swimming pool as shown by the shaded part.

Do not write  
in this column



Ans: \_\_\_\_\_ [ 4 ]

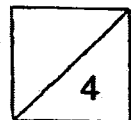




43. Sonya had 7 kg of cherries more than Tara. When Sonya gave away 1.5 kg of cherries and Tara gave away 0.5 kg of cherries, Sonya still had 4 times as much as Tara. How many kilograms of cherries did Tara have at first?

Do not write  
in this column

Ans: \_\_\_\_\_ [ 4 ]



End of Booklet B



SCHOOL : SINGAPORE CHINESE GIRLS' SCHOOL  
 LEVEL : PRIMARY 4  
 SUBJECT : MATHEMATICS  
 TERM : 2023 SA2

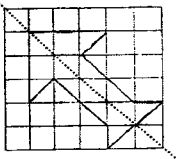
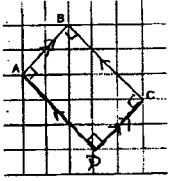
CONTACT :

**BOOKLET A**

Q1	3	Q2	2	Q3	4	Q4	3	Q5	4
Q6	4	Q7	1	Q8	4	Q9	1	Q10	4
Q11	2	Q12	1	Q13	3	Q14	4	Q15	2

**BOOKLET B**

Q16	11035
Q17	9 and 6
Q18	3
Q19	$0.048, \frac{2}{5}, 0.408$
Q20	0.68
Q21	8.53
Q22	$\frac{5}{12}$
Q23	$\frac{3}{10} + \frac{4}{5} = \frac{3}{10} + \frac{8}{10} = \frac{11}{10} = 1\frac{1}{10}$
Q24	$160^\circ$
Q25	North-West
Q26	$7u \rightarrow 14$ $1u \rightarrow 14 \div 7 = 2$ $4u \rightarrow 2 \times 4 = 8$ (Ans : 8m)
Q27	6h 30 min
Q28	22 45
Q29	$6 \times 6 = 36$ $6 \times 4 = 24$ (Ans: 24 cm)

Q30	
Q31	Jan to Feb
Q32	$250 - 150 = 100$
Q33	May
Q34	
Q35	$24+32+16+16+24+16+8=144$ (Ans: 144 am)
Q36	(a) $1u \rightarrow 958$ $3u \rightarrow 958 \times 3 = 2874$ (Ans) (b) Total Amount $\rightarrow 2874 + 958 = 3832$ (Ans)
Q37	$4 \text{ skirts} + 3 \text{ blouses} \rightarrow \$465 - \$20 \times 4 = \$385$ $\$385 \div 7 = \$55$ (Ans)
Q38	Beef $\rightarrow 55.5$ $3u \rightarrow 246 - 55.5 = 190.5$ $1u \rightarrow 190.5 \div 3 = 63.5$ (a) $2u \rightarrow 63.5 \times 2 = 127.0$ (Ans: 127.0 kg) (b) $127.0 \times 9 = 1143.00$ (Ans: \$1143.00)
Q39	Oliva $\rightarrow \frac{4}{6}$ Shannon $\rightarrow \frac{4}{6} + \frac{1}{6} = \frac{5}{6}$ Adele $\rightarrow \frac{5}{6} - \frac{2}{6} = \frac{3}{6} = \frac{1}{2}$ (Ans: $\frac{1}{2}$ kg)
Q40	$32 \div 4 = 8$ $8 + 1 = 9$ $9 \times 3 = 27$

Q41	$4u \rightarrow 680$ $12u \rightarrow 680 \times 3 = 2040$
Q42	Length of pavement $\rightarrow 50+4+4=58$ Breath of pavement $\rightarrow 25+6+6=37$ Area of big square $\rightarrow 58 \times 37 = 2146$ Area of small square $\rightarrow 50 \times 25 = 1250$ Area of pavement $\rightarrow 2146 - 1250 = 896$ (Ans: 896 m <sup>2</sup> )
Q43	$7u \rightarrow 1.5$ $3u \rightarrow 5.5 + 0.5 = 6$ $1u \rightarrow 6 \div 3 = 2$ Tara $\rightarrow 2 + 0.5 = 2.5$ (Ans: 2.5 kg)

