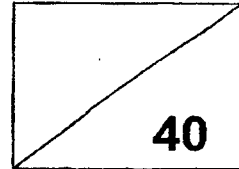


**Red Swastika School  
Primary 4  
Class Test 1  
Mathematics**



Name: \_\_\_\_\_ ( )

Date: 3 May 2023

Class: Pr 4 / \_\_\_\_\_

Duration: 50 minutes

Parent's Signature: \_\_\_\_\_

Questions 1 to 10 carry 2 marks each. For each question, four options are given. One of them is the correct answer. Make your choice (1, 2, 3 or 4) and write its number in the brackets provided. (20 marks)

1 In 12 453, the digit 4 is in the \_\_\_\_\_ place.

(1) ones

(2) tens

(3) hundreds

(4) thousands

( )

2 In which of the following are the numbers arranged from the greatest to the smallest?

(greatest)

(smallest)

(1) 9068 , 9680 , 9608

(2) 9680 , 9608 , 9068

(3) 9068 , 9608 , 9680

(4) 9680 , 9068 , 9608

( )

3 Which of the following is a multiple of 9?

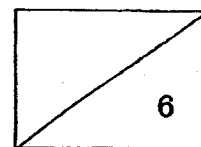
(1) 19

(2) 39

(3) 3

(4) 81

( )

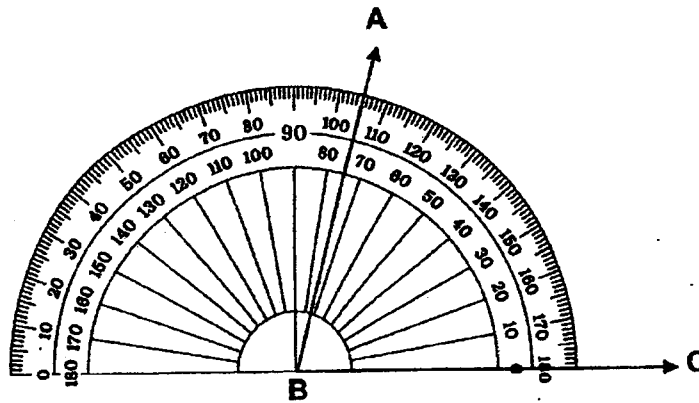


4 Linda had 112 bags.  
She packed 45 markers in each bag.  
How many markers were there altogether?

- (1) 1008
- (2) 4930
- (3) 5040
- (4) 5480

( )

5 Look at the diagram below.  
What is the size of  $\angle ABC$ ?



- (1)  $75^\circ$
- (2)  $85^\circ$
- (3)  $105^\circ$
- (4)  $115^\circ$

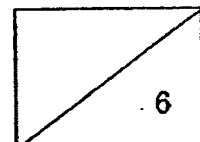
( )

6 Judy baked 10 chocolate and 15 peanut cookies.  
She packed all the cookies into equal number of boxes.  
How many chocolate and peanut cookies were there in each box?

	<u>Chocolate</u>	<u>Peanut</u>
(1)	2	3
(2)	2	5
(3)	5	3
(4)	5	5

- (1) 2 3
- (2) 2 5
- (3) 5 3
- (4) 5 5

( )



- 7 Siti bought 369 oranges.  
She packed the oranges equally into bags of 4.  
What is the least number of bags of oranges she should buy?

- (1) 90  
(2) 91  
(3) 92  
(4) 93

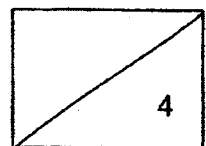
( )

- 8 A table with 5 columns is filled with numbers in a certain pattern.  
The first 3 rows of the table are shown.  
In which column will the number 23 appear in?

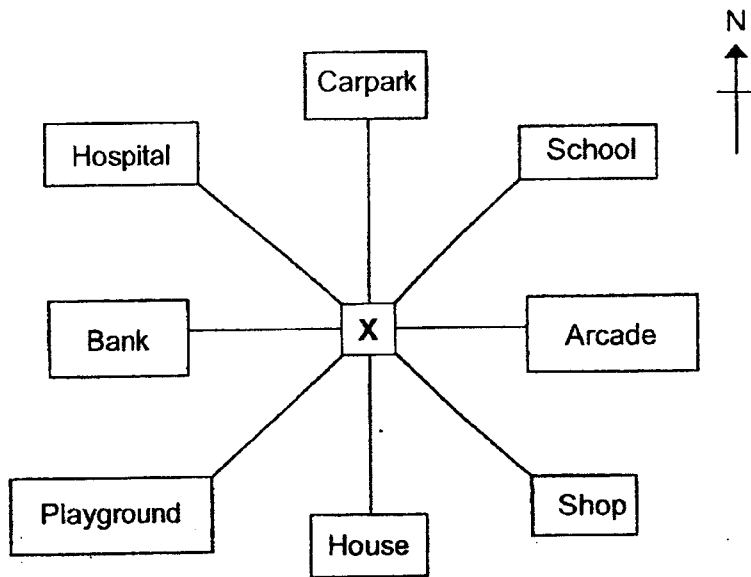
	Column A	Column B	Column C	Column D	Column E
Row 1	1	2	3	4	5
Row 2	6	7	8	9	10
Row 3	11	12	13	14	15
Row 4	⋮	⋮	⋮	⋮	⋮
Row 5	⋮	⋮	⋮	⋮	⋮

- (1) A  
(2) B  
(3) C  
(4) D

( )

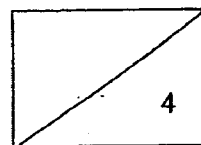


- 9 After making a  $\frac{3}{4}$ -turn in an anti-clockwise direction, Andy is standing at point X and facing the playground. Where was he facing at first?



- (1) Arcade  
(2) Shop  
(3) Carpark  
(4) Hospital ( )
- 10 Peter folded 1000 paper cranes.  
He folded 4 times as many cranes as Alicia.  
How many paper cranes must Peter give to Alicia so that they each have the same number of cranes?

- (1) 375  
(2) 400  
(3) 500  
(4) 1500



Questions 11 to 16 carry 2 marks each. Write your answers in the spaces provided. For questions which require units, give your answers in the units stated. (12 marks)

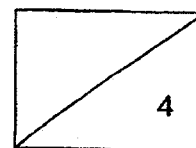

---

11 What number is 10 more than 7996?

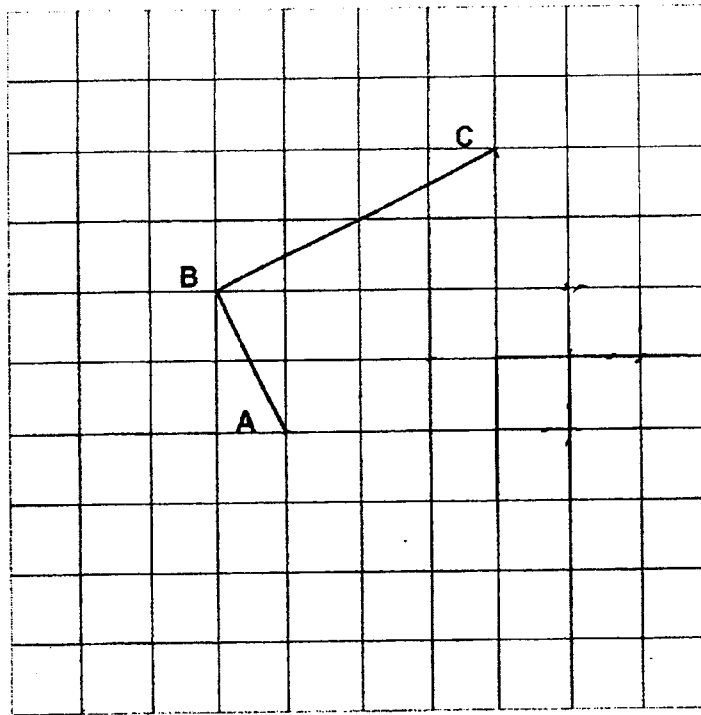
Ans: \_\_\_\_\_

---

12 Choose the correct point to complete the drawing of  $\angle XYZ = 130^\circ$ .  
Mark the angle and label point Z.

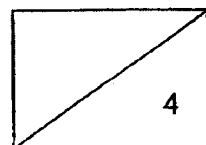


- 13 Complete rectangle ABCD by drawing 2 more lines on the grid.



- 14 A number when rounded off to the nearest hundred is 3500.  
What is the greatest possible number?

Ans: \_\_\_\_\_



- 15 Jane decorated a room with red and green lights.  
The red light blinks every 3 minutes and the green light blinks every 4 minutes.  
Both lights are switched on at the same time.  
When will both lights blink together for the first time?

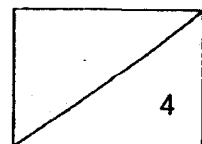
Ans. \_\_\_\_\_ min

---

- 16 Ahmad, Ben and Clarice shared 9036 crayons equally among themselves.  
Ahmad bought another 98 crayons for himself.  
How many crayons would Ahmad have in the end?

Ans: \_\_\_\_\_

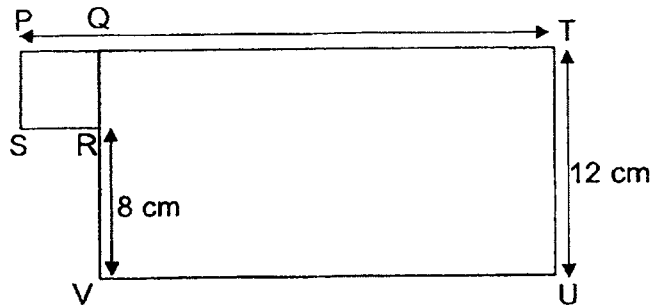
---



For Questions 17 and 18, show your workings clearly in the space below each question and write your answers in the spaces provided. (8 marks)

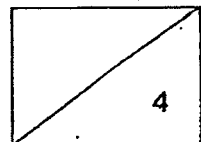
---

17 In the figure below, PQRS is a square and QTUV is a rectangle.



The length of the rectangle is twice its breadth.  
Find the length of PT.

Ans: \_\_\_\_\_



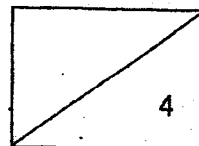



- 18 A table cost \$910 more than a chair.  
Tom paid \$7520 for 2 tables and 4 chairs.  
How much does a table cost?

Ans: \_\_\_\_\_

---

END OF PAPER





SCHOOL : RED SWASTIKA PRIMARY SCHOOL

LEVEL : PRIMARY 4

SUBJECT : MATH

TERM : TEST 1 2023

CONTACT :

---

Q1	Q2	Q3	Q4	Q5	Q6	Q7	Q8	Q9	Q10
3	2	4	3	1	1	4	3	2	1

11)	8006
12)	
13)	

14)	3549
15)	12 min
16)	$9036 \div 3 = 3012$ $3012 + 98 = 3110$ <b>Ahmad will have 3110 crayons in the end.</b>
17)	$12\text{cm} \times 2 = 24\text{cm}$ $12\text{cm} - 8\text{cm} = 4\text{cm}$ $24\text{cm} + 4\text{cm} = 28\text{cm}$ <b>The length of PT is 28cm</b>
18)	$910 \times 2 = 1820$ $7520 - 1820 = 5700$ $5700 \div 6 = 950$ $950 + 910 = 1860$ <b>The table cost \$1860</b>