

METHODIST GIRLS' SCHOOL (PRIMARY)

Founded in 1887



MID-YEAR EXAMINATION 2019 PRIMARY 5 MATHEMATICS

PAPER 1 (BOOKLET A)

Total Time for Booklets A and B : 1 hour

INSTRUCTIONS TO CANDIDATES

Do not turn over this page until you are told to do so.

Follow all instructions carefully.

Answer all questions.

Shade your answers in the Optical Answer Sheet (OAS) provided.

The use of calculators is not allowed.

Name: _____ ()

Class: Primary 5. _____

Date: 16 May 2019

Parent's Signature : _____

This booklet consists of 7 printed pages including this page.

Questions 1 to 10 carry 1 mark each. Questions 11 to 15 carry 2 marks each. For each question, four options are given. One of them is the correct answer. Make your choice (1, 2, 3 or 4). Shade the correct oval (1, 2, 3 or 4) on the Optical Answer Sheet.

(20 marks)

1 The value of the digit 5 in 650 841 is _____.

- (1) 50
- (2) 500
- (3) 5000
- (4) 50 000

2 Find the value of $4 + 5 \times (60 - 30) \div 10$.

- (1) 19
- (2) 27
- (3) 301
- (4) 537

3 A number becomes 60 000 when rounded to the nearest thousand.
Which one of the following could be the number?

- (1) 59 187
- (2) 59 783
- (3) 60 978
- (4) 61 054

4 Which one of the following is not the same as $\frac{4}{9}$?

(1) $4 \div 9$

(2) $\frac{1}{2} \times \frac{8}{9}$

(3) $9 \div 4$

(4) $4 \times \frac{1}{9}$

5 Express $5\frac{3}{7}$ as a decimal correct to 2 decimal places.

(1) 0.37

(2) 5.37

(3) 5.42

(4) 5.43

6 Express $\frac{27}{36}$ in the simplest form.

(1) $\frac{3}{4}$

(2) $\frac{12}{16}$

(3) $\frac{15}{20}$

(4) $\frac{18}{24}$

7 What is the difference between $7\frac{1}{2}$ and $2\frac{3}{4}$?

(1) $4\frac{3}{4}$

(2) $5\frac{1}{4}$

(3) $5\frac{3}{4}$

(4) $10\frac{1}{4}$

8 $\square - \frac{5}{6} = 2\frac{1}{4}$

What is the missing fraction in the box?

(1) $1\frac{1}{12}$

(2) $1\frac{5}{12}$

(3) $2\frac{3}{5}$

(4) $3\frac{1}{12}$

9 Which one of the following is the same as $3 \times \frac{2}{7}$?

(1) $3 \times 2 \times 7$

(2) $3 \times 2 \times \frac{1}{7}$

(3) $\frac{2}{7} \times \frac{2}{7} \times \frac{2}{7}$

(4) $3 \times \frac{2}{7} \times \frac{1}{7}$

10 $18 : 27 = 8 : \square$

What is the missing number in the box?

- (1) 17
- (2) 2
- (3) 3
- (4) 12

11 Ravi and Paul were given a sum of \$56. Ravi received \$32. What was the ratio of Ravi's share to Paul's share?

- (1) 3 : 4
- (2) 4 : 7
- (3) 4 : 3
- (4) 7 : 4

12 Cindy bought some cupcakes from a shop. For every 10 cupcakes that Cindy paid, she received another 2 cupcakes free. Cindy had a total of 240 cupcakes from the shop in the end. How many free cupcakes did Cindy receive?

- (1) 20
- (2) 24
- (3) 40
- (4) 48



2 free cupcakes
for every 10
cupcakes bought

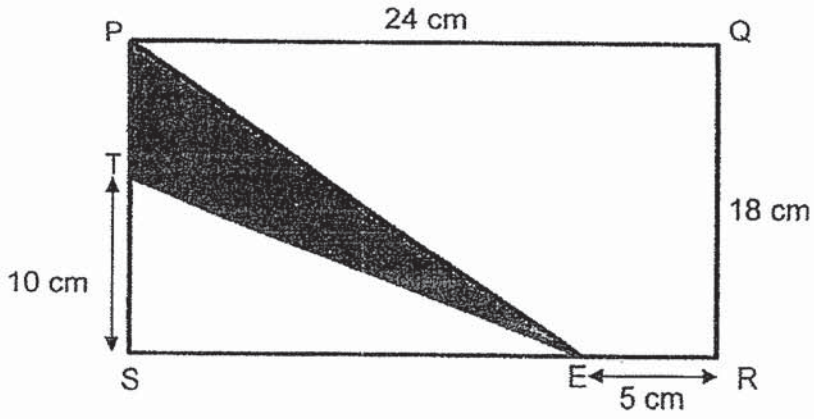
13 The ratio of Henry's age to his uncle's age is 3 : 5.
Henry is 30 years younger than his uncle. How old is Henry's uncle?

- (1) 18 years old
- (2) 45 years old
- (3) 48 years old
- (4) 75 years old

14 Mrs Lim had some money. She used $\frac{1}{5}$ of it to buy a skirt and $\frac{2}{3}$ of the remaining money to buy a bag. What fraction of the money had she left?

- (1) $\frac{2}{15}$
- (2) $\frac{4}{15}$
- (3) $\frac{7}{15}$
- (4) $\frac{8}{15}$

- 15 In the figure below, PQRS is a rectangle and PET is a triangle.
Find the area of the shaded triangle.



- (1) 76 cm^2
- (2) 95 cm^2
- (3) 96 cm^2
- (4) 171 cm^2

METHODIST GIRLS' SCHOOL (PRIMARY)

Founded in 1887



MID-YEAR EXAMINATION 2019 PRIMARY 5 MATHEMATICS

PAPER 1 (BOOKLET B)

Total Time for Booklets A and B : 1 hour

INSTRUCTIONS TO CANDIDATES

Do not turn over this page until you are told to do so.

Follow all instructions carefully.

Answer all questions.

Write your answers in this booklet.

The use of calculators is not allowed.

Name: _____ ()

Class: Primary 5. _____

Date: 16 May 2019

Parent's Signature : _____

Paper 1 Booklet A	/ 20
Paper 1 Booklet B	/ 25
Paper 2	/ 55
TOTAL	/ 100

This booklet consists of 8 printed pages including this page

Questions 16 to 20 carry 1 mark each. Write your answers in the spaces provided. For questions which require units, give your answers in the units stated. (5 marks)

Do not write in this space

16 Write two million, fifty-three thousand and seventeen in figures.

Ans: _____

17 Find the value of 350×6000 .

Ans: _____

18 $\frac{6}{25} \times \frac{5}{9} = \square$

What is the missing fraction in the box? Give your answer in the simplest form.

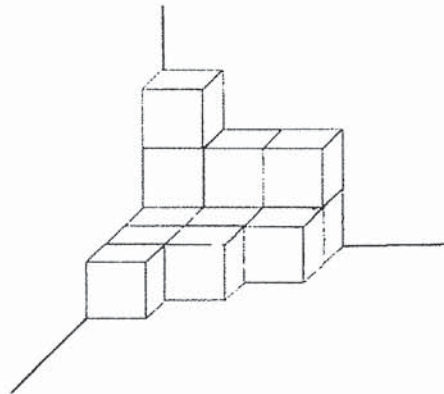
Ans: _____

Do not write
in this space

- 19 A dining table has a mass of 31 kg. It is 6 times as heavy as a chair.
What is the mass of the chair in kilograms?

Ans: _____ kg

- 20 The solid shown below is made up of identical 1-cm cubes. The cubes are stacked up on top of one another. What is the volume of the solid?



Ans: _____ cm³

Questions 21 to 30 carry 2 marks each. Show your working clearly and write your answers in the spaces provided. For questions which require units, give your answers in the units stated. (20 marks)

21 A rectangle measures $\frac{12}{5}$ m by $\frac{8}{9}$ m.

What is the area of the rectangle? Give your answer as a mixed number in the simplest form.

Ans: _____ m²

22 Mr Loh participated in a 10-km marathon. He ran $4\frac{2}{3}$ km for the first part of the race. What is the distance he would have to run to complete the marathon?

Ans: _____ km


23 There are 1632 pupils in Harmony Primary School. $\frac{3}{8}$ of them are boys. $\frac{1}{6}$ of the girls wear spectacles. How many girls wear spectacles?

Ans: _____

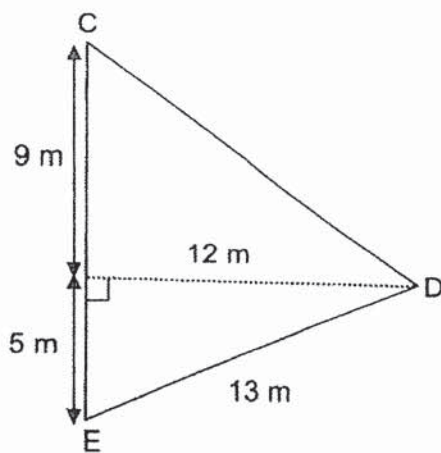
- 24 Ali bought $2\frac{3}{4}$ m of ribbon. A metre of ribbon cost \$8.
How much did he pay for the ribbon?

Do not write
in this space


Ans: \$ _____



- 25 What is the area of triangle CDE as shown in the figure?

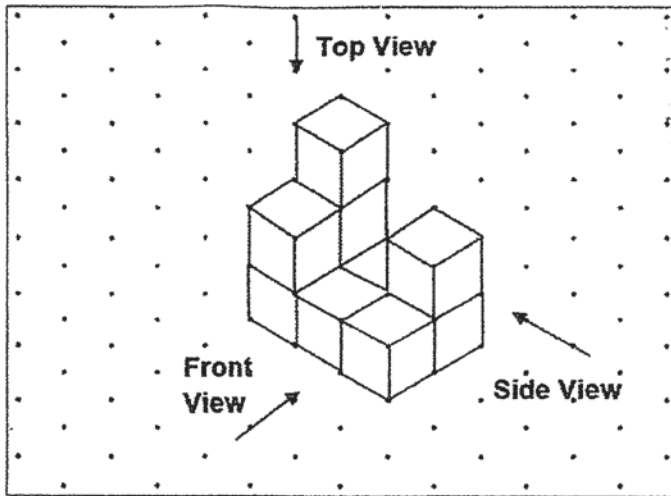


Ans: _____ m²



- 26 The solid below is made up of **10 unit cubes** which are glued together as shown below.

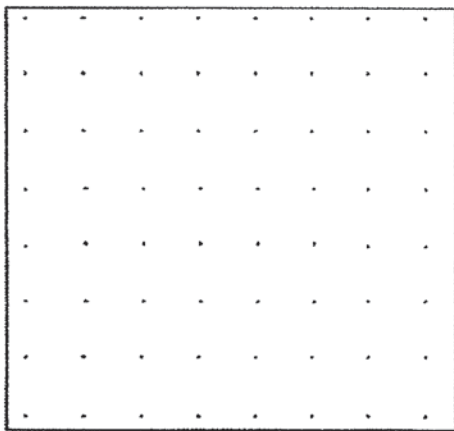
Do not write in this space



Draw:


- (a) the top view (seen from the front) of the solid
 (b) the front view of the solid.

(a)



Top View

(b)



Front View



- 27 After spending \$24 on a storybook and \$12 on some pens, Samad had \$4 left. Find the ratio of the total amount of money Samad spent on the two items to the amount of money he had left. Give your answer in its simplest form.

Do not write
in this space

Ans: _____

- 28 Gerald used blue and yellow balloons to decorate a hall. The ratio of the number of blue balloons to the number of yellow balloons was 5 : 7. He used 156 balloons altogether. How many more yellow balloons than blue balloons did Gerald use?

Ans: _____

- 29 At a fruit stall, oranges are sold in packs of four and apples are sold in packs of three. The cost of a pack of oranges is the same as the cost of a pack of apples. Mrs Lee paid \$24 for 12 such apples. What was the cost of a pack of oranges?

Do not write
in this space

Ans: \$ _____

30. A pail weighs 9 kg when it is filled with Liquid X. The same pail weighs 15 kg when it is filled with Liquid Y. Liquid Y is twice as heavy as Liquid X. What is the mass of the pail when it is empty?

Ans: _____ kg

End of Booklet B

METHODIST GIRLS' SCHOOL (PRIMARY)

Founded in 1887



MID-YEAR EXAMINATION 2019 PRIMARY 5 MATHEMATICS

PAPER 2

Duration: 1h 30 min

INSTRUCTIONS TO CANDIDATES

Do not turn over this page until you are told to do so.

Follow all instructions carefully.

Answer all questions.

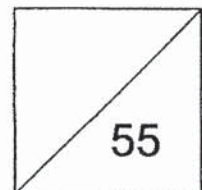
Write your answers in this booklet.

The use of an approved calculator is expected, where appropriate.

Name: _____ ()

Class: Primary 5. _____

Date: 16 May 2019



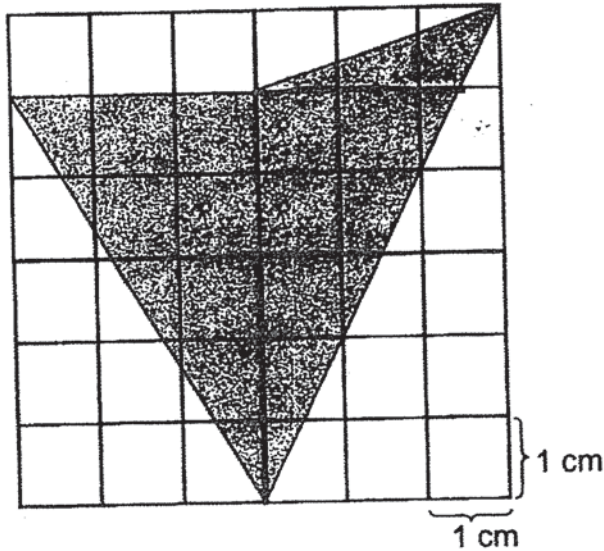
Parent's Signature: _____

This booklet consists of **13** printed pages including this page.

Questions 1 to 5 carry 2 marks each. Show your working clearly and write your answers in the spaces provided. For questions which require units, give your answers in the units stated. (10 marks)

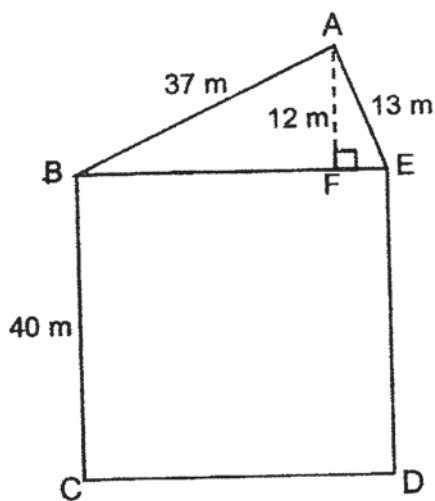
Do not write in this space

1 Find the area of the shaded figure.



Ans: _____ cm²

2 Figure ABCDE is made up of a square and a triangle. The square has a side of 40 m. AB = 37 m, AE = 13 m and AF = 12 m. What is the area of Figure ABCDE?



Ans: _____ m²

Do not write
in this space

- 3 There are 235 pupils in Room A and 567 pupils in Room B. A teacher transferred some pupils from Room B to Room A so that both rooms have the same number of pupils. How many pupils were there in each room after the transfer?

Ans: _____

- 4 Janice is 11 years old. Janice's sister is 5 years older than her. In how many years' time will their total age be 35 years old?

Ans: _____


5 $A \times \frac{5}{6} = B$

B is an improper fraction greater than 1.

Each statement below is either true, false or not possible to tell from the information given. For each statement, please put a tick (✓) in the correct column.

Statement	True	False	Not Possible To Tell
A is a proper fraction			
B is smaller than A.			

Do not write in this space



For questions 6 to 17, show your working clearly and write your answers in the space provided. The number of marks available is shown in brackets [] at the end of each question or part-question. (45 marks)

Do not write in this space

- 6 Ravi has some marbles. If he gives 7 marbles to each of his friends, he will have 4 marbles left. If he gives each of his friends 9 marbles, he will need another 2 more marbles. How many marbles does he have?

Ans: _____ [3]

- 7 Siti, Mary and Jay had some stickers. Siti had 3 times as many stickers as Jay. Siti had 22 more stickers than Mary. Mary and Jay had 58 stickers altogether. How many stickers did Siti have?

Ans: _____ [3]

Do not write
in this space


- 8 There are 3 boxes of books. There are 4 times as many books in Box B as in Box A. There are 138 more books in Box C than in Box B. The number of books in Box A is $\frac{1}{12}$ of the total number of books in the 3 boxes. How many books are there in Box C?

Ans: _____ [3]

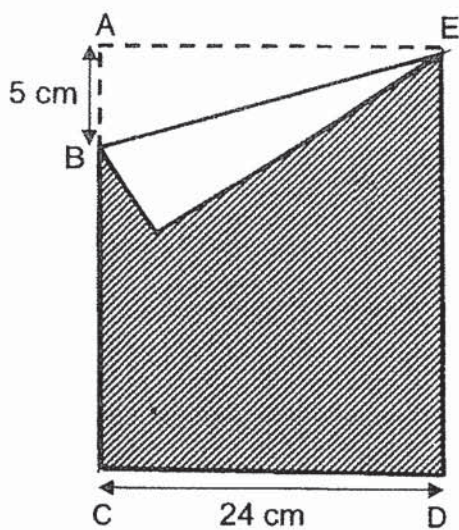
Do not write
in this space

- 9 Anna, Bernice and Cindy shared some stickers in the ratio 5: 4: 7.
Anna and Bernice had 81 stickers altogether. How many stickers did
the three girls share altogether?


Ans: _____ [3]



- 10 The figure below shows a rectangular piece of paper ACDE with an
area of 744 cm^2 . It is folded along EB. What is the area of the shaded
figure?



Ans: _____ [3]



- 11 Tom and Zac each had an equal amount of money. Every day, Tom spent \$16 and Zac spent \$28. When Zac had used up all his money, Tom still had \$240 left. How much money did each of them have at first?

Ans: _____ [4]

-
- 12 Priscilla bought some files and erasers for \$16. She bought 6 more erasers than files. A file costs 80 cents and an eraser cost 50 cents.
- (a) How many files did Priscilla buy?
- (b) How much did Priscilla pay for the erasers?

Ans: (a) _____ [2]

(b) _____ [2]

Do not write
in this space

13 Mrs Lim bought 10 l of milk. She drank $\frac{5}{8}$ l of it. She used $\frac{1}{3}$ of the remaining milk to make yoghurt.


(a) How much milk was left after Mrs Lim drank some of it?

(b) How much milk was left in the end?

Give your answers in the simplest form.

Ans: (a) _____ [2]

(b) _____ [2]



Do not write
in this space

- 14 Mrs Chong had some flour. She used $\frac{1}{5}$ of it to bake a cake and $\frac{2}{7}$ of it to make a pizza. She then gave her neighbour 950 g of flour. She was left with 850 g of flour. How much flour did Mrs Chong use to make a pizza? Give your answer in kilograms.

Ans: _____ [4]




Do not write
in this space

- 15 There were some spectators watching a tennis match.
 $\frac{3}{4}$ of them were men and women. $\frac{5}{6}$ of them were men and children. 63 spectators were men.

- (a) What fraction of the spectators were men ?
(b) How many spectators were there at the tennis match?

Ans: (a) _____ [2]


(b) _____ [2]



Do not write
in this space

- 16 Zen spent \$255 on a bag and a belt. She wanted to buy another similar bag with the remaining money but was short of \$30. In the end, she bought another similar belt and had \$15 left in the end.
- (a) How much more did the bag cost than the belt?
- (b) How much did the belt cost?

Ans: (a) _____ [2]
(b) _____ [3]




- 17 A tailor spent $\frac{5}{9}$ of her money to buy 90 red buttons. She spent $\frac{7}{12}$ of the remaining money to buy blue buttons. She had \$150 left. A red button cost twice as much as a blue button.

- (a) What was the cost of the red buttons?
(b) What was the cost of one blue button?

Do not write
in this space

Ans: (a) _____ [3]

(b) _____ [2]



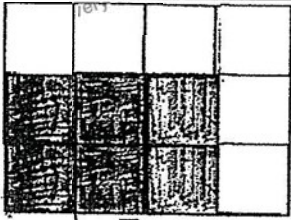
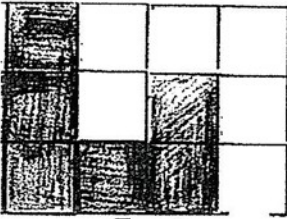
ANSWER KEY

YEAR : 2019
LEVEL : PRIMARY 5
SCHOOL : METHODIST GIRLS' SCHOOL (PRIMARY)
SUBJECT : MATHEMATICS
TERM : SA1

PAPER ONE : BOOKLET A

Q1	Q2	Q3	Q4	Q5	Q6	Q7	Q8
4	1	2	3	4	1	1	4
Q9	Q10	Q11	Q12	Q13	Q14	Q15	
2	4	3	3	4	2	1	

PAPER ONE : BOOKLET B

Q16	2 053 017
Q17	2 100 000
Q18	$\frac{2}{15}$
Q19	$5\frac{1}{6} \text{ kg}$
Q20	13cm^3
Q21	$\frac{12}{5} \times \frac{8}{9} = \frac{96}{45} = 2\frac{2}{15} \text{ m}^2$
Q22	$5\frac{1}{3} \text{ km}$
Q23	$1 - \frac{3}{8} = \frac{5}{8}$ $1632 \times \frac{5}{8} \times \frac{1}{6} = 170 \text{ girls}$
Q24	$2\frac{3}{4} = \frac{11}{4}$ $\frac{11}{4} \times \$8 = \22
Q25	$2 \times (9 + 5) = 84\text{m}^2$
Q26	<div style="display: flex; justify-content: space-around; align-items: center;"> <div style="text-align: center;">  <p>Top</p> </div> <div style="text-align: center;">  <p>Front</p> </div> </div>
Q27	$24 + 12 : 4$ $36 : 4$ Ans : 9 : 1

Q28	$B : Y : T \rightarrow 5 : 7 : 12$ $12u \rightarrow 156$ $1u \rightarrow 156 \div 12 = 13$ $7u - 5u = 2u \rightarrow 13 \times 2 = 26$										
Q29	$12 \div 3 = 4$ $\$24 \div 4 = \6										
Q30	<table border="1"> <tr> <td>X</td> <td>Pail</td> <td>1u</td> <td></td> </tr> <tr> <td>Y</td> <td>Pail</td> <td>1u</td> <td>1u</td> </tr> </table>	X	Pail	1u		Y	Pail	1u	1u	$1u = 15 - 9 = 6$ $\text{Pail} = 9 - 6 = 3\text{kg}$	
X	Pail	1u									
Y	Pail	1u	1u								

PAPER B:

Q1	$\left[\frac{1}{2} \times 5 \times 3 \right] \times 2 = 15\text{cm}^2$
Q2	$\text{Area of BCDE} = 40 \times 40 = 1600\text{m}^2$ $\text{Area of } \triangle ABR = \frac{1}{2} \times 40 \times 12 = 240\text{m}^2$ $\text{Total area} = 1600 + 240 = 1840\text{m}^2$
Q3	$\text{Total pupils} \rightarrow 235 + 567 = 802$ $\text{Equally transfer} \rightarrow 802 \div 2 = 401\text{pupils}$
Q4	$\text{Total age now} \rightarrow 11 + 11 + 5 = 27$ $\text{Total diff} \rightarrow 35 - 27 = 8$ $\text{Time to reach total 35} \rightarrow 8 \div 2 = 4$
Q5	i) False ii) True
Q6	$\text{Multiple of 7} \rightarrow 7 \ 14 \ 21 \ 28 \ 35$ $\quad +4 \quad \rightarrow 11 \ 18 \ \{25\} \ 32 \ 39$ $\text{Multiple of 9} \rightarrow 9 \ 18 \ 27 \ 36 \ 45$ $\quad -2 \quad \rightarrow 7 \ 16 \ \{25\} \ 34 \ 43$ Ans : 25
Q7	$\text{Mary} + 22 + \text{Jay} = \text{Siti} + \text{Jay}$ $58 + 22 = \text{Siti} + \text{Jay}$ $\text{Siti} \ \& \ \text{Jay} \rightarrow 80 \rightarrow 4u$ $1u = 80 \div 4 = 20$ $3u = 20 \times 3 = 60$

Q8	<table border="1" data-bbox="320 152 836 297"> <tbody> <tr> <td>A</td> <td></td> <td></td> <td></td> <td></td> <td></td> </tr> <tr> <td>B</td> <td></td> <td></td> <td></td> <td></td> <td></td> </tr> <tr> <td>C</td> <td></td> <td></td> <td></td> <td></td> <td>138</td> </tr> </tbody> </table> <p>Total 12 unit $12u - 9u = 138$ $3u = 138$ $1u = 138 \div 3 = 46$ $4u + 138 = 4 \times 46 + 138$ $= 322 \text{ books}$</p>	A						B						C					138
A																			
B																			
C					138														
Q9	<p>$A : B : C : T \rightarrow 5 : 4 : 7 : 16$ $9u \rightarrow 81$ $1u \rightarrow 81 \div 9 = 9$ $16u \rightarrow 9 \times 16 = 144$</p>																		
Q10	<p>$\left[\frac{1}{2} \times 5 \times 24 \right] \times 2 = 120$ $744 - 120 = 624 \text{cm}^2$</p>																		
Q11	<p>$28 - 16 = 12$ $240 \div 12 = 20$ $28 \times 20 = \\$560$</p>																		
Q12	<p>$\\$0.80 + \\$0.50 = \\$1.30$ $6 \times \\$0.50 = \\3 $\\$16.00 - \\$3.00 = \\$13.00$ $\\$13.00 \div \\$1.30 = 10 \text{ sets}$ Ans (a) $\rightarrow 10 \text{ files}$ $10 + 6 = 16$ $16 \times \\$0.50 = \\8 Ans (b) $\rightarrow \\$8$</p>																		
Q13	<p>(a) $10 - \frac{5}{8} = 9\frac{3}{8} \text{L}$ $9\frac{3}{8} \times \frac{2}{3} = \frac{75}{8} \times \frac{2}{3} = \frac{25}{4} = 6\frac{1}{4} \text{L}$</p>																		
Q14	<p>$\frac{2}{5} + \frac{7}{7} = \frac{7}{35} + \frac{10}{35} = \frac{17}{35}$ $1 - \frac{17}{35} = \frac{18}{35}$ $18u \rightarrow 950 + 850 = 1800\text{g}$ $10u \rightarrow 1800 \div 18 \times 10 = 1000\text{g}$ $1000\text{g} = 1\text{kg}$ Answer : 1kg</p>																		

Q15														
	Women				Men				Children					
	a) $\frac{7}{12}$ b) $1u \rightarrow 63 \div 7 = 9$ $9 \times 12 = 108$													
Q16	(a) Diff bag and belt $\rightarrow \$30 + \$15 = \$45$ (b) $\$255 - \$45 = \$210$ 1 Belt $\rightarrow \$210 \div 2 = \105													
Q17	Red : Blue : Money $\rightarrow 15 : 7 : 5$ $5u \rightarrow \$150$ $1u \rightarrow \$150 \div 3 = \50 $15u \rightarrow \$50 \times 15 = \450 Ans (a) $\rightarrow \$450$ $\$450 \div 90 = \5.00 Ans (b) $\rightarrow \$5.00 \div 2 = \2.50													

h
2ND